

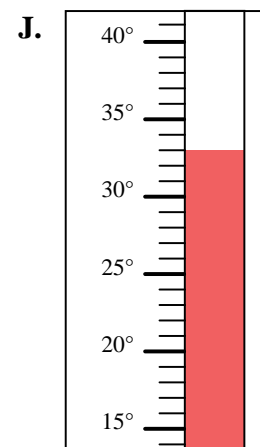
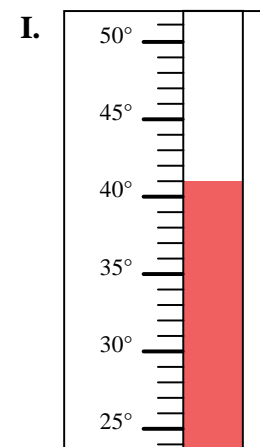
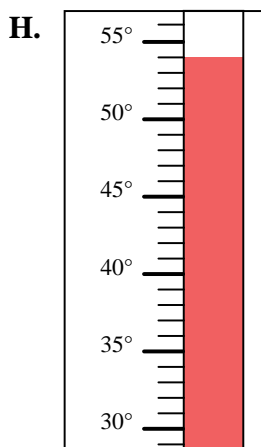
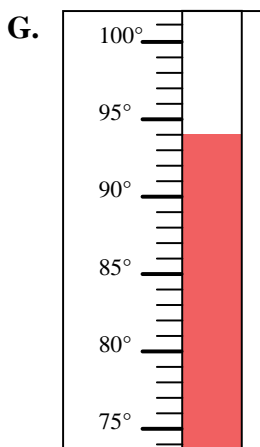
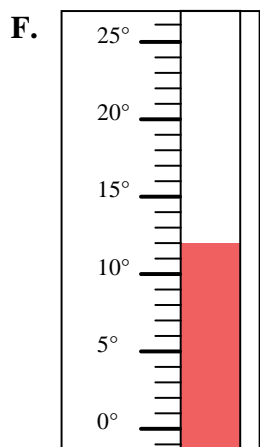
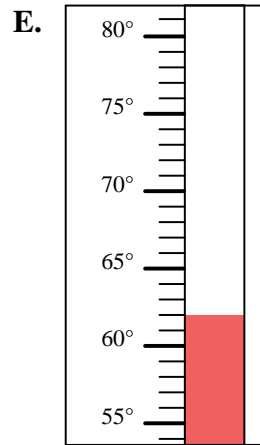
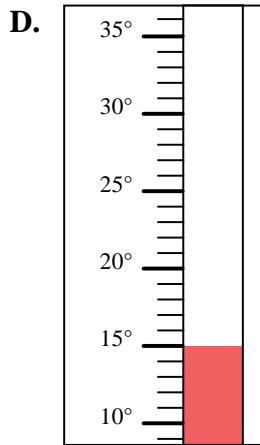
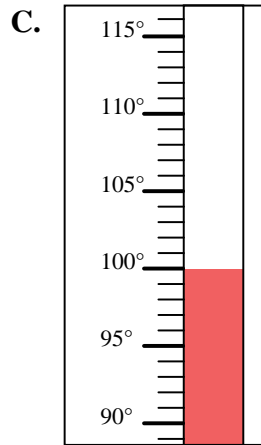
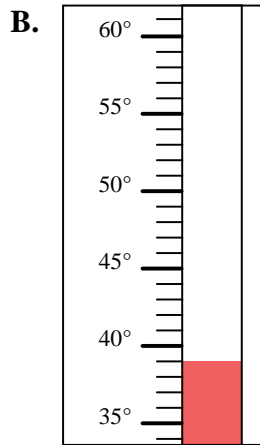
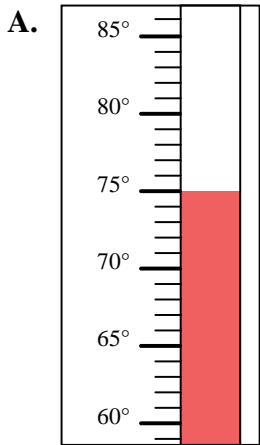


Determine which letter best answers each question.

Answers

- 1) Which thermometer best represents the temperature 39°?
- 2) Which thermometer best represents the temperature 12°?
- 3) Which thermometer best represents the temperature 75°?
- 4) Which thermometer best represents the temperature 100°?
- 5) Which thermometer best represents the temperature 33°?
- 6) Which thermometer best represents the temperature 15°?
- 7) Which thermometer best represents the temperature 94°?
- 8) Which thermometer best represents the temperature 54°?
- 9) Which thermometer best represents the temperature 62°?
- 10) Which thermometer best represents the temperature 41°?

1. _____
2. _____
3. _____
4. _____
5. _____
6. _____
7. _____
8. _____
9. _____
10. _____





Determine which letter best answers each question.

- 1) Which thermometer best represents the temperature 39° ?
- 2) Which thermometer best represents the temperature 12° ?
- 3) Which thermometer best represents the temperature 75° ?
- 4) Which thermometer best represents the temperature 100° ?
- 5) Which thermometer best represents the temperature 33° ?
- 6) Which thermometer best represents the temperature 15° ?
- 7) Which thermometer best represents the temperature 94° ?
- 8) Which thermometer best represents the temperature 54° ?
- 9) Which thermometer best represents the temperature 62° ?
- 10) Which thermometer best represents the temperature 41° ?

Answers

1. **B**
2. **F**
3. **A**
4. **C**
5. **J**
6. **D**
7. **G**
8. **H**
9. **E**
10. **I**

