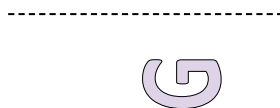
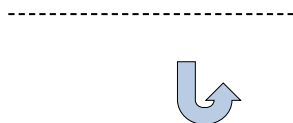

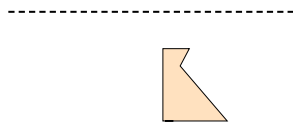
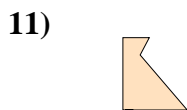

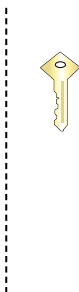
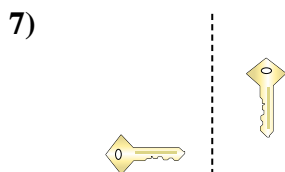
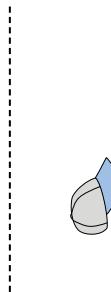
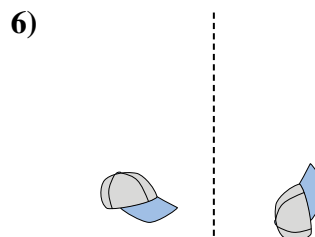
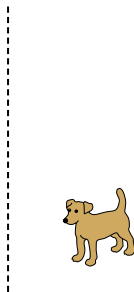


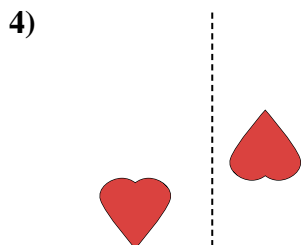


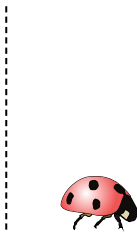





Determine if the shape is translating (slide), rotating (turn) or reflecting (flip).


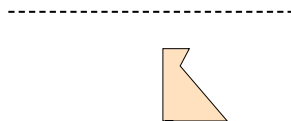
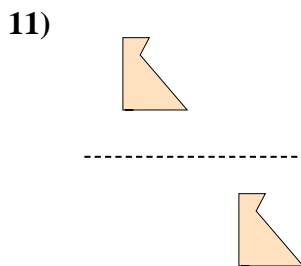
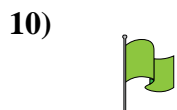

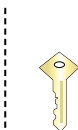
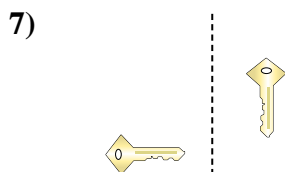

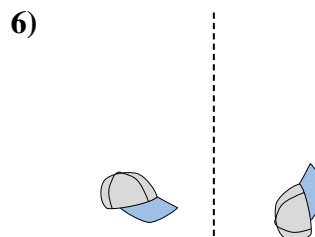
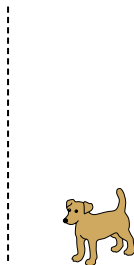

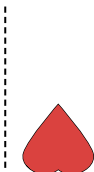
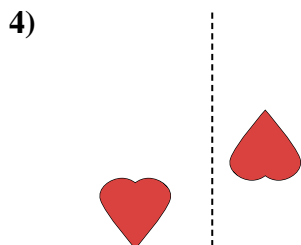


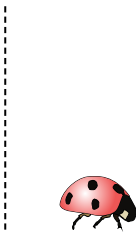
Answers



1. \_\_\_\_\_
2. \_\_\_\_\_
3. \_\_\_\_\_
4. \_\_\_\_\_
5. \_\_\_\_\_
6. \_\_\_\_\_
7. \_\_\_\_\_
8. \_\_\_\_\_
9. \_\_\_\_\_
10. \_\_\_\_\_
11. \_\_\_\_\_
12. \_\_\_\_\_
13. \_\_\_\_\_
14. \_\_\_\_\_
15. \_\_\_\_\_



Determine if the shape is translating (slide), rotating (turn) or reflecting (flip).



Answers

1. translating

2. reflecting

3. translating

4. rotating

5. reflecting

6. rotating

7. rotating

8. translating

9. reflecting

10. reflecting

11. translating

12. rotating

13. translating

14. reflecting

15. rotating