




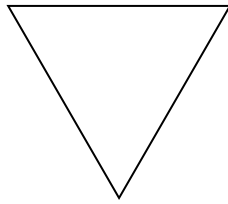
Determine if the shape shown is a regular shape or an irregular shape.

Answers

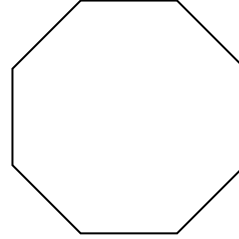
1)



2)



3)



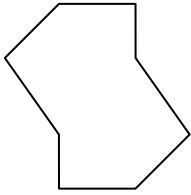
1. \_\_\_\_\_

2. \_\_\_\_\_

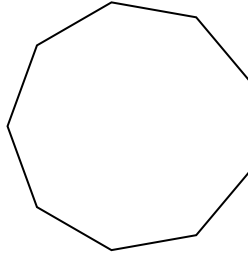
3. \_\_\_\_\_

4. \_\_\_\_\_

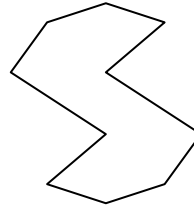
4)



5)



6)




5. \_\_\_\_\_

6. \_\_\_\_\_


7. \_\_\_\_\_

8. \_\_\_\_\_

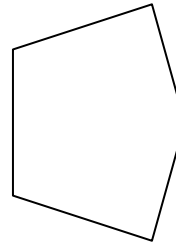
7)



8)



9)




9. \_\_\_\_\_

10. \_\_\_\_\_

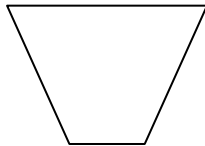
11. \_\_\_\_\_

12. \_\_\_\_\_

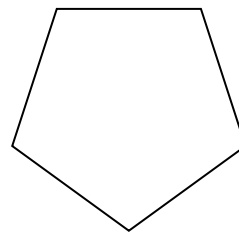
10)



11)



12)

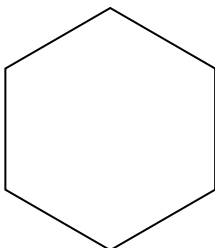


13. \_\_\_\_\_

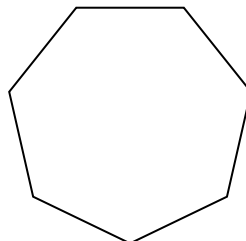
14. \_\_\_\_\_

15. \_\_\_\_\_

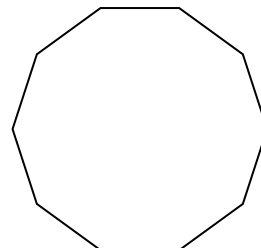
13)



14)




15)



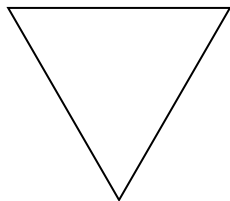


Determine if the shape shown is a regular shape or an irregular shape.

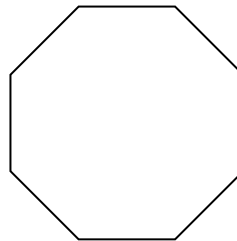
1)



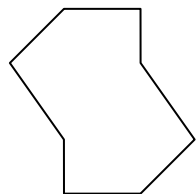
2)



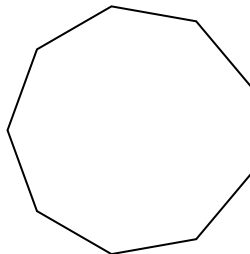
3)



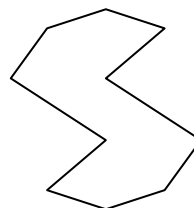
4)




5)




6)



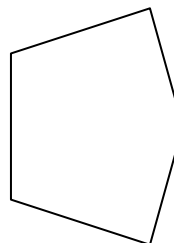
7)




8)



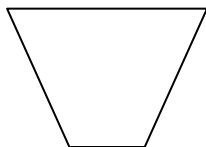
9)



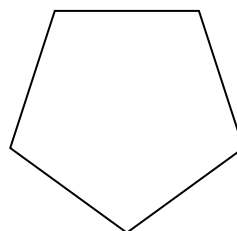
10)



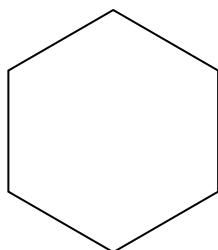
11)



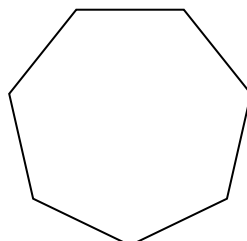
12)



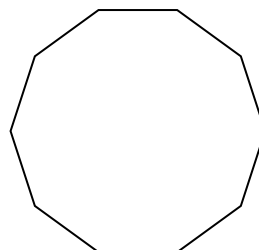
13)



14)



15)



Answers

1. Regular

2. Regular

3. Regular

4. Irregular

5. Regular

6. Irregular

7. Irregular

8. Irregular

9. Irregular

10. Irregular

11. Irregular

12. Regular

13. Regular

14. Regular

15. Regular