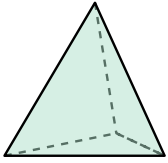




Determine which choice BEST describes the shape shown.

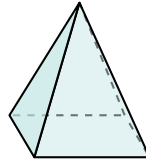
Answers

1)



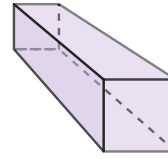
- A. triangular pyramid
- B. triangular prism
- C. rectangular prism
- D. cube

2)



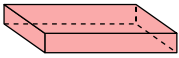
- A. cube
- B. triangular prism
- C. cone
- D. rectangular pyramid

3)



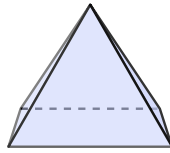
- A. triangular prism
- B. cylinder
- C. rectangular prism
- D. cone

4)




- A. cone
- B. triangular pyramid
- C. cylinder
- D. rectangular prism

5)



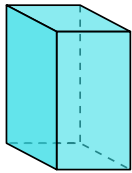
- A. sphere
- B. triangular pyramid
- C. cylinder
- D. rectangular pyramid

6)



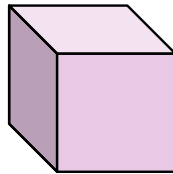
- A. cone
- B. triangular prism
- C. rectangular pyramid
- D. sphere

7)



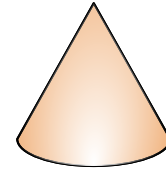
- A. cube
- B. triangular prism
- C. rectangular prism
- D. cone

8)



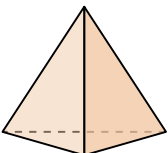
- A. cylinder
- B. cube
- C. rectangular pyramid
- D. triangular pyramid

9)



- A. cylinder
- B. rectangular prism
- C. triangular pyramid
- D. cone

10)



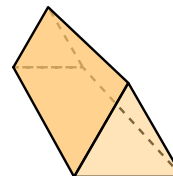
- A. cone
- B. triangular pyramid
- C. sphere
- D. triangular prism

11)



- A. cylinder
- B. cube
- C. triangular pyramid
- D. triangular prism

12)

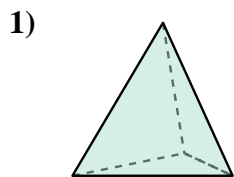


- A. cube
- B. rectangular pyramid
- C. triangular prism
- D. rectangular prism

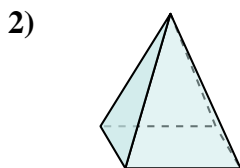
- 1. _____
- 2. _____
- 3. _____
- 4. _____
- 5. _____
- 6. _____
- 7. _____
- 8. _____
- 9. _____
- 10. _____
- 11. _____
- 12. _____



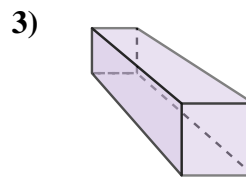
Determine which choice BEST describes the shape shown.



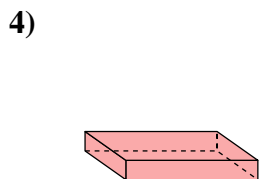
- A. triangular pyramid
- B. triangular prism
- C. rectangular prism
- D. cube



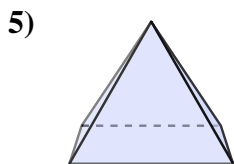
- A. cube
- B. triangular prism
- C. cone
- D. rectangular pyramid



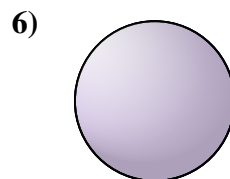
- A. triangular prism
- B. cylinder
- C. rectangular prism
- D. cone



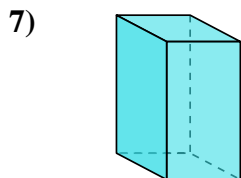
- A. cone
- B. triangular pyramid
- C. cylinder
- D. rectangular prism



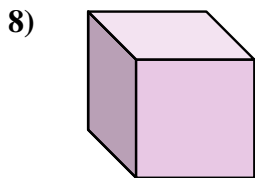
- A. sphere
- B. triangular pyramid
- C. cylinder
- D. rectangular pyramid



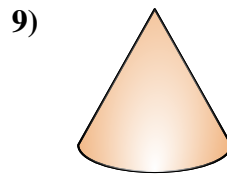
- A. cone
- B. triangular prism
- C. rectangular pyramid
- D. sphere



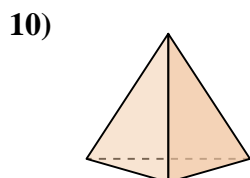
- A. cube
- B. triangular prism
- C. rectangular prism
- D. cone



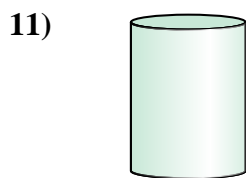
- A. cylinder
- B. cube
- C. rectangular pyramid
- D. triangular pyramid



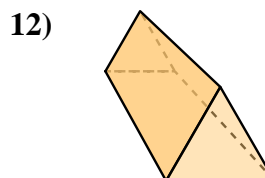
- A. cylinder
- B. rectangular prism
- C. triangular pyramid
- D. cone



- A. cone
- B. triangular pyramid
- C. sphere
- D. triangular prism



- A. cylinder
- B. cube
- C. triangular pyramid
- D. triangular prism



- A. cube
- B. rectangular pyramid
- C. triangular prism
- D. rectangular prism

Answers

- 1. **A**
- 2. **D**
- 3. **C**
- 4. **D**
- 5. **D**
- 6. **D**
- 7. **C**
- 8. **B**
- 9. **D**
- 10. **B**
- 11. **A**
- 12. **C**