




Determine if the shapes shown are 'similar', 'congruent' or 'neither'.

Answers

1)



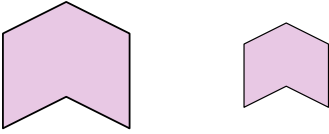
2)



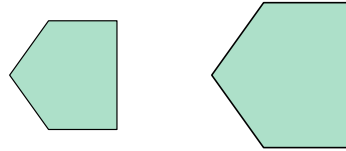
1. \_\_\_\_\_

2. \_\_\_\_\_

3)



4)

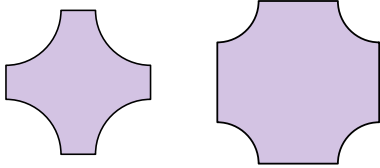


3. \_\_\_\_\_

4. \_\_\_\_\_

5. \_\_\_\_\_

5)



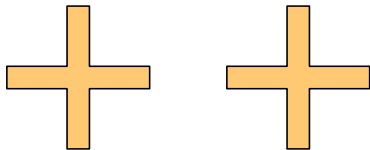
6)



6. \_\_\_\_\_

7. \_\_\_\_\_

7)



8)

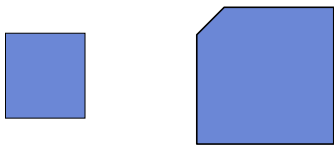


8. \_\_\_\_\_

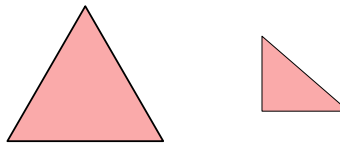
9. \_\_\_\_\_

10. \_\_\_\_\_

9)



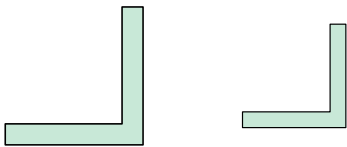
10)



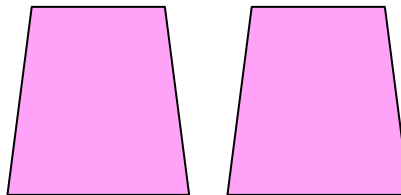
11. \_\_\_\_\_

12. \_\_\_\_\_

11)



12)



13. \_\_\_\_\_

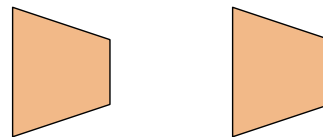
14. \_\_\_\_\_

15. \_\_\_\_\_

13)



14)



16. \_\_\_\_\_

15)



16)






Determine if the shapes shown are 'similar', 'congruent' or 'neither'.

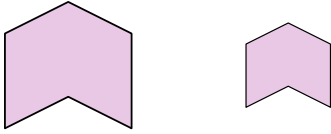
1)



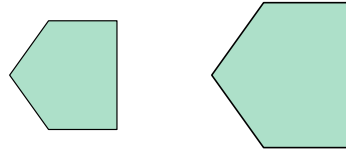
2)



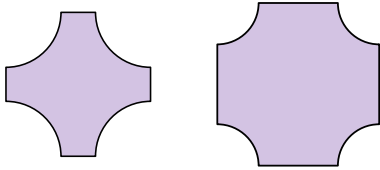
3)



4)



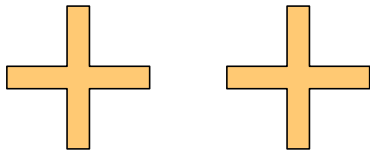
5)



6)



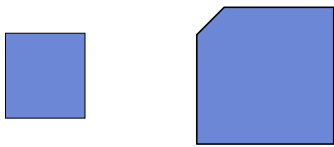
7)



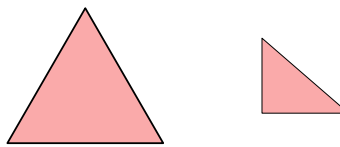
8)



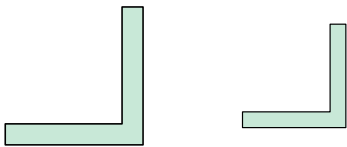
9)



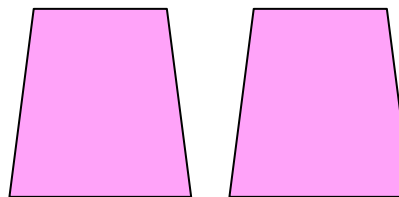
10)



11)



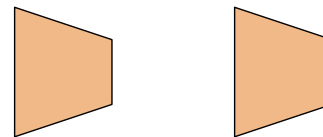
12)



13)



14)



15)



16)



Answers

1. similar

2. similar

3. similar

4. similar

5. neither

6. neither

7. congruent

8. congruent

9. neither

10. neither

11. similar

12. congruent

13. similar

14. congruent

15. similar

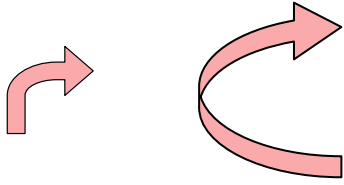
16. neither



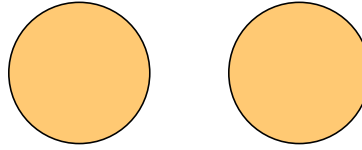
Determine if the shapes shown are 'similar', 'congruent' or 'neither'.

Answers

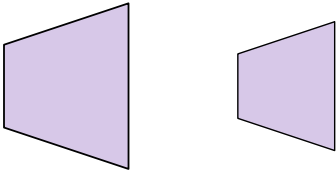
1)



2)



3)



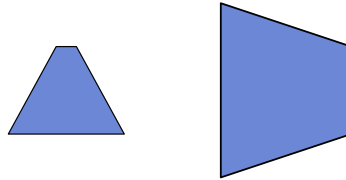
4)



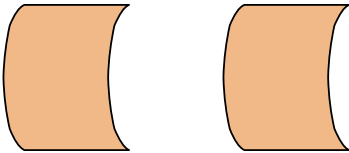
5)



6)



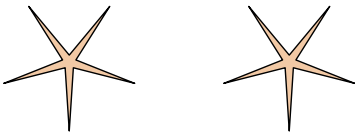
7)



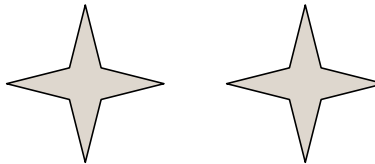
8)



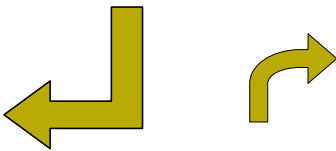
9)



10)



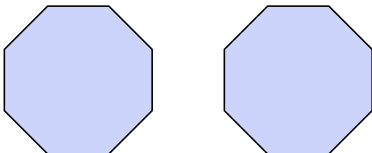
11)



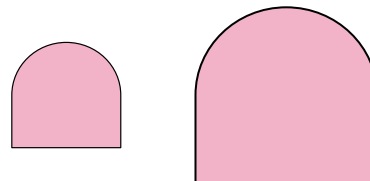
12)



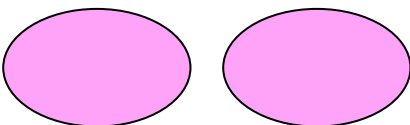
13)




14)



15)



16)



1. \_\_\_\_\_

2. \_\_\_\_\_

3. \_\_\_\_\_

4. \_\_\_\_\_

5. \_\_\_\_\_

6. \_\_\_\_\_

7. \_\_\_\_\_

8. \_\_\_\_\_

9. \_\_\_\_\_

10. \_\_\_\_\_

11. \_\_\_\_\_

12. \_\_\_\_\_

13. \_\_\_\_\_

14. \_\_\_\_\_

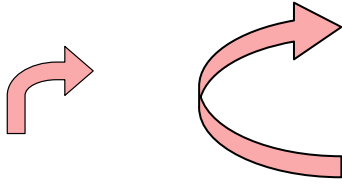
15. \_\_\_\_\_

16. \_\_\_\_\_

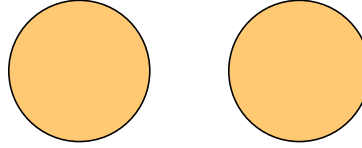


Determine if the shapes shown are 'similar', 'congruent' or 'neither'.

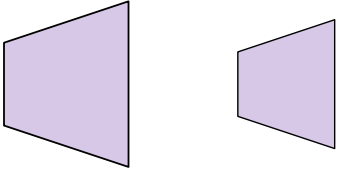
1)



2)



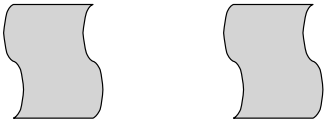
3)



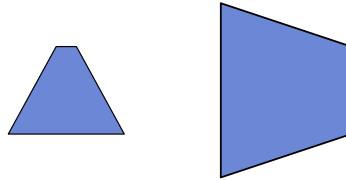
4)



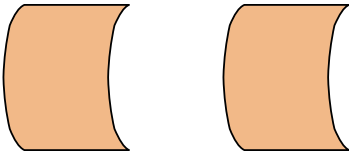
5)



6)



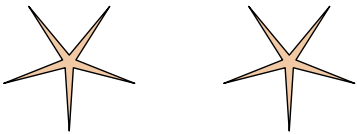
7)



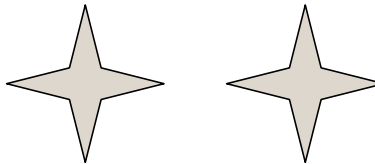
8)



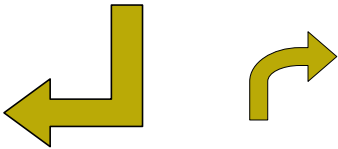
9)



10)



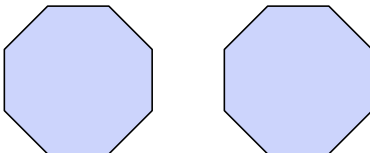
11)



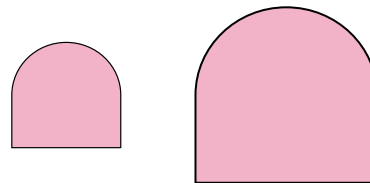
12)



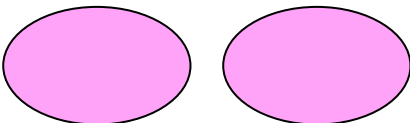
13)




14)



15)



16)



Answers

1. neither

2. congruent

3. similar

4. neither

5. congruent

6. neither

7. congruent

8. similar

9. congruent

10. congruent

11. neither

12. neither

13. congruent

14. similar

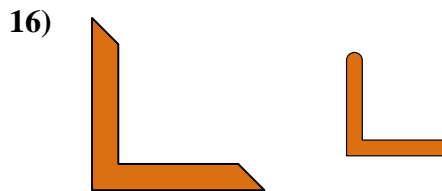

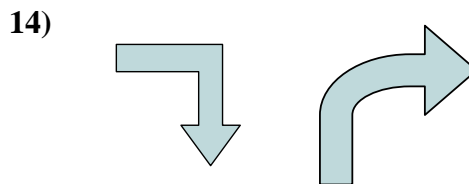
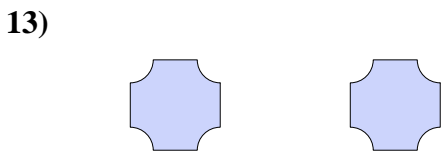
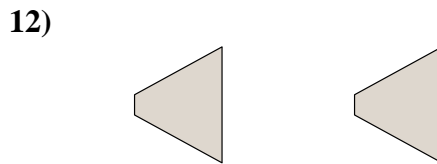
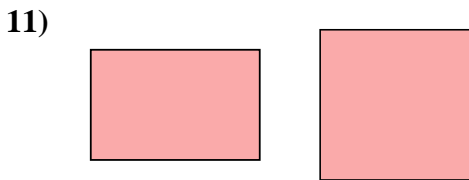
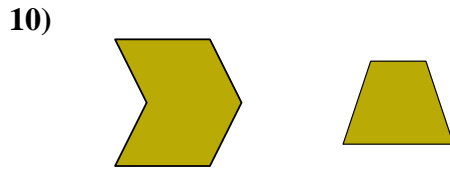
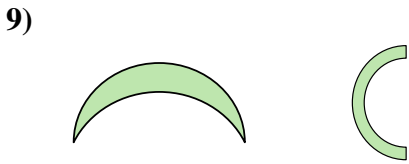
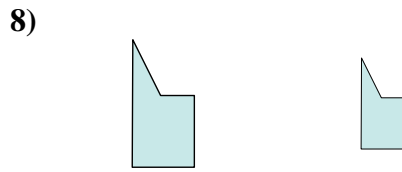
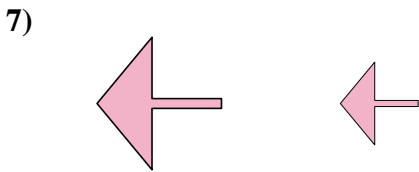
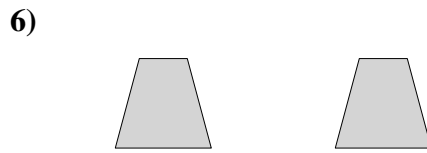

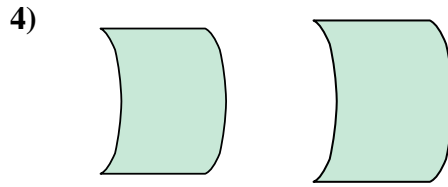
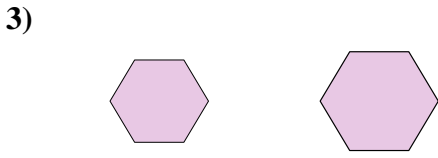
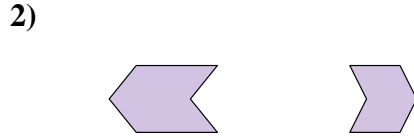
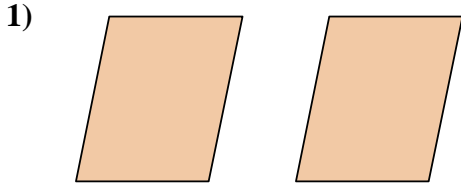
15. congruent

16. similar



Determine if the shapes shown are 'similar', 'congruent' or 'neither'.

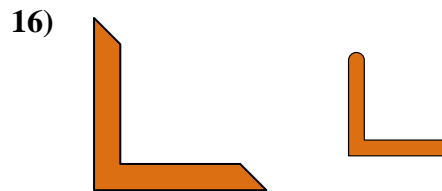

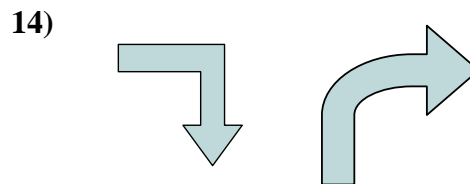
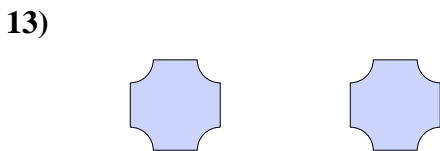
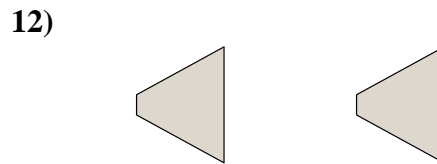
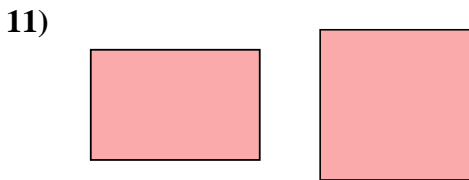
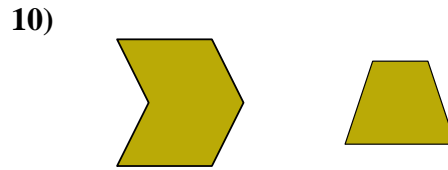
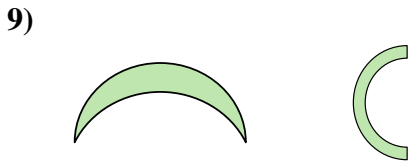
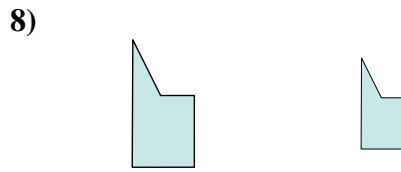
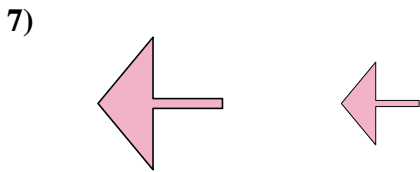
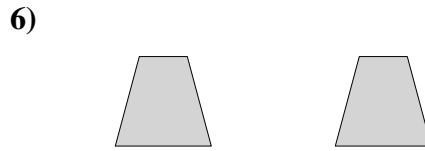

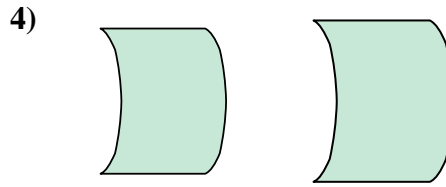
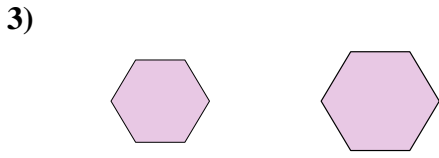
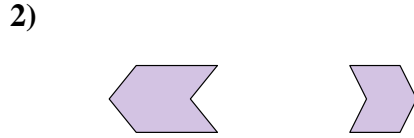
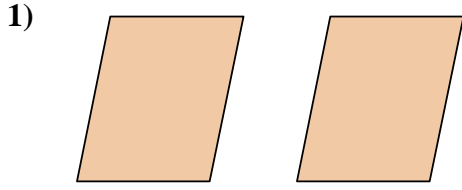
Answers



1. \_\_\_\_\_
2. \_\_\_\_\_
3. \_\_\_\_\_
4. \_\_\_\_\_
5. \_\_\_\_\_
6. \_\_\_\_\_
7. \_\_\_\_\_
8. \_\_\_\_\_
9. \_\_\_\_\_
10. \_\_\_\_\_
11. \_\_\_\_\_
12. \_\_\_\_\_
13. \_\_\_\_\_
14. \_\_\_\_\_
15. \_\_\_\_\_
16. \_\_\_\_\_



Determine if the shapes shown are 'similar', 'congruent' or 'neither'.



Answers

1. congruent

2. neither

3. similar

4. similar

5. similar

6. congruent

7. similar

8. similar

9. neither

10. neither

11. neither

12. congruent

13. congruent

14. neither

15. congruent

16. neither



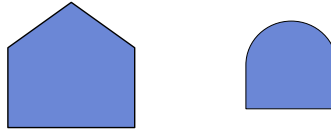
Determine if the shapes shown are 'similar', 'congruent' or 'neither'.

Answers

1)



2)



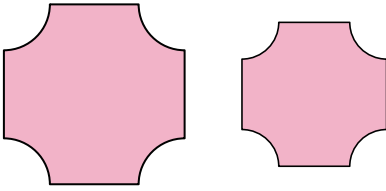
3)



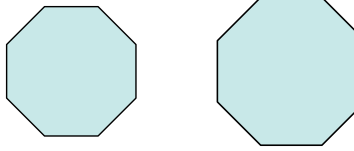
4)




5)



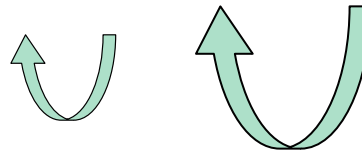
6)



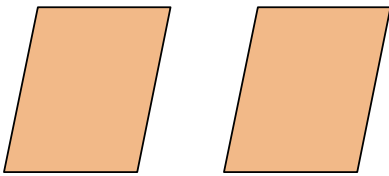
7)



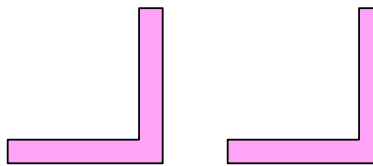
8)




9)




10)



11)



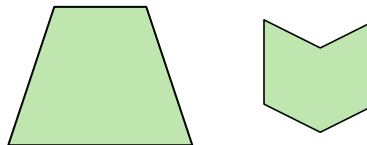
12)



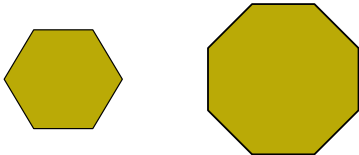
13)



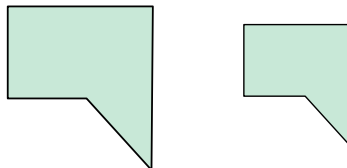
14)



15)



16)



1. \_\_\_\_\_

2. \_\_\_\_\_

3. \_\_\_\_\_

4. \_\_\_\_\_

5. \_\_\_\_\_

6. \_\_\_\_\_

7. \_\_\_\_\_

8. \_\_\_\_\_

9. \_\_\_\_\_

10. \_\_\_\_\_

11. \_\_\_\_\_

12. \_\_\_\_\_

13. \_\_\_\_\_

14. \_\_\_\_\_

15. \_\_\_\_\_

16. \_\_\_\_\_

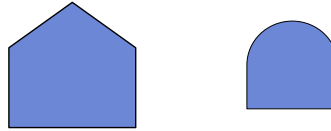


Determine if the shapes shown are 'similar', 'congruent' or 'neither'.

1)



2)



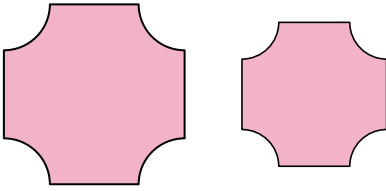
3)



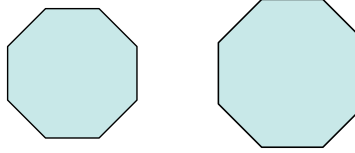
4)




5)



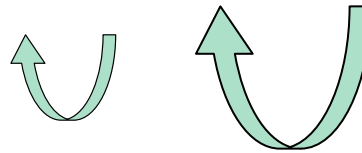
6)



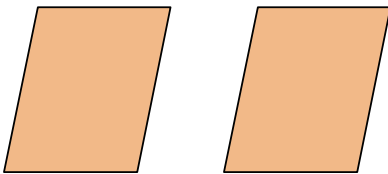
7)




8)




9)



10)



11)



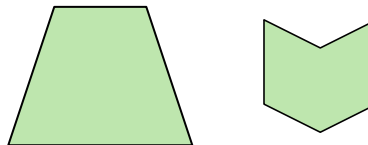
12)



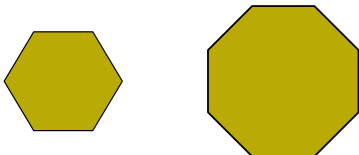
13)



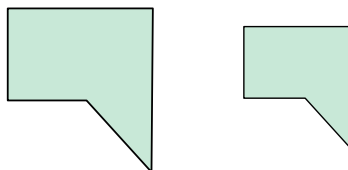
14)



15)



16)



Answers

1. congruent

2. neither

3. congruent

4. similar

5. similar

6. similar

7. similar

8. similar

9. congruent

10. congruent

11. congruent

12. neither

13. congruent

14. neither

15. neither

16. similar





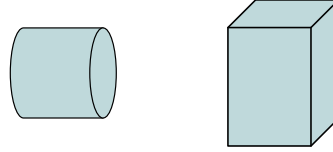
Determine if the shapes shown are 'similar', 'congruent' or 'neither'.

Answers

1)



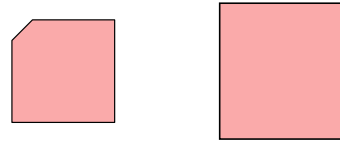
2)




3)



4)



5)



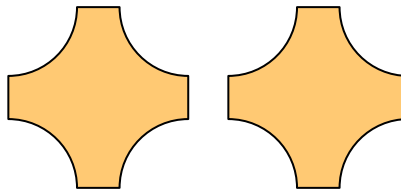
6)



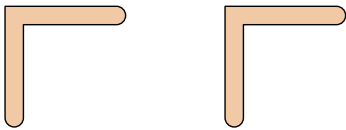
7)



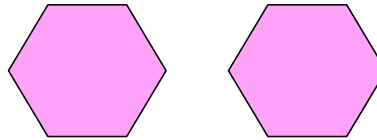
8)



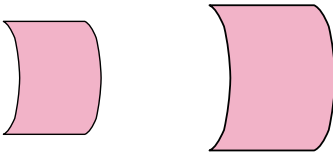
9)



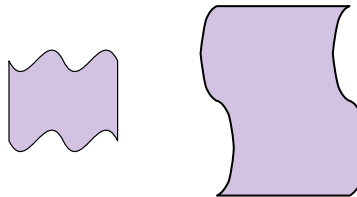
10)



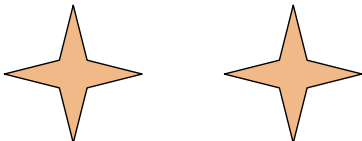
11)



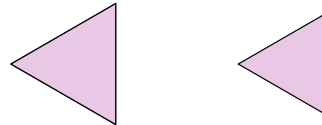
12)



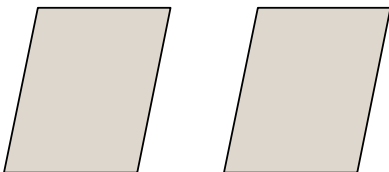
13)



14)



15)



16)



1. \_\_\_\_\_

2. \_\_\_\_\_

3. \_\_\_\_\_

4. \_\_\_\_\_

5. \_\_\_\_\_

6. \_\_\_\_\_

7. \_\_\_\_\_

8. \_\_\_\_\_

9. \_\_\_\_\_

10. \_\_\_\_\_

11. \_\_\_\_\_

12. \_\_\_\_\_

13. \_\_\_\_\_

14. \_\_\_\_\_

15. \_\_\_\_\_

16. \_\_\_\_\_

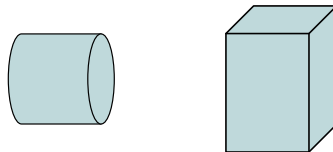


Determine if the shapes shown are 'similar', 'congruent' or 'neither'.

1)



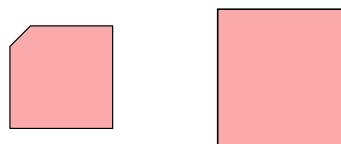
2)




3)



4)



5)



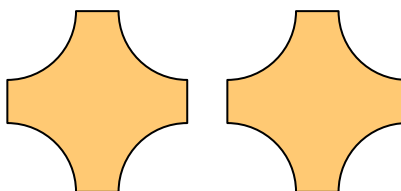
6)



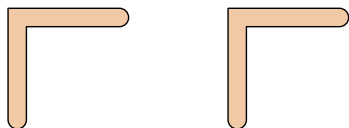
7)



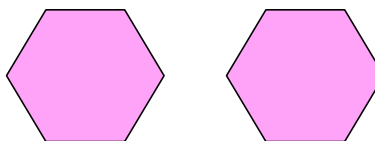
8)



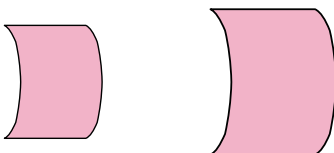
9)



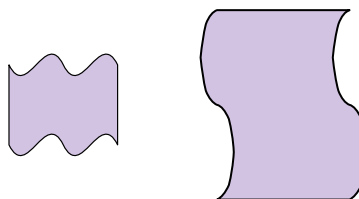
10)



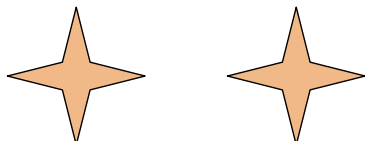
11)



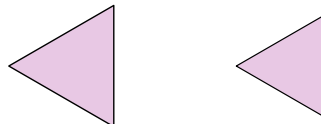
12)



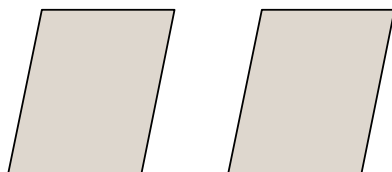
13)



14)



15)



16)



Answers

1. similar

2. neither

3. similar

4. neither

5. neither

6. congruent

7. similar

8. congruent

9. congruent

10. congruent

11. similar

12. neither

13. congruent

14. similar

15. congruent

16. neither



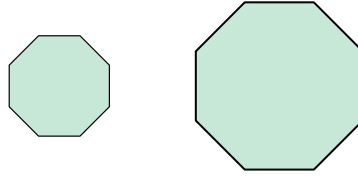
Determine if the shapes shown are 'similar', 'congruent' or 'neither'.

Answers

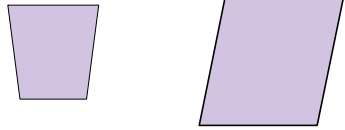
1)




2)



3)



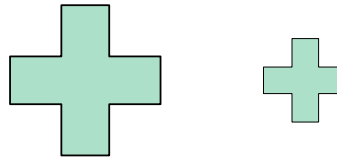
4)



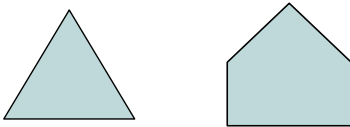
5)



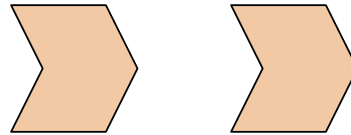
6)



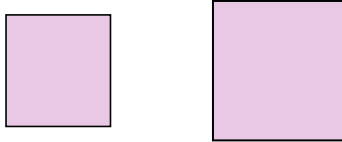
7)



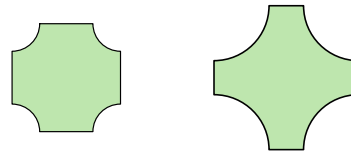
8)



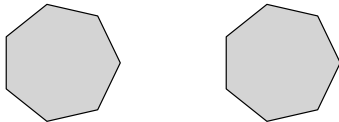
9)




10)



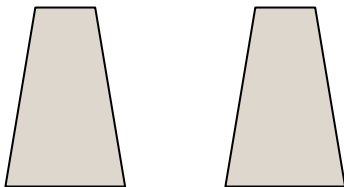
11)



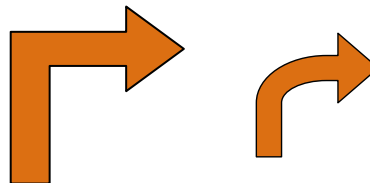
12)



13)



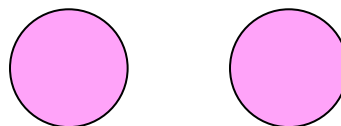
14)



15)



16)



1. \_\_\_\_\_

2. \_\_\_\_\_

3. \_\_\_\_\_

4. \_\_\_\_\_

5. \_\_\_\_\_

6. \_\_\_\_\_

7. \_\_\_\_\_

8. \_\_\_\_\_

9. \_\_\_\_\_

10. \_\_\_\_\_

11. \_\_\_\_\_

12. \_\_\_\_\_

13. \_\_\_\_\_

14. \_\_\_\_\_

15. \_\_\_\_\_

16. \_\_\_\_\_

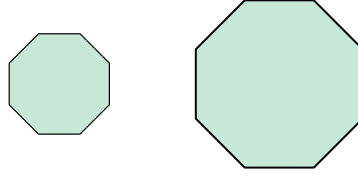


Determine if the shapes shown are 'similar', 'congruent' or 'neither'.

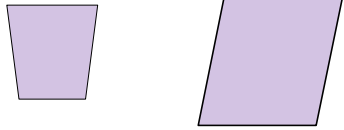
1)




2)



3)



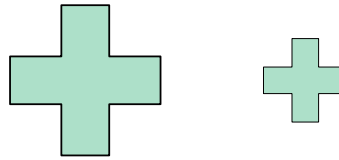
4)



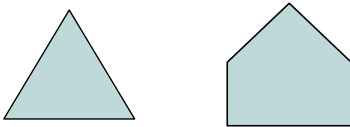
5)



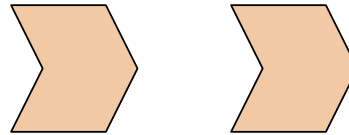
6)



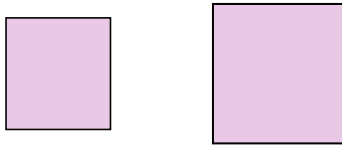
7)



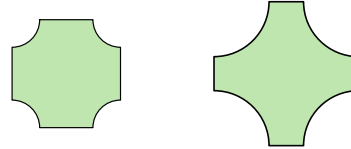
8)



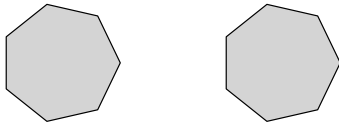
9)




10)



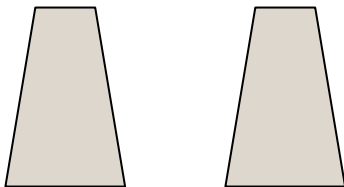
11)



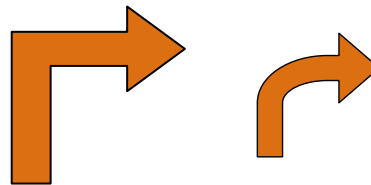
12)



13)



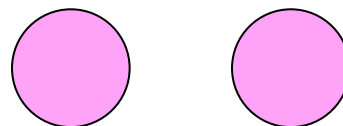
14)



15)



16)



Answers

1. neither

2. similar

3. neither

4. similar

5. similar

6. similar

7. neither

8. congruent

9. similar

10. neither

11. congruent

12. neither

13. congruent

14. neither

15. congruent

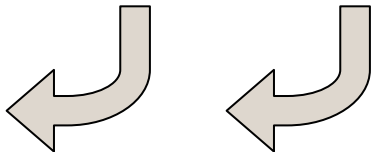
16. congruent




Determine if the shapes shown are 'similar', 'congruent' or 'neither'.

Answers

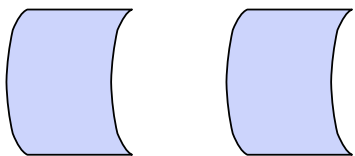
1)



2)



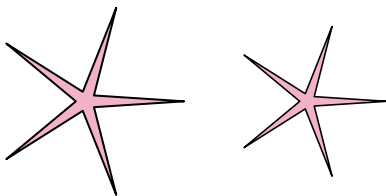
3)



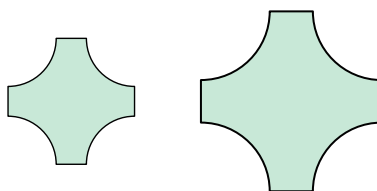
4)



5)



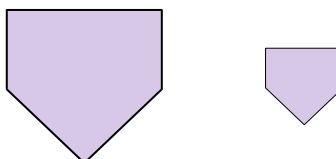
6)



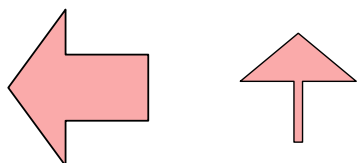
7)



8)



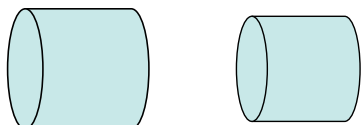
9)



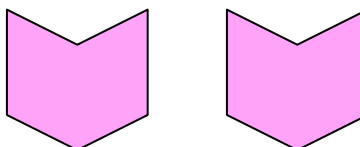
10)



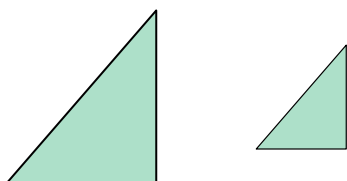
11)




12)




13)



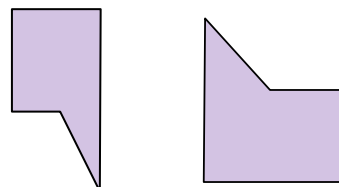
14)



15)



16)

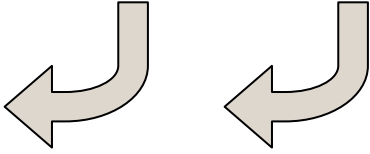


1. \_\_\_\_\_
2. \_\_\_\_\_
3. \_\_\_\_\_
4. \_\_\_\_\_
5. \_\_\_\_\_
6. \_\_\_\_\_
7. \_\_\_\_\_
8. \_\_\_\_\_
9. \_\_\_\_\_
10. \_\_\_\_\_
11. \_\_\_\_\_
12. \_\_\_\_\_
13. \_\_\_\_\_
14. \_\_\_\_\_
15. \_\_\_\_\_
16. \_\_\_\_\_



Determine if the shapes shown are 'similar', 'congruent' or 'neither'.

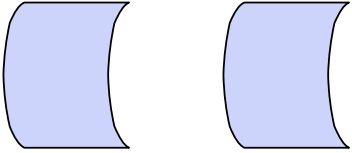
1)




2)



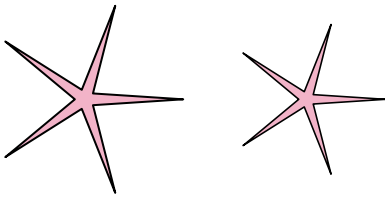
3)



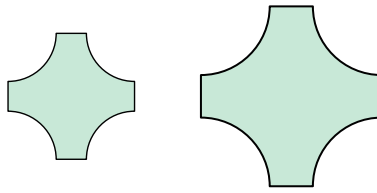
4)



5)



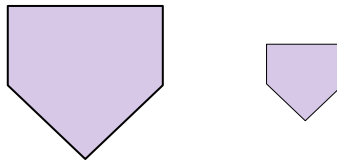
6)



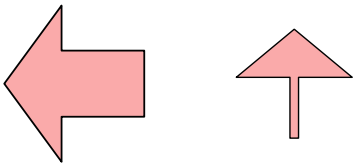
7)




8)



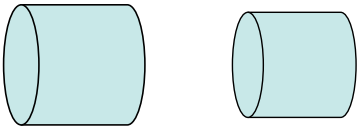
9)



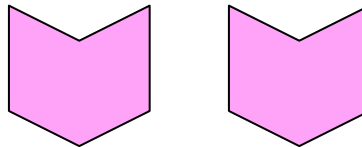
10)



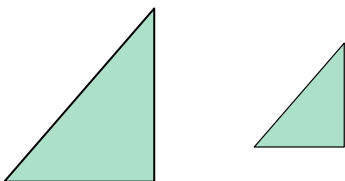
11)



12)




13)



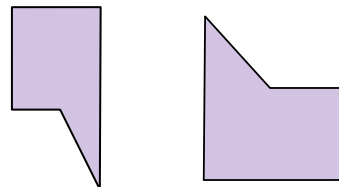
14)



15)



16)



Answers

1. congruent

2. congruent

3. congruent

4. congruent

5. similar

6. similar

7. neither

8. similar

9. neither

10. neither

11. similar

12. congruent

13. similar

14. congruent

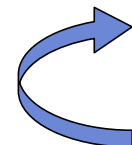
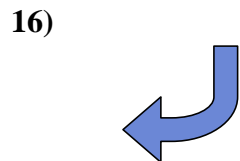

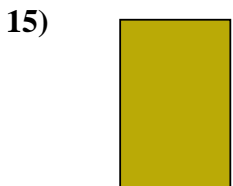
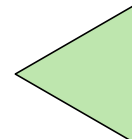
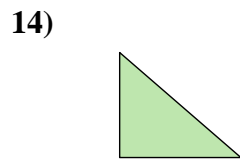
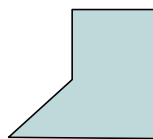
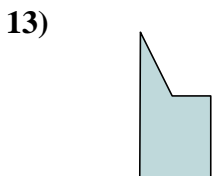

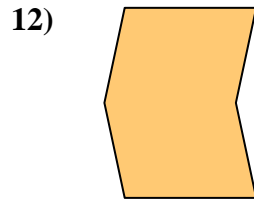
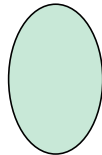
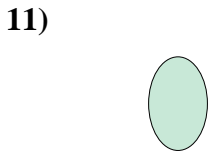
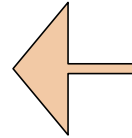
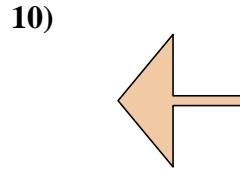
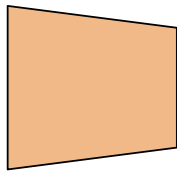
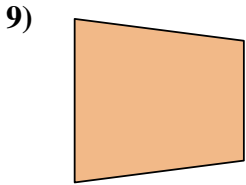

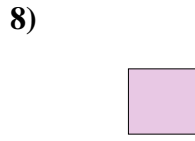



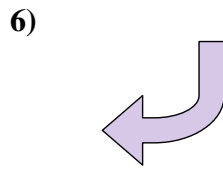
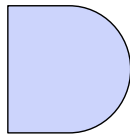
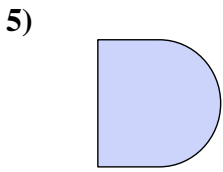
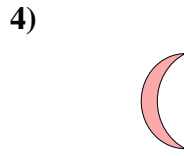
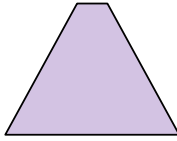
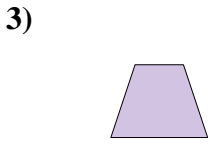
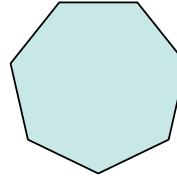
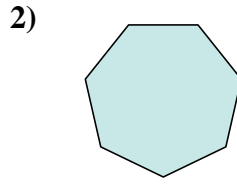
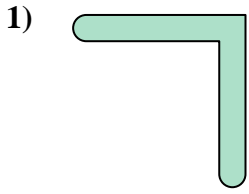
15. neither

16. neither



Determine if the shapes shown are 'similar', 'congruent' or 'neither'.

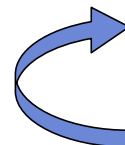


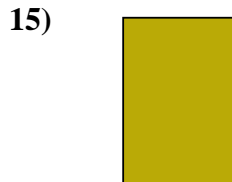
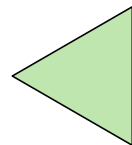
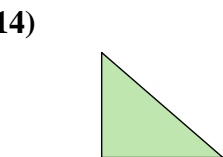
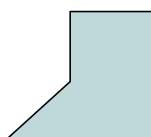
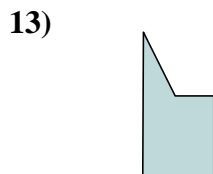

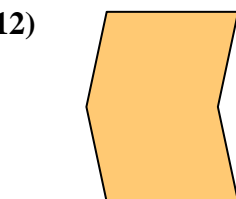
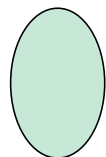
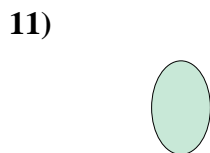
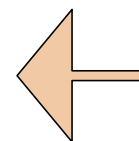
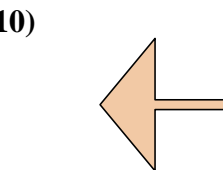
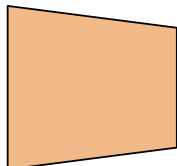
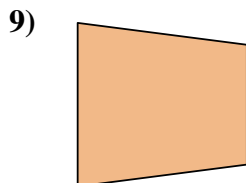
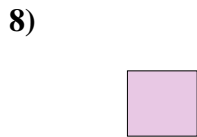



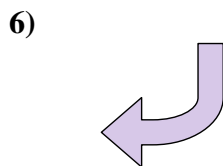
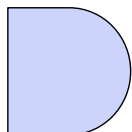
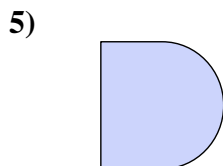
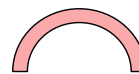
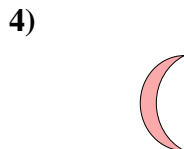
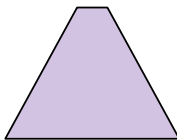
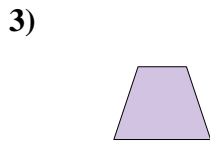
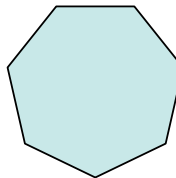
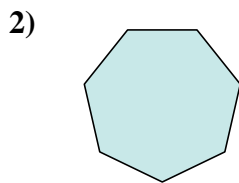
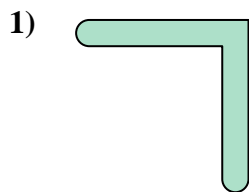
Answers



1. \_\_\_\_\_
2. \_\_\_\_\_
3. \_\_\_\_\_
4. \_\_\_\_\_
5. \_\_\_\_\_
6. \_\_\_\_\_
7. \_\_\_\_\_
8. \_\_\_\_\_
9. \_\_\_\_\_
10. \_\_\_\_\_
11. \_\_\_\_\_
12. \_\_\_\_\_
13. \_\_\_\_\_
14. \_\_\_\_\_
15. \_\_\_\_\_
16. \_\_\_\_\_



Determine if the shapes shown are 'similar', 'congruent' or 'neither'.



Answers

1. similar

2. similar

3. neither

4. neither

5. congruent

6. similar

7. similar

8. similar

9. congruent

10. congruent

11. similar

12. congruent

13. neither

14. neither

15. neither

16. neither





Determine if the shapes shown are 'similar', 'congruent' or 'neither'.

Answers

1)



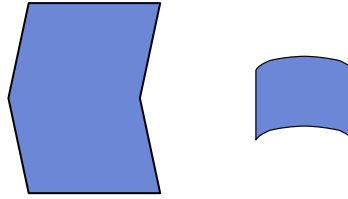
2)



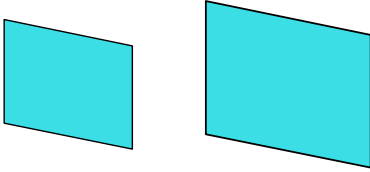
3)



4)



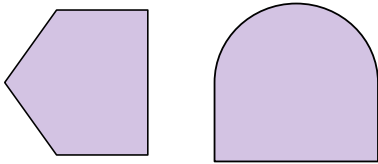
5)



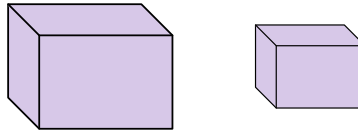
6)



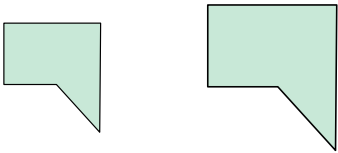
7)



8)



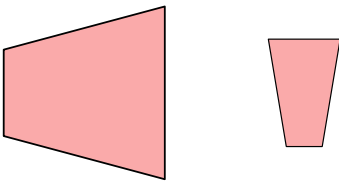
9)




10)



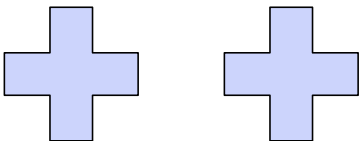
11)



12)



13)



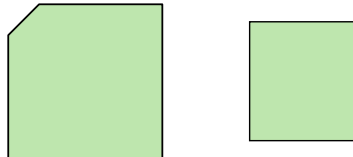
14)



15)



16)



1. \_\_\_\_\_

2. \_\_\_\_\_

3. \_\_\_\_\_

4. \_\_\_\_\_

5. \_\_\_\_\_

6. \_\_\_\_\_

7. \_\_\_\_\_

8. \_\_\_\_\_

9. \_\_\_\_\_

10. \_\_\_\_\_

11. \_\_\_\_\_

12. \_\_\_\_\_

13. \_\_\_\_\_

14. \_\_\_\_\_

15. \_\_\_\_\_

16. \_\_\_\_\_



Determine if the shapes shown are 'similar', 'congruent' or 'neither'.

1)



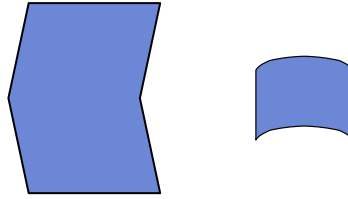
2)



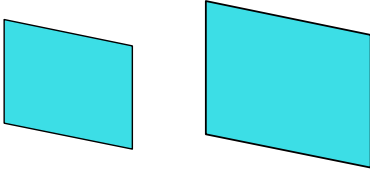
3)



4)



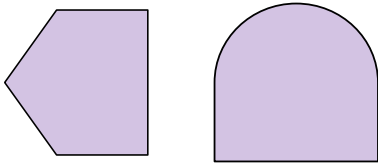
5)



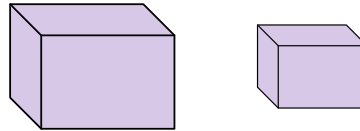
6)



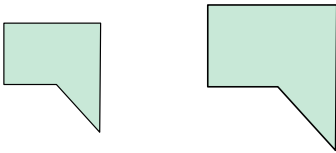
7)



8)



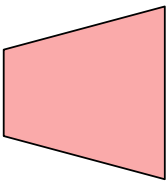
9)




10)



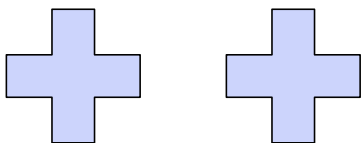
11)




12)



13)



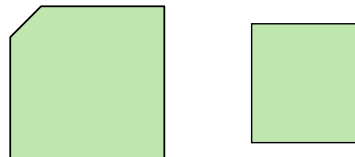
14)



15)



16)



Answers

1. similar

2. congruent

3. congruent

4. neither

5. similar

6. congruent

7. neither

8. similar

9. similar

10. congruent

11. neither

12. neither

13. congruent

14. congruent


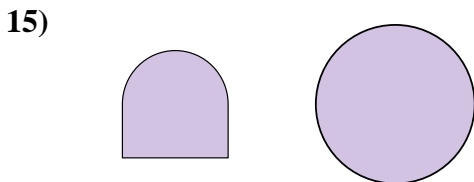



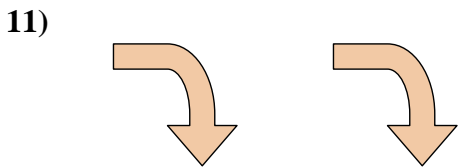
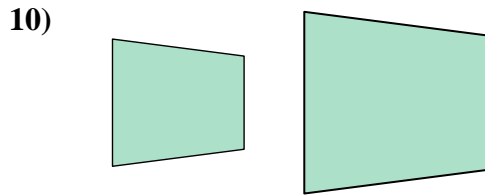
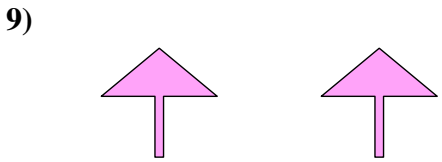

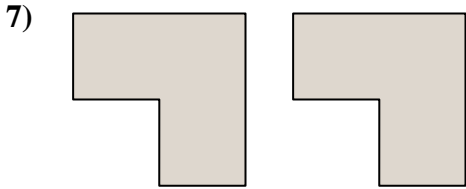
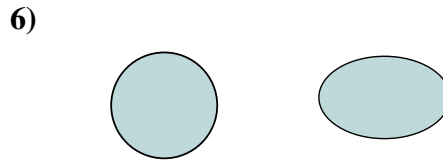

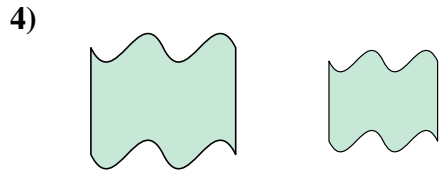

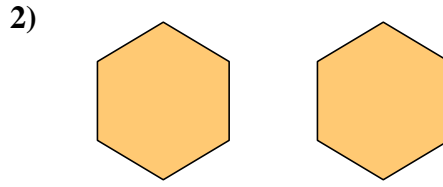
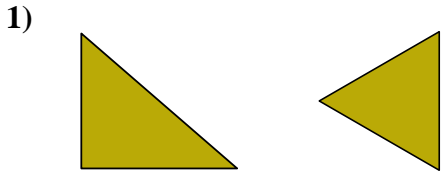
15. similar

16. neither



Determine if the shapes shown are 'similar', 'congruent' or 'neither'.

Answers

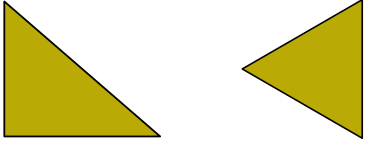


1. \_\_\_\_\_
2. \_\_\_\_\_
3. \_\_\_\_\_
4. \_\_\_\_\_
5. \_\_\_\_\_
6. \_\_\_\_\_
7. \_\_\_\_\_
8. \_\_\_\_\_
9. \_\_\_\_\_
10. \_\_\_\_\_
11. \_\_\_\_\_
12. \_\_\_\_\_
13. \_\_\_\_\_
14. \_\_\_\_\_
15. \_\_\_\_\_
16. \_\_\_\_\_

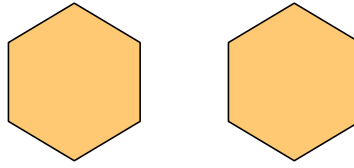


Determine if the shapes shown are 'similar', 'congruent' or 'neither'.

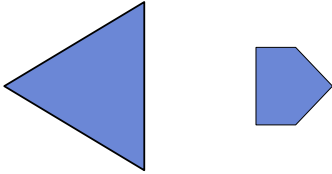
1)



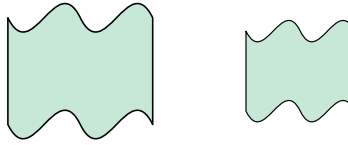
2)




3)



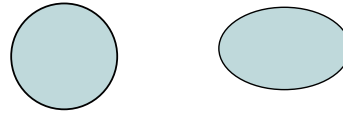
4)



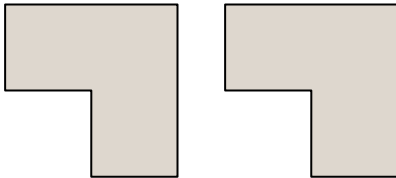
5)



6)



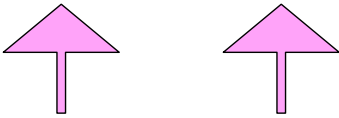
7)



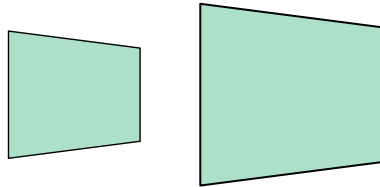
8)



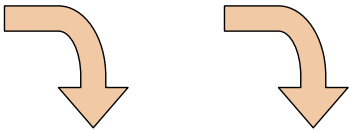
9)




10)



11)



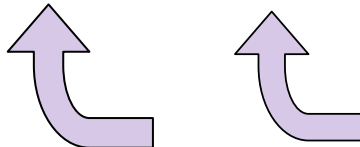
12)



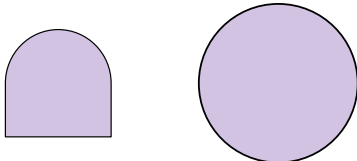
13)



14)



15)



16)



Answers

1. neither

2. congruent

3. neither

4. similar

5. similar

6. neither

7. congruent

8. neither

9. congruent

10. similar

11. congruent

12. similar

13. similar

14. similar

15. neither

16. similar