




Identify the type of shape shown.

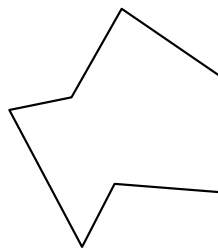
1)



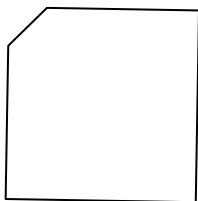
2)



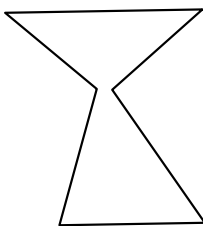
3)




4)



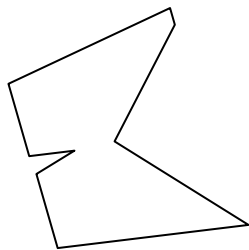
5)



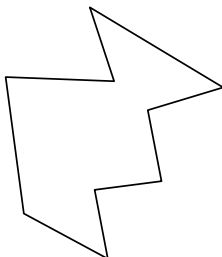
6)



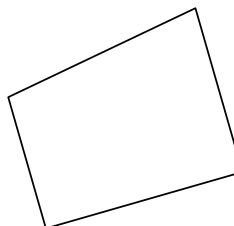
7)



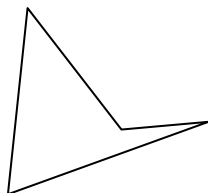
8)



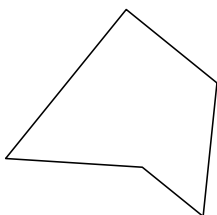
9)




10)




11)



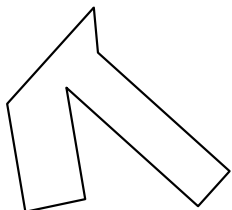
12)



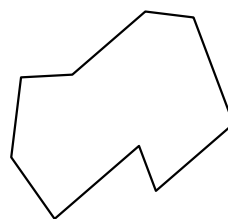
13)




14)



15)



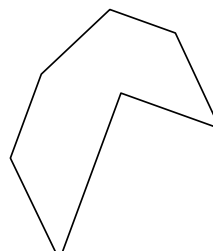
16)



17)



18)



Answers

1. _____

2. _____

3. _____

4. _____

5. _____

6. _____

7. _____

8. _____

9. _____

10. _____

11. _____

12. _____

13. _____

14. _____

15. _____

16. _____

17. _____

18. _____

19. _____

20. _____

21. _____




Identify the type of shape shown.

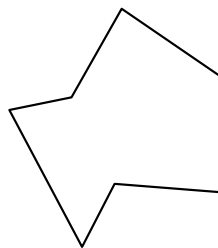
1)



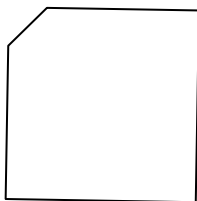
2)



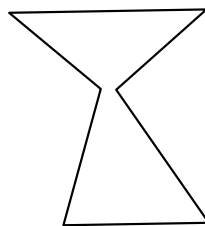
3)




4)



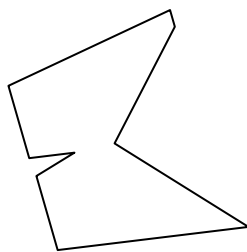
5)




6)



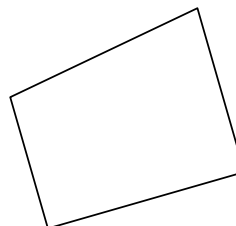
7)



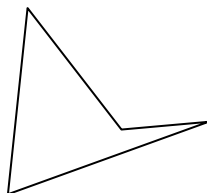
8)



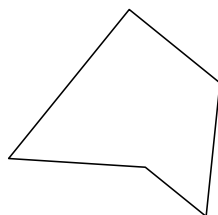
9)



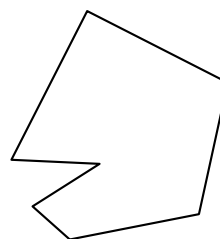
10)




11)



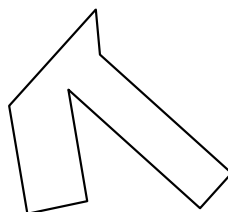
12)



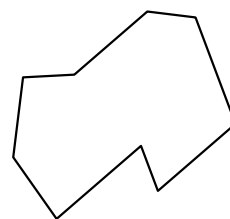
13)




14)



15)



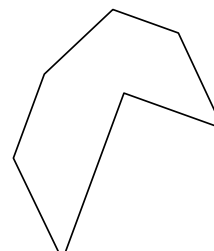
16)



17)



18)



Answers

1. quadrilateral

2. decagon

3. heptagon

4. pentagon

5. hexagon

6. hexagon

7. nonagon

8. nonagon

9. quadrilateral

10. quadrilateral

11. pentagon

12. heptagon

13. octagon

14. octagon

15. nonagon

16. heptagon

17. hexagon

18. heptagon

19. nonagon

20. pentagon

21. quadrilateral