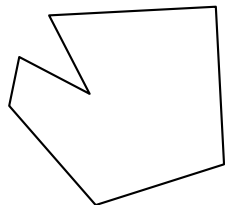


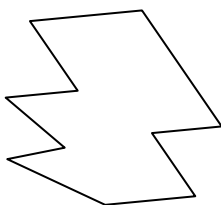


Identify the type of shape shown.

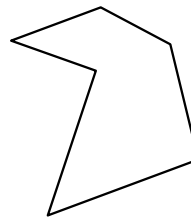
1)



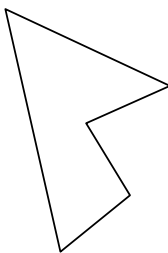
2)



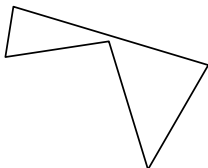
3)



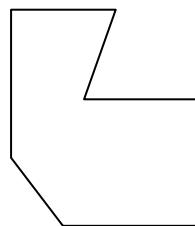
4)




5)



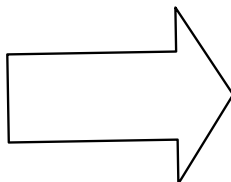
6)



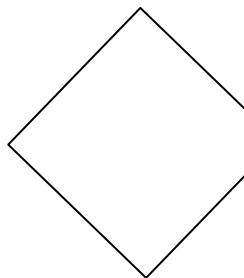
7)



8)



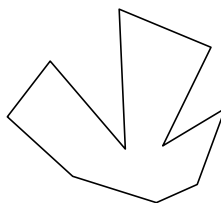
9)



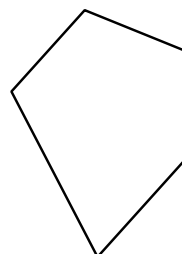
10)



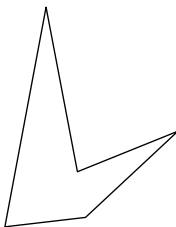
11)



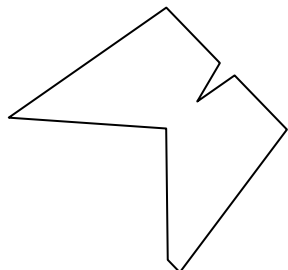
12)




13)



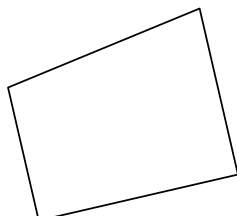
14)



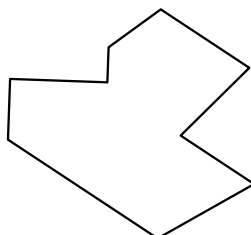
15)




16)



17)



18)



Answers

1. \_\_\_\_\_

2. \_\_\_\_\_

3. \_\_\_\_\_

4. \_\_\_\_\_

5. \_\_\_\_\_

6. \_\_\_\_\_

7. \_\_\_\_\_

8. \_\_\_\_\_

9. \_\_\_\_\_

10. \_\_\_\_\_

11. \_\_\_\_\_

12. \_\_\_\_\_

13. \_\_\_\_\_

14. \_\_\_\_\_

15. \_\_\_\_\_

16. \_\_\_\_\_

17. \_\_\_\_\_

18. \_\_\_\_\_

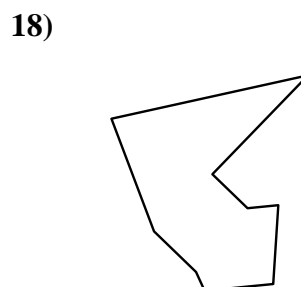
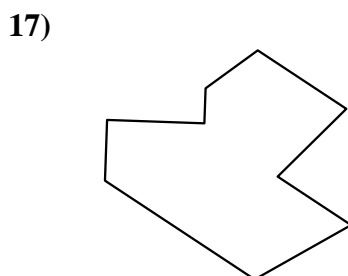
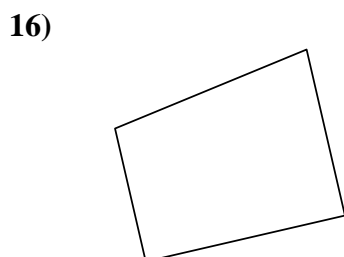

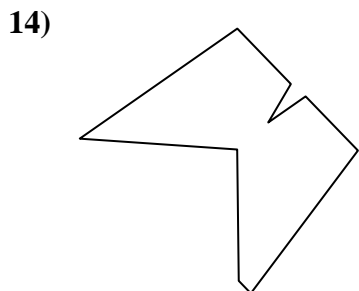
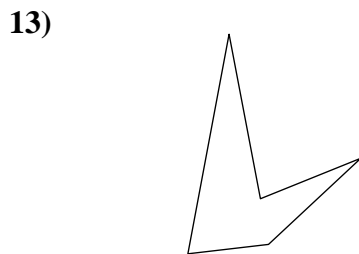
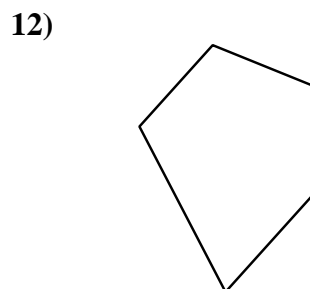
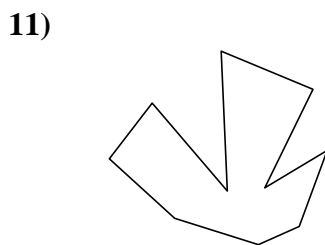
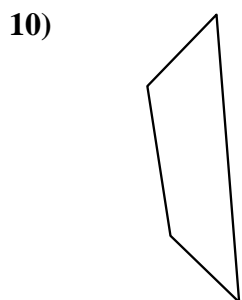
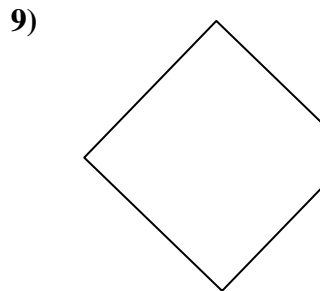
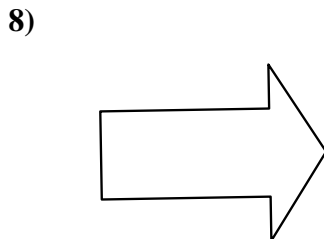
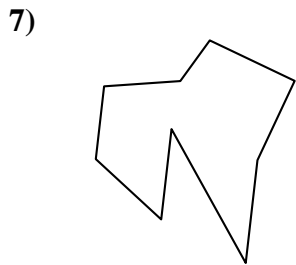
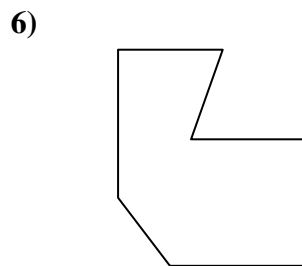
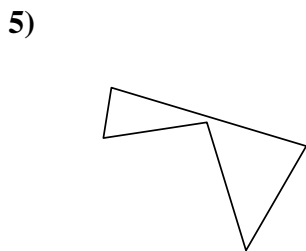
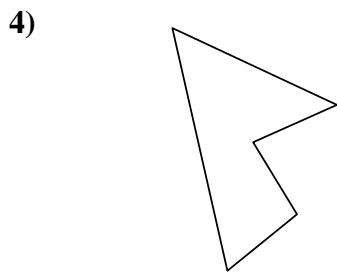
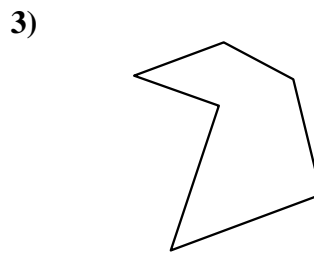


19. \_\_\_\_\_

20. \_\_\_\_\_

21. \_\_\_\_\_



Identify the type of shape shown.



Answers

1. heptagon

2. decagon

3. hexagon

4. pentagon

5. pentagon

6. heptagon

7. nonagon

8. heptagon

9. pentagon

10. quadrilateral

11. decagon

12. pentagon

13. pentagon

14. nonagon

15. octagon

16. quadrilateral

17. nonagon

18. nonagon

19. octagon

20. quadrilateral

21. octagon