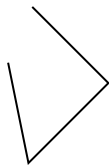




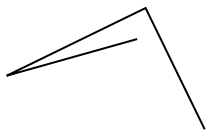
Determine if the figure shown is a 'Triangle', 'Square', 'Rectangle', 'Hexagon' or 'Other'.

Answers

1)



2)



3)



1. \_\_\_\_\_

2. \_\_\_\_\_

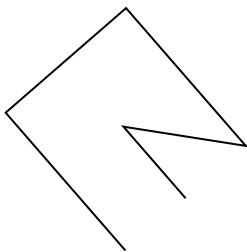
3. \_\_\_\_\_

4. \_\_\_\_\_

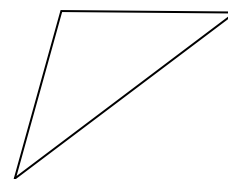
4)



5)



6)



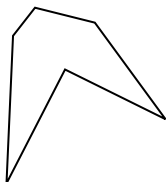
5. \_\_\_\_\_

6. \_\_\_\_\_

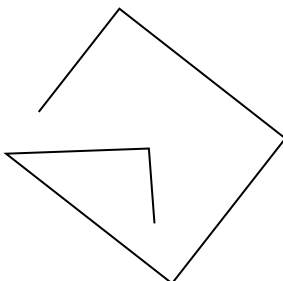
7. \_\_\_\_\_

8. \_\_\_\_\_


7)



8)



9)



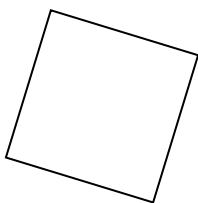
9. \_\_\_\_\_

10. \_\_\_\_\_

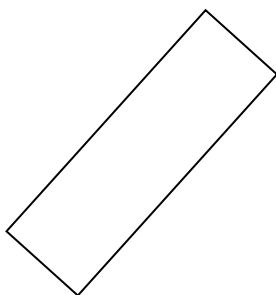
11. \_\_\_\_\_

12. \_\_\_\_\_

10)



11)



12)

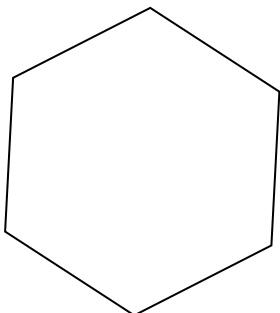


13. \_\_\_\_\_

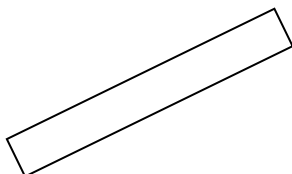
14. \_\_\_\_\_

15. \_\_\_\_\_

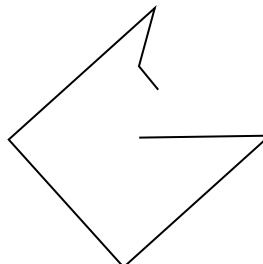
13)



14)



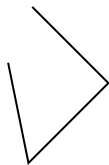
15)



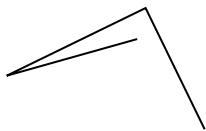


Determine if the figure shown is a 'Triangle', 'Square', 'Rectangle', 'Hexagon' or 'Other'.

1)



2)



3)



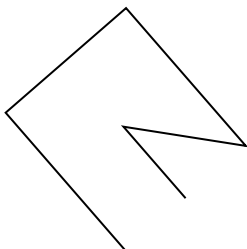
1.

**other**

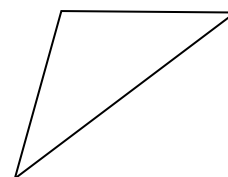
4)



5)



6)



2.

**other**

3.

**triangle**

4.

**other**

5.

**other**

6.

**triangle**

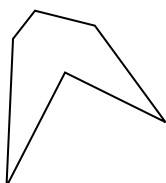
7.

**hexagon**

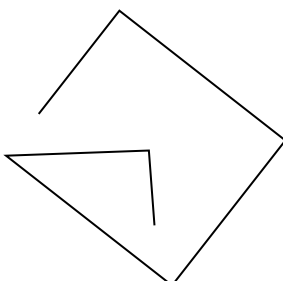
8.

**other**


7)



8)



9)



9.

**triangle**

10.

**square**

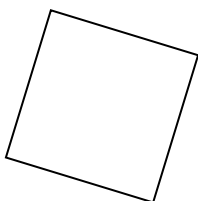
11.

**rectangle**

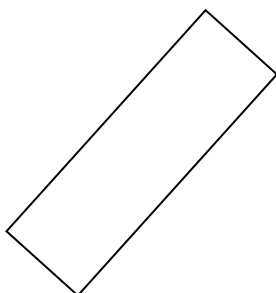
12.

**rectangle**

10)



11)



12)



13.

**hexagon**

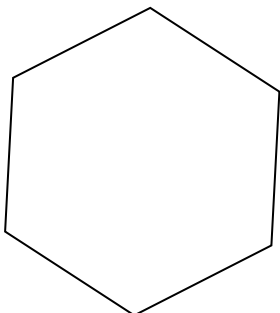
14.

**rectangle**

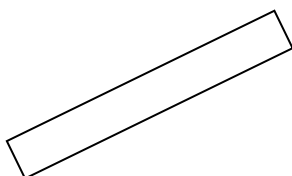
15.

**other**

13)



14)



15)

