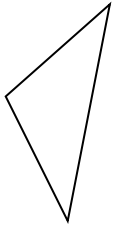




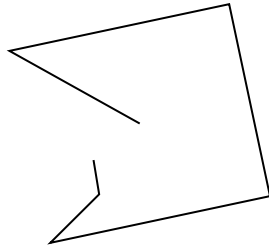
Determine if the figure shown is a 'Triangle', 'Square', 'Rectangle', 'Hexagon' or 'Other'.

Answers

1)



2)



3)



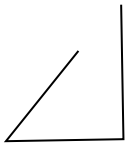
1. _____

2. _____

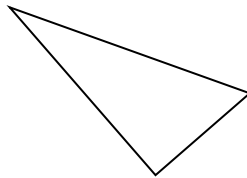
3. _____

4. _____

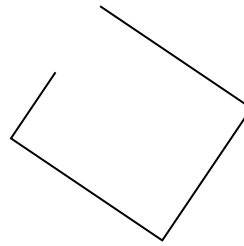
4)



5)



6)



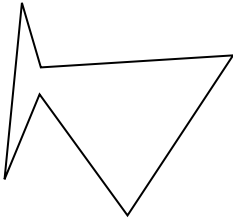
5. _____

6. _____

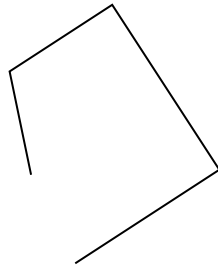
7. _____

8. _____


7)



8)



9)




9. _____

10. _____

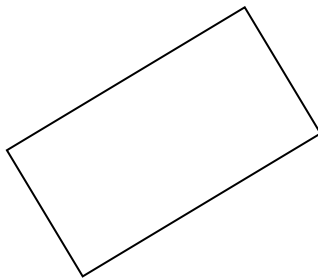
11. _____

12. _____


10)



11)



12)

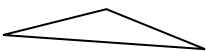


13. _____


14. _____

15. _____

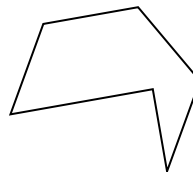
13)



14)



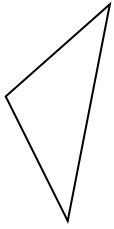
15)



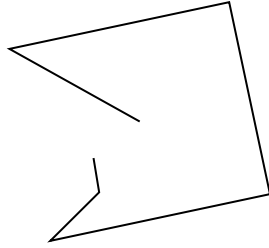


Determine if the figure shown is a 'Triangle', 'Square', 'Rectangle', 'Hexagon' or 'Other'.

1)



2)



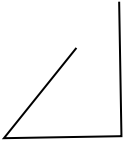
3)



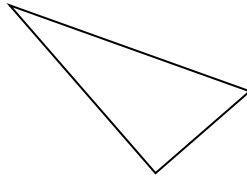
1.

triangle

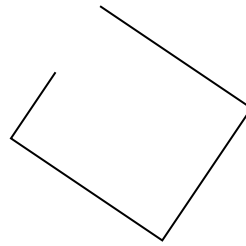
4)



5)



6)



2.

other

3.

other

4.

other

5.

triangle

6.

other

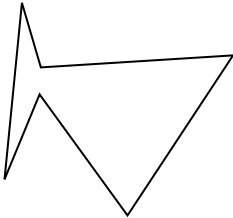
7.

hexagon

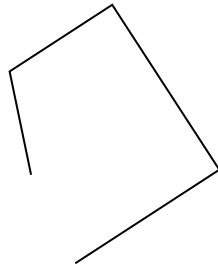
8.

other

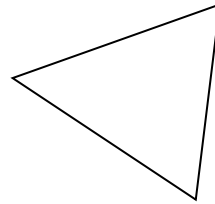
7)



8)



9)



9.

triangle

10.

other


11.

rectangle

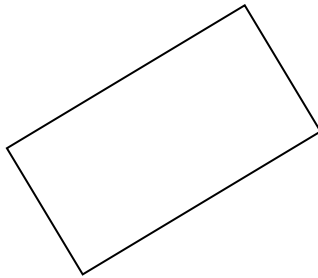
12.

hexagon


10)



11)



12)



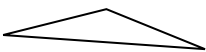
13.

triangle


14.

other

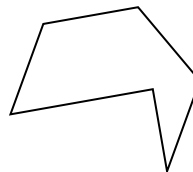
13)



14)



15)



15.

hexagon