



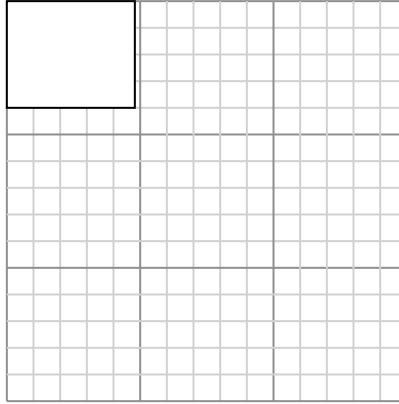
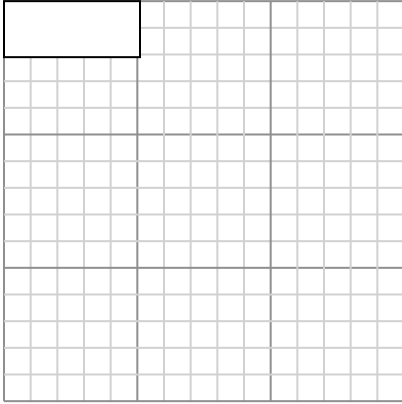
Draw each rectangle to the scale shown and determine the new dimensions.

Answers

- 1) The rectangle below has the dimensions: 5.1×2.1

- 2) The rectangle below has the dimensions: 4.8×4

1. _____



2. _____

Create another rectangle that is scaled to 4 times the size of the current rectangle.

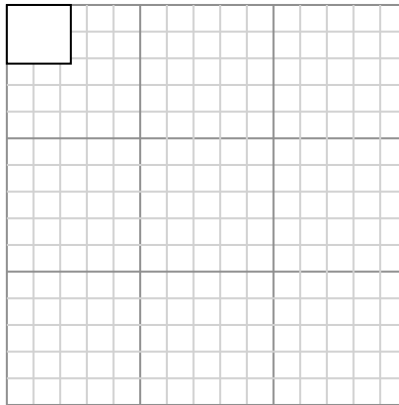
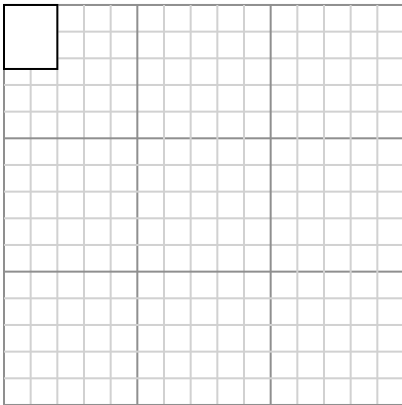
Create another rectangle that is scaled to 9 times the size of the current rectangle.

3. _____

- 3) The rectangle below has the dimensions: 2×2.4

- 4) The rectangle below has the dimensions: 2.4×2.2

4. _____



5. _____

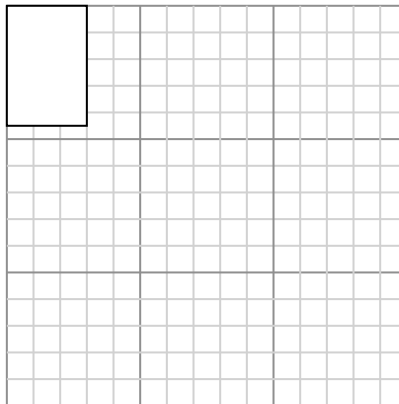
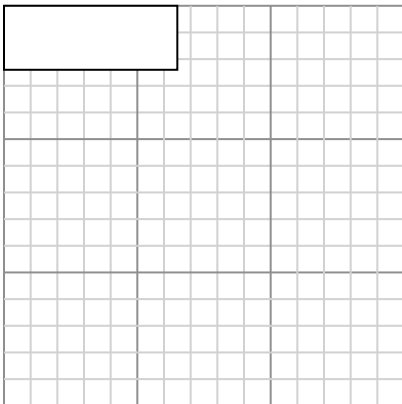
Create another rectangle that is scaled to 4 times the size of the current rectangle.

Create another rectangle that is scaled to 16 times the size of the current rectangle.

6. _____

- 5) The rectangle below has the dimensions: 6.5×2.4

- 6) The rectangle below has the dimensions: 3×4.5



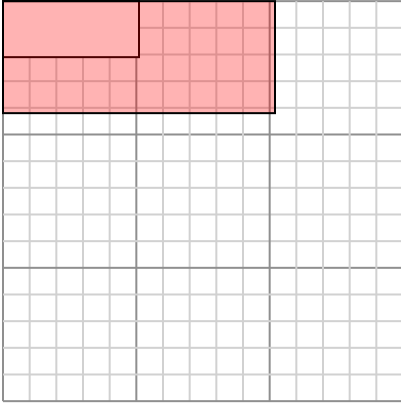
Create another rectangle that is scaled to 4 times the size of the current rectangle.

Create another rectangle that is scaled to 9 times the size of the current rectangle.



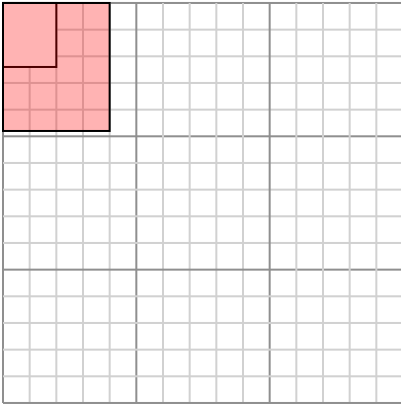
Draw each rectangle to the scale shown and determine the new dimensions.

- 1) The rectangle below has the dimensions:
 5.1×2.1



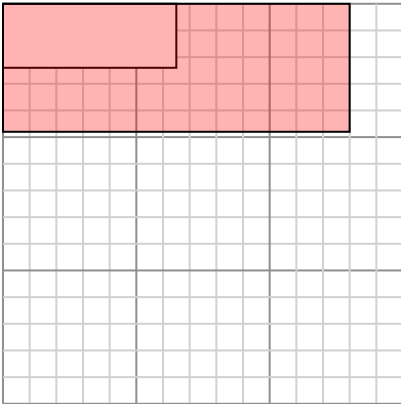
Create another rectangle that is scaled to 4 times the size of the current rectangle.

- 3) The rectangle below has the dimensions:
 2×2.4



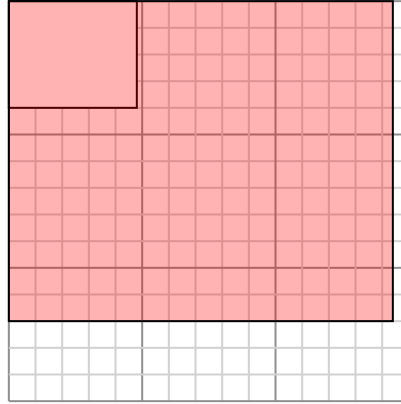
Create another rectangle that is scaled to 4 times the size of the current rectangle.

- 5) The rectangle below has the dimensions:
 6.5×2.4



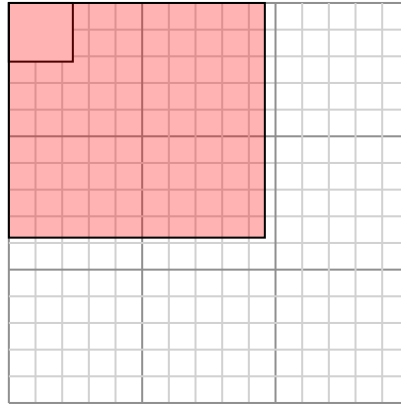
Create another rectangle that is scaled to 4 times the size of the current rectangle.

- 2) The rectangle below has the dimensions:
 4.8×4



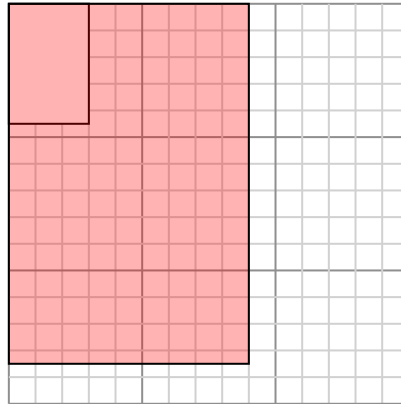
Create another rectangle that is scaled to 9 times the size of the current rectangle.

- 4) The rectangle below has the dimensions:
 2.4×2.2



Create another rectangle that is scaled to 16 times the size of the current rectangle.

- 6) The rectangle below has the dimensions:
 3×4.5



Create another rectangle that is scaled to 9 times the size of the current rectangle.

Answers

1. **10.2×4.2**

2. **14.4×12**

3. **4×4.8**

4. **9.6×8.8**

5. **13×4.8**

6. **9×13.5**