

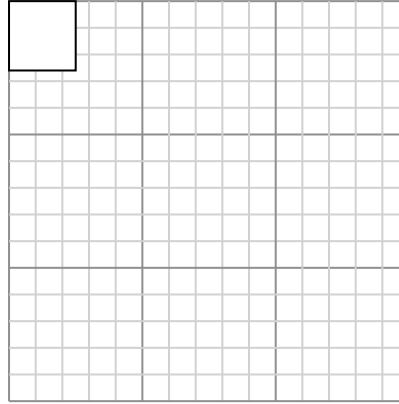
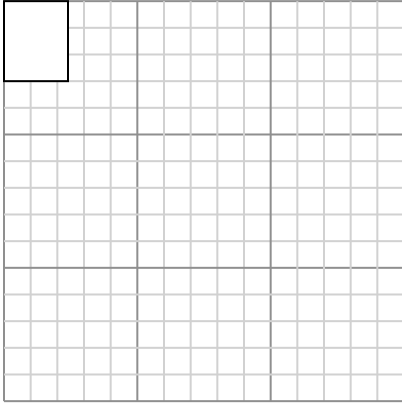


Draw each rectangle to the scale shown and determine the new dimensions.

Answers

- 1) The rectangle below has the dimensions:
 2.4×3

- 2) The rectangle below has the dimensions:
 2.5×2.6

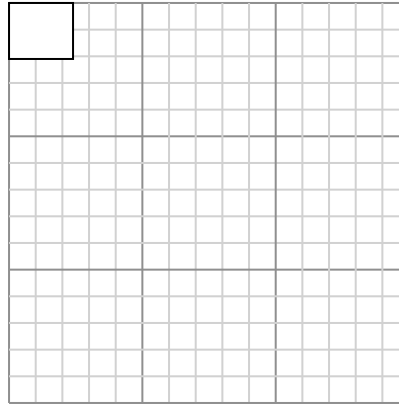
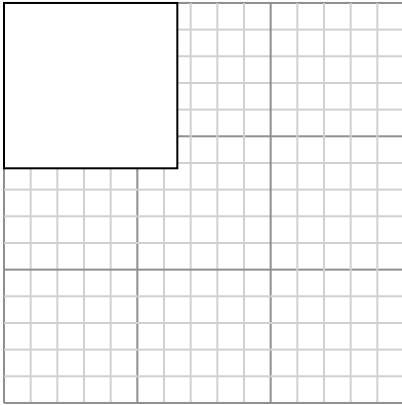


Create another rectangle that is scaled to 16 times the size of the current rectangle.

Create another rectangle that is scaled to 16 times the size of the current rectangle.

- 3) The rectangle below has the dimensions:
 6.5×6.2

- 4) The rectangle below has the dimensions:
 2.4×2.1

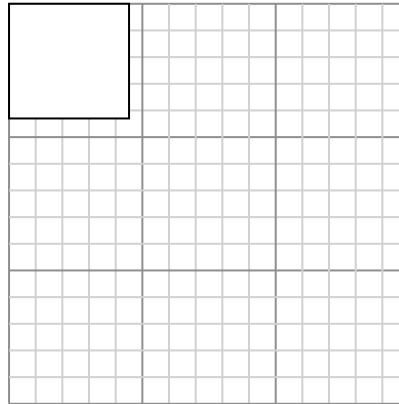
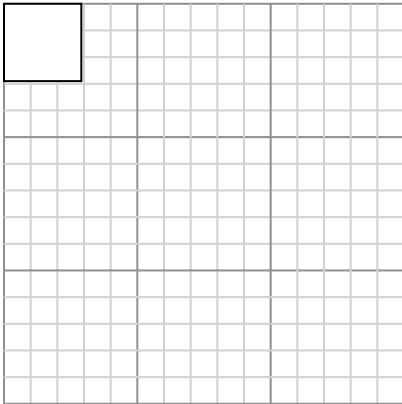


Create another rectangle that is scaled to 4 times the size of the current rectangle.

Create another rectangle that is scaled to 16 times the size of the current rectangle.

- 5) The rectangle below has the dimensions:
 2.9×2.9

- 6) The rectangle below has the dimensions:
 4.5×4.3



Create another rectangle that is scaled to 16 times the size of the current rectangle.

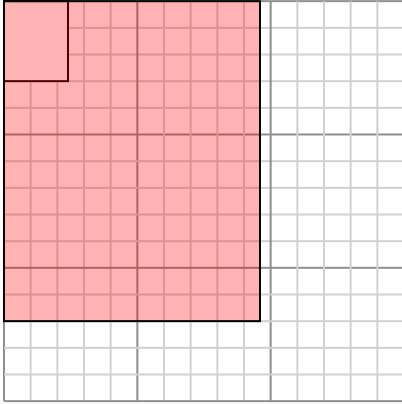
Create another rectangle that is scaled to 9 times the size of the current rectangle.

1. _____
2. _____
3. _____
4. _____
5. _____
6. _____



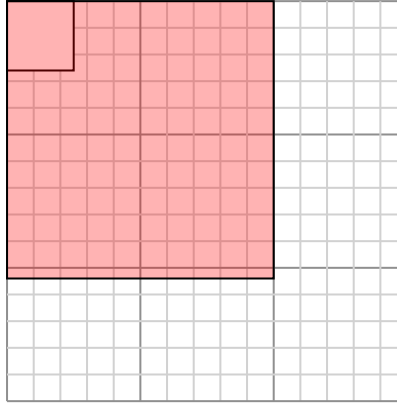
Draw each rectangle to the scale shown and determine the new dimensions.

- 1) The rectangle below has the dimensions:
 2.4×3



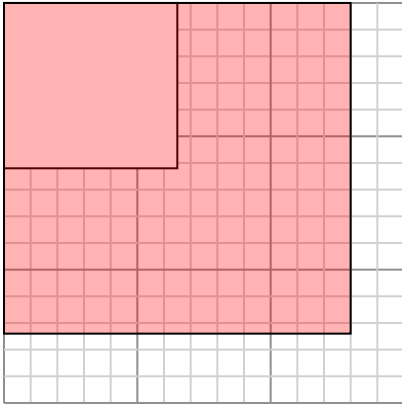
Create another rectangle that is scaled to 16 times the size of the current rectangle.

- 2) The rectangle below has the dimensions:
 2.5×2.6



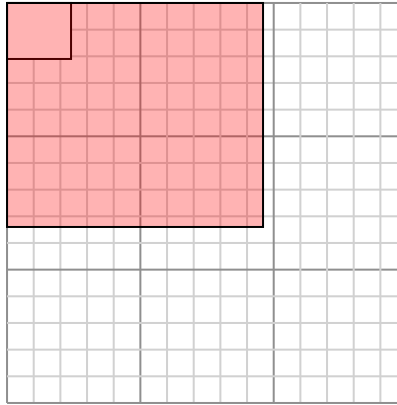
Create another rectangle that is scaled to 16 times the size of the current rectangle.

- 3) The rectangle below has the dimensions:
 6.5×6.2



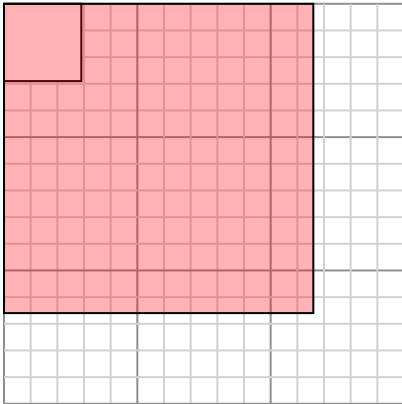
Create another rectangle that is scaled to 4 times the size of the current rectangle.

- 4) The rectangle below has the dimensions:
 2.4×2.1



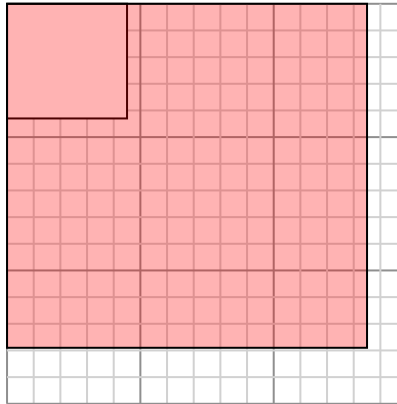
Create another rectangle that is scaled to 16 times the size of the current rectangle.

- 5) The rectangle below has the dimensions:
 2.9×2.9



Create another rectangle that is scaled to 16 times the size of the current rectangle.

- 6) The rectangle below has the dimensions:
 4.5×4.3



Create another rectangle that is scaled to 9 times the size of the current rectangle.

Answers

1. 9.6×12

2. 10×10.4

3. 13×12.4

4. 9.6×8.4

5. 11.6×11.6

6. 13.5×12.9