




Use the diagram to determine the faces, vertices and edges of the shapes.

Answers

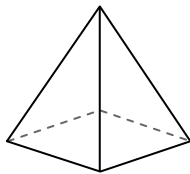
1)



sphere

faces: _____
vertices: _____
edges: _____

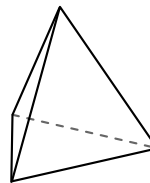
2)



rectangular pyramid

faces: _____
vertices: _____
edges: _____

3)



triangular pyramid

faces: _____
vertices: _____
edges: _____

1. _____

2. _____

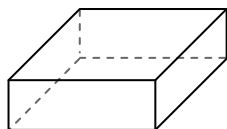
3. _____

4. _____


5. _____

6. _____

4)



rectangular prism



sphere

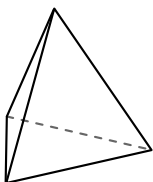
Which shape has more faces?

A. rectangular prism

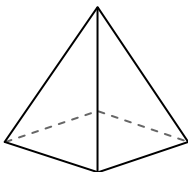
B. sphere

C. They both have the same number of faces.

5)



triangular pyramid



rectangular pyramid

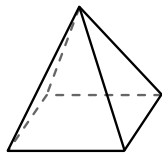
Which shape has more vertices?

A. triangular pyramid

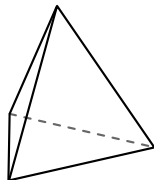
B. rectangular pyramid

C. They both have the same number of vertices.

6)



rectangular pyramid



triangular pyramid

Which shape has more edges?

A. rectangular pyramid


B. triangular pyramid

C. They both have the same number of edges.



Use the diagram to determine the faces, vertices and edges of the shapes.

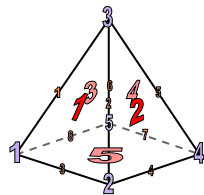
1)



sphere

faces: 1
 vertices: 0
 edges: 0

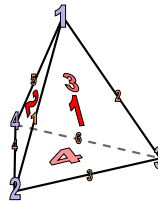
2)



rectangular pyramid

faces: 5
 vertices: 5
 edges: 8

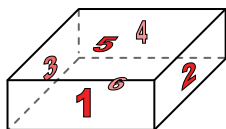
3)




triangular pyramid

faces: 4
 vertices: 4
 edges: 6

4)



rectangular prism



sphere

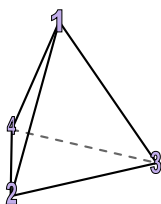
Which shape has more faces?

A. rectangular prism

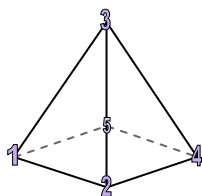
B. sphere

C. They both have the same number of faces.

5)



triangular pyramid



rectangular pyramid

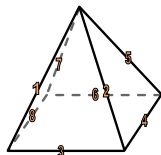
Which shape has more vertices?

A. triangular pyramid

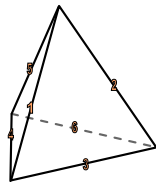
B. rectangular pyramid

C. They both have the same number of vertices.

6)



rectangular pyramid



triangular pyramid

Which shape has more edges?

A. rectangular pyramid

B. triangular pyramid

C. They both have the same number of edges.

Answers

1. 1, 0, 0

2. 5, 5, 8

3. 4, 4, 6

4. A

5. B

6. A