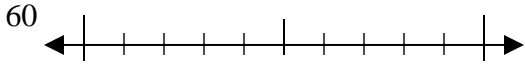




Use the numberlines to round each number to the nearest 10.

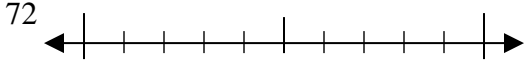
Answers

Ex)



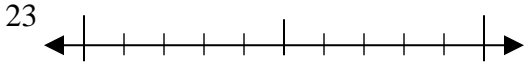
Ex. 60

1)



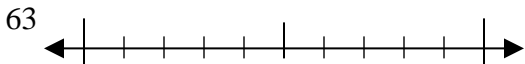
1. _____

2)



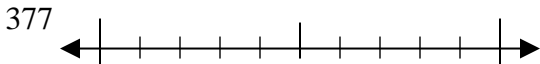
2. _____

3)



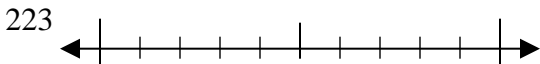
3. _____

4)



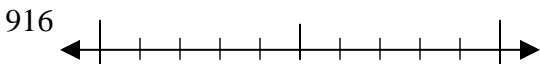
4. _____

5)



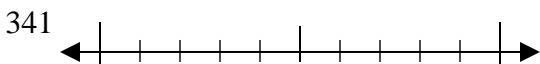
5. _____

6)



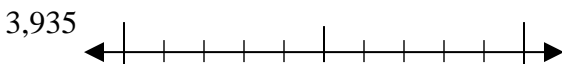
6. _____

7)



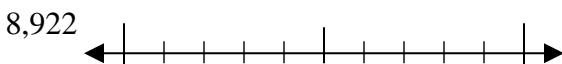
7. _____

8)



8. _____

9)

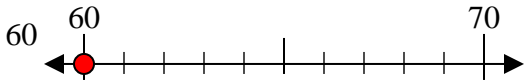


9. _____

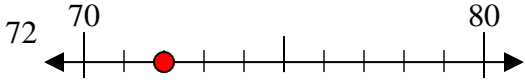


Use the numberlines to round each number to the nearest 10.

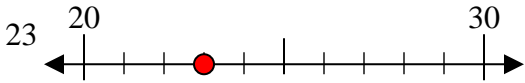
Ex)



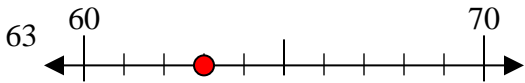
1)



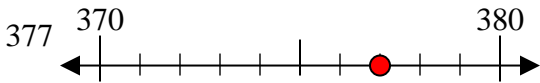
2)



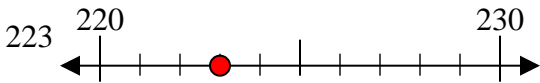
3)



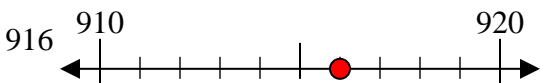
4)



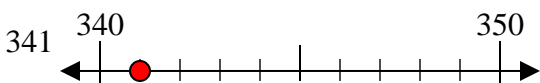
5)



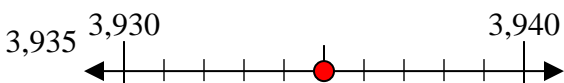
6)



7)



8)



9)



Answers

Ex. 60

1. 70

2. 20

3. 60

4. 380

5. 220

6. 920

7. 340

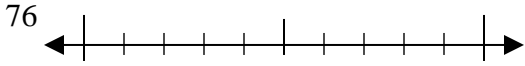
8. 3940

9. 8920

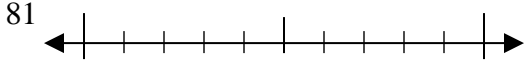


Use the numberlines to round each number to the nearest 10.

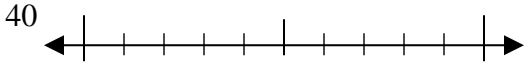
Ex)



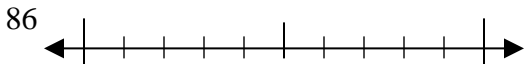
1)



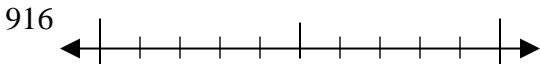
2)



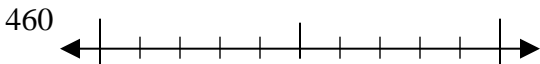
3)



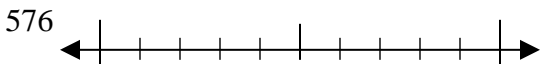
4)



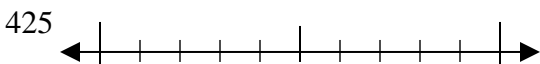
5)



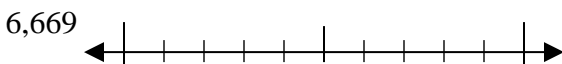
6)



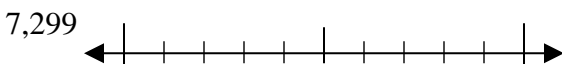
7)



8)



9)



Answers

Ex. 80

1. _____

2. _____

3. _____

4. _____

5. _____

6. _____

7. _____

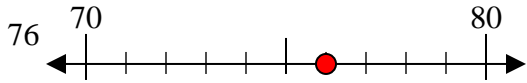
8. _____

9. _____

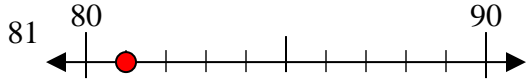


Use the numberlines to round each number to the nearest 10.

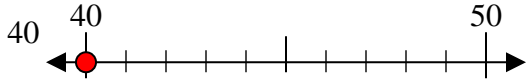
Ex)



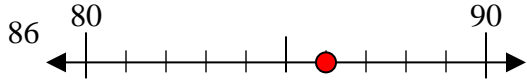
1)



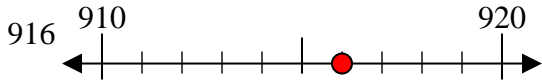
2)



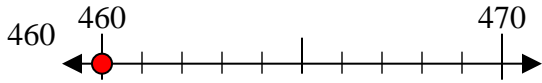
3)



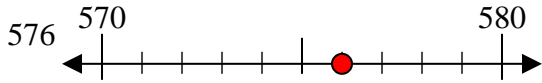
4)



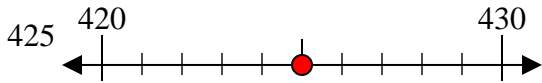
5)



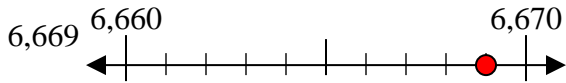
6)



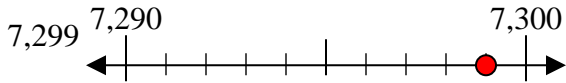
7)



8)



9)



Answers

Ex. 80

1. 80

2. 40

3. 90

4. 920

5. 460

6. 580

7. 430

8. 6670

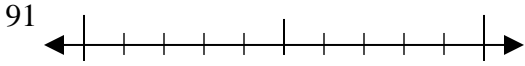
9. 7300



Use the numberlines to round each number to the nearest 10.

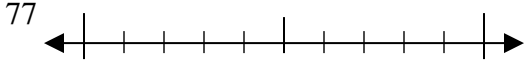
Answers

Ex)



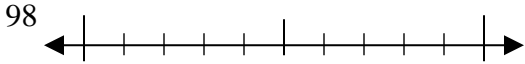
Ex. 90

1)



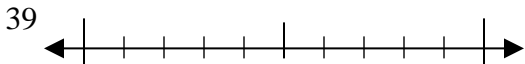
1. _____

2)



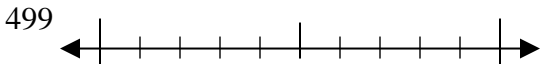
2. _____

3)



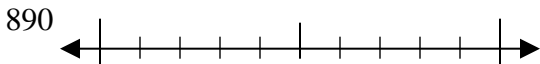
3. _____

4)



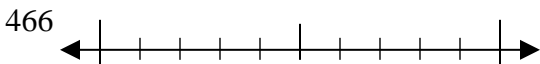
4. _____

5)



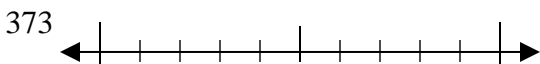
5. _____

6)



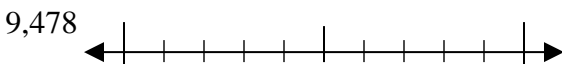
6. _____

7)



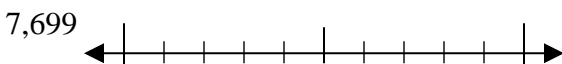
7. _____

8)



8. _____

9)

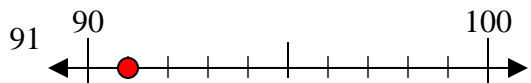


9. _____

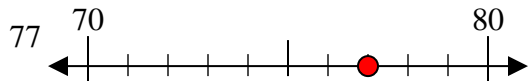


Use the numberlines to round each number to the nearest 10.

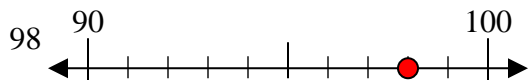
Ex)



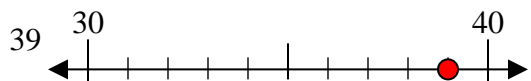
1)



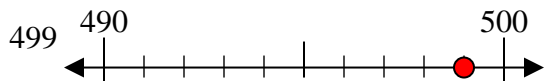
2)



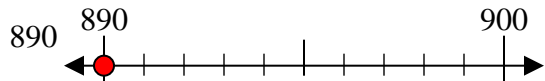
3)



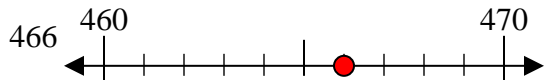
4)



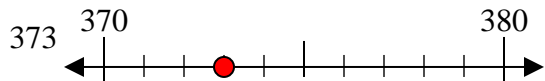
5)



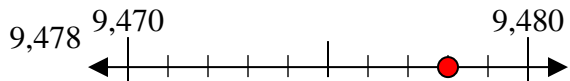
6)



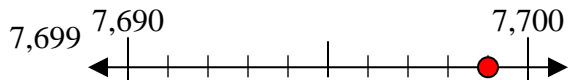
7)



8)



9)



Answers

Ex. 90

1. 80

2. 100

3. 40

4. 500

5. 890

6. 470

7. 370

8. 9480

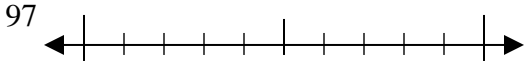
9. 7700



Use the numberlines to round each number to the nearest 10.

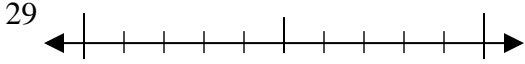
Answers

Ex)



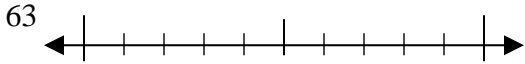
Ex. 100

1)



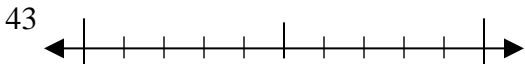
1. _____

2)



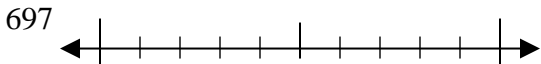
2. _____

3)



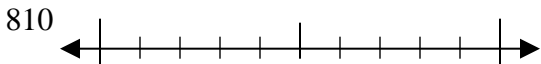
3. _____

4)



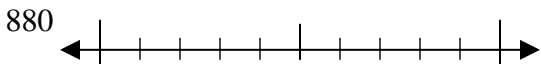
4. _____

5)



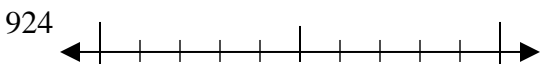
5. _____

6)



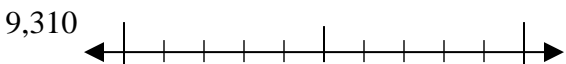
6. _____

7)



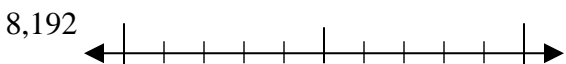
7. _____

8)



8. _____

9)

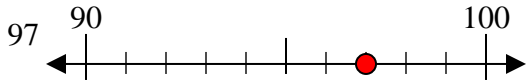


9. _____

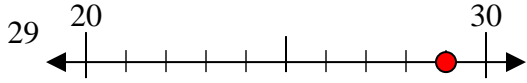


Use the numberlines to round each number to the nearest 10.

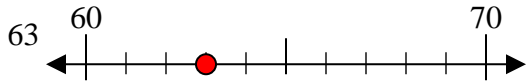
Ex)



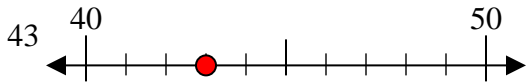
1)



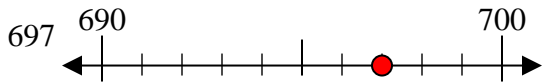
2)



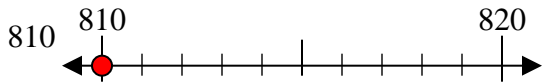
3)



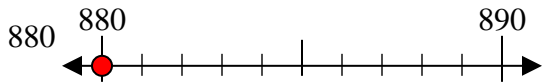
4)



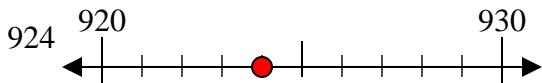
5)



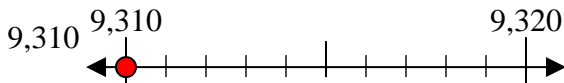
6)



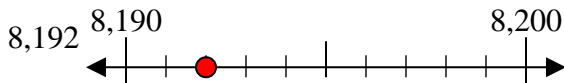
7)



8)



9)



Answers

Ex. 100

1. 30

2. 60

3. 40

4. 700

5. 810

6. 880

7. 920

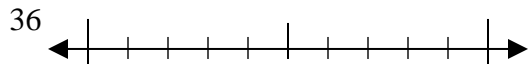
8. 9310

9. 8190

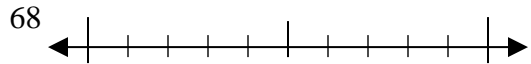


Use the numberlines to round each number to the nearest 10.

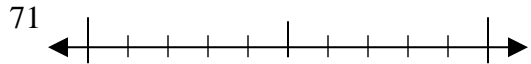
Ex)



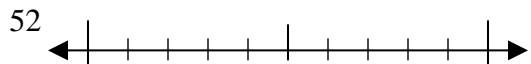
1)



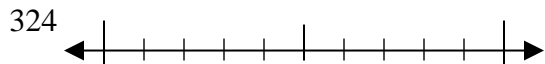
2)



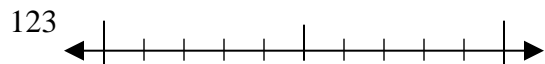
3)



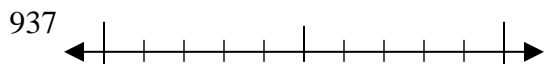
4)



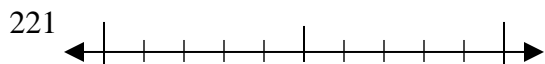
5)



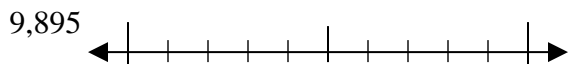
6)



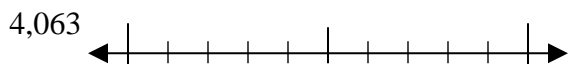
7)



8)



9)



Answers

Ex. 40

1. _____

2. _____

3. _____

4. _____

5. _____

6. _____

7. _____

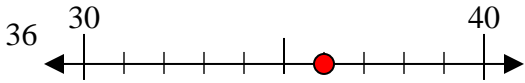
8. _____

9. _____

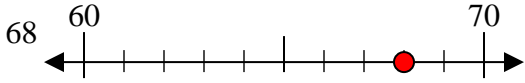


Use the numberlines to round each number to the nearest 10.

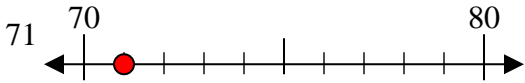
Ex)



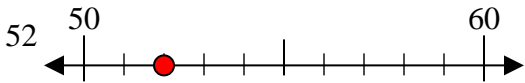
1)



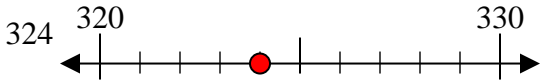
2)



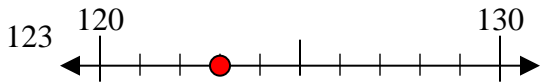
3)



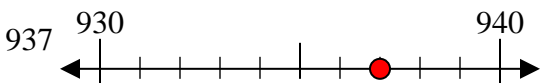
4)



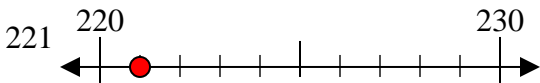
5)



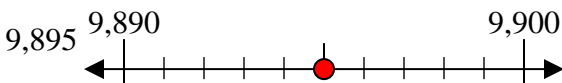
6)



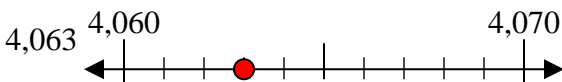
7)



8)



9)



Answers

Ex. 40

1. 70

2. 70

3. 50

4. 320

5. 120

6. 940

7. 220

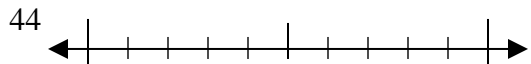
8. 9900

9. 4060

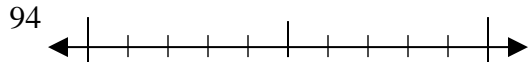


Use the numberlines to round each number to the nearest 10.

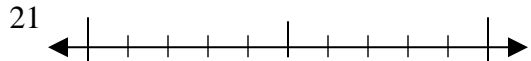
Ex)



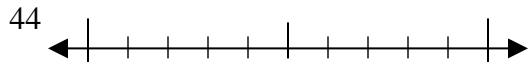
1)



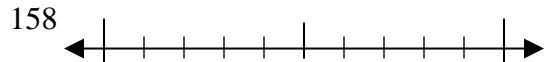
2)



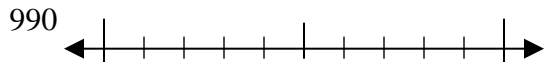
3)



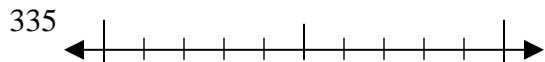
4)



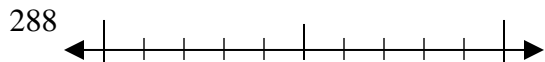
5)



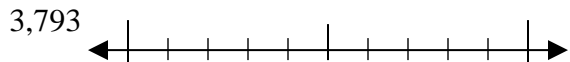
6)



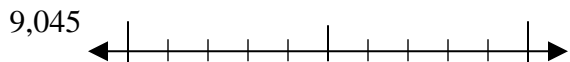
7)



8)



9)



Answers

Ex. 40

1. _____

2. _____

3. _____

4. _____

5. _____

6. _____

7. _____

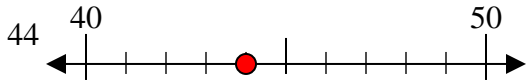
8. _____

9. _____



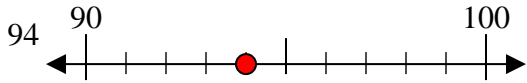
Use the numberlines to round each number to the nearest 10.

Ex)



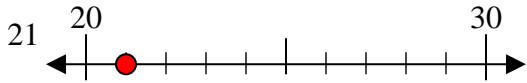
Ex. 40

1)



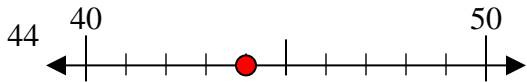
1. 90

2)



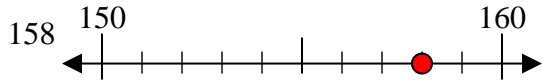
2. 20

3)



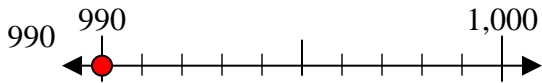
3. 40

4)



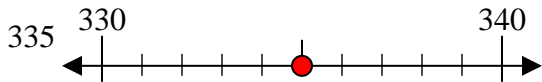
4. 160

5)



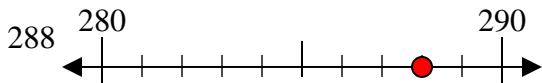
5. 990

6)



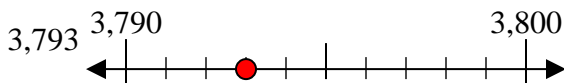
6. 340

7)



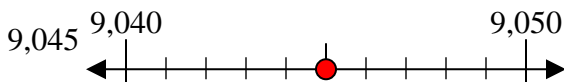
7. 290

8)



8. 3790

9)



9. 9050

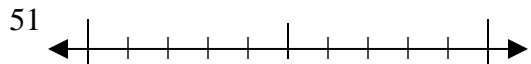
Answers



Use the numberlines to round each number to the nearest 10.

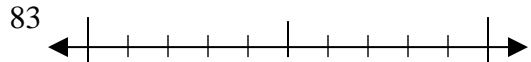
Answers

Ex)



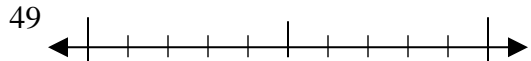
Ex. 50

1)



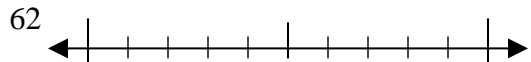
1. _____

2)



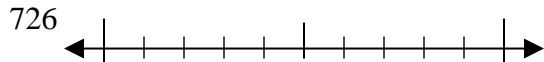
2. _____

3)



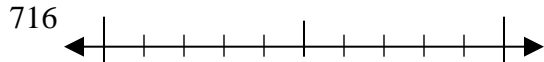
3. _____

4)



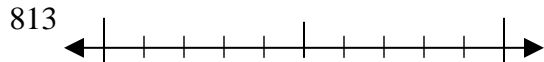
4. _____

5)



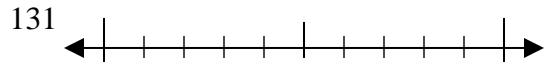
5. _____

6)



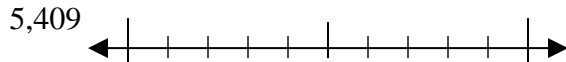
6. _____

7)



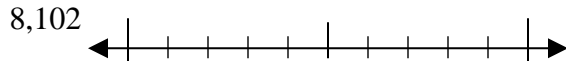
7. _____

8)



8. _____

9)

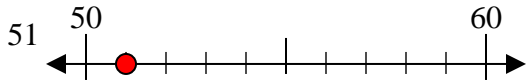


9. _____

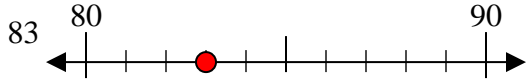


Use the numberlines to round each number to the nearest 10.

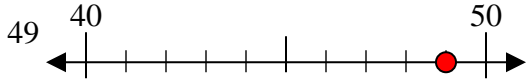
Ex)



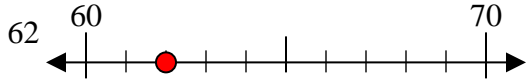
1)



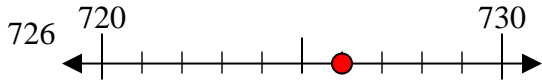
2)



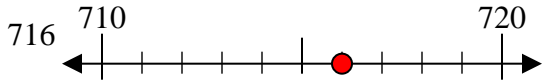
3)



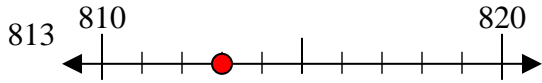
4)



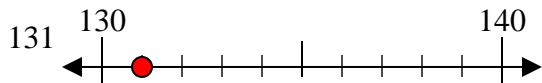
5)



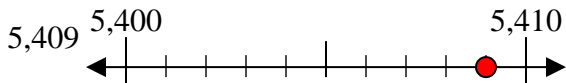
6)



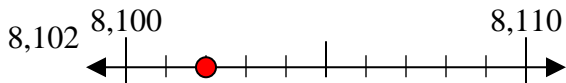
7)



8)



9)



Answers

Ex. 50

1. 80

2. 50

3. 60

4. 730

5. 720

6. 810

7. 130

8. 5410

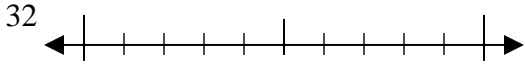
9. 8100



Use the numberlines to round each number to the nearest 10.

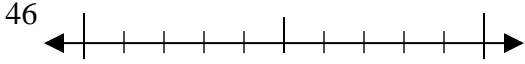
Answers

Ex)



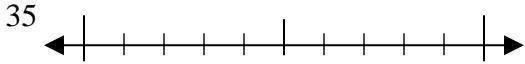
Ex. 30

1)



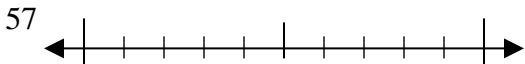
1. _____

2)



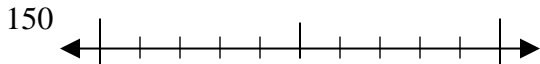
2. _____

3)



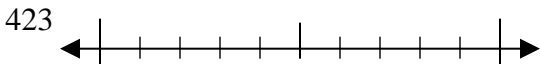
3. _____

4)



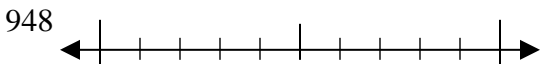
4. _____

5)



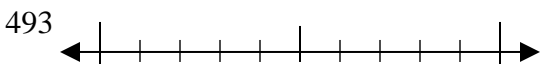
5. _____

6)



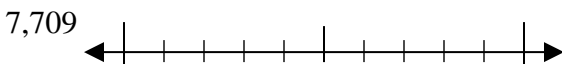
6. _____

7)



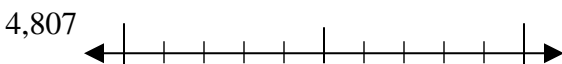
7. _____

8)



8. _____

9)

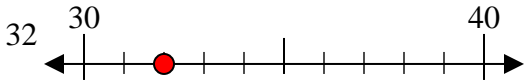


9. _____

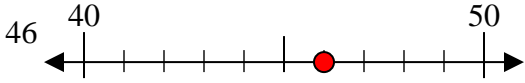


Use the numberlines to round each number to the nearest 10.

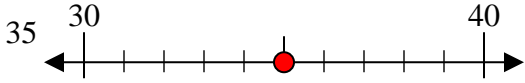
Ex)



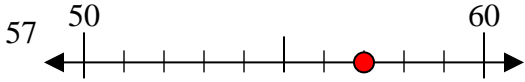
1)



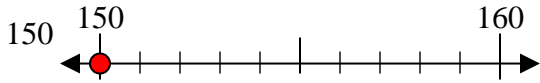
2)



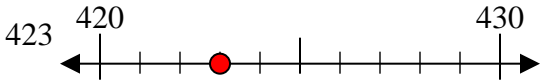
3)



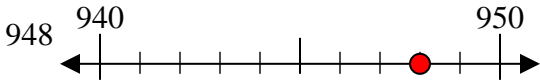
4)



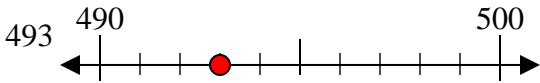
5)



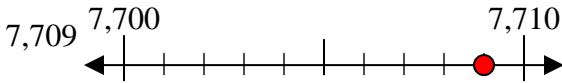
6)



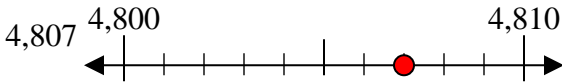
7)



8)



9)



Answers

Ex. 30

1. 50

2. 40

3. 60

4. 150

5. 420

6. 950

7. 490

8. 7710

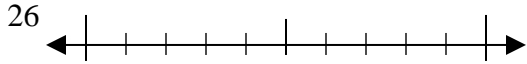
9. 4810



Use the numberlines to round each number to the nearest 10.

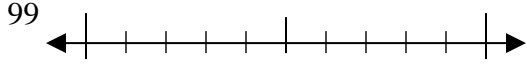
Answers

Ex)



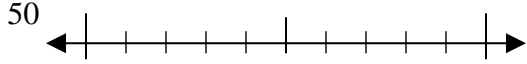
Ex. 30

1)



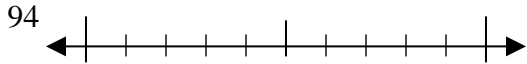
1. _____

2)



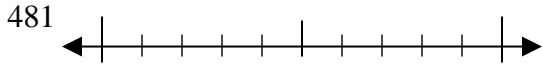
2. _____

3)



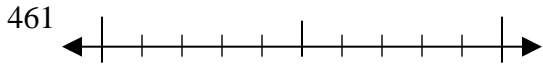
3. _____

4)



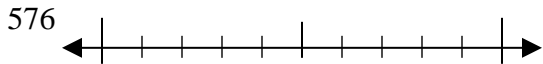
4. _____

5)



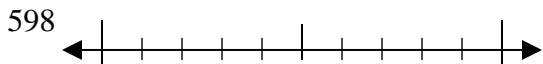
5. _____

6)



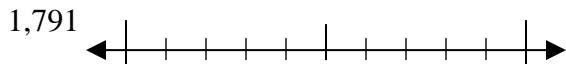
6. _____

7)



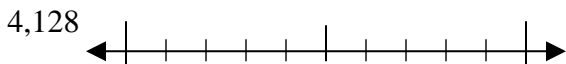
7. _____

8)



8. _____

9)

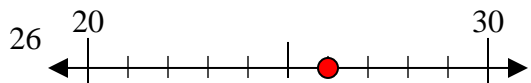


9. _____

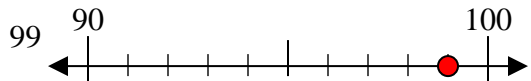


Use the numberlines to round each number to the nearest 10.

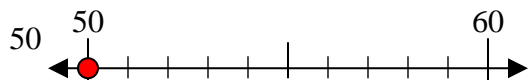
Ex)



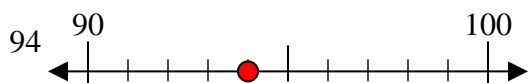
1)



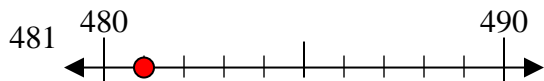
2)



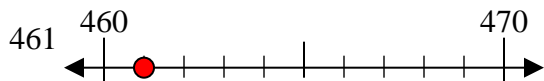
3)



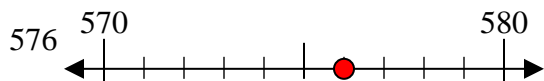
4)



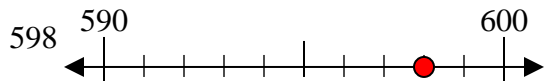
5)



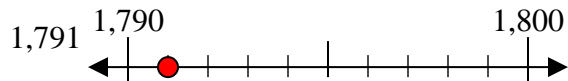
6)



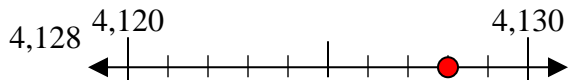
7)



8)



9)



Answers

Ex. 30

1. 100

2. 50

3. 90

4. 480

5. 460

6. 580

7. 600

8. 1790

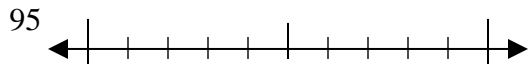
9. 4130



Use the numberlines to round each number to the nearest 10.

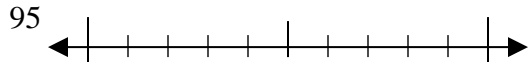
Answers

Ex)



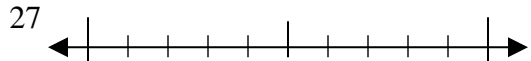
Ex. 100

1)



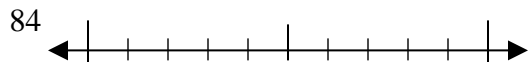
1. _____

2)



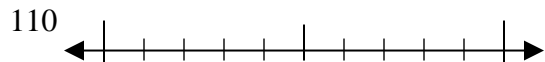
2. _____

3)



3. _____

4)



4. _____

5)



5. _____

6)



6. _____

7)




7. _____

8)



8. _____

9)

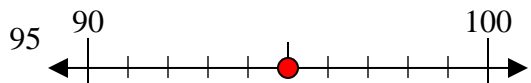


9. _____



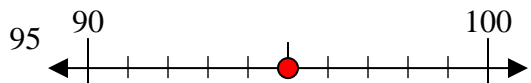
Use the numberlines to round each number to the nearest 10.

Ex)



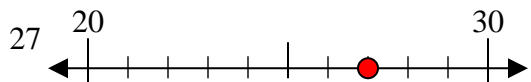
Ex. 100

1)



1. 100

2)



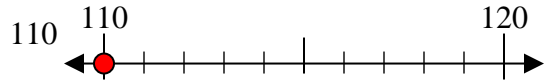
2. 30

3)



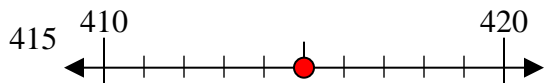
3. 80

4)



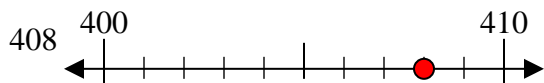
4. 110

5)



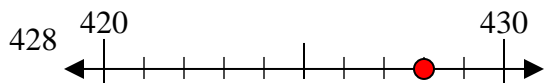
5. 420

6)



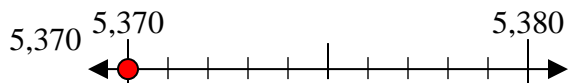
6. 410

7)



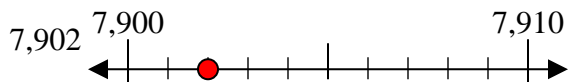
7. 430

8)



8. 5370

9)



9. 7900

Answers