



Use the numberlines to round each number to the nearest 100.

Ex)

92,510



Answers

Ex. 92,500

1)

83,667



1. \_\_\_\_\_

2)

56,093



2. \_\_\_\_\_

3)

795



3. \_\_\_\_\_

4)

275



4. \_\_\_\_\_

5)

7,220



5. \_\_\_\_\_

6)

72,635



6. \_\_\_\_\_

7)

294



7. \_\_\_\_\_

8)

3,251



8. \_\_\_\_\_

9)

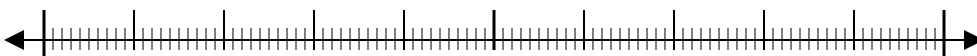
6,031



9. \_\_\_\_\_

10)

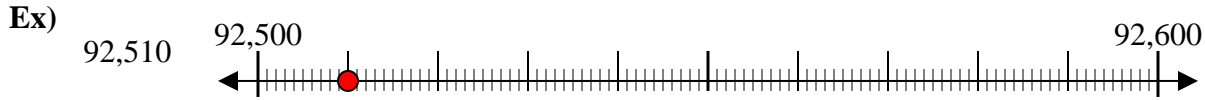
254



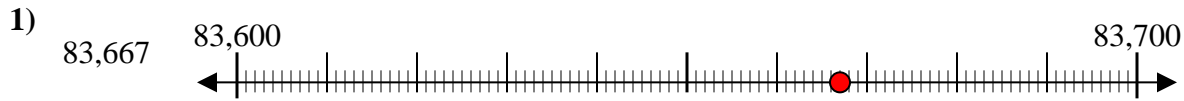
10. \_\_\_\_\_



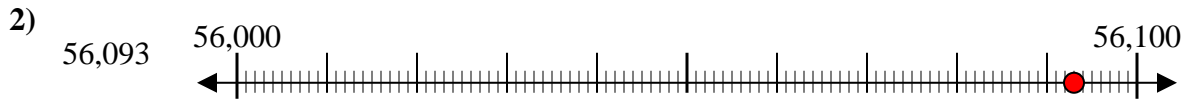
Use the numberlines to round each number to the nearest 100.



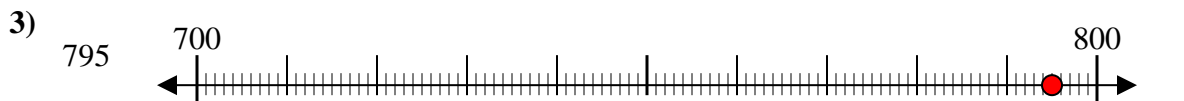
Answers  
Ex. 92,500



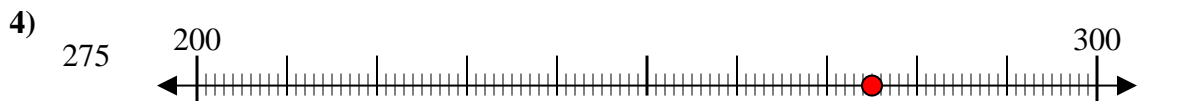
1. 83,700



2. 56,100



3. 800



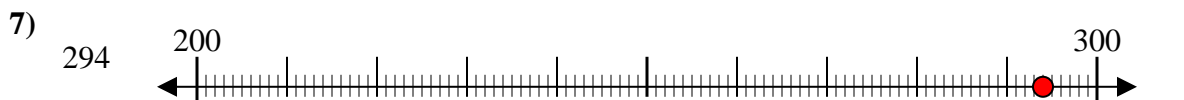
4. 300



5. 7,200



6. 72,600



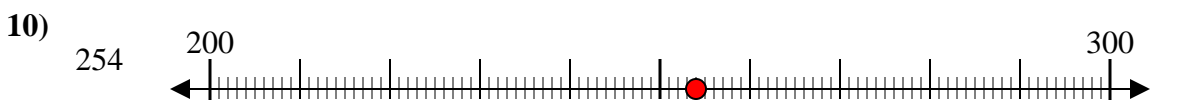
7. 300



8. 3,300



9. 6,000



10. 300