



Use the numberlines to round each number to the nearest 100.

Ex)

22,128



Answers

Ex. 22,100

1)

7,798



1. \_\_\_\_\_

2)

73,791



2. \_\_\_\_\_

3)

48,807



3. \_\_\_\_\_

4)

1,381



4. \_\_\_\_\_

5)

746



5. \_\_\_\_\_

6)

140



6. \_\_\_\_\_

7)

904



7. \_\_\_\_\_

8)

93,445



8. \_\_\_\_\_

9)

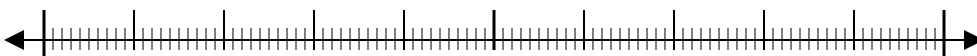
4,176



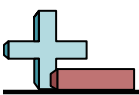
9. \_\_\_\_\_

10)

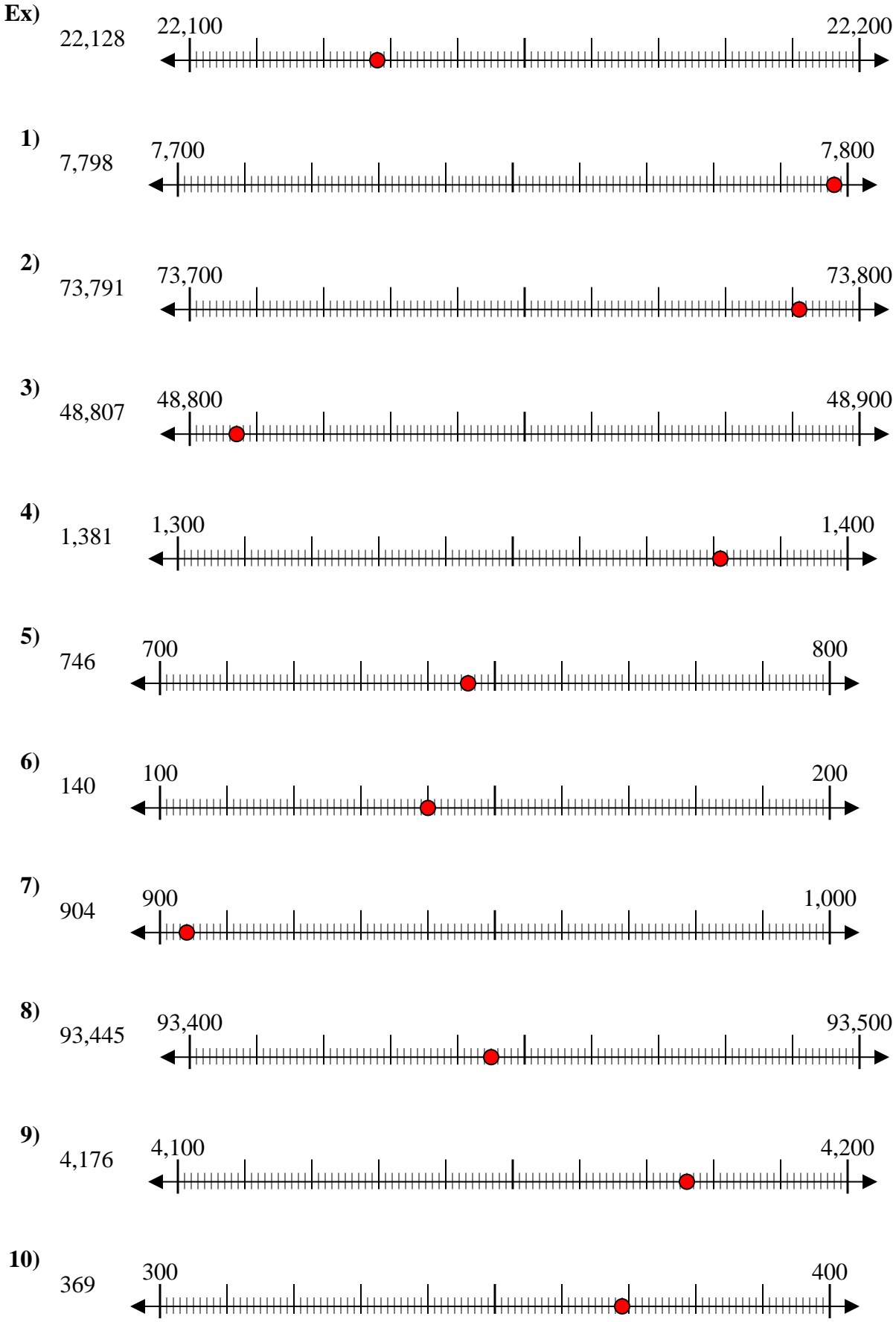
369



10. \_\_\_\_\_



Use the numberlines to round each number to the nearest 100.



Answers

- Ex. 22,100
1. 7,800
2. 73,800
3. 48,800
4. 1,400
5. 700
6. 100
7. 900
8. 93,400
9. 4,200
10. 400