



Use the numberlines to round each number to the nearest 100.

Ex)

25,932



Answers

Ex. 25,900

1)

28,551



1. \_\_\_\_\_

2)

854



2. \_\_\_\_\_

3)

831



3. \_\_\_\_\_

4)

274



4. \_\_\_\_\_

5)

12,793



5. \_\_\_\_\_

6)

5,558



6. \_\_\_\_\_

7)

5,688



7. \_\_\_\_\_

8)

134



8. \_\_\_\_\_

9)

9,335



9. \_\_\_\_\_

10)

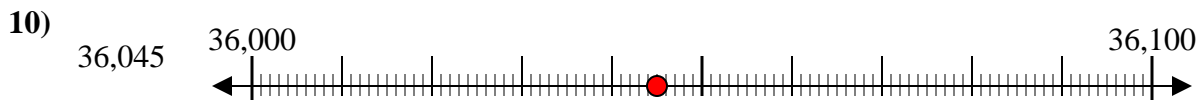
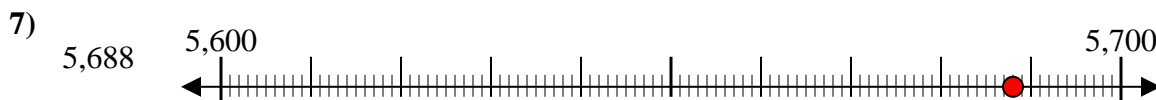
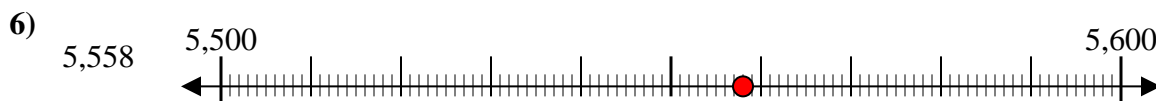
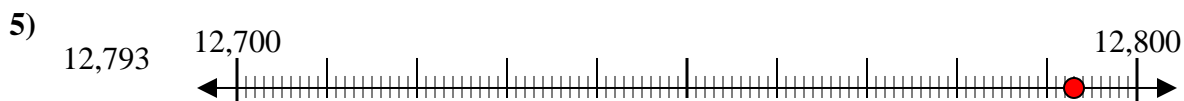
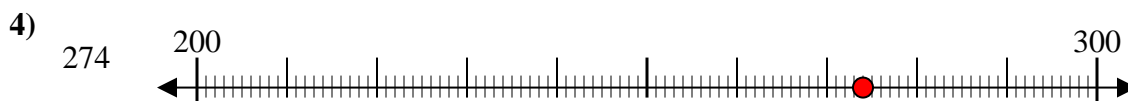
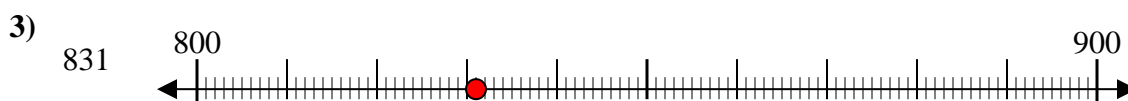
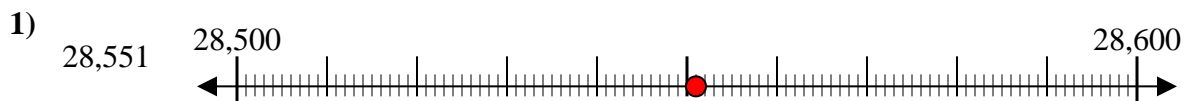
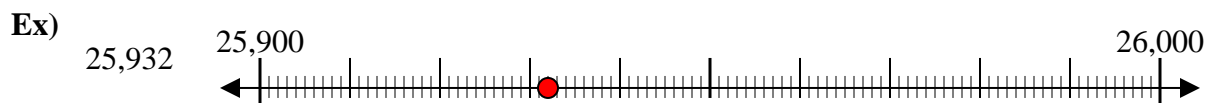
36,045



10. \_\_\_\_\_



Use the numberlines to round each number to the nearest 100.



Answers

Ex. 25,900

1. 28,600

2. 900

3. 800

4. 300

5. 12,800

6. 5,600

7. 5,700

8. 100

9. 9,300

10. 36,000