



Use the numberlines to round each number to the nearest 100.

Answers

Ex)

4,410



Ex. 4,400

1)

853



1. _____

2)

783



2. _____

3)

9,697



3. _____

4)

8,980



4. _____

5)

569



5. _____

6)

9,924



6. _____

7)

99,310



7. _____

8)

90,005



8. _____

9)

17,192



9. _____

10)

60,453



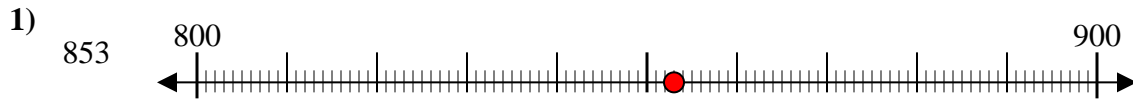
10. _____



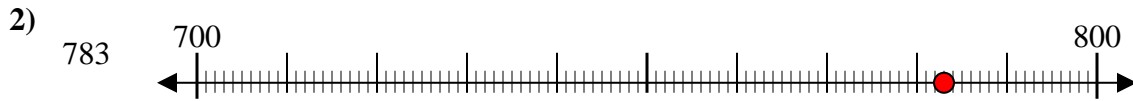
Use the numberlines to round each number to the nearest 100.



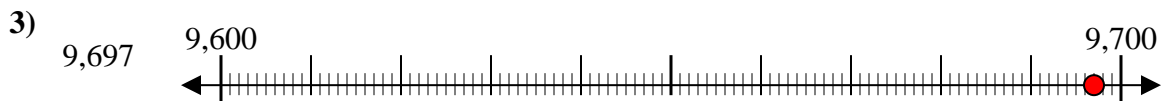
Answers
Ex. **4,400**



1. **900**



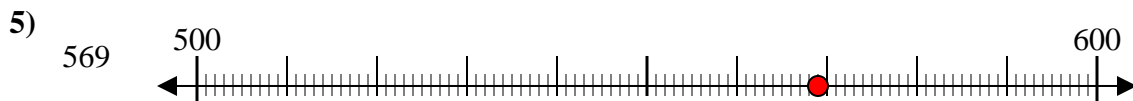
2. **800**



3. **9,700**



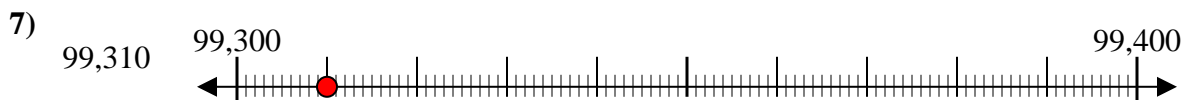
4. **9,000**



5. **600**



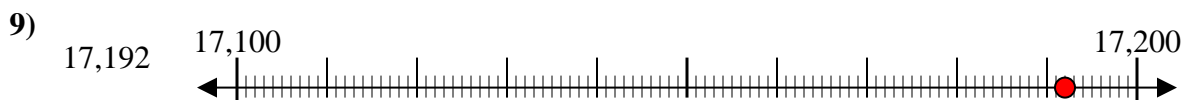
6. **9,900**



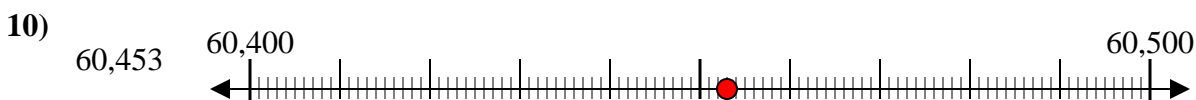
7. **99,300**



8. **90,000**



9. **17,200**



10. **60,500**