



Rotate each shape. Answer as the new coordinates.

θ = Angle of Rotation

Rotation Formula

$$x1 = x \times \cos(\theta) - y \times \sin(\theta)$$

$$y1 = x \times \sin(\theta) + y \times \cos(\theta)$$

In the example to the right the shape is at coordinates (1,4). Lets find the coordinates if we rotated the shape 60°.

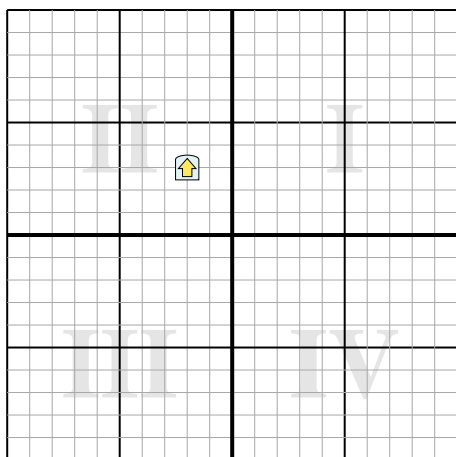


1. $x1 = 1 \times \cos(60) - 4 \times \sin(60)$
 $y1 = 1 \times \sin(60) + 4 \times \cos(60)$
2. $x1 = 1 \times 0.5 - 4 \times 0.87$
 $y1 = 1 \times 0.87 + 4 \times 0.5$
3. $x1 = 0.5 - 3.48$
 $y1 = 0.87 + 2$
4. $x1 = -2.98$
 $y1 = 2.87$
5. Looking at shape, we can see that rotated 60° it is at (-2.98 , 2.87).

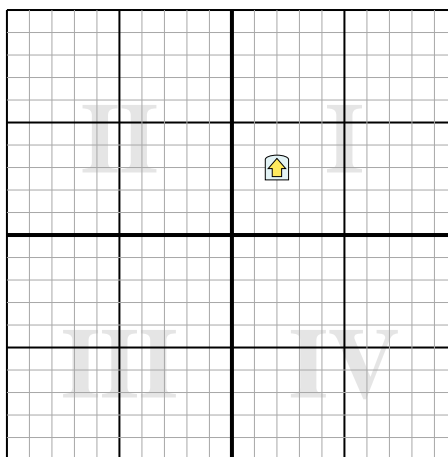
Answers

1. _____
2. _____
3. _____
4. _____

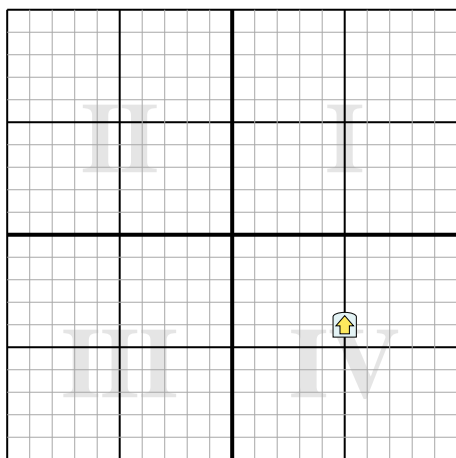
- 1) Rotate the shape -149° around the point (0,0).



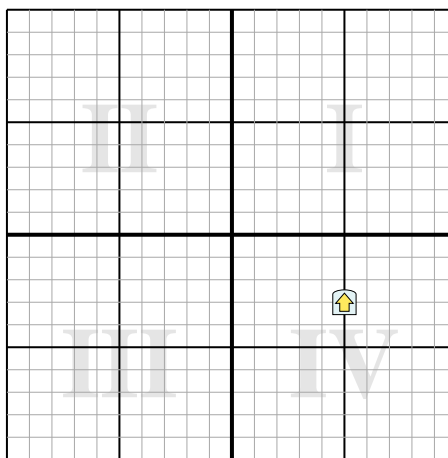
- 2) Rotate the shape -155° around the point (0,0).



- 3) Rotate the shape -49° around the point (0,0).



- 4) Rotate the shape -103° around the point (0,0).





Rotate each shape. Answer as the new coordinates.

θ = Angle of Rotation

Rotation Formula

$$x1 = x \times \cos(\theta) - y \times \sin(\theta)$$

$$y1 = x \times \sin(\theta) + y \times \cos(\theta)$$

In the example to the right the shape is at coordinates (1,4). Lets find the coordinates if we rotated the shape 60°.

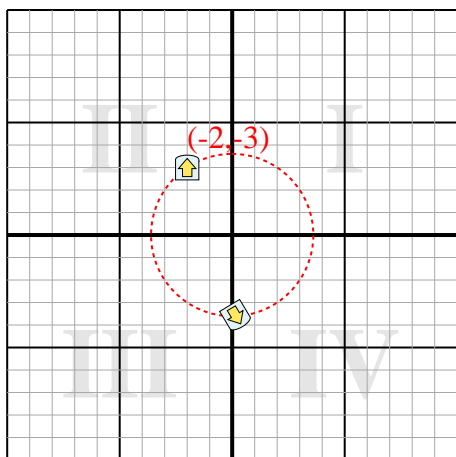


1. $x1 = 1 \times \cos(60) - 4 \times \sin(60)$
 $y1 = 1 \times \sin(60) + 4 \times \cos(60)$
2. $x1 = 1 \times 0.5 - 4 \times 0.87$
 $y1 = 1 \times 0.87 + 4 \times 0.5$
3. $x1 = 0.5 - 3.48$
 $y1 = 0.87 + 2$
4. $x1 = -2.98$
 $y1 = 2.87$
5. Looking at shape, we can see that rotated 60° it is at (-2.98 , 2.87).

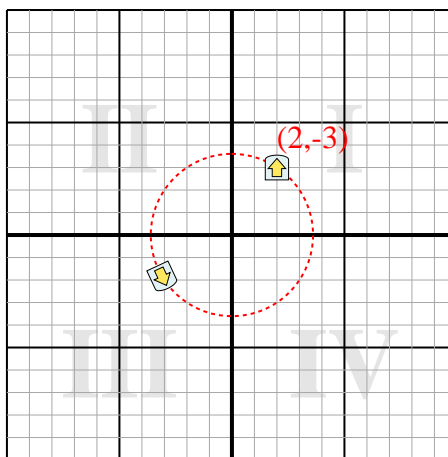
Answers

1. (0.2,-3.6)
2. (-3.1,-1.9)
3. (6.3,1.1)
4. (1.8,5.5)

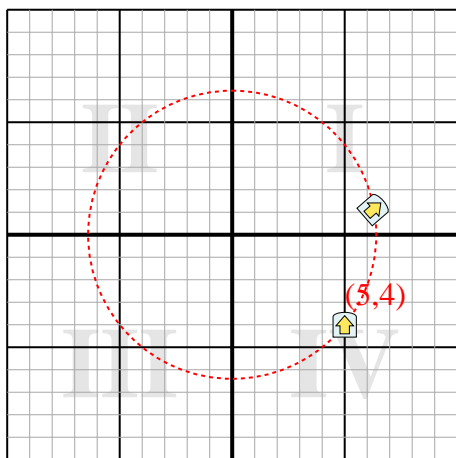
- 1) Rotate the shape -149° around the point (0,0).



- 2) Rotate the shape -155° around the point (0,0).



- 3) Rotate the shape -49° around the point (0,0).



- 4) Rotate the shape -103° around the point (0,0).

