



Use the double numberline to solve the problems.

Answers

- 1) A sloppy joe restaurant gave 6 napkins for every 4 items ordered. If someone bought 16 items, how many napkins should they get?

item

←————→

←————→

napkins

1. \_\_\_\_\_

2. \_\_\_\_\_
  
- 2) For every 9 cans Ned collected for recycling he earned 4 cents. After he collected 72 cans, how much money would he have earned?

cans

←————→

←————→

money

3. \_\_\_\_\_

4. \_\_\_\_\_

5. \_\_\_\_\_
  
- 3) At a school fundraiser for every 6 boxes of chocolate sold you earn 10 points. If you were to sell 12 boxes, how many points would you have earned?

boxes

←————→

←————→

points

6. \_\_\_\_\_

7. \_\_\_\_\_
  
- 4) A store had a sale where you could get 7 bags of cashews for \$8. If you wanted to buy 56 bags, how much would it cost?

cashews

←————→

←————→

price

8. \_\_\_\_\_
  
- 5) A recipe call for 4 teaspoons of seasoning for every 3 batches of chicken. If you have 6 batches of chicken, how many teaspoons of seasoning will you need?

chicken

←————→

←————→

seasoning
  
- 6) In a video game for every 5 enemies defeat, you earned 4 points. If you defeated 50 enemies, how many points would you have earned?

enemies

←————→

←————→

points
  
- 7) A movie theater put 7 cups of oil for every 10 batches of popcorn they made. After they had made 70 batches of popcorn, how much oil would they have used?

popcorn

←————→

←————→

oil
  
- 8) A builder could get 3 sheets of sheetrock for \$2. If he bought 27 sheets, how much money would he have spent?

heetrock

←————→

←————→

price

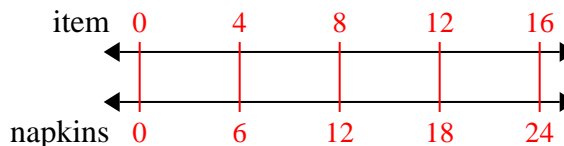


Use the double numberline to solve the problems.

Answers

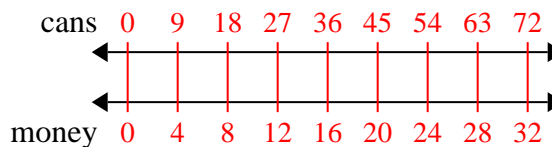
1)

A sloppy joe restaurant gave 6 napkins for every 4 items ordered. If someone bought 16 items, how many napkins should they get?

1. 24

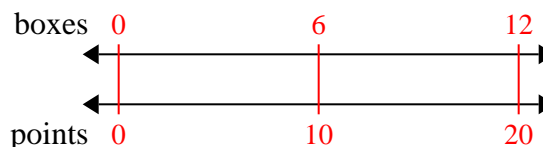
2)

For every 9 cans Ned collected for recycling he earned 4 cents. After he collected 72 cans, how much money would he have earned?

3. 32

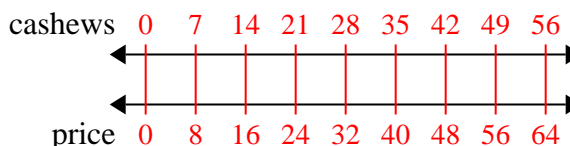
3)

At a school fundraiser for every 6 boxes of chocolate sold you earn 10 points. If you were to sell 12 boxes, how many points would you have earned?

4. 64

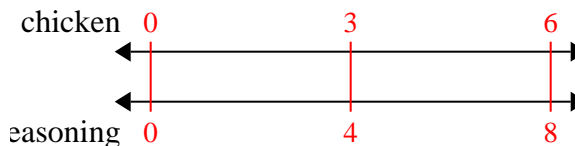
4)

A store had a sale where you could get 7 bags of cashews for \$8. If you wanted to buy 56 bags, how much would it cost?

5. 8

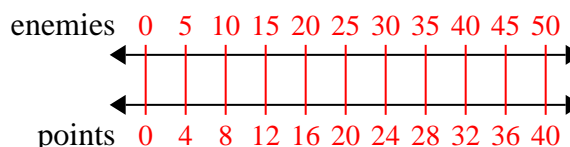
5)

A recipe call for 4 teaspoons of seasoning for every 3 batches of chicken. If you have 6 batches of chicken, how many teaspoons of seasoning will you need?

6. 40

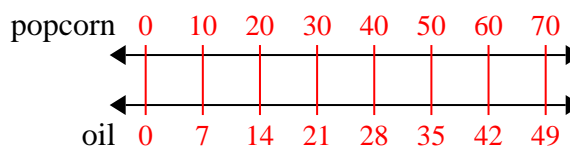
6)

In a video game for every 5 enemies defeat, you earned 4 points. If you defeated 50 enemies, how many points would you have earned?

7. 49

7)

A movie theater put 7 cups of oil for every 10 batches of popcorn they made. After they had made 70 batches of popcorn, how much oil would they have used?

8. 18

8)

A builder could get 3 sheets of sheetrock for \$2. If he bought 27 sheets, how much money would he have spent?

