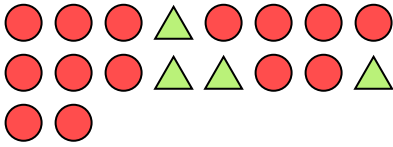







Solve each problem.

Ex) What is the ratio of triangles to circles?



1) What is the ratio of moons to pentagons?



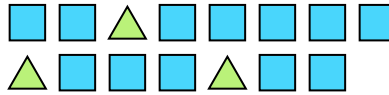
Answers

Ex. 4:14

2) What is the ratio of circles to stars?

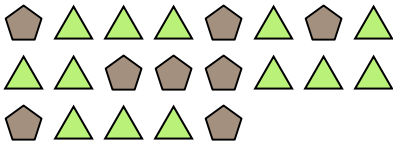


3) What is the ratio of squares to triangles?



1. 15:8

4) What is the ratio of triangles to pentagons?



5) What is the ratio of triangles to hearts?




2. 9:7

3. 12:3

6) What is the ratio of moons to circles?



7) What is the ratio of circles to moons?



4. 13:8


5. 4:10

6. 5:4

8) What is the ratio of moons to stars?



9) What is the ratio of stars to pentagons?




7. 11:12

8. 7:5

9. 6:13

10) What is the ratio of circles to moons?



11) What is the ratio of pentagons to moons?



10. 8:15

11. 2:3