



Solve each problem.

Ex) What is the ratio of moons to hearts?



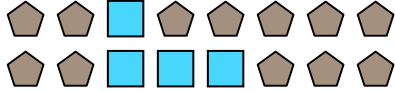
1) What is the ratio of stars to hearts?




Answers

Ex. 15:7

2) What is the ratio of squares to pentagons?




3) What is the ratio of hearts to squares?




1. _____

2. _____

4) What is the ratio of stars to circles?



5) What is the ratio of hearts to moons?



3. _____

4. _____

5. _____

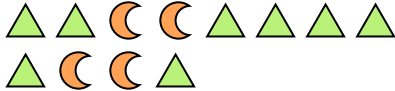
6. _____

7. _____

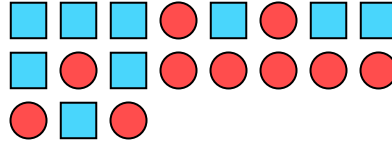
8. _____

9. _____

6) What is the ratio of moons to triangles?



7) What is the ratio of squares to circles?



10. _____

11. _____

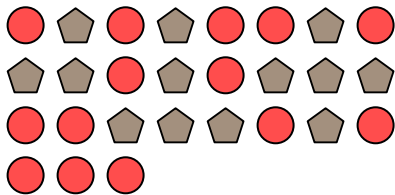
8) What is the ratio of stars to hearts?




9) What is the ratio of triangles to hearts?



10) What is the ratio of circles to pentagons?



11) What is the ratio of stars to squares?





Solve each problem.

Ex) What is the ratio of moons to hearts?



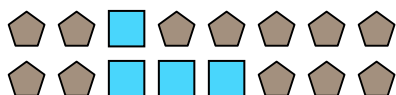
1) What is the ratio of stars to hearts?




Answers

Ex. 15:7

2) What is the ratio of squares to pentagons?




3) What is the ratio of hearts to squares?




1. 3:10

2. 4:12

4) What is the ratio of stars to circles?



5) What is the ratio of hearts to moons?



3. 6:3

4. 2:15

5. 9:10

6. 4:8

7. 9:10

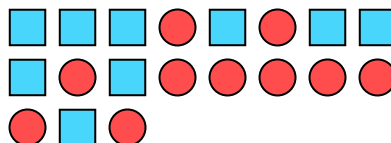
8. 2:8

9. 6:5

6) What is the ratio of moons to triangles?



7) What is the ratio of squares to circles?



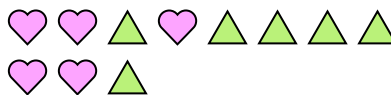
10. 14:13

11. 7:10

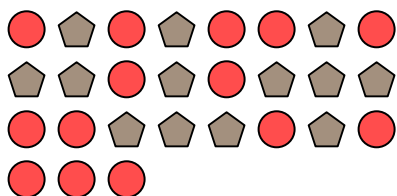
8) What is the ratio of stars to hearts?



9) What is the ratio of triangles to hearts?



10) What is the ratio of circles to pentagons?



11) What is the ratio of stars to squares?

