



Solve each problem using the distributive property of division.

1)  $295 \div 5 =$

2)  $368 \div 8 =$

3)  $216 \div 9 =$

4)  $240 \div 5 =$

5)  $800 \div 8 =$

6)  $480 \div 5 =$

7)  $320 \div 5 =$

8)  $104 \div 4 =$

9)  $495 \div 5 =$

10)  $495 \div 9 =$

Answers

1. \_\_\_\_\_

2. \_\_\_\_\_

3. \_\_\_\_\_

4. \_\_\_\_\_

5. \_\_\_\_\_

6. \_\_\_\_\_

7. \_\_\_\_\_

8. \_\_\_\_\_


9. \_\_\_\_\_

10. \_\_\_\_\_

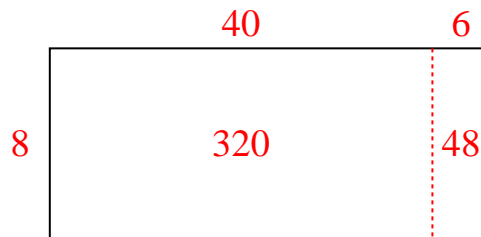


Solve each problem using the distributive property of division.

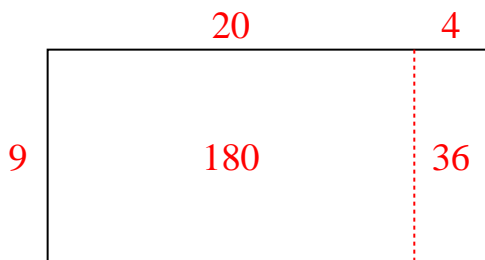
1)  $295 \div 5 =$



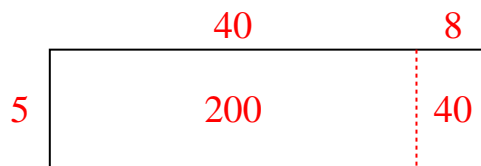
2)  $368 \div 8 =$



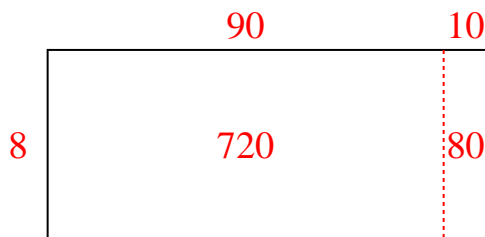
3)  $216 \div 9 =$



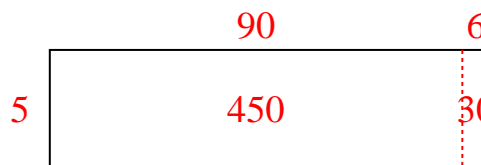
4)  $240 \div 5 =$



5)  $800 \div 8 =$



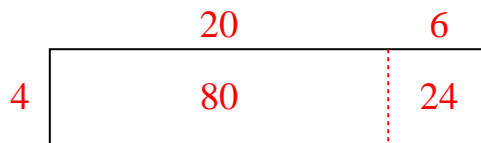
6)  $480 \div 5 =$



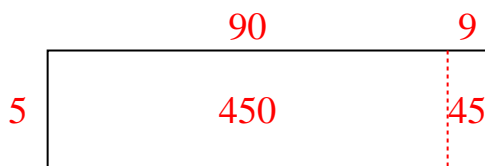
7)  $320 \div 5 =$



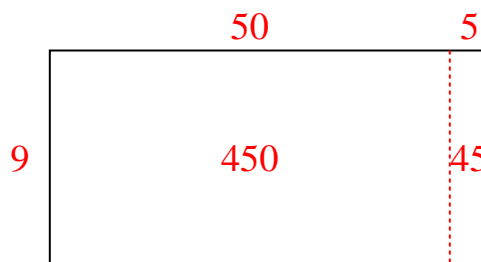
8)  $104 \div 4 =$



9)  $495 \div 5 =$



10)  $495 \div 9 =$

Answers1. **59**2. **46**3. **24**4. **48**5. **100**6. **96**7. **64**8. **26**9. **99**10. **55**