





Solve each problem.


- 1) Which number is the spinner least likely to land on?



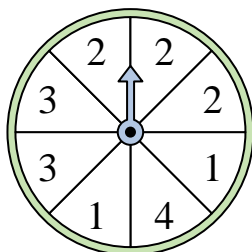
- 2) Which number is the spinner most likely to land on?



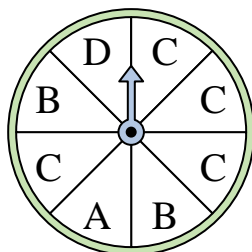
- 3) Which number is the spinner least likely to land on?



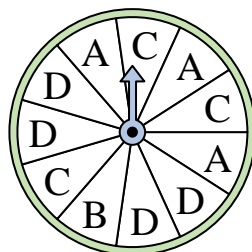
- 4) Which two numbers is the spinner equally likely to land on?



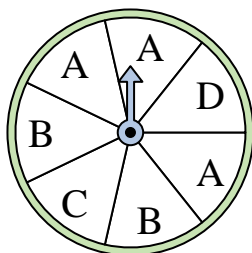
- 5) Which letter is the spinner most likely to land on?




- 6) Which letter is the spinner least likely to land on?




- 7) Which two letters is the spinner equally likely to land on?



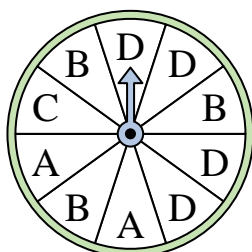
- 8) Which number is the spinner most likely to land on?



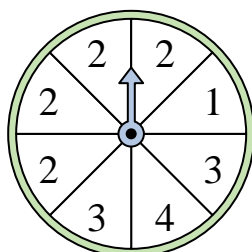
- 9) Which two numbers is the spinner equally likely to land on?



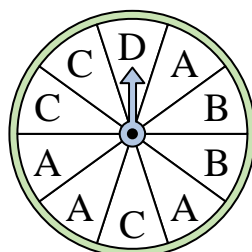
- 10) Which letter is the spinner least likely to land on?



- 11) Which number is the spinner most likely to land on?



- 12) Which letter is the spinner least likely to land on?




Answers

1. _____
2. _____
3. _____
4. _____
5. _____
6. _____
7. _____
8. _____
9. _____
10. _____
11. _____
12. _____




Solve each problem.

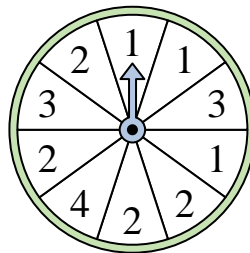
- 1) Which number is the spinner least likely to land on?



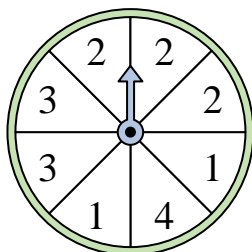
- 2) Which number is the spinner most likely to land on?



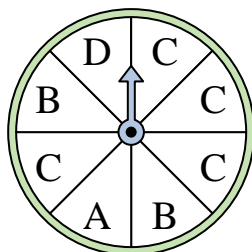
- 3) Which number is the spinner least likely to land on?



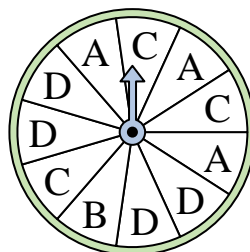
- 4) Which two numbers is the spinner equally likely to land on?



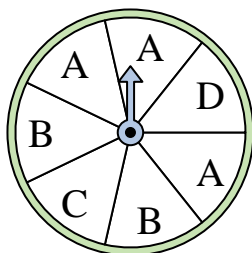
- 5) Which letter is the spinner most likely to land on?




- 6) Which letter is the spinner least likely to land on?




- 7) Which two letters is the spinner equally likely to land on?



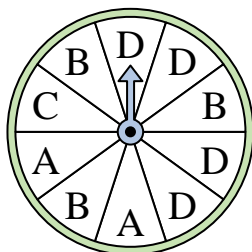
- 8) Which number is the spinner most likely to land on?



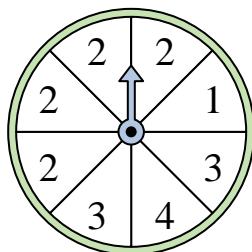
- 9) Which two numbers is the spinner equally likely to land on?



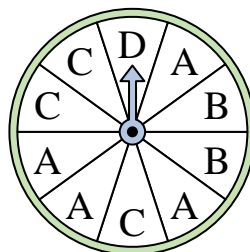
- 10) Which letter is the spinner least likely to land on?



- 11) Which number is the spinner most likely to land on?



- 12) Which letter is the spinner least likely to land on?



Answers

1. 2

2. 2

3. 4

4. 1 & 3

5. C

6. B

7. C & D

8. 3

9. 1 & 4

10. C


11. 2

12. D




Solve each problem.

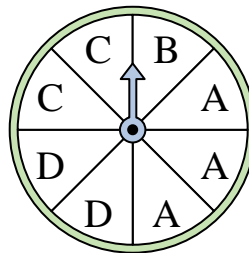
- 1) Which number is the spinner most likely to land on?



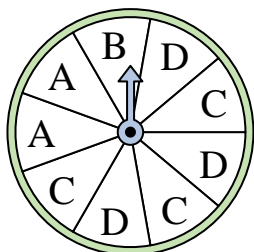
- 2) Which number is the spinner least likely to land on?



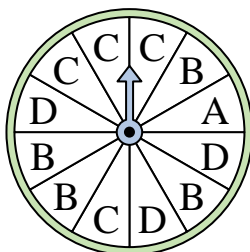
- 3) Which two letters is the spinner equally likely to land on?



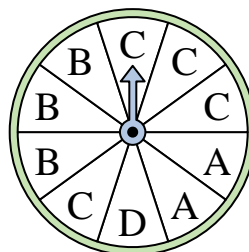
- 4) Which two letters is the spinner equally likely to land on?



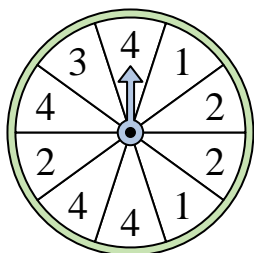
- 5) Which letter is the spinner least likely to land on?



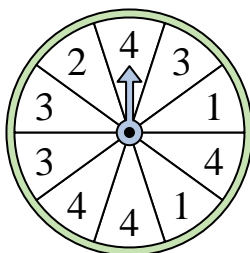
- 6) Which letter is the spinner least likely to land on?



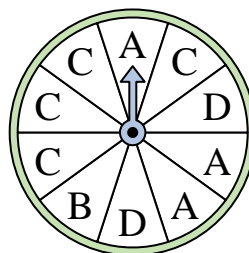
- 7) Which number is the spinner most likely to land on?



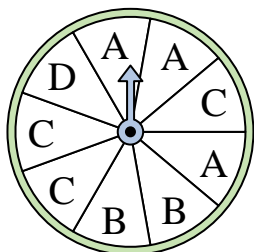
- 8) Which number is the spinner most likely to land on?




- 9) Which letter is the spinner least likely to land on?



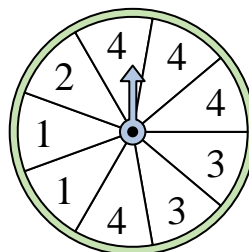
- 10) Which two letters is the spinner equally likely to land on?



- 11) Which number is the spinner least likely to land on?



- 12) Which number is the spinner most likely to land on?




Answers

1. _____
2. _____
3. _____
4. _____
5. _____
6. _____
7. _____
8. _____
9. _____
10. _____
11. _____
12. _____




Solve each problem.

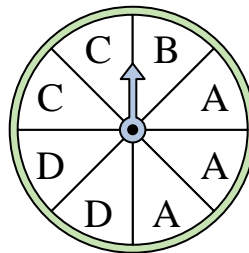
- 1) Which number is the spinner most likely to land on?



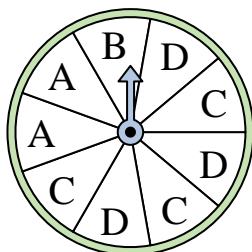
- 2) Which number is the spinner least likely to land on?



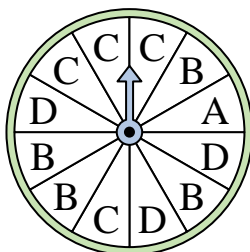
- 3) Which two letters is the spinner equally likely to land on?



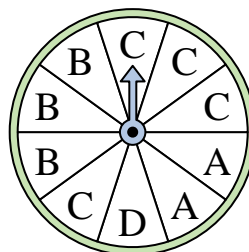
- 4) Which two letters is the spinner equally likely to land on?



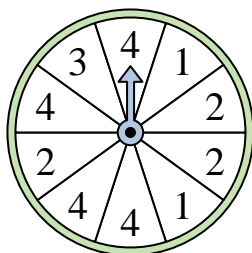
- 5) Which letter is the spinner least likely to land on?



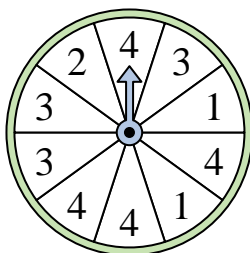
- 6) Which letter is the spinner least likely to land on?



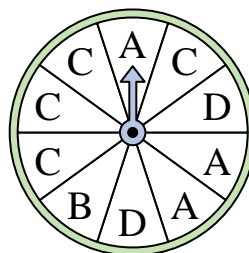
- 7) Which number is the spinner most likely to land on?



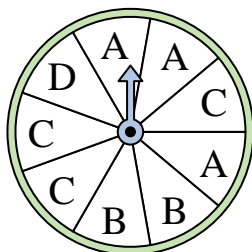
- 8) Which number is the spinner most likely to land on?




- 9) Which letter is the spinner least likely to land on?



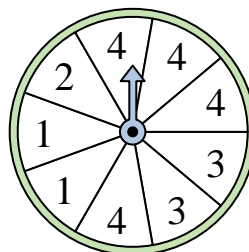
- 10) Which two letters is the spinner equally likely to land on?



- 11) Which number is the spinner least likely to land on?



- 12) Which number is the spinner most likely to land on?



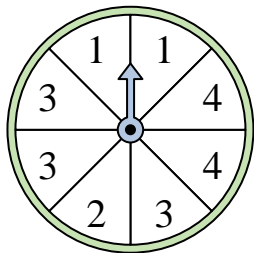
Answers

1. 2
2. 1
3. C & D
4. C & D
5. A
6. D
7. 4
8. 4
9. B
10. A & C
11. 2
12. 4

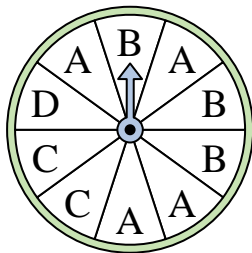


Solve each problem.

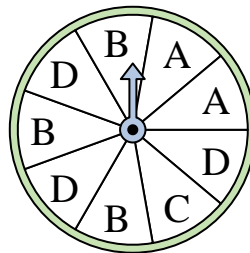
- 1) Which two numbers is the spinner equally likely to land on?



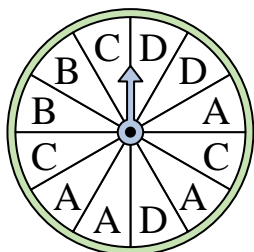
- 2) Which letter is the spinner least likely to land on?




- 3) Which two letters is the spinner equally likely to land on?



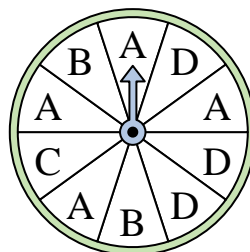
- 4) Which letter is the spinner least likely to land on?




- 5) Which number is the spinner least likely to land on?



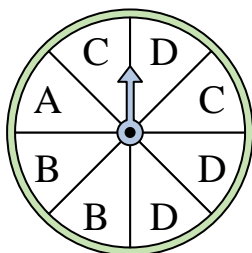
- 6) Which letter is the spinner most likely to land on?



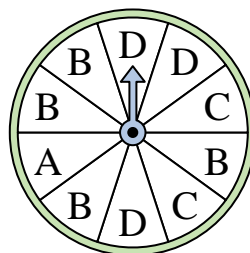
- 7) Which number is the spinner least likely to land on?



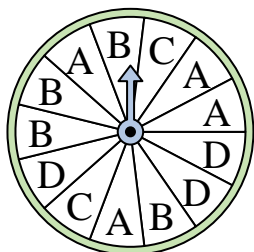
- 8) Which letter is the spinner most likely to land on?




- 9) Which letter is the spinner least likely to land on?



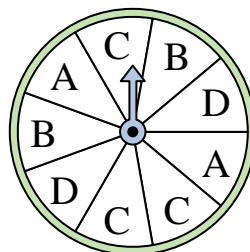
- 10) Which letter is the spinner least likely to land on?



- 11) Which two numbers is the spinner equally likely to land on?



- 12) Which letter is the spinner most likely to land on?



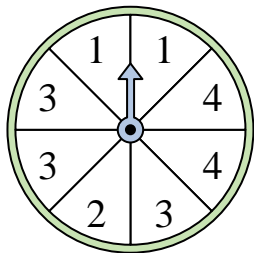
Answers

1. _____
2. _____
3. _____
4. _____
5. _____
6. _____
7. _____
8. _____
9. _____
10. _____
11. _____
12. _____

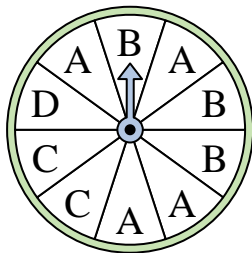


Solve each problem.

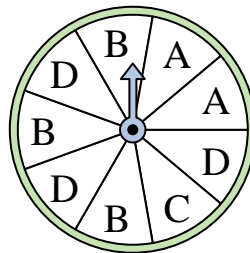
- 1) Which two numbers is the spinner equally likely to land on?



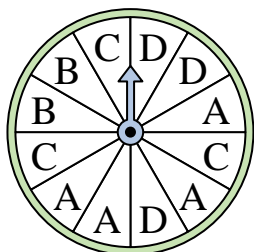
- 2) Which letter is the spinner least likely to land on?




- 3) Which two letters is the spinner equally likely to land on?



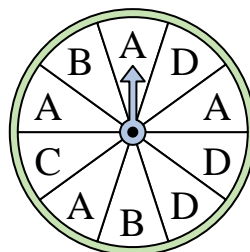
- 4) Which letter is the spinner least likely to land on?




- 5) Which number is the spinner least likely to land on?



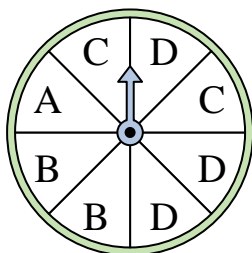
- 6) Which letter is the spinner most likely to land on?



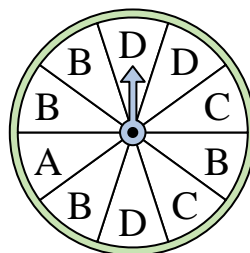
- 7) Which number is the spinner least likely to land on?



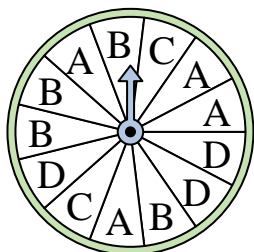
- 8) Which letter is the spinner most likely to land on?




- 9) Which letter is the spinner least likely to land on?



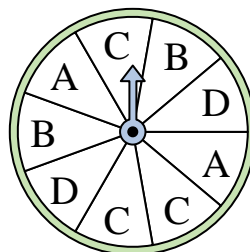
- 10) Which letter is the spinner least likely to land on?



- 11) Which two numbers is the spinner equally likely to land on?



- 12) Which letter is the spinner most likely to land on?




Answers

1. 1 & 4
2. D
3. B & D
4. B
5. 4
6. A
7. 1
8. D
9. A
10. C
11. 2 & 3
12. C

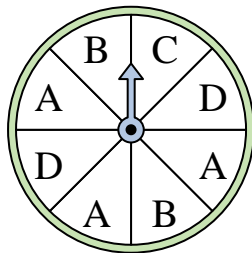


Solve each problem.

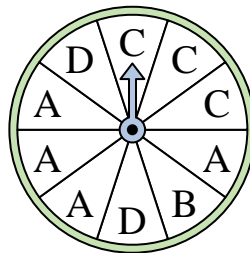
- 1) Which number is the spinner least likely to land on?



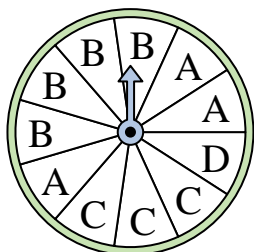
- 2) Which two letters is the spinner equally likely to land on?



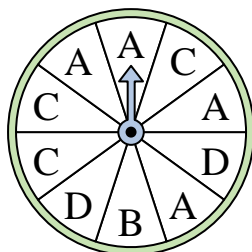
- 3) Which letter is the spinner least likely to land on?



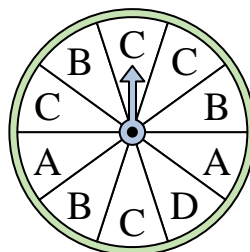
- 4) Which letter is the spinner least likely to land on?



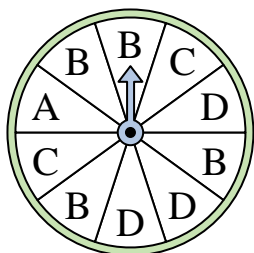
- 5) Which letter is the spinner most likely to land on?



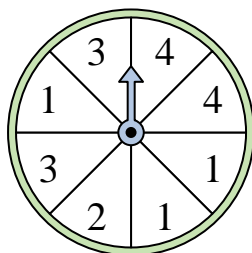
- 6) Which letter is the spinner most likely to land on?



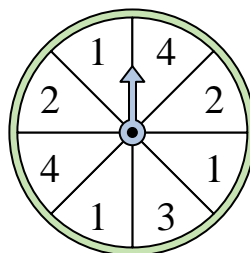
- 7) Which letter is the spinner most likely to land on?



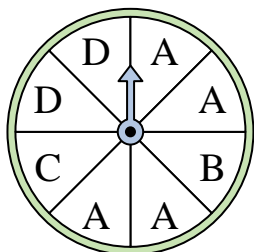
- 8) Which number is the spinner most likely to land on?



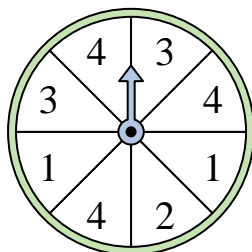
- 9) Which two numbers is the spinner equally likely to land on?



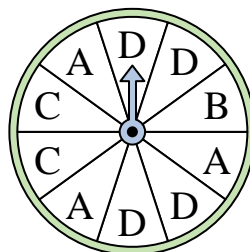
- 10) Which letter is the spinner most likely to land on?



- 11) Which two numbers is the spinner equally likely to land on?



- 12) Which letter is the spinner least likely to land on?




Answers

- 1. _____
- 2. _____
- 3. _____
- 4. _____
- 5. _____
- 6. _____
- 7. _____
- 8. _____
- 9. _____
- 10. _____
- 11. _____
- 12. _____

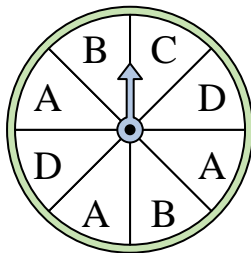


Solve each problem.

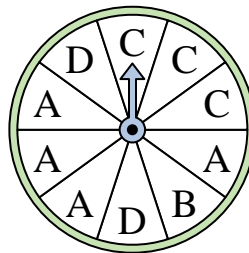
- 1) Which number is the spinner least likely to land on?



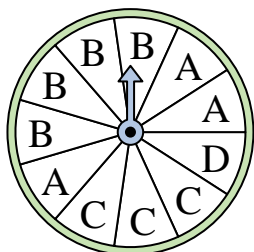
- 2) Which two letters is the spinner equally likely to land on?



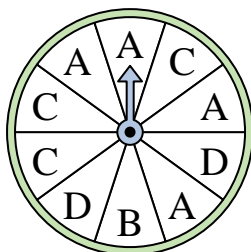
- 3) Which letter is the spinner least likely to land on?



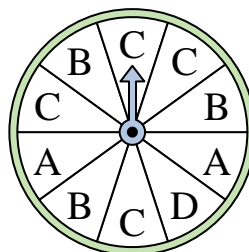
- 4) Which letter is the spinner least likely to land on?



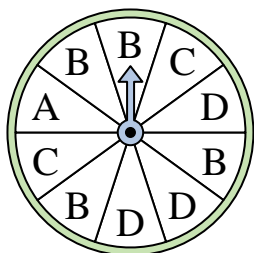
- 5) Which letter is the spinner most likely to land on?



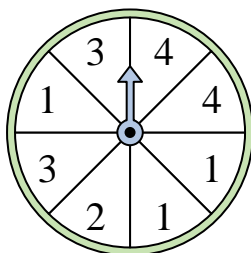
- 6) Which letter is the spinner most likely to land on?



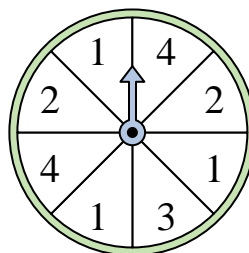
- 7) Which letter is the spinner most likely to land on?



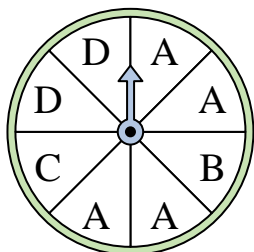
- 8) Which number is the spinner most likely to land on?



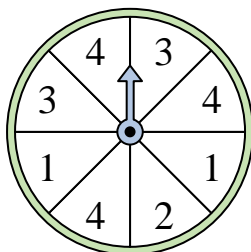
- 9) Which two numbers is the spinner equally likely to land on?



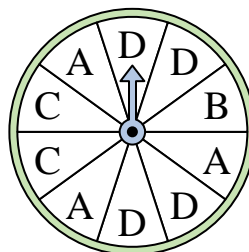
- 10) Which letter is the spinner most likely to land on?



- 11) Which two numbers is the spinner equally likely to land on?



- 12) Which letter is the spinner least likely to land on?



Answers

1. **4**

2. **B & D**

3. **B**

4. **D**

5. **A**

6. **C**

7. **B**

8. **1**

9. **2 & 4**

10. **A**


11. **1 & 3**

12. **B**




Solve each problem.

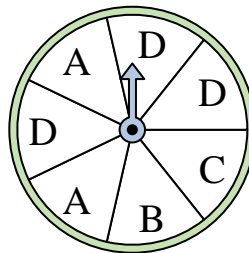
- 1) Which number is the spinner least likely to land on?



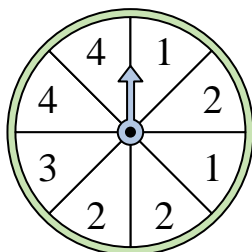
- 2) Which number is the spinner least likely to land on?



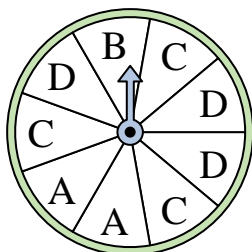
- 3) Which two letters is the spinner equally likely to land on?



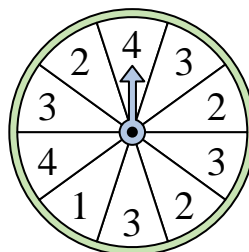
- 4) Which number is the spinner most likely to land on?




- 5) Which two letters is the spinner equally likely to land on?




- 6) Which number is the spinner least likely to land on?



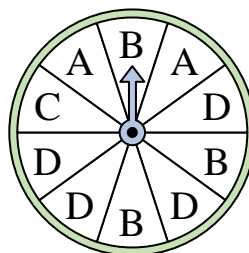
- 7) Which two numbers is the spinner equally likely to land on?



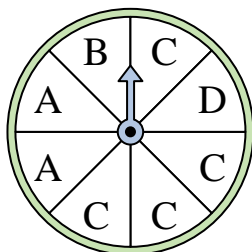
- 8) Which number is the spinner least likely to land on?



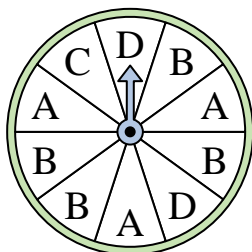
- 9) Which letter is the spinner most likely to land on?



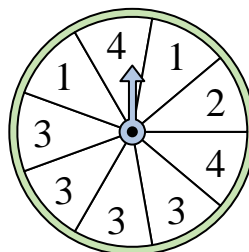
- 10) Which letter is the spinner most likely to land on?



- 11) Which letter is the spinner most likely to land on?



- 12) Which number is the spinner most likely to land on?




Answers

1. _____
2. _____
3. _____
4. _____
5. _____
6. _____
7. _____
8. _____
9. _____
10. _____
11. _____
12. _____




Solve each problem.

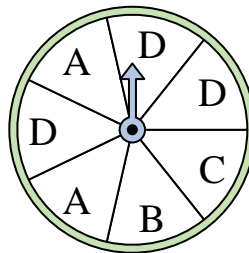
- 1) Which number is the spinner least likely to land on?



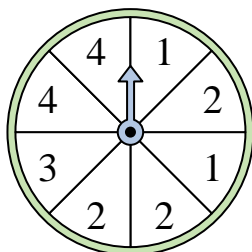
- 2) Which number is the spinner least likely to land on?



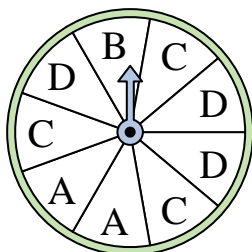
- 3) Which two letters is the spinner equally likely to land on?



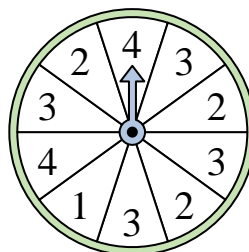
- 4) Which number is the spinner most likely to land on?




- 5) Which two letters is the spinner equally likely to land on?




- 6) Which number is the spinner least likely to land on?



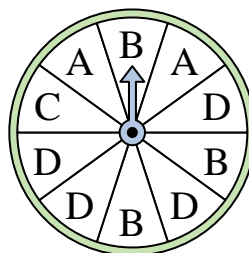
- 7) Which two numbers is the spinner equally likely to land on?



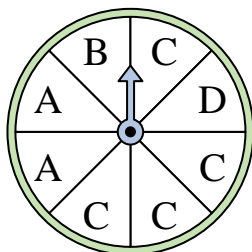
- 8) Which number is the spinner least likely to land on?



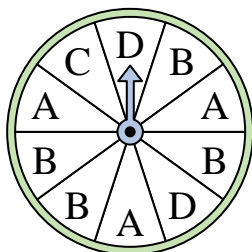
- 9) Which letter is the spinner most likely to land on?



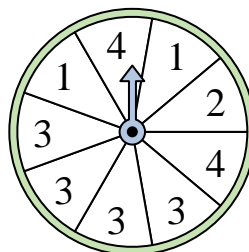
- 10) Which letter is the spinner most likely to land on?



- 11) Which letter is the spinner most likely to land on?



- 12) Which number is the spinner most likely to land on?



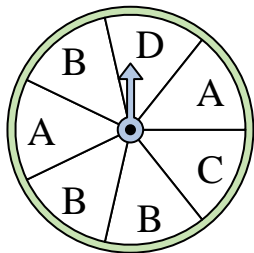
Answers

1. 1
2. 1
3. B & C
4. 2
5. C & D
6. 1
7. 1 & 2
8. 4
9. D
10. C
11. B
12. 3

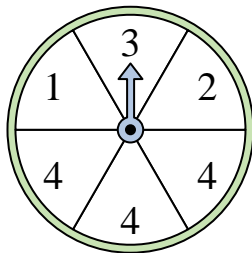


Solve each problem.

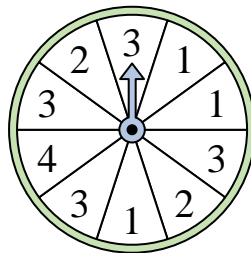
- 1) Which two letters is the spinner equally likely to land on?




- 2) Which number is the spinner most likely to land on?



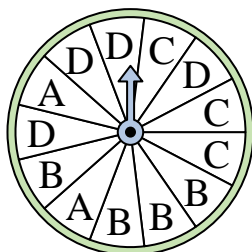
- 3) Which number is the spinner least likely to land on?



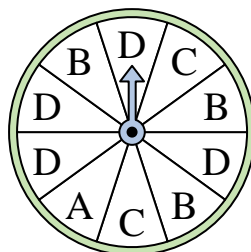
- 4) Which number is the spinner least likely to land on?



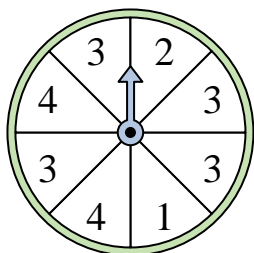
- 5) Which letter is the spinner least likely to land on?



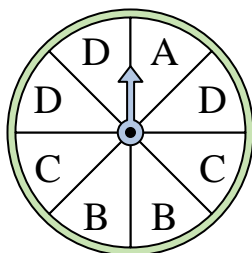
- 6) Which letter is the spinner most likely to land on?



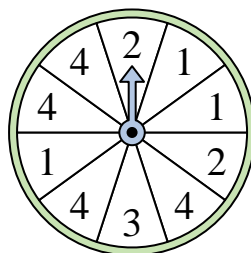
- 7) Which number is the spinner most likely to land on?




- 8) Which two letters is the spinner equally likely to land on?




- 9) Which number is the spinner most likely to land on?



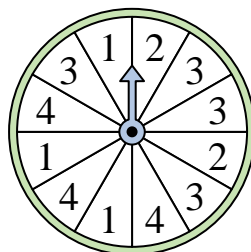
- 10) Which number is the spinner least likely to land on?



- 11) Which number is the spinner most likely to land on?



- 12) Which number is the spinner least likely to land on?



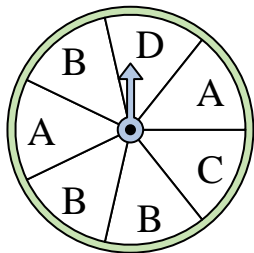
Answers

1. _____
2. _____
3. _____
4. _____
5. _____
6. _____
7. _____
8. _____
9. _____
10. _____
11. _____
12. _____

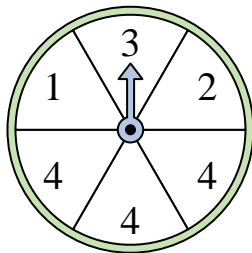


Solve each problem.

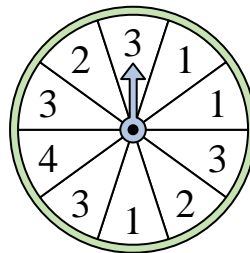
- 1) Which two letters is the spinner equally likely to land on?




- 2) Which number is the spinner most likely to land on?



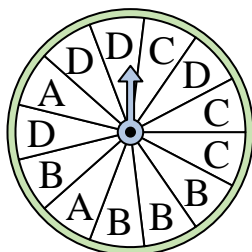
- 3) Which number is the spinner least likely to land on?



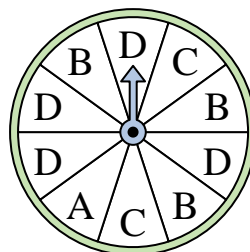
- 4) Which number is the spinner least likely to land on?



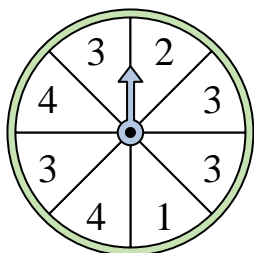
- 5) Which letter is the spinner least likely to land on?



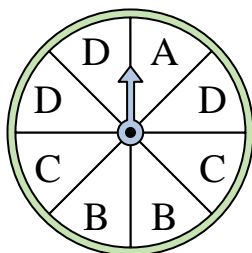
- 6) Which letter is the spinner most likely to land on?



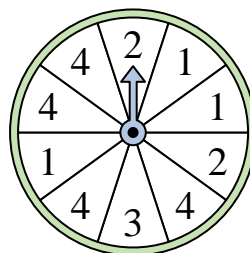
- 7) Which number is the spinner most likely to land on?




- 8) Which two letters is the spinner equally likely to land on?




- 9) Which number is the spinner most likely to land on?



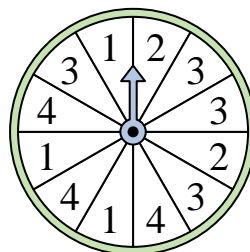
- 10) Which number is the spinner least likely to land on?



- 11) Which number is the spinner most likely to land on?



- 12) Which number is the spinner least likely to land on?



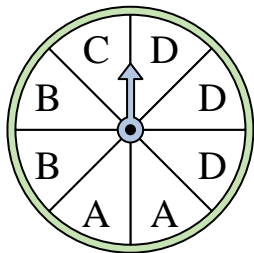
Answers

1. **C & D**
2. **4**
3. **4**
4. **2**
5. **A**
6. **D**
7. **3**
8. **B & C**
9. **4**
10. **4**
11. **4**
12. **2**

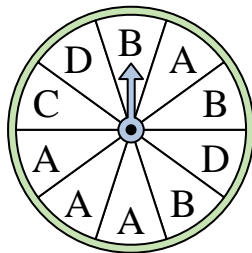


Solve each problem.

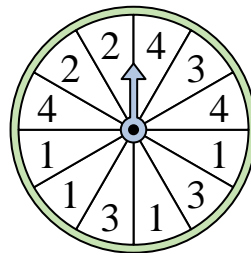
- 1) Which letter is the spinner most likely to land on?




- 2) Which letter is the spinner least likely to land on?




- 3) Which number is the spinner least likely to land on?



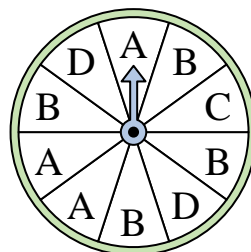
- 4) Which number is the spinner least likely to land on?



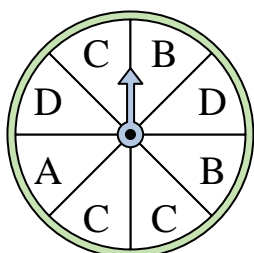
- 5) Which number is the spinner most likely to land on?



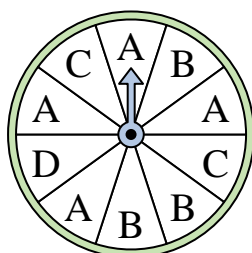
- 6) Which letter is the spinner most likely to land on?



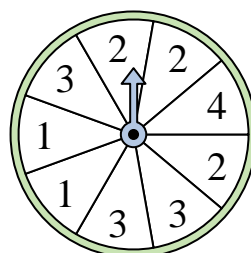
- 7) Which two letters is the spinner equally likely to land on?



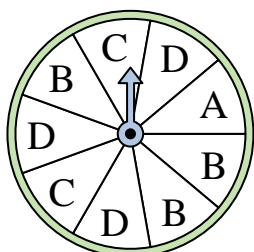
- 8) Which letter is the spinner most likely to land on?



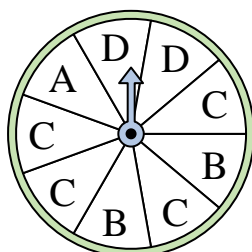
- 9) Which two numbers is the spinner equally likely to land on?




- 10) Which two letters is the spinner equally likely to land on?



- 11) Which letter is the spinner most likely to land on?



- 12) Which number is the spinner least likely to land on?



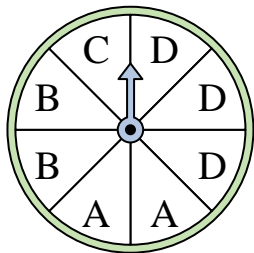
Answers

- 1. _____
- 2. _____
- 3. _____
- 4. _____
- 5. _____
- 6. _____
- 7. _____
- 8. _____
- 9. _____
- 10. _____
- 11. _____
- 12. _____

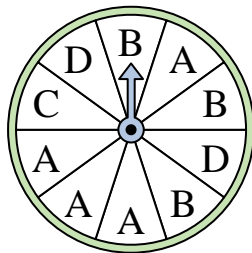


Solve each problem.


- 1) Which letter is the spinner most likely to land on?




- 2) Which letter is the spinner least likely to land on?




- 3) Which number is the spinner least likely to land on?



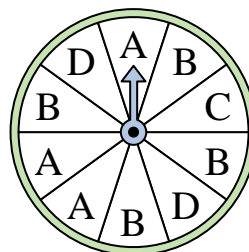
- 4) Which number is the spinner least likely to land on?



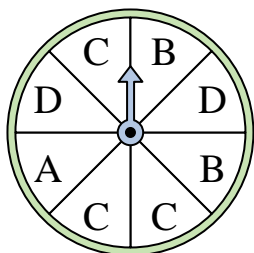
- 5) Which number is the spinner most likely to land on?



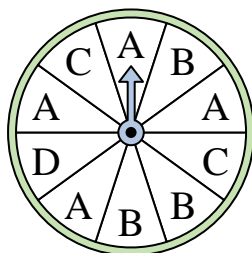
- 6) Which letter is the spinner most likely to land on?



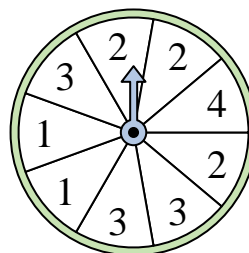
- 7) Which two letters is the spinner equally likely to land on?



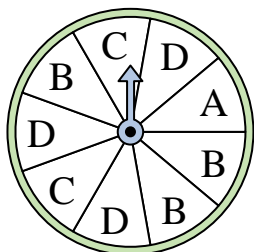
- 8) Which letter is the spinner most likely to land on?



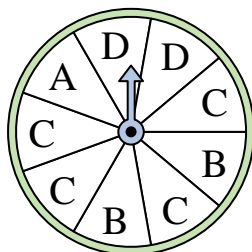
- 9) Which two numbers is the spinner equally likely to land on?




- 10) Which two letters is the spinner equally likely to land on?



- 11) Which letter is the spinner most likely to land on?



- 12) Which number is the spinner least likely to land on?



Answers

1. **D**

2. **C**

3. **2**

4. **3**

5. **1**

6. **B**

7. **B & D**

8. **A**

9. **2 & 3**

10. **B & D**

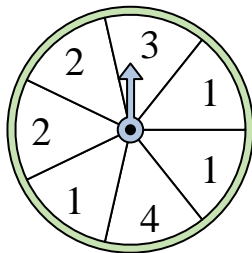
11. **C**

12. **1**

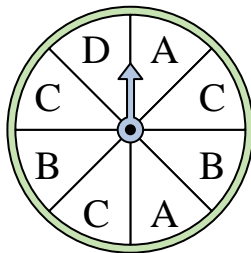


Solve each problem.

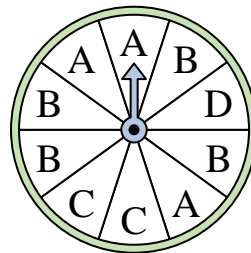
- 1) Which number is the spinner most likely to land on?



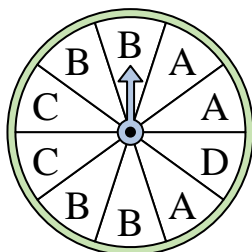
- 2) Which two letters is the spinner equally likely to land on?




- 3) Which letter is the spinner least likely to land on?



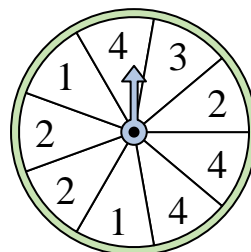
- 4) Which letter is the spinner most likely to land on?



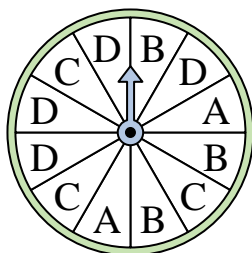
- 5) Which number is the spinner most likely to land on?



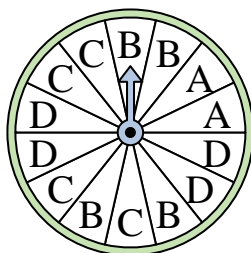
- 6) Which two numbers is the spinner equally likely to land on?



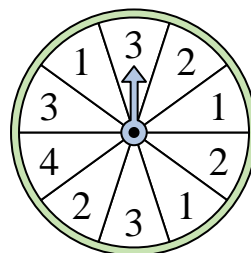
- 7) Which letter is the spinner least likely to land on?




- 8) Which letter is the spinner least likely to land on?



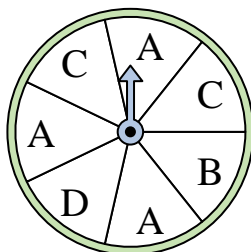
- 9) Which number is the spinner least likely to land on?



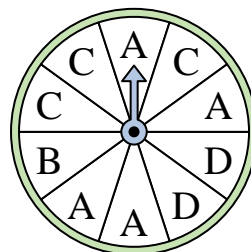
- 10) Which number is the spinner least likely to land on?



- 11) Which two letters is the spinner equally likely to land on?



- 12) Which letter is the spinner most likely to land on?



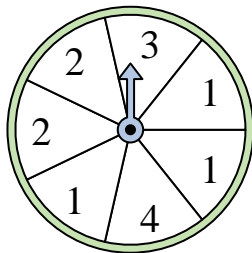
Answers

1. _____
2. _____
3. _____
4. _____
5. _____
6. _____
7. _____
8. _____
9. _____
10. _____
11. _____
12. _____

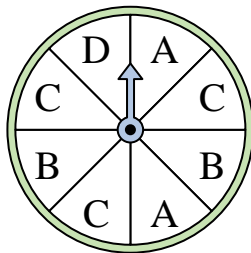


Solve each problem.

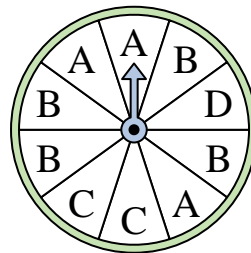
- 1) Which number is the spinner most likely to land on?



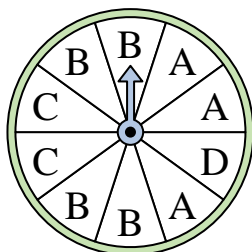
- 2) Which two letters is the spinner equally likely to land on?




- 3) Which letter is the spinner least likely to land on?



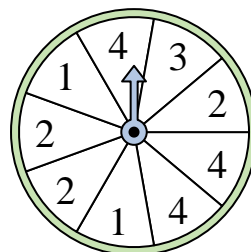
- 4) Which letter is the spinner most likely to land on?



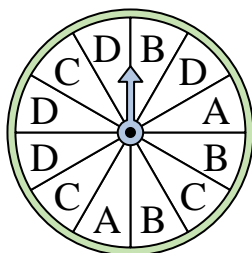
- 5) Which number is the spinner most likely to land on?



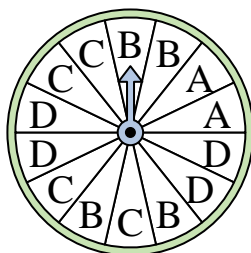
- 6) Which two numbers is the spinner equally likely to land on?



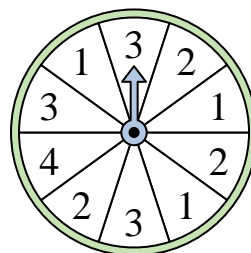
- 7) Which letter is the spinner least likely to land on?




- 8) Which letter is the spinner least likely to land on?



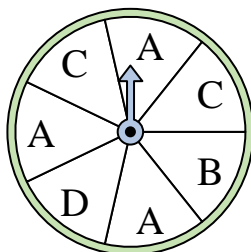
- 9) Which number is the spinner least likely to land on?



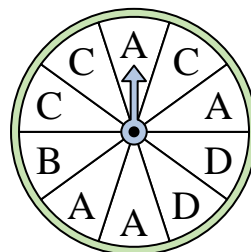
- 10) Which number is the spinner least likely to land on?



- 11) Which two letters is the spinner equally likely to land on?



- 12) Which letter is the spinner most likely to land on?




Answers

1. 1
2. A & B
3. D
4. B
5. 4
6. 2 & 4
7. A
8. A
9. 4
10. 4
11. B & D
12. A

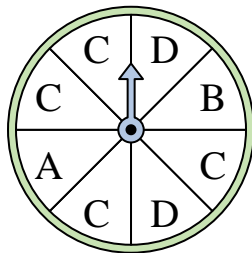


Solve each problem.

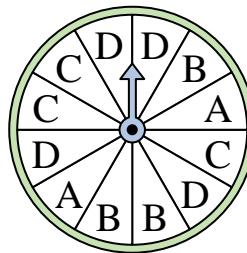
- 1) Which number is the spinner least likely to land on?




- 2) Which letter is the spinner most likely to land on?



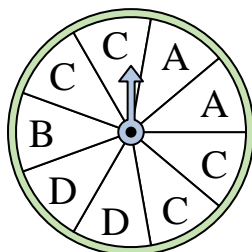
- 3) Which letter is the spinner least likely to land on?



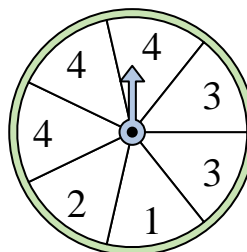
- 4) Which number is the spinner most likely to land on?




- 5) Which letter is the spinner most likely to land on?




- 6) Which two numbers is the spinner equally likely to land on?



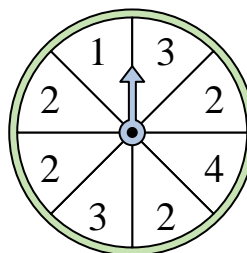
- 7) Which number is the spinner least likely to land on?



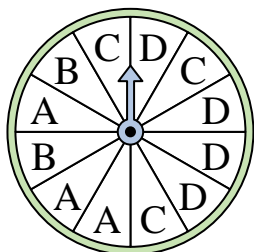
- 8) Which number is the spinner most likely to land on?




- 9) Which number is the spinner most likely to land on?



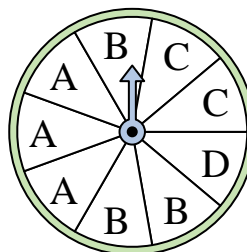
- 10) Which letter is the spinner least likely to land on?



- 11) Which number is the spinner most likely to land on?



- 12) Which two letters is the spinner equally likely to land on?




Answers

- 1. _____
- 2. _____
- 3. _____
- 4. _____
- 5. _____
- 6. _____
- 7. _____
- 8. _____
- 9. _____
- 10. _____
- 11. _____
- 12. _____

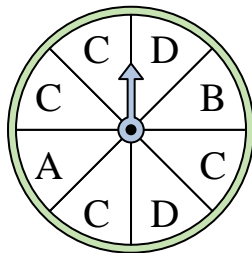


Solve each problem.

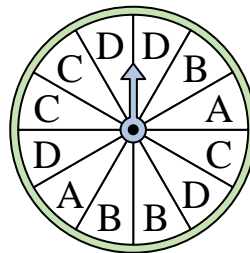
- 1) Which number is the spinner least likely to land on?




- 2) Which letter is the spinner most likely to land on?



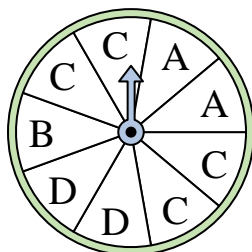
- 3) Which letter is the spinner least likely to land on?



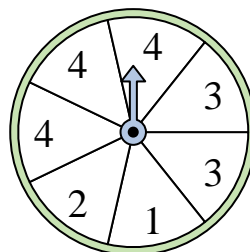
- 4) Which number is the spinner most likely to land on?




- 5) Which letter is the spinner most likely to land on?




- 6) Which two numbers is the spinner equally likely to land on?



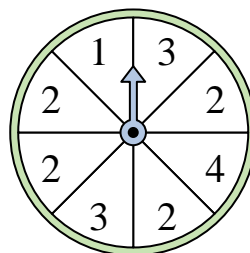
- 7) Which number is the spinner least likely to land on?



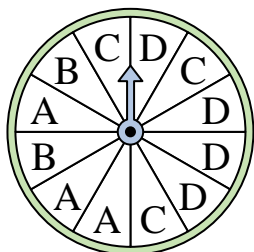
- 8) Which number is the spinner most likely to land on?




- 9) Which number is the spinner most likely to land on?



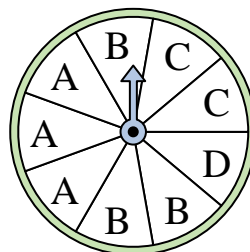
- 10) Which letter is the spinner least likely to land on?



- 11) Which number is the spinner most likely to land on?



- 12) Which two letters is the spinner equally likely to land on?



Answers

1. 4

2. C

3. A

4. 3

5. C

6. 1 & 2

7. 2

8. 1

9. 2

10. B

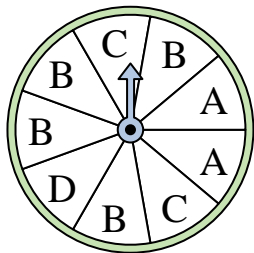
11. 3

12. A & B




Solve each problem.

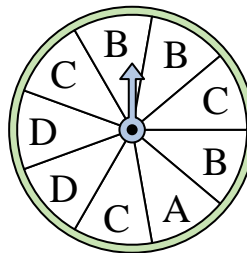
- 1) Which letter is the spinner most likely to land on?



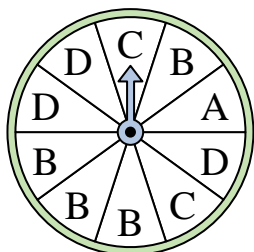
- 2) Which number is the spinner least likely to land on?



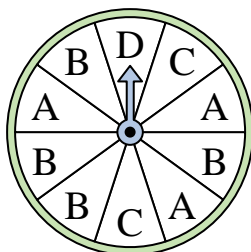
- 3) Which two letters is the spinner equally likely to land on?



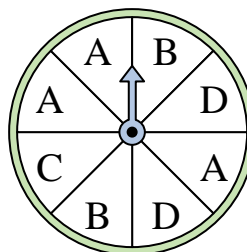
- 4) Which letter is the spinner most likely to land on?




- 5) Which letter is the spinner least likely to land on?




- 6) Which two letters is the spinner equally likely to land on?



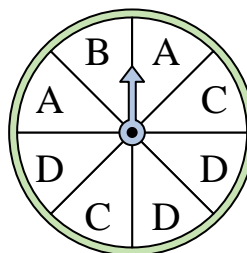
- 7) Which number is the spinner least likely to land on?



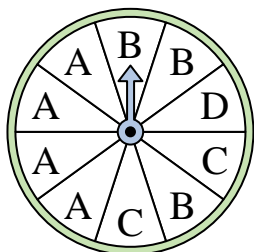
- 8) Which number is the spinner least likely to land on?



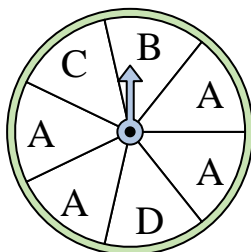
- 9) Which two letters is the spinner equally likely to land on?



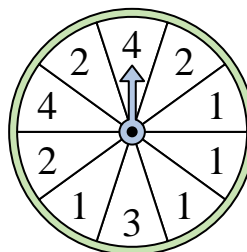
- 10) Which letter is the spinner most likely to land on?



- 11) Which letter is the spinner most likely to land on?



- 12) Which number is the spinner most likely to land on?



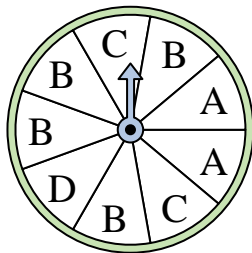
Answers

- 1. _____
- 2. _____
- 3. _____
- 4. _____
- 5. _____
- 6. _____
- 7. _____
- 8. _____
- 9. _____
- 10. _____
- 11. _____
- 12. _____




Solve each problem.

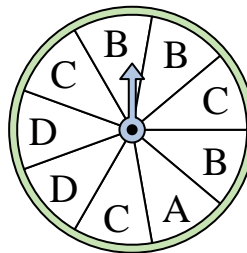
- 1) Which letter is the spinner most likely to land on?



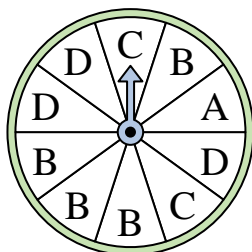
- 2) Which number is the spinner least likely to land on?



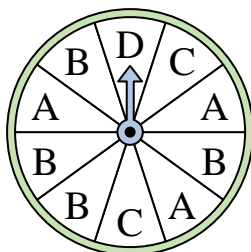
- 3) Which two letters is the spinner equally likely to land on?



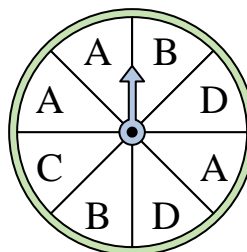
- 4) Which letter is the spinner most likely to land on?




- 5) Which letter is the spinner least likely to land on?




- 6) Which two letters is the spinner equally likely to land on?



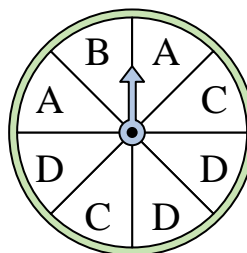
- 7) Which number is the spinner least likely to land on?



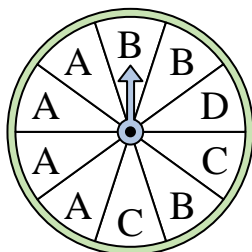
- 8) Which number is the spinner least likely to land on?



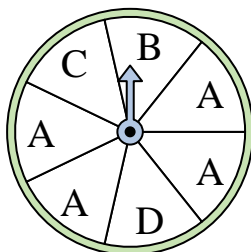
- 9) Which two letters is the spinner equally likely to land on?



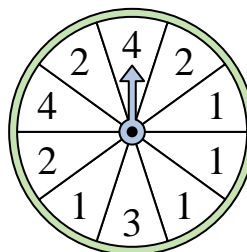
- 10) Which letter is the spinner most likely to land on?



- 11) Which letter is the spinner most likely to land on?



- 12) Which number is the spinner most likely to land on?



Answers

1. **B**

2. **4**

3. **B & C**

4. **B**

5. **D**

6. **B & D**

7. **1**

8. **1**

9. **A & C**

10. **A**

11. **A**

12. **1**