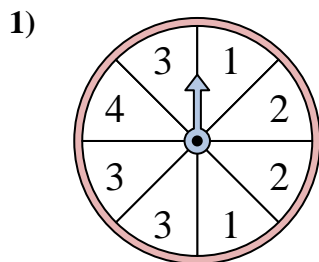


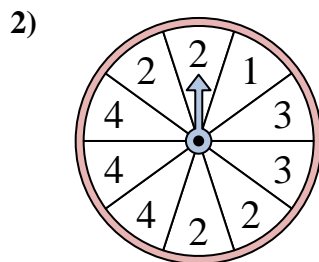


Solve each problem. Round your answer to the nearest tenth.

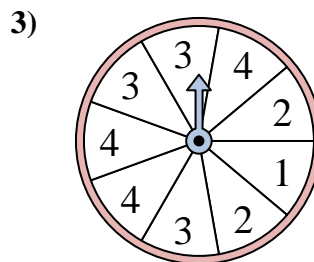
Answers



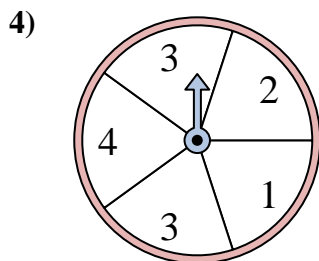
The spinner has a _____% chance of landing on a 3.



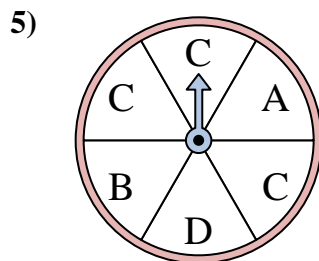
The spinner has a _____% chance of landing on a 4.



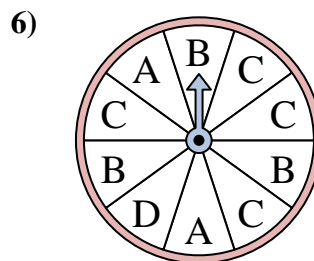
The spinner has a _____% chance of landing on a 3.



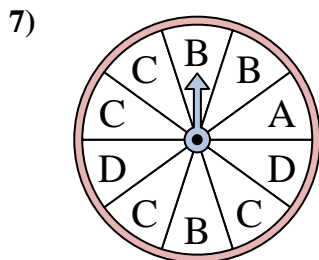
The spinner has a _____% chance of landing on a 1.



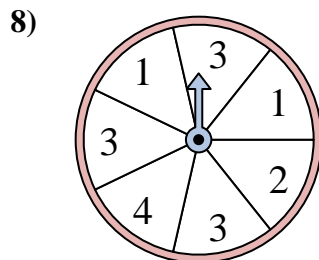
The spinner has a _____% chance of landing on a C.



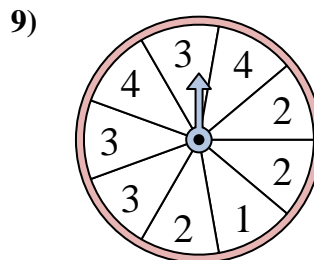
The spinner has a _____% chance of landing on a D.



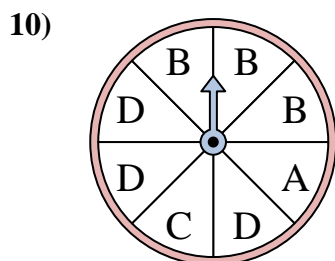
The spinner has a _____% chance of landing on a A.



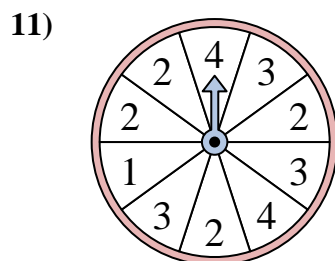
The spinner has a _____% chance of landing on a 3.



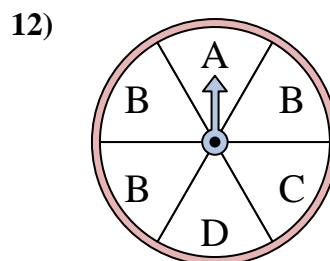
The spinner has a _____% chance of landing on a 4.



The spinner has a _____% chance of landing on a B.



The spinner has a _____% chance of landing on a 1.

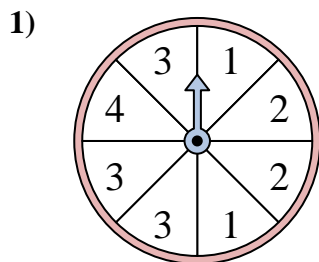


The spinner has a _____% chance of landing on a C.

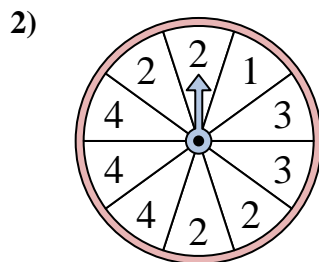
1. _____
2. _____
3. _____
4. _____
5. _____
6. _____
7. _____
8. _____
9. _____
10. _____
11. _____
12. _____



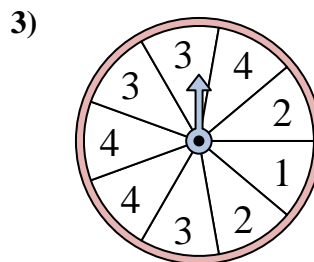
Solve each problem. Round your answer to the nearest tenth.



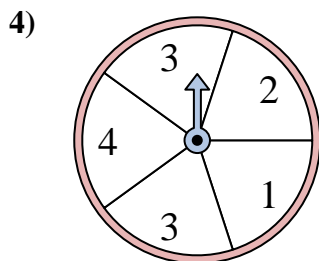
The spinner has a _____% chance of landing on a 3.



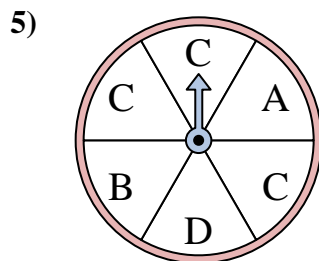
The spinner has a _____% chance of landing on a 4.



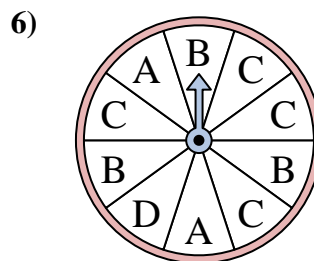
The spinner has a _____% chance of landing on a 3.



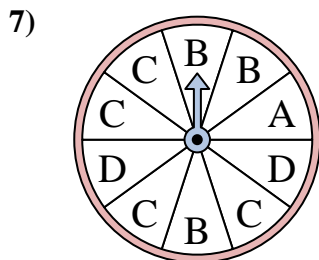
The spinner has a _____% chance of landing on a 1.



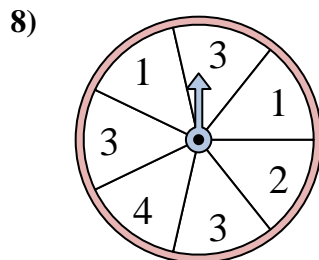
The spinner has a _____% chance of landing on a C.



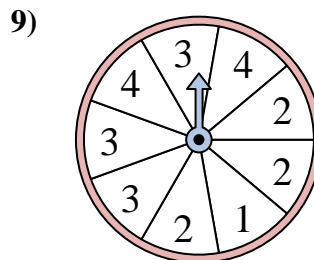
The spinner has a _____% chance of landing on a D.



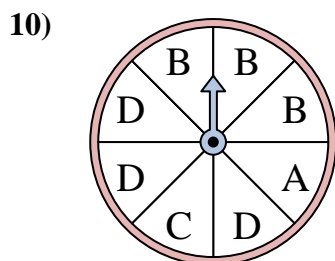
The spinner has a _____% chance of landing on a A.



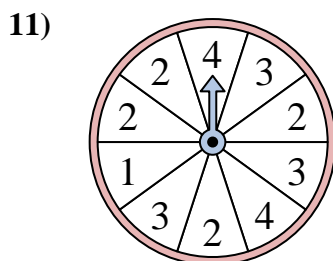
The spinner has a _____% chance of landing on a 3.



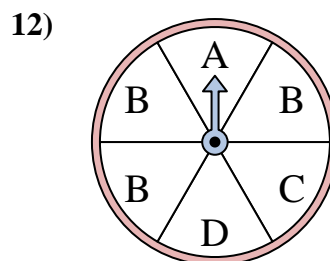
The spinner has a _____% chance of landing on a 4.



The spinner has a _____% chance of landing on a B.



The spinner has a _____% chance of landing on a 1.



The spinner has a _____% chance of landing on a C.

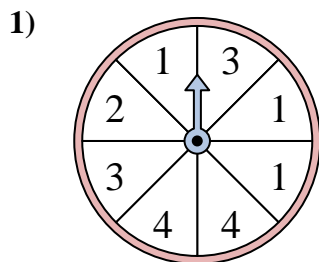
Answers

1. 37.5
2. 30
3. 33.3
4. 20
5. 50
6. 10
7. 10
8. 42.9
9. 22.2
10. 37.5
11. 10
12. 16.7

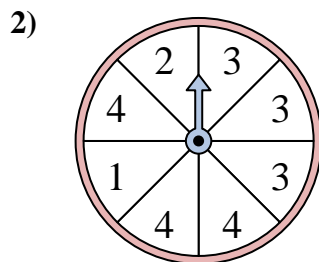


Solve each problem. Round your answer to the nearest tenth.

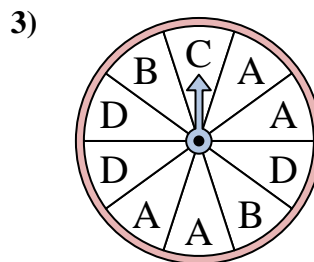
Answers



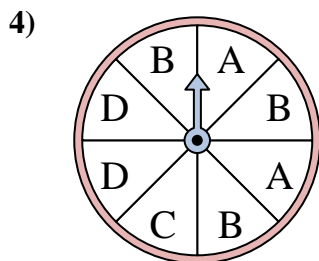
The spinner has a _____% chance of landing on a 3.



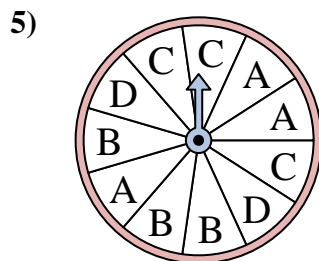
The spinner has a _____% chance of landing on a 3.



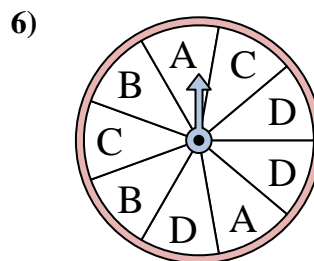
The spinner has a _____% chance of landing on a B.



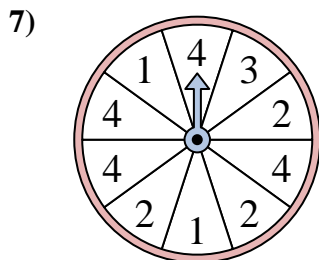
The spinner has a _____% chance of landing on a C.



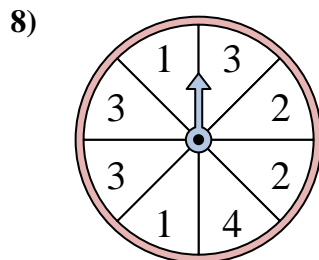
The spinner has a _____% chance of landing on a D.



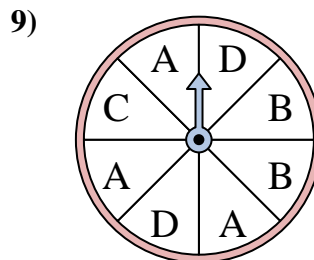
The spinner has a _____% chance of landing on a C.



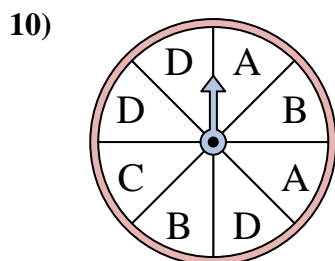
The spinner has a _____% chance of landing on a 1.



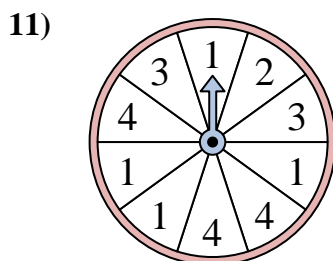
The spinner has a _____% chance of landing on a 3.



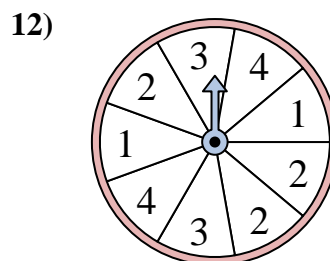
The spinner has a _____% chance of landing on a B.



The spinner has a _____% chance of landing on a B.



The spinner has a _____% chance of landing on a 3.

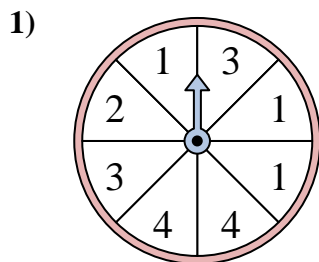


The spinner has a _____% chance of landing on a 1.

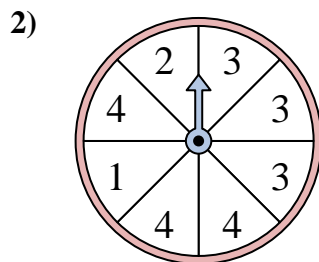
1. _____
2. _____
3. _____
4. _____
5. _____
6. _____
7. _____
8. _____
9. _____
10. _____
11. _____
12. _____



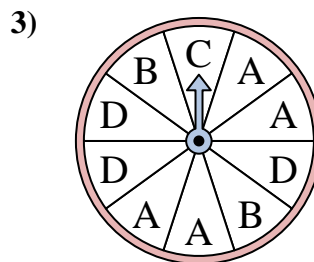
Solve each problem. Round your answer to the nearest tenth.



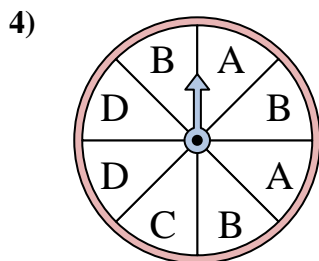
The spinner has a _____% chance of landing on a 3.



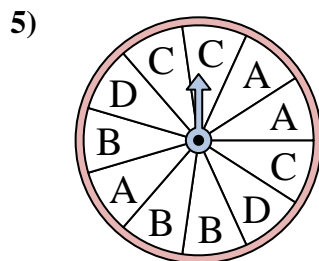
The spinner has a _____% chance of landing on a 3.



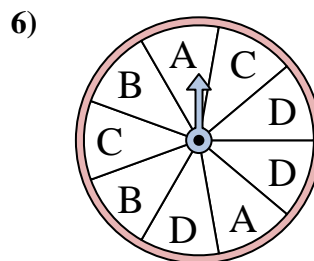
The spinner has a _____% chance of landing on a B.



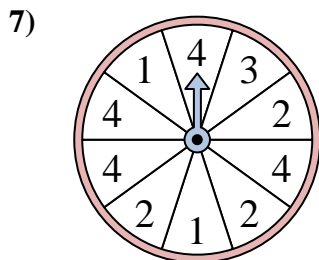
The spinner has a _____% chance of landing on a C.



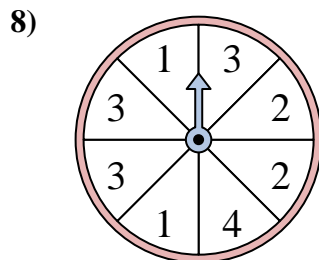
The spinner has a _____% chance of landing on a D.



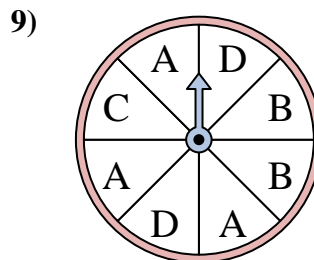
The spinner has a _____% chance of landing on a C.



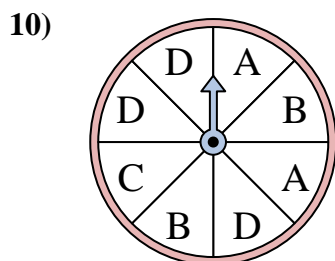
The spinner has a _____% chance of landing on a 1.



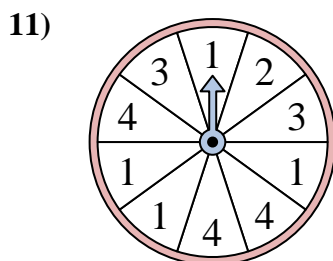
The spinner has a _____% chance of landing on a 3.



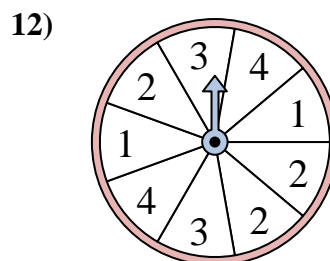
The spinner has a _____% chance of landing on a B.



The spinner has a _____% chance of landing on a B.



The spinner has a _____% chance of landing on a 3.



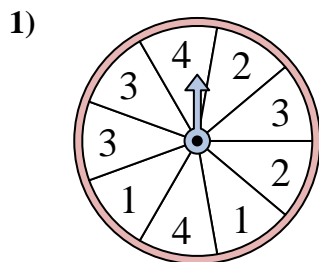
The spinner has a _____% chance of landing on a 1.

Answers

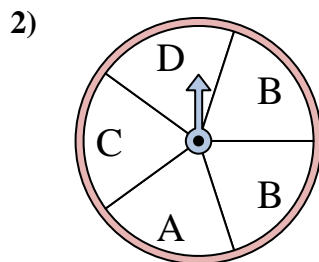
1. 25
2. 37.5
3. 20
4. 12.5
5. 18.2
6. 22.2
7. 20
8. 37.5
9. 25
10. 25
11. 20
12. 22.2



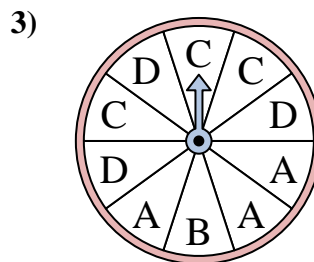
Solve each problem. Round your answer to the nearest tenth.



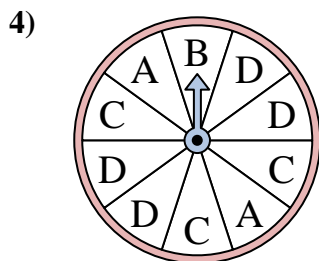
The spinner has a _____% chance of landing on a 2.



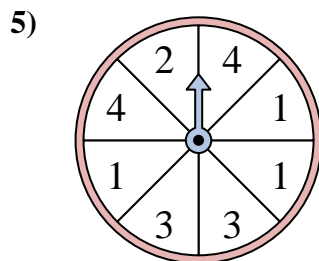
The spinner has a _____% chance of landing on a D.



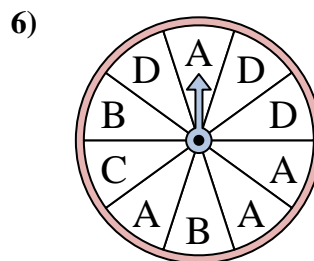
The spinner has a _____% chance of landing on a B.



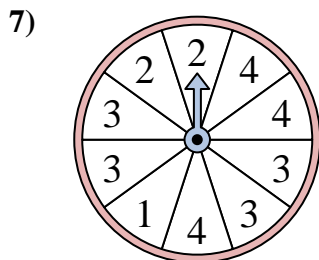
The spinner has a _____% chance of landing on a A.



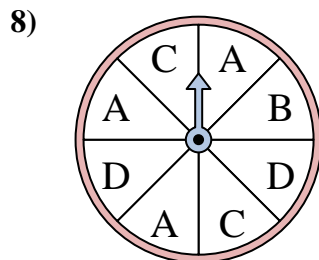
The spinner has a _____% chance of landing on a 3.



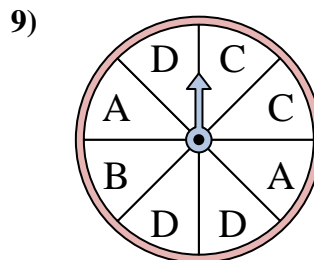
The spinner has a _____% chance of landing on a C.



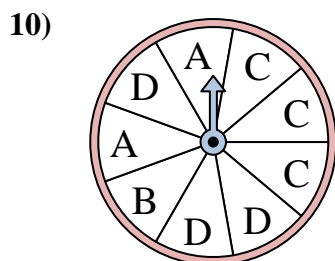
The spinner has a _____% chance of landing on a 4.



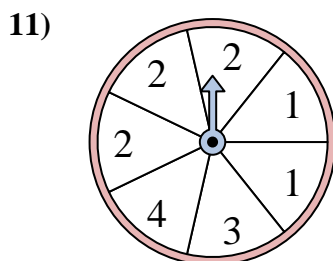
The spinner has a _____% chance of landing on a C.



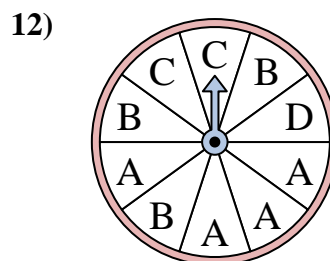
The spinner has a _____% chance of landing on a D.



The spinner has a _____% chance of landing on a A.



The spinner has a _____% chance of landing on a 1.



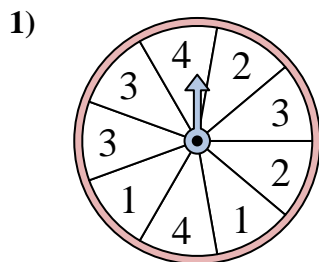
The spinner has a _____% chance of landing on a A.

Answers

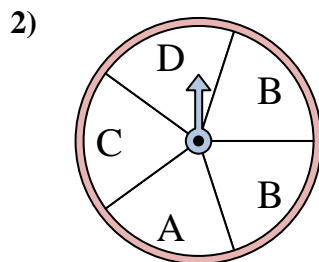
1. _____
2. _____
3. _____
4. _____
5. _____
6. _____
7. _____
8. _____
9. _____
10. _____
11. _____
12. _____



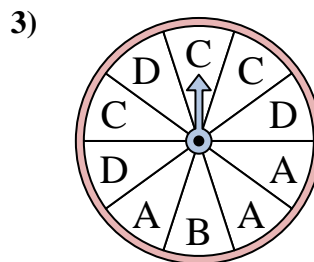
Solve each problem. Round your answer to the nearest tenth.



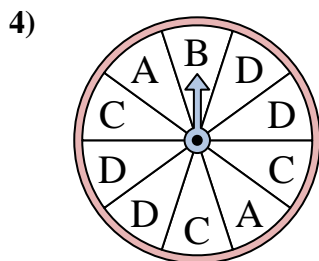
The spinner has a _____% chance of landing on a 2.



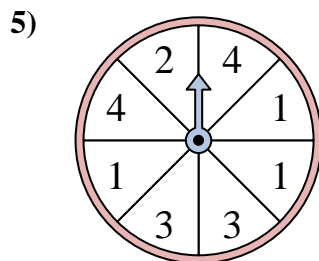
The spinner has a _____% chance of landing on a D.



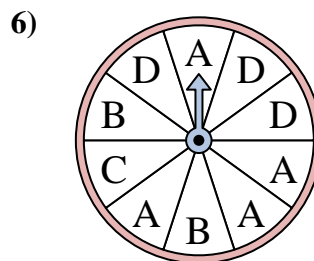
The spinner has a _____% chance of landing on a B.



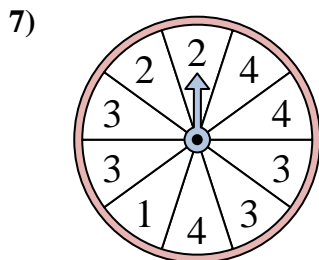
The spinner has a _____% chance of landing on a A.



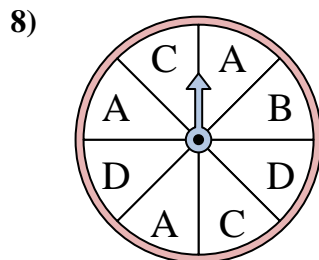
The spinner has a _____% chance of landing on a 3.



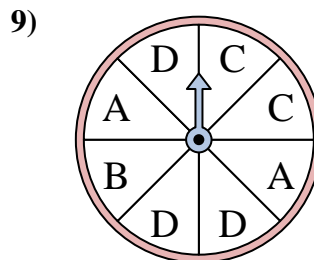
The spinner has a _____% chance of landing on a C.



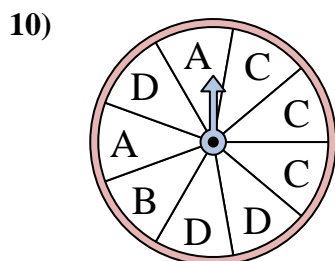
The spinner has a _____% chance of landing on a 4.



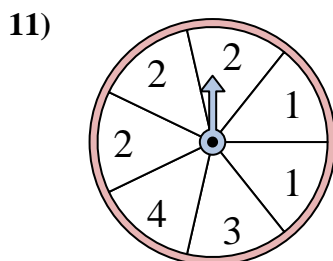
The spinner has a _____% chance of landing on a C.



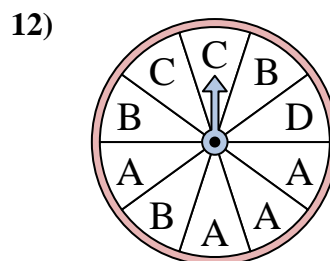
The spinner has a _____% chance of landing on a D.



The spinner has a _____% chance of landing on a A.



The spinner has a _____% chance of landing on a 1.



The spinner has a _____% chance of landing on a A.

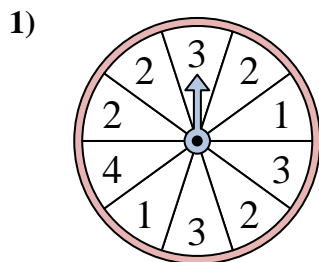
Answers

1. 22.2
2. 20
3. 10
4. 20
5. 25
6. 10
7. 30
8. 25
9. 37.5
10. 22.2
11. 28.6
12. 40

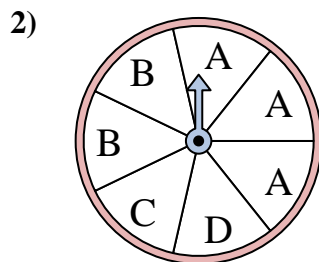


Solve each problem. Round your answer to the nearest tenth.

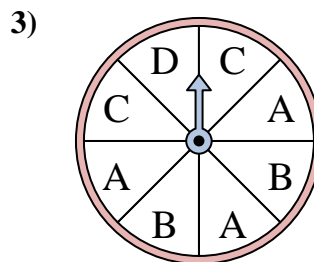
Answers



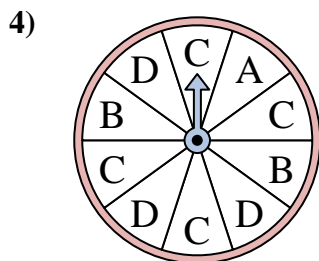
The spinner has a _____% chance of landing on a 2.



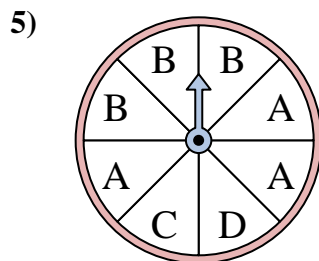
The spinner has a _____% chance of landing on a D.



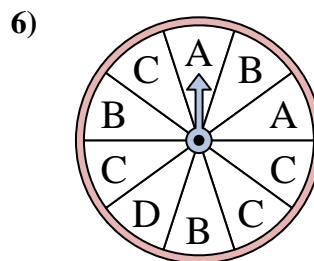
The spinner has a _____% chance of landing on a A.



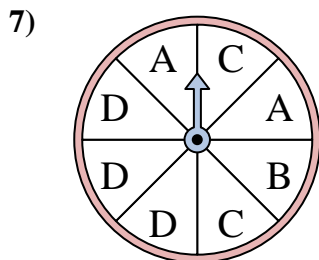
The spinner has a _____% chance of landing on a D.



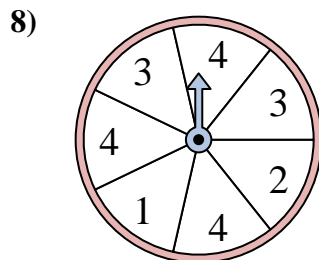
The spinner has a _____% chance of landing on a D.



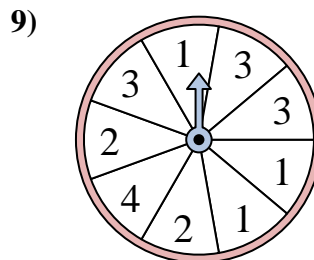
The spinner has a _____% chance of landing on a B.



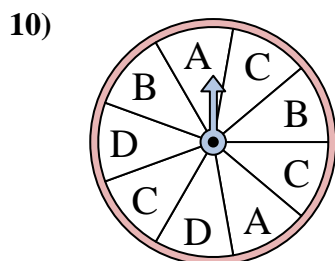
The spinner has a _____% chance of landing on a D.



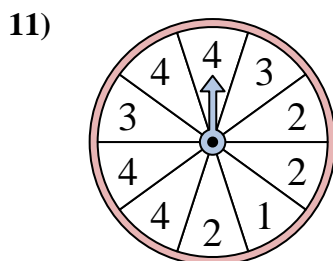
The spinner has a _____% chance of landing on a 2.



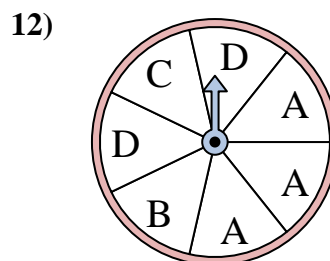
The spinner has a _____% chance of landing on a 1.



The spinner has a _____% chance of landing on a C.



The spinner has a _____% chance of landing on a 4.

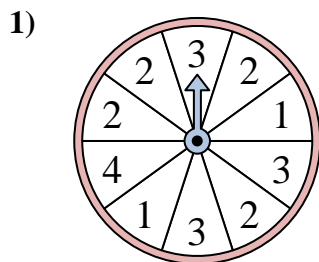


The spinner has a _____% chance of landing on a D.

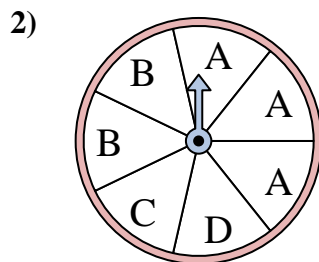
1. _____
2. _____
3. _____
4. _____
5. _____
6. _____
7. _____
8. _____
9. _____
10. _____
11. _____
12. _____



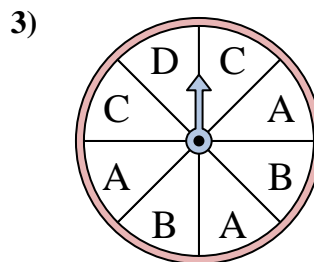
Solve each problem. Round your answer to the nearest tenth.



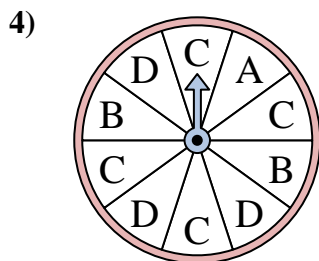
The spinner has a _____% chance of landing on a 2.



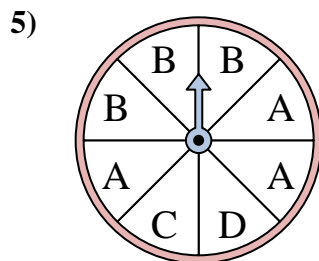
The spinner has a _____% chance of landing on a D.



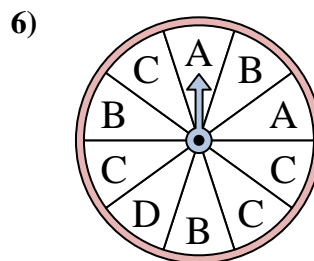
The spinner has a _____% chance of landing on a A.



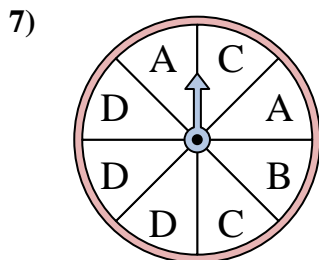
The spinner has a _____% chance of landing on a D.



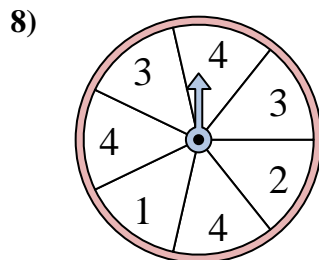
The spinner has a _____% chance of landing on a D.



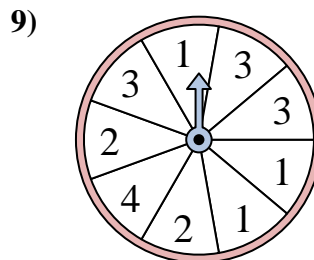
The spinner has a _____% chance of landing on a B.



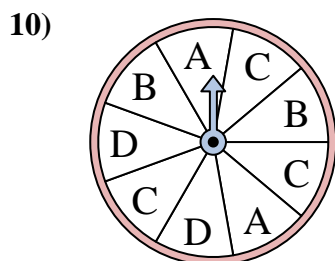
The spinner has a _____% chance of landing on a D.



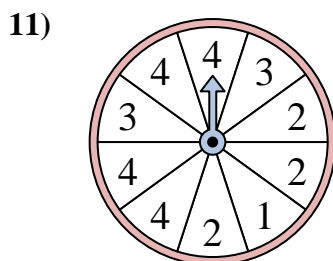
The spinner has a _____% chance of landing on a 2.



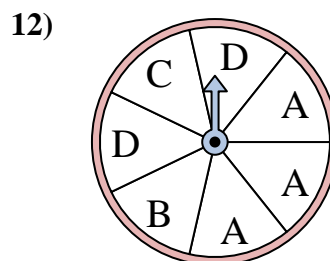
The spinner has a _____% chance of landing on a 1.



The spinner has a _____% chance of landing on a C.



The spinner has a _____% chance of landing on a 4.



The spinner has a _____% chance of landing on a D.

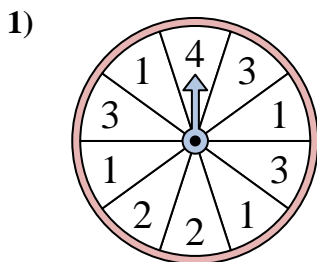
Answers

1. 40
2. 14.3
3. 37.5
4. 30
5. 12.5
6. 30
7. 37.5
8. 14.3
9. 33.3
10. 33.3
11. 40
12. 28.6

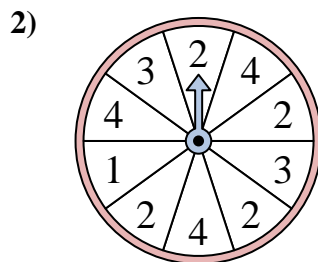


Solve each problem. Round your answer to the nearest tenth.

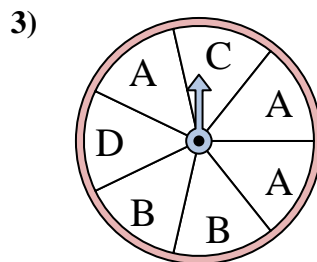
Answers



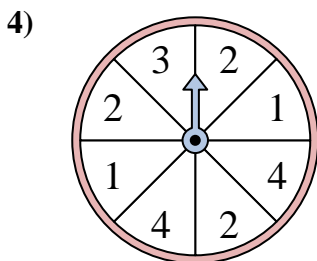
The spinner has a _____% chance of landing on a 3.



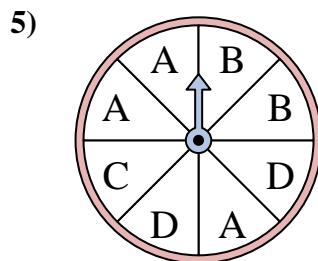
The spinner has a _____% chance of landing on a 3.



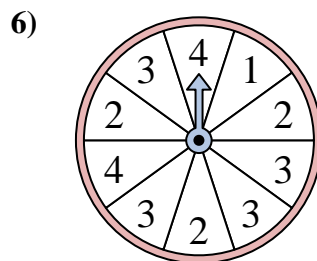
The spinner has a _____% chance of landing on a A.



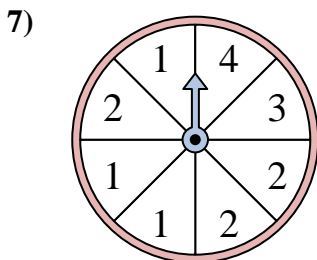
The spinner has a _____% chance of landing on a 2.



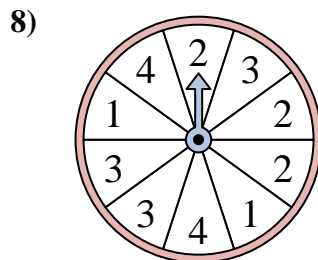
The spinner has a _____% chance of landing on a C.



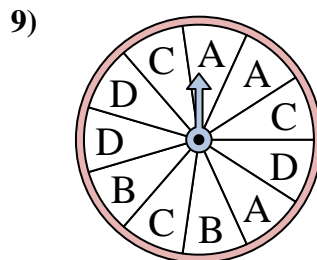
The spinner has a _____% chance of landing on a 3.



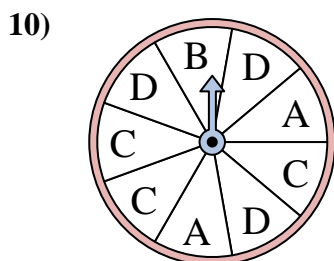
The spinner has a _____% chance of landing on a 2.



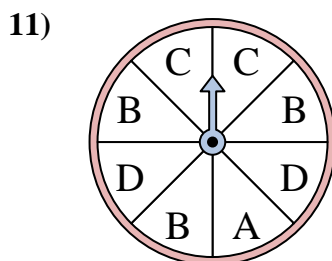
The spinner has a _____% chance of landing on a 3.



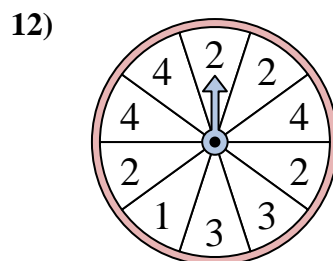
The spinner has a _____% chance of landing on a C.



The spinner has a _____% chance of landing on a B.



The spinner has a _____% chance of landing on a C.

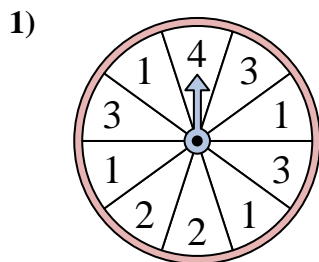


The spinner has a _____% chance of landing on a 4.

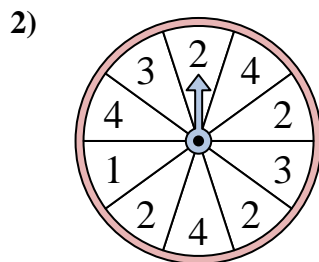
1. _____
2. _____
3. _____
4. _____
5. _____
6. _____
7. _____
8. _____
9. _____
10. _____
11. _____
12. _____



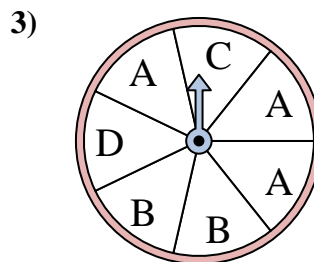
Solve each problem. Round your answer to the nearest tenth.



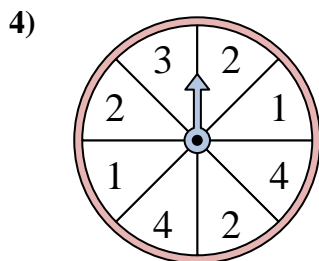
The spinner has a _____% chance of landing on a 3.



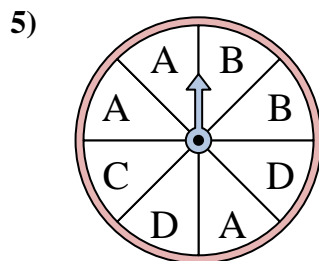
The spinner has a _____% chance of landing on a 3.



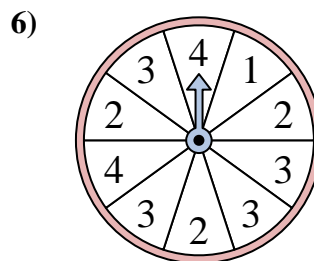
The spinner has a _____% chance of landing on a A.



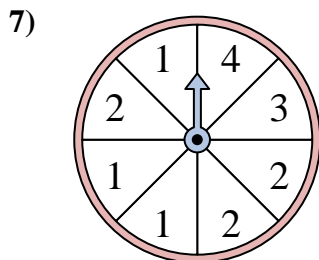
The spinner has a _____% chance of landing on a 2.



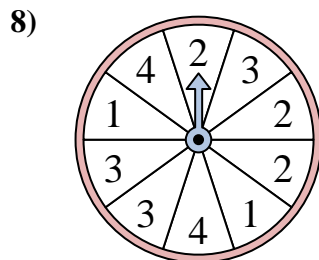
The spinner has a _____% chance of landing on a C.



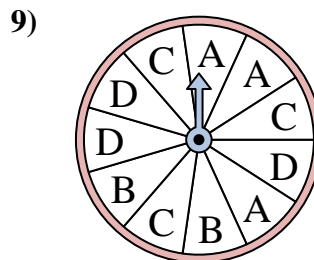
The spinner has a _____% chance of landing on a 3.



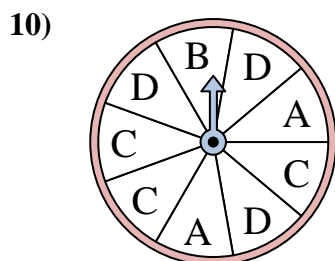
The spinner has a _____% chance of landing on a 2.



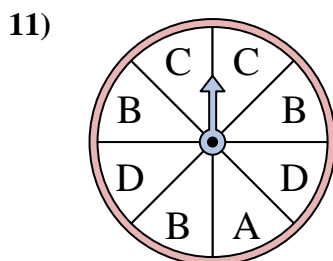
The spinner has a _____% chance of landing on a 3.



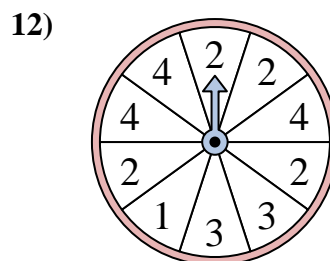
The spinner has a _____% chance of landing on a C.



The spinner has a _____% chance of landing on a B.



The spinner has a _____% chance of landing on a C.



The spinner has a _____% chance of landing on a 4.

Answers

1. 30

2. 20

3. 42.9

4. 37.5

5. 12.5

6. 40

7. 37.5

8. 30

9. 27.3

10. 11.1

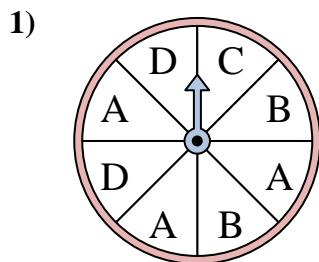
11. 25

12. 30

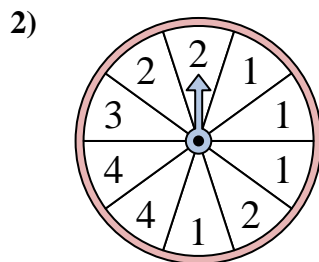


Solve each problem. Round your answer to the nearest tenth.

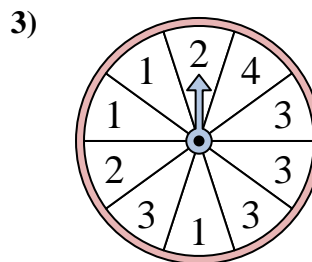
Answers



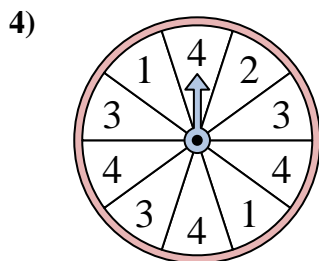
The spinner has a _____% chance of landing on a C.



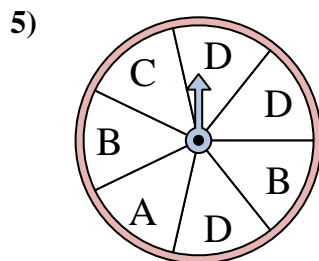
The spinner has a _____% chance of landing on a 3.



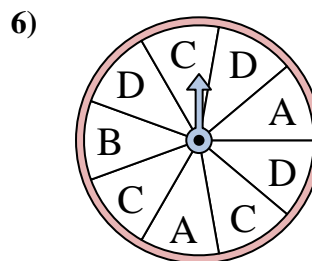
The spinner has a _____% chance of landing on a 4.



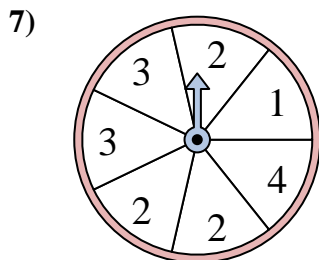
The spinner has a _____% chance of landing on a 4.



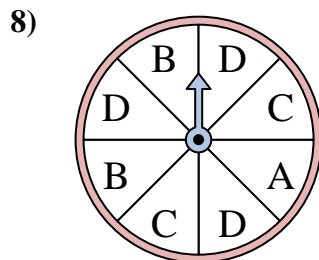
The spinner has a _____% chance of landing on a C.



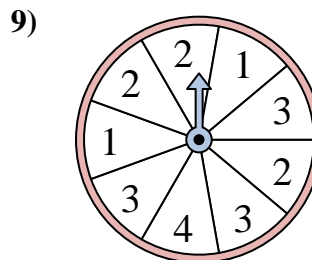
The spinner has a _____% chance of landing on a C.



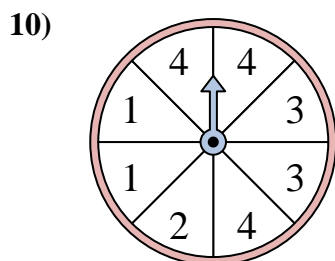
The spinner has a _____% chance of landing on a 2.



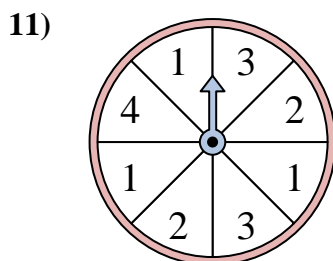
The spinner has a _____% chance of landing on a D.



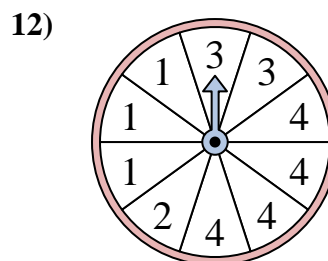
The spinner has a _____% chance of landing on a 4.



The spinner has a _____% chance of landing on a 4.



The spinner has a _____% chance of landing on a 4.

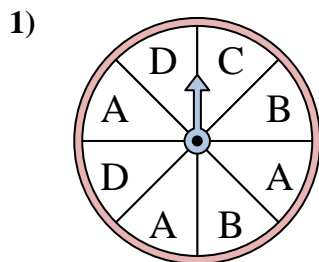


The spinner has a _____% chance of landing on a 1.

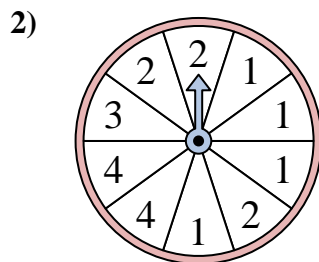
1. _____
2. _____
3. _____
4. _____
5. _____
6. _____
7. _____
8. _____
9. _____
10. _____
11. _____
12. _____



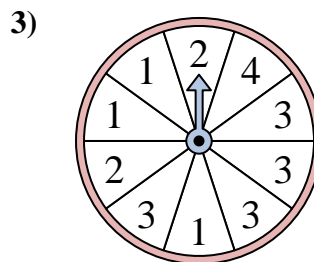
Solve each problem. Round your answer to the nearest tenth.



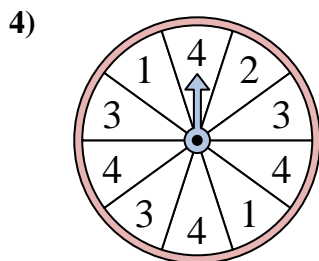
The spinner has a _____% chance of landing on a C.



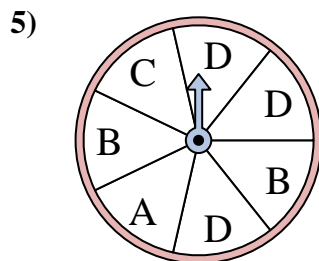
The spinner has a _____% chance of landing on a 3.



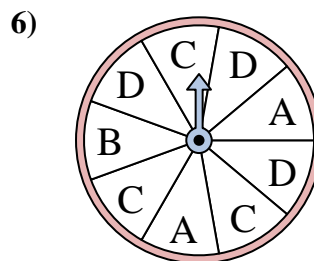
The spinner has a _____% chance of landing on a 4.



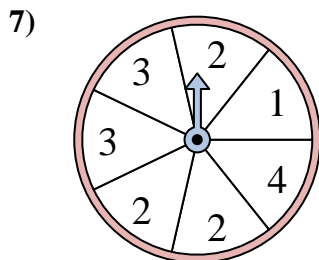
The spinner has a _____% chance of landing on a 4.



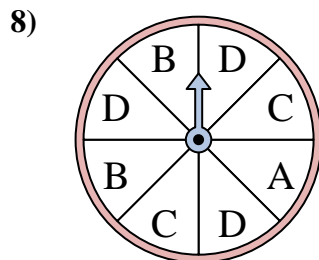
The spinner has a _____% chance of landing on a C.



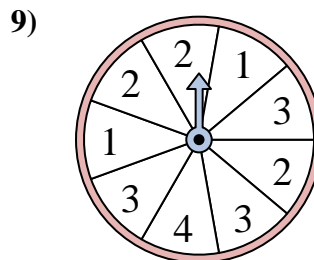
The spinner has a _____% chance of landing on a C.



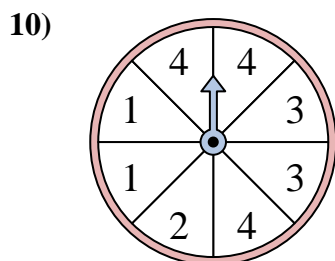
The spinner has a _____% chance of landing on a 2.



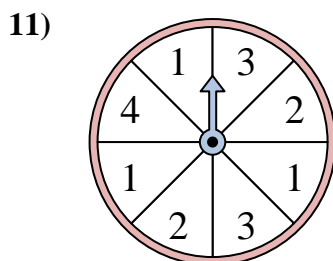
The spinner has a _____% chance of landing on a D.



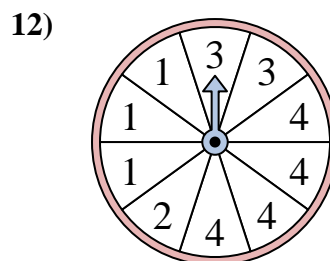
The spinner has a _____% chance of landing on a 4.



The spinner has a _____% chance of landing on a 4.



The spinner has a _____% chance of landing on a 4.



The spinner has a _____% chance of landing on a 1.

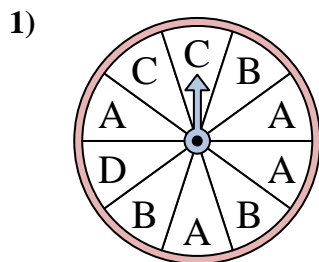
Answers

1. 12.5
2. 10
3. 10
4. 40
5. 14.3
6. 33.3
7. 42.9
8. 37.5
9. 11.1
10. 37.5
11. 12.5
12. 30

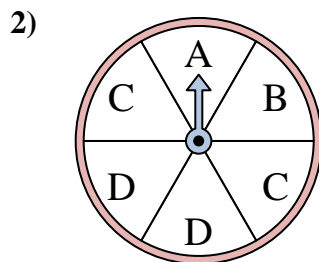


Solve each problem. Round your answer to the nearest tenth.

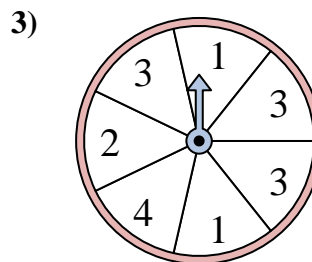
Answers



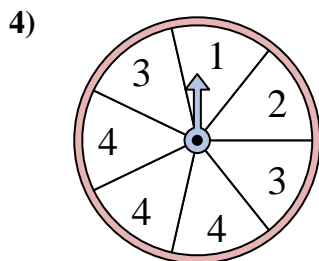
The spinner has a _____% chance of landing on a B.



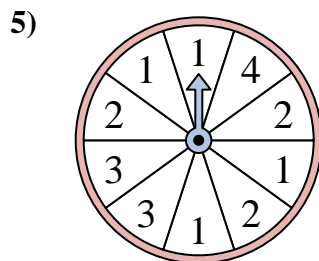
The spinner has a _____% chance of landing on a B.



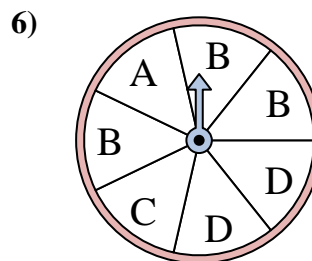
The spinner has a _____% chance of landing on a 2.



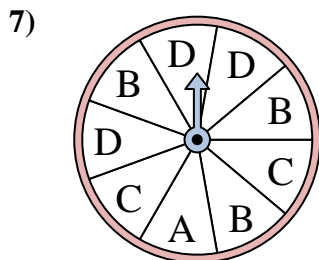
The spinner has a _____% chance of landing on a 4.



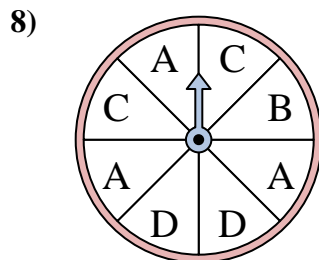
The spinner has a _____% chance of landing on a 2.



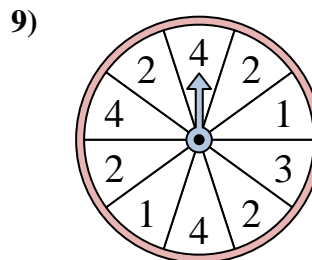
The spinner has a _____% chance of landing on a C.



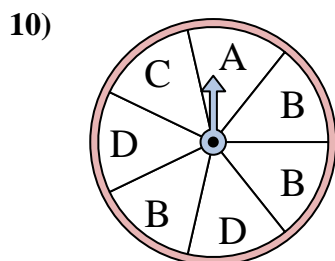
The spinner has a _____% chance of landing on a A.



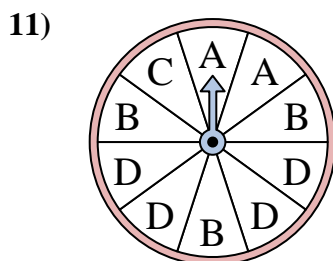
The spinner has a _____% chance of landing on a C.



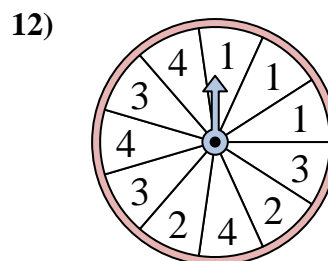
The spinner has a _____% chance of landing on a 2.



The spinner has a _____% chance of landing on a C.



The spinner has a _____% chance of landing on a A.

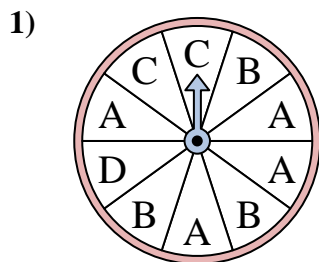


The spinner has a _____% chance of landing on a 2.

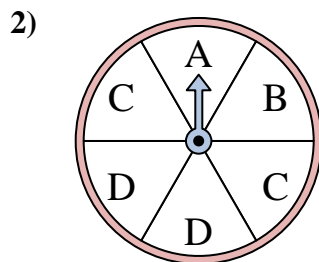
- 1. _____
- 2. _____
- 3. _____
- 4. _____
- 5. _____
- 6. _____
- 7. _____
- 8. _____
- 9. _____
- 10. _____
- 11. _____
- 12. _____



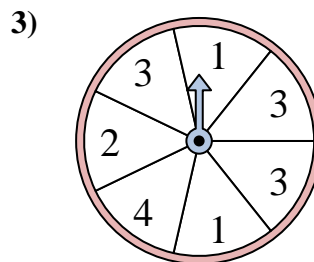
Solve each problem. Round your answer to the nearest tenth.



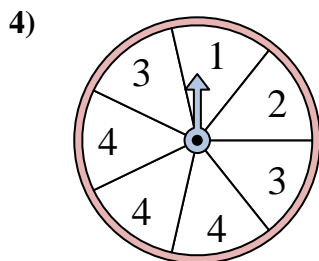
The spinner has a _____% chance of landing on a B.



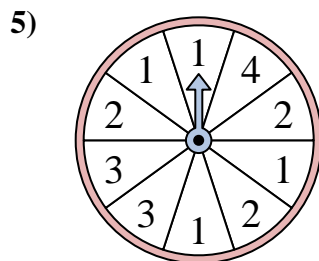
The spinner has a _____% chance of landing on a B.



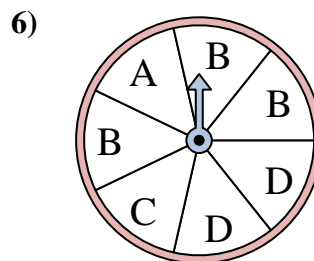
The spinner has a _____% chance of landing on a 2.



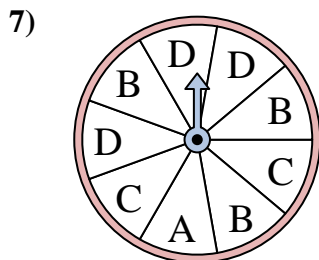
The spinner has a _____% chance of landing on a 4.



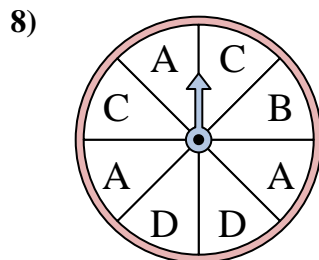
The spinner has a _____% chance of landing on a 2.



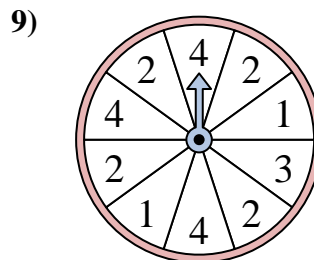
The spinner has a _____% chance of landing on a C.



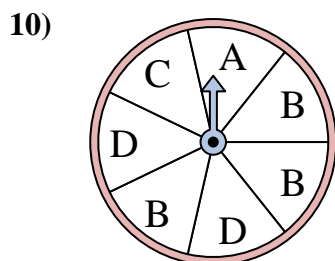
The spinner has a _____% chance of landing on a A.



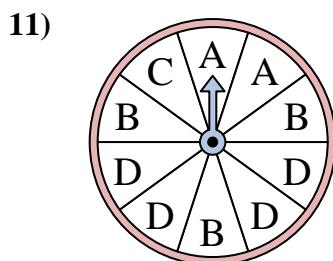
The spinner has a _____% chance of landing on a C.



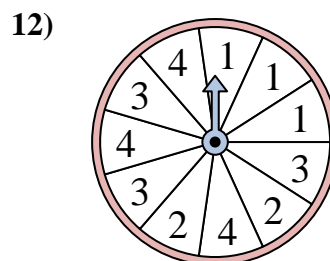
The spinner has a _____% chance of landing on a 2.



The spinner has a _____% chance of landing on a C.



The spinner has a _____% chance of landing on a A.



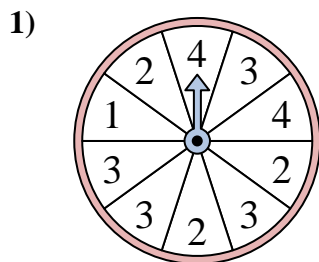
The spinner has a _____% chance of landing on a 2.

Answers

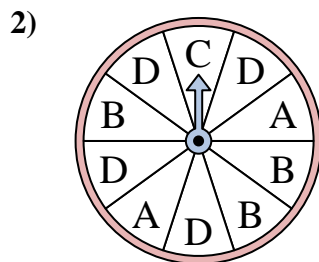
1. 30
2. 16.7
3. 14.3
4. 42.9
5. 30
6. 14.3
7. 11.1
8. 25
9. 40
10. 14.3
11. 20
12. 18.2



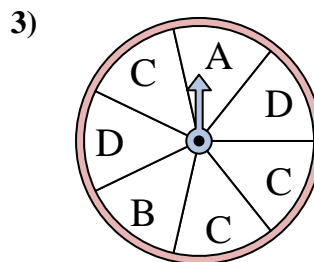
Solve each problem. Round your answer to the nearest tenth.



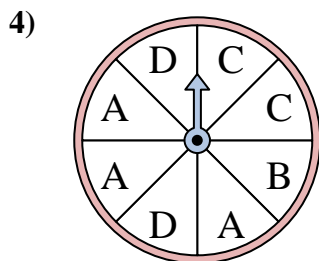
The spinner has a _____% chance of landing on a 2.



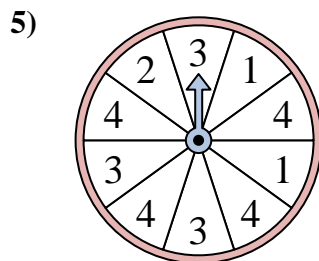
The spinner has a _____% chance of landing on a D.



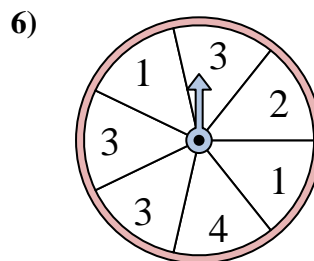
The spinner has a _____% chance of landing on a C.



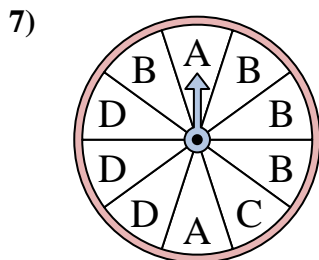
The spinner has a _____% chance of landing on a A.



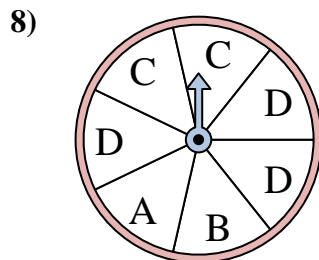
The spinner has a _____% chance of landing on a 2.



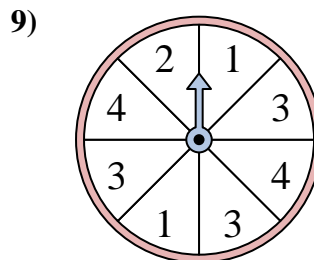
The spinner has a _____% chance of landing on a 2.



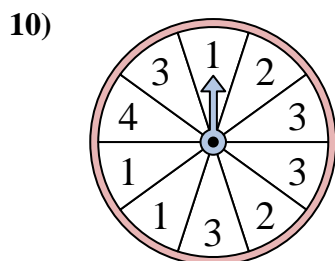
The spinner has a _____% chance of landing on a B.



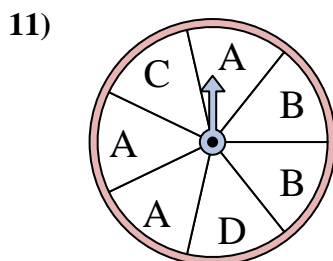
The spinner has a _____% chance of landing on a C.



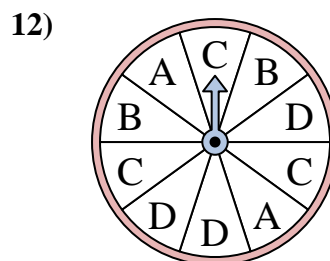
The spinner has a _____% chance of landing on a 1.



The spinner has a _____% chance of landing on a 4.



The spinner has a _____% chance of landing on a D.



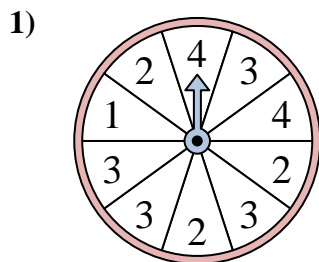
The spinner has a _____% chance of landing on a C.

Answers

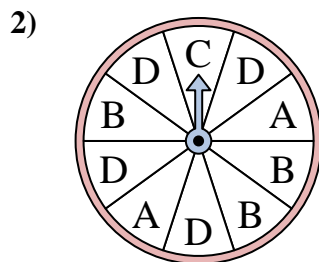
1. _____
2. _____
3. _____
4. _____
5. _____
6. _____
7. _____
8. _____
9. _____
10. _____
11. _____
12. _____



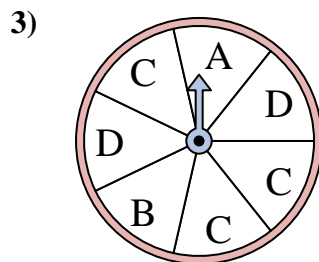
Solve each problem. Round your answer to the nearest tenth.



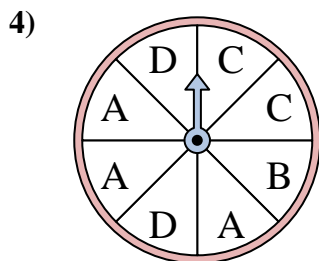
The spinner has a _____% chance of landing on a 2.



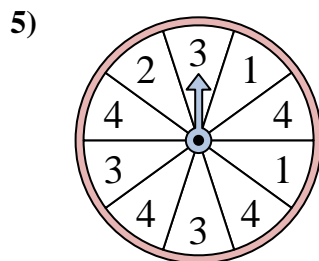
The spinner has a _____% chance of landing on a D.



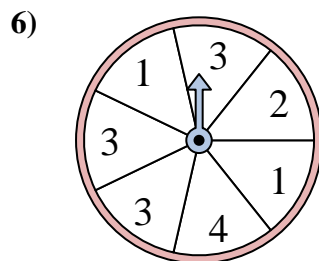
The spinner has a _____% chance of landing on a C.



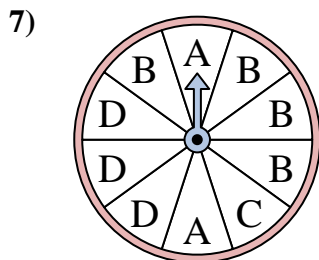
The spinner has a _____% chance of landing on a A.



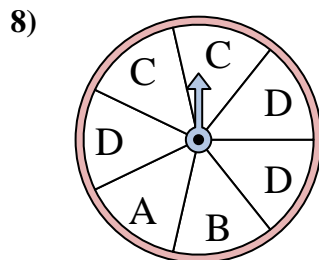
The spinner has a _____% chance of landing on a 2.



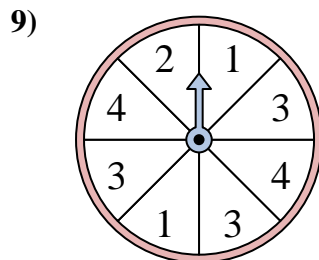
The spinner has a _____% chance of landing on a 2.



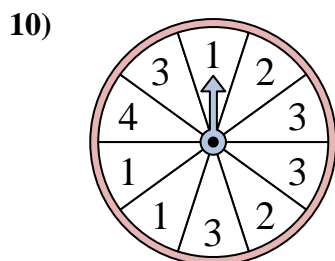
The spinner has a _____% chance of landing on a B.



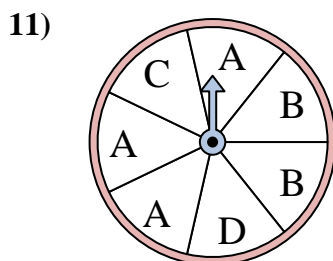
The spinner has a _____% chance of landing on a C.



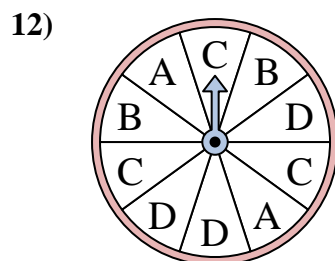
The spinner has a _____% chance of landing on a 1.



The spinner has a _____% chance of landing on a 4.



The spinner has a _____% chance of landing on a D.



The spinner has a _____% chance of landing on a C.

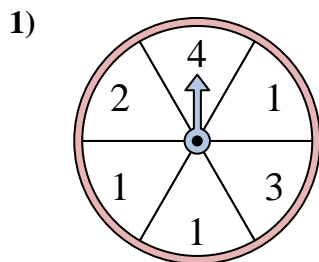
Answers

1. 30
2. 40
3. 42.9
4. 37.5
5. 10
6. 14.3
7. 40
8. 28.6
9. 25
10. 10
11. 14.3
12. 30

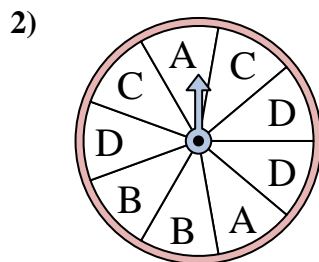


Solve each problem. Round your answer to the nearest tenth.

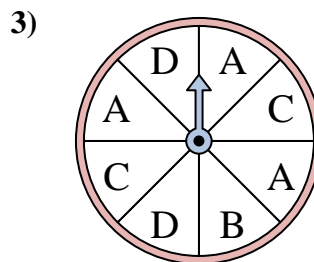
Answers



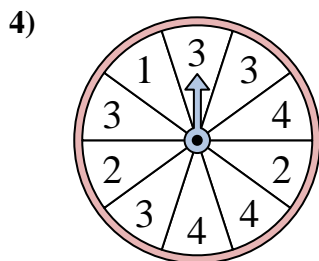
The spinner has a _____% chance of landing on a 2.



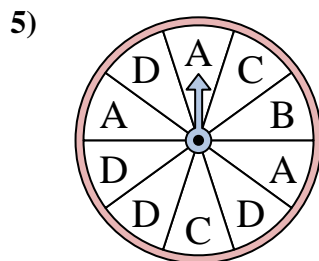
The spinner has a _____% chance of landing on a B.



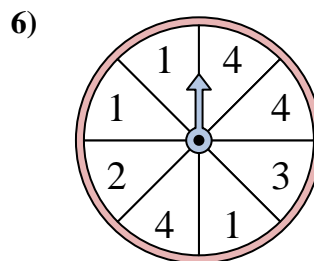
The spinner has a _____% chance of landing on a C.



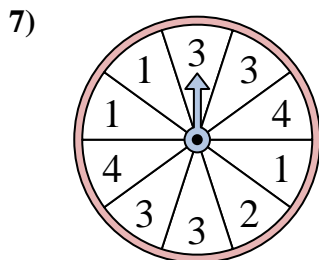
The spinner has a _____% chance of landing on a 3.



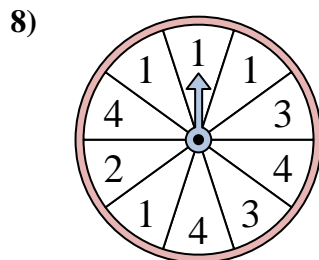
The spinner has a _____% chance of landing on a D.



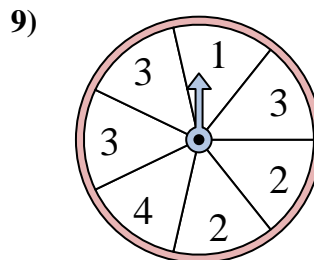
The spinner has a _____% chance of landing on a 4.



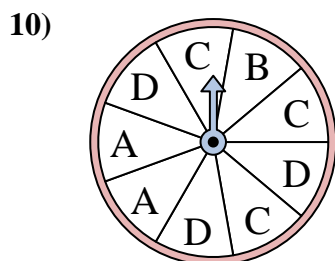
The spinner has a _____% chance of landing on a 4.



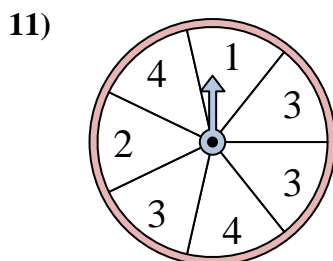
The spinner has a _____% chance of landing on a 1.



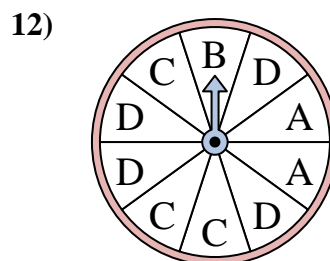
The spinner has a _____% chance of landing on a 3.



The spinner has a _____% chance of landing on a C.



The spinner has a _____% chance of landing on a 2.

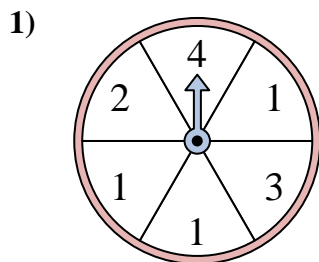


The spinner has a _____% chance of landing on a D.

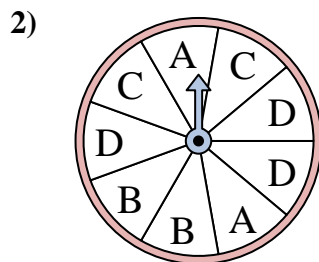
1. _____
2. _____
3. _____
4. _____
5. _____
6. _____
7. _____
8. _____
9. _____
10. _____
11. _____
12. _____



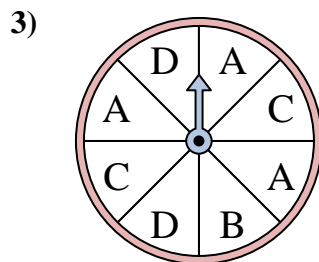
Solve each problem. Round your answer to the nearest tenth.



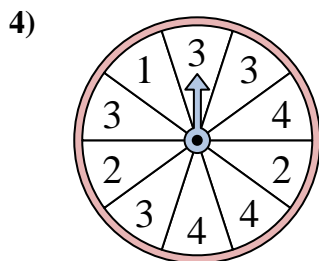
The spinner has a _____% chance of landing on a 2.



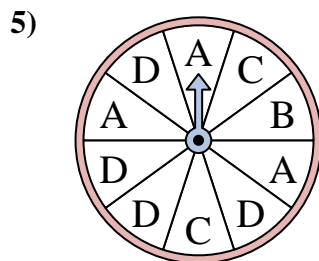
The spinner has a _____% chance of landing on a B.



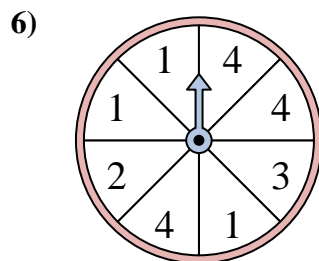
The spinner has a _____% chance of landing on a C.



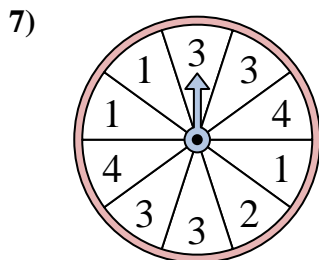
The spinner has a _____% chance of landing on a 3.



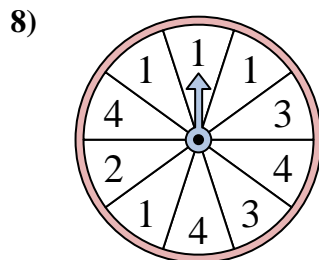
The spinner has a _____% chance of landing on a D.



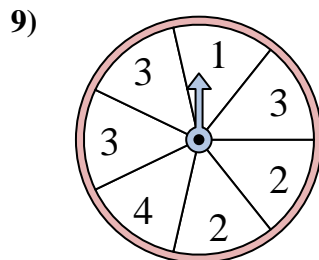
The spinner has a _____% chance of landing on a 4.



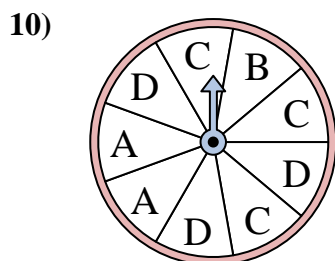
The spinner has a _____% chance of landing on a 4.



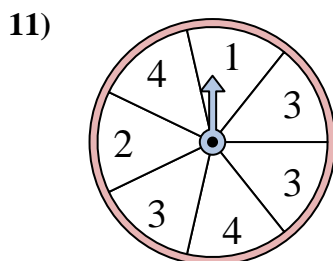
The spinner has a _____% chance of landing on a 1.



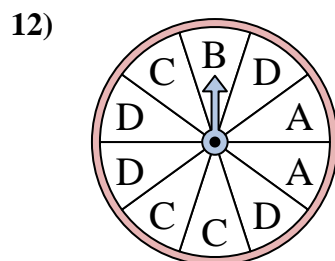
The spinner has a _____% chance of landing on a 3.



The spinner has a _____% chance of landing on a C.



The spinner has a _____% chance of landing on a 2.



The spinner has a _____% chance of landing on a D.

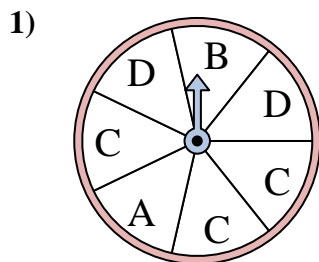
Answers

1. 16.7
2. 22.2
3. 25
4. 40
5. 40
6. 37.5
7. 20
8. 40
9. 42.9
10. 33.3
11. 14.3
12. 40

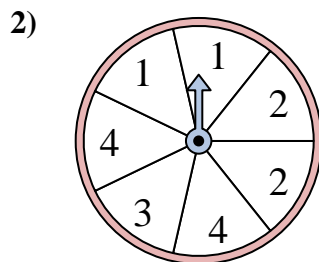


Solve each problem. Round your answer to the nearest tenth.

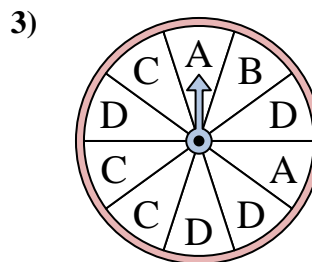
Answers



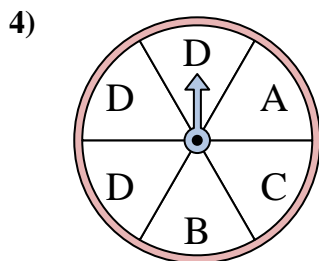
The spinner has a _____% chance of landing on a D.



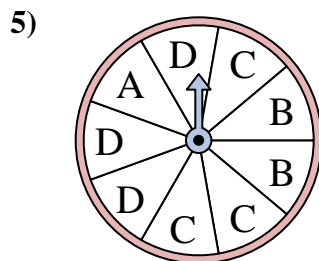
The spinner has a _____% chance of landing on a 3.



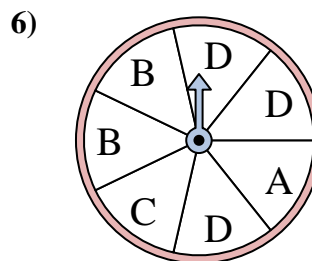
The spinner has a _____% chance of landing on a B.



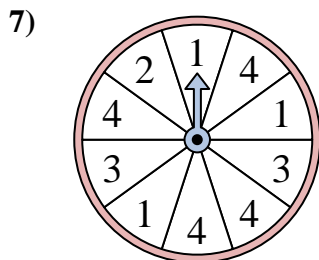
The spinner has a _____% chance of landing on a B.



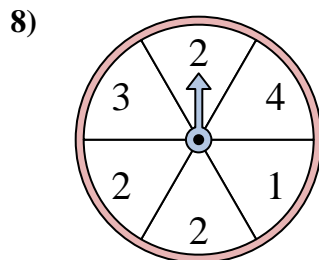
The spinner has a _____% chance of landing on a C.



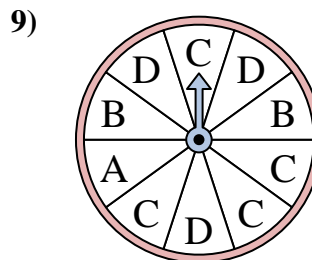
The spinner has a _____% chance of landing on a B.



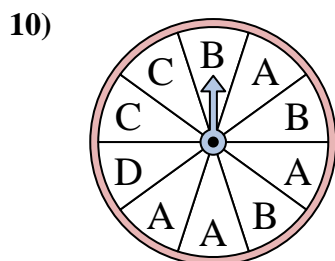
The spinner has a _____% chance of landing on a 4.



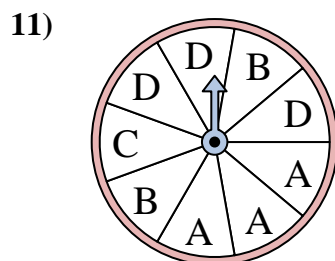
The spinner has a _____% chance of landing on a 1.



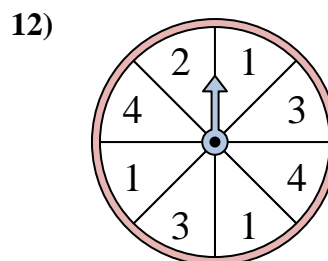
The spinner has a _____% chance of landing on a C.



The spinner has a _____% chance of landing on a D.



The spinner has a _____% chance of landing on a B.

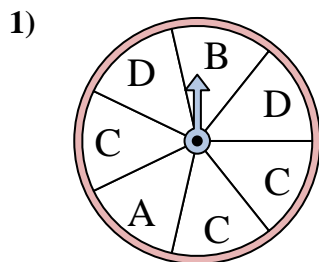


The spinner has a _____% chance of landing on a 4.

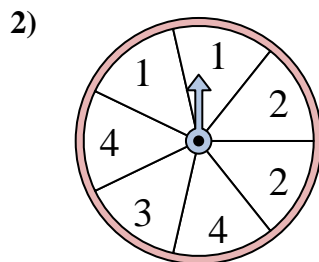
1. _____
2. _____
3. _____
4. _____
5. _____
6. _____
7. _____
8. _____
9. _____
10. _____
11. _____
12. _____



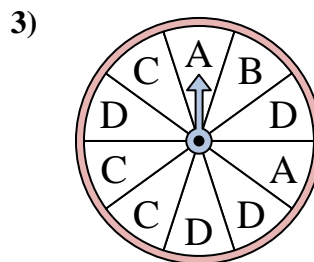
Solve each problem. Round your answer to the nearest tenth.



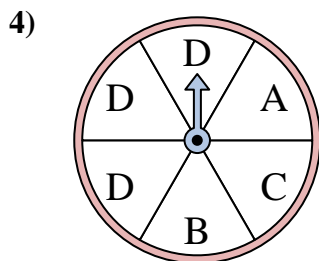
The spinner has a _____% chance of landing on a D.



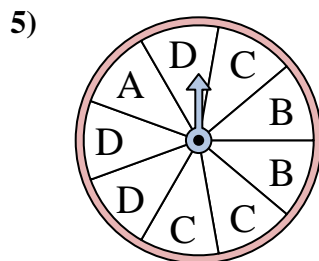
The spinner has a _____% chance of landing on a 3.



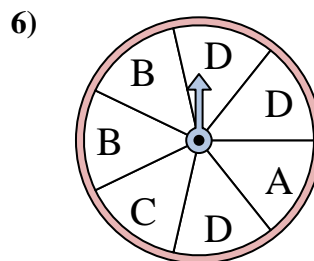
The spinner has a _____% chance of landing on a B.



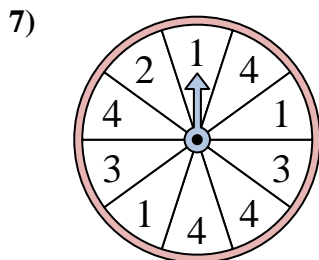
The spinner has a _____% chance of landing on a B.



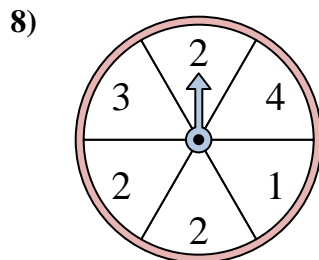
The spinner has a _____% chance of landing on a C.



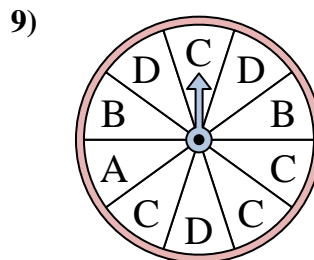
The spinner has a _____% chance of landing on a B.



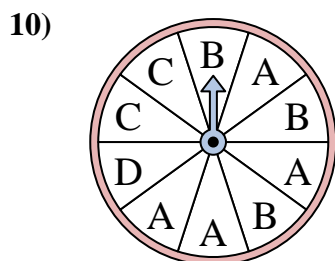
The spinner has a _____% chance of landing on a 4.



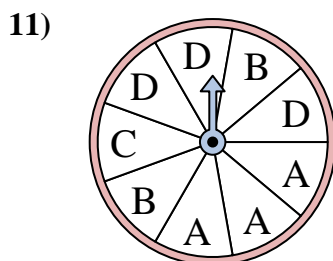
The spinner has a _____% chance of landing on a 1.



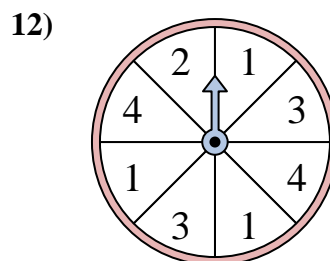
The spinner has a _____% chance of landing on a C.



The spinner has a _____% chance of landing on a D.



The spinner has a _____% chance of landing on a B.



The spinner has a _____% chance of landing on a 4.

Answers

1. 28.6

2. 14.3

3. 10

4. 16.7

5. 33.3

6. 28.6

7. 40

8. 16.7

9. 40

10. 10

11. 22.2

12. 25