

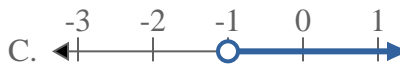


Solve each problem.

1) Which option best shows  $X \geq 5$



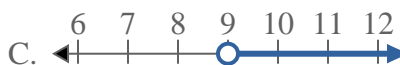
2) Which option best shows  $X \leq -1$



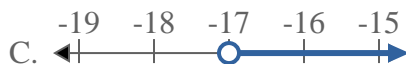
3) Which option best shows  $X > 13$



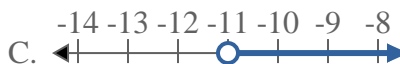
4) Which option best shows  $X \geq 9$



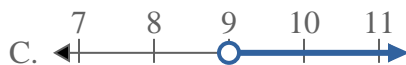
5) Which option best shows  $X \leq -17$



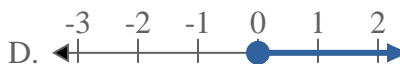
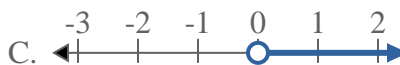
6) Which option best shows  $X \geq -11$



7) Which option best shows  $X < 9$



8) Which option best shows  $X < 0$



**Answers**

1. \_\_\_\_\_

2. \_\_\_\_\_

3. \_\_\_\_\_

4. \_\_\_\_\_

5. \_\_\_\_\_

6. \_\_\_\_\_

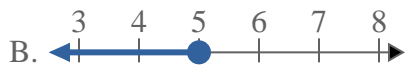
7. \_\_\_\_\_

8. \_\_\_\_\_

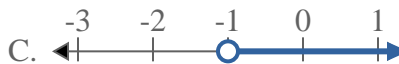


Solve each problem.


1) Which option best shows  $X \geq 5$



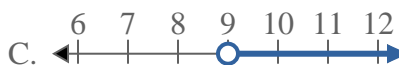
2) Which option best shows  $X \leq -1$



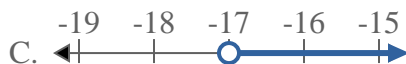
3) Which option best shows  $X > 13$



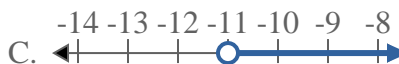
4) Which option best shows  $X \geq 9$



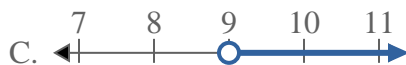
5) Which option best shows  $X \leq -17$



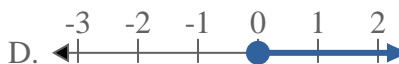
6) Which option best shows  $X \geq -11$



7) Which option best shows  $X < 9$



8) Which option best shows  $X < 0$



**Answers**

1.     **D**    

2.     **B**    

3.     **C**    

4.     **D**    

5.     **B**    

6.     **D**    

7.     **A**    

8.     **A**