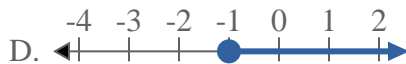
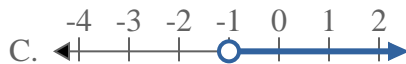
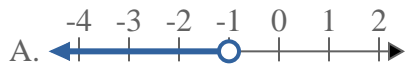




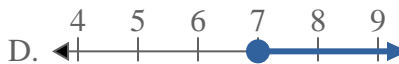
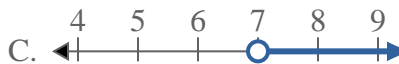
Solve each problem.

**Answers**

1) Which option best shows  $X \geq -1$



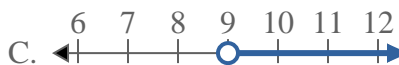
2) Which option best shows  $X \leq 7$



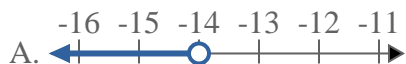
3) Which option best shows  $X > 14$



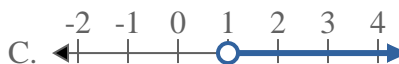
4) Which option best shows  $X > 9$



5) Which option best shows  $X < -14$



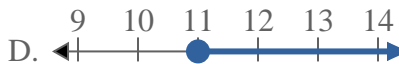
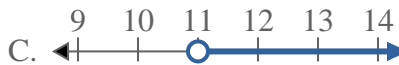
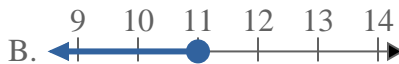
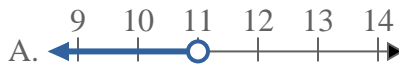
6) Which option best shows  $X \geq 1$



7) Which option best shows  $X \leq 16$



8) Which option best shows  $X \leq 11$

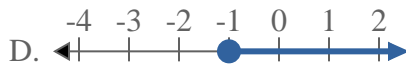
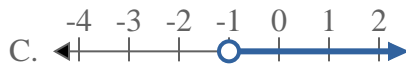
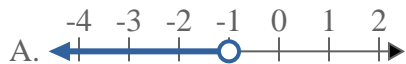


1. \_\_\_\_\_
2. \_\_\_\_\_
3. \_\_\_\_\_
4. \_\_\_\_\_
5. \_\_\_\_\_
6. \_\_\_\_\_
7. \_\_\_\_\_
8. \_\_\_\_\_



Solve each problem.

1) Which option best shows  $X \geq -1$



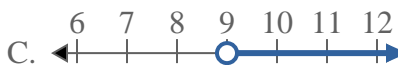
2) Which option best shows  $X \leq 7$



3) Which option best shows  $X > 14$



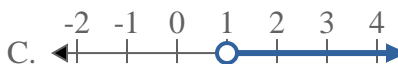
4) Which option best shows  $X > 9$



5) Which option best shows  $X < -14$



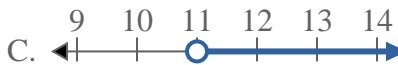
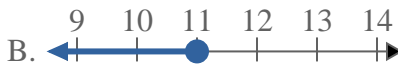
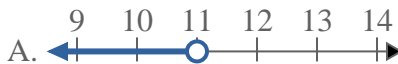
6) Which option best shows  $X \geq 1$



7) Which option best shows  $X \leq 16$



8) Which option best shows  $X \leq 11$



**Answers**

1.     **D**    

2.     **B**    

3.     **C**    

4.     **C**    

5.     **A**    

6.     **D**    

7.     **B**    

8.     **B**