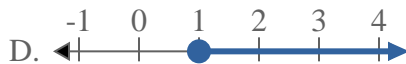
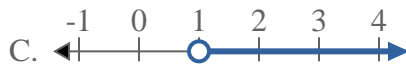
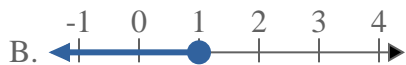
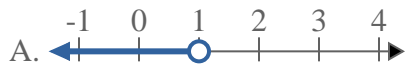


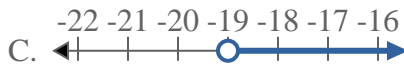


Solve each problem.

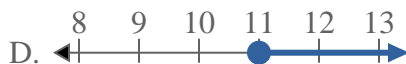
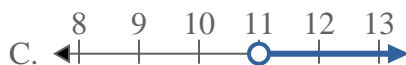
1) Which option best shows $X \leq 1$



2) Which option best shows $X < -19$



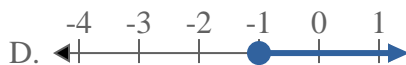
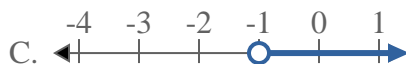
3) Which option best shows $X \geq 11$



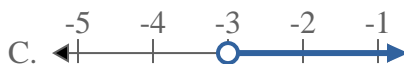
4) Which option best shows $X \geq -4$



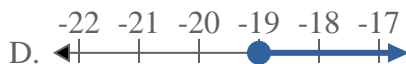
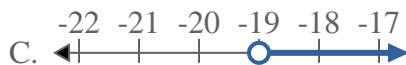
5) Which option best shows $X \geq -1$



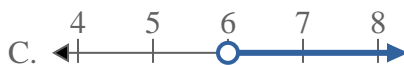
6) Which option best shows $X \leq -3$



7) Which option best shows $X > -19$



8) Which option best shows $X > 6$



Answers

1. _____

2. _____

3. _____

4. _____

5. _____

6. _____

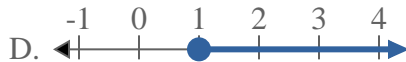
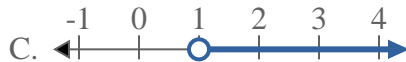
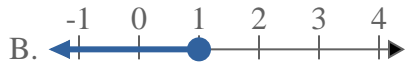
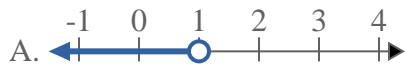
7. _____

8. _____

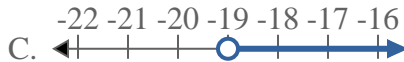


Solve each problem.

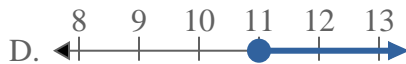
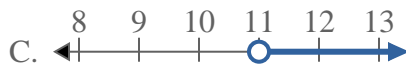
1) Which option best shows $X \leq 1$



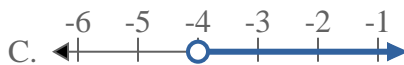
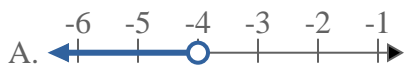
2) Which option best shows $X < -19$



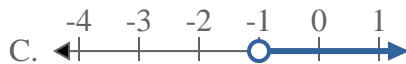
3) Which option best shows $X \geq 11$



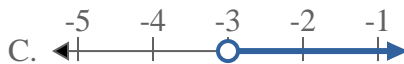
4) Which option best shows $X \geq -4$



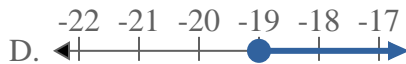
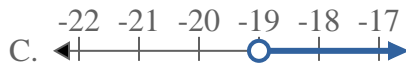
5) Which option best shows $X \geq -1$



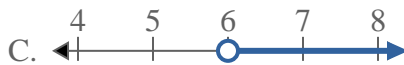
6) Which option best shows $X \leq -3$



7) Which option best shows $X > -19$



8) Which option best shows $X > 6$



Answers

1. **B**

2. **A**

3. **D**

4. **D**

5. **D**

6. **B**

7. **C**

8. **C**