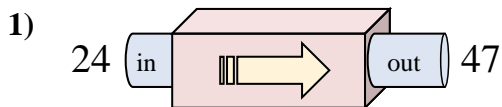


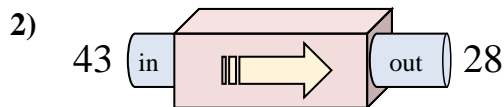


Determine which rule the function machine is using.

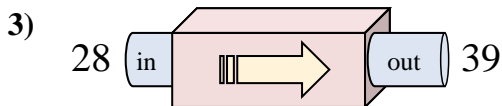
Answers



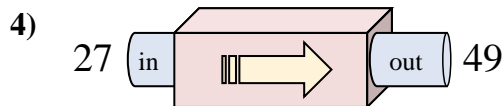
- A. Add 23
- B. Add 26
- C. Subtract 27
- D. Add 24



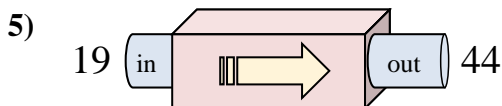
- A. Subtract 16
- B. Subtract 10
- C. Add 12
- D. Subtract 15



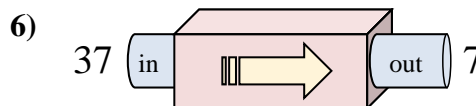
- A. Subtract 12
- B. Add 12
- C. Add 6
- D. Add 11



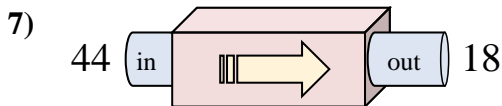
- A. Add 22
- B. Add 24
- C. Add 25
- D. Add 20



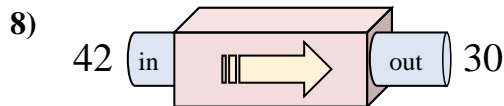
- A. Add 22
- B. Add 25
- C. Add 21
- D. Add 30



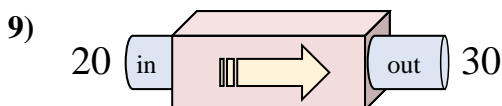
- A. Subtract 35
- B. Subtract 31
- C. Subtract 30
- D. Add 26



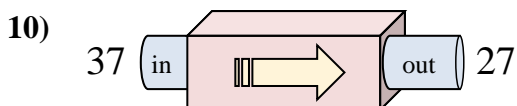
- A. Add 27
- B. Subtract 26
- C. Subtract 22
- D. Add 22



- A. Subtract 12
- B. Subtract 9
- C. Add 7
- D. Subtract 8



- A. Add 10
- B. Add 14
- C. Add 13
- D. Subtract 13

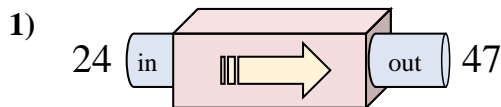


- A. Add 7
- B. Subtract 10
- C. Subtract 11
- D. Add 15

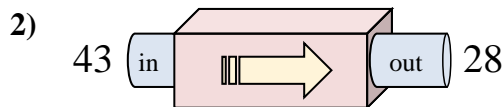
1. _____
2. _____
3. _____
4. _____
5. _____
6. _____
7. _____
8. _____
9. _____
10. _____



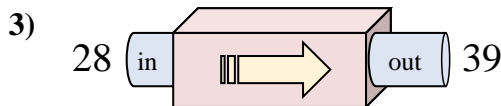
Determine which rule the function machine is using.



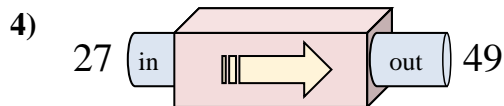
- A. Add 23
- B. Add 26
- C. Subtract 27
- D. Add 24



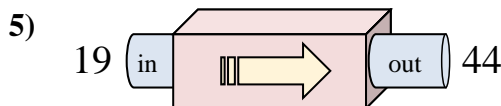
- A. Subtract 16
- B. Subtract 10
- C. Add 12
- D. Subtract 15



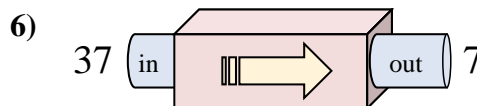
- A. Subtract 12
- B. Add 12
- C. Add 6
- D. Add 11



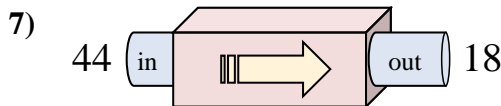
- A. Add 22
- B. Add 24
- C. Add 25
- D. Add 20



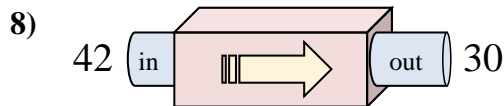
- A. Add 22
- B. Add 25
- C. Add 21
- D. Add 30



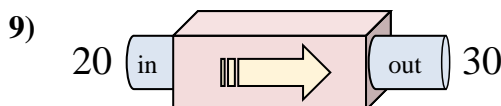
- A. Subtract 35
- B. Subtract 31
- C. Subtract 30
- D. Add 26



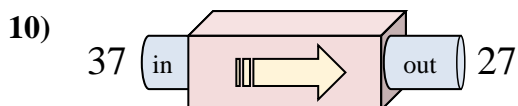
- A. Add 27
- B. Subtract 26
- C. Subtract 22
- D. Add 22



- A. Subtract 12
- B. Subtract 9
- C. Add 7
- D. Subtract 8



- A. Add 10
- B. Add 14
- C. Add 13
- D. Subtract 13



- A. Add 7
- B. Subtract 10
- C. Subtract 11
- D. Add 15

Answers

- 1. **A**
- 2. **D**
- 3. **D**
- 4. **A**
- 5. **B**
- 6. **C**
- 7. **B**
- 8. **A**
- 9. **A**
- 10. **B**