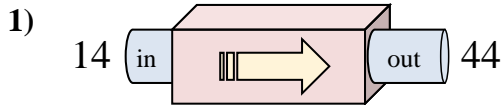
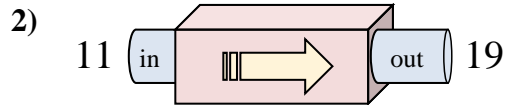
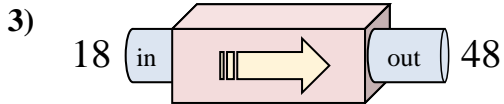


**Determine which rule the function machine is using.****Answers**

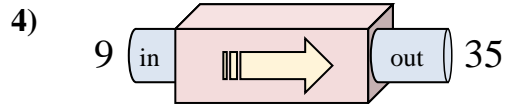
- A. Add 27
- B. Add 30
- C. Add 25
- D. Subtract 32



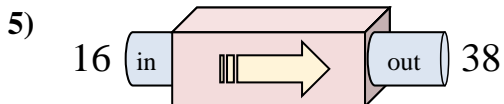
- A. Add 8
- B. Add 6
- C. Subtract 3
- D. Add 4



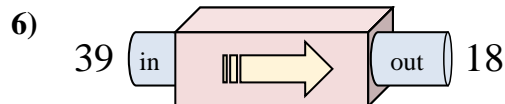
- A. Subtract 25
- B. Add 30
- C. Add 29
- D. Add 34



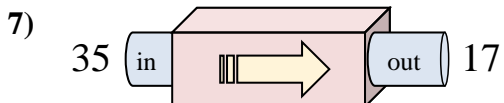
- A. Add 28
- B. Add 26
- C. Subtract 30
- D. Subtract 22



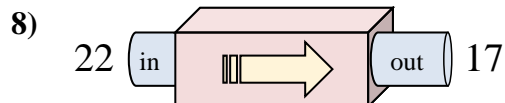
- A. Add 22
- B. Add 27
- C. Add 24
- D. Subtract 17



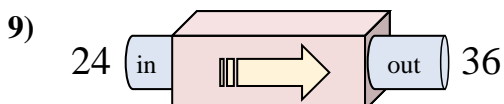
- A. Subtract 20
- B. Subtract 23
- C. Subtract 16
- D. Subtract 21



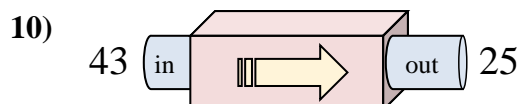
- A. Subtract 17
- B. Add 21
- C. Subtract 14
- D. Subtract 18



- A. Subtract 10
- B. Add 2
- C. Subtract 6
- D. Subtract 5



- A. Subtract 17
- B. Subtract 12
- C. Add 12
- D. Add 9

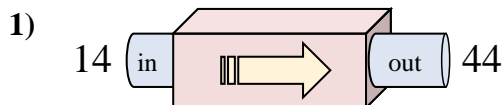


- A. Add 15
- B. Subtract 16
- C. Add 13
- D. Subtract 18

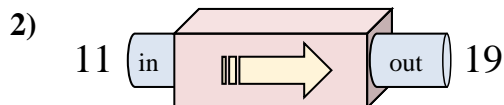
1. _____
2. _____
3. _____
4. _____
5. _____
6. _____
7. _____
8. _____
9. _____
10. _____



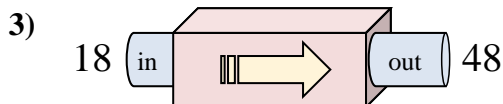
Determine which rule the function machine is using.

Answers

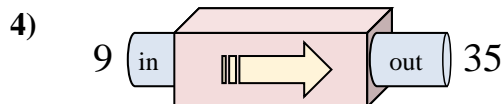
- A. Add 27
- B. Add 30
- C. Add 25
- D. Subtract 32



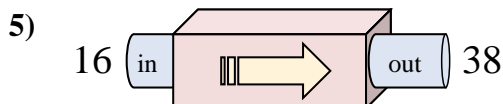
- A. Add 8
- B. Add 6
- C. Subtract 3
- D. Add 4



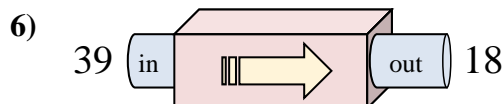
- A. Subtract 25
- B. Add 30
- C. Add 29
- D. Add 34



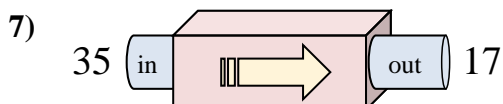
- A. Add 28
- B. Add 26
- C. Subtract 30
- D. Subtract 22



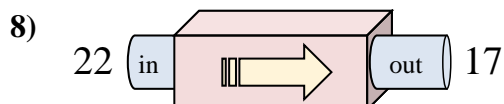
- A. Add 22
- B. Add 27
- C. Add 24
- D. Subtract 17



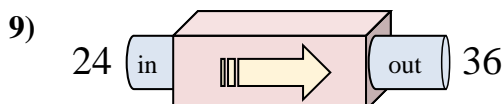
- A. Subtract 20
- B. Subtract 23
- C. Subtract 16
- D. Subtract 21



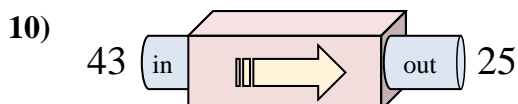
- A. Subtract 17
- B. Add 21
- C. Subtract 14
- D. Subtract 18



- A. Subtract 10
- B. Add 2
- C. Subtract 6
- D. Subtract 5



- A. Subtract 17
- B. Subtract 12
- C. Add 12
- D. Add 9



- A. Add 15
- B. Subtract 16
- C. Add 13
- D. Subtract 18

- 1. **B**
- 2. **A**
- 3. **B**
- 4. **B**
- 5. **A**
- 6. **D**
- 7. **D**
- 8. **D**
- 9. **C**
- 10. **D**