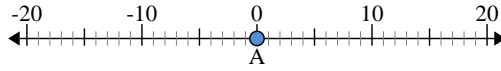




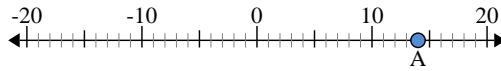
Use the numberlines to find the absolute value.

1) a. What is the value of 'A'?



b. How far is 'A' from 0 (absolute value)?

2) a. What is the value of 'A'?



b. How far is 'A' from 0 (absolute value)?

3) a. What is the value of 'A'?



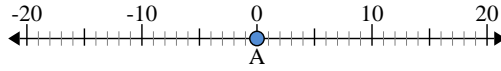
Answers

1. _____
2. _____
3. _____
4. _____
5. _____
6. _____
7. _____
8. _____
9. _____
10. _____



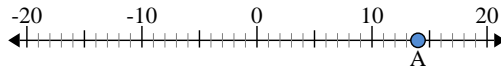
Use the numberlines to find the absolute value.

1) a. What is the value of 'A'?



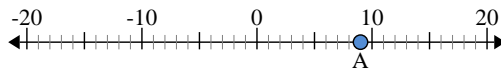
b. How far is 'A' from 0 (absolute value)?

2) a. What is the value of 'A'?



b. How far is 'A' from 0 (absolute value)?

3) a. What is the value of 'A'?



Answers

- 1. 0 0
- 2. 14 14
- 3. 9 9
- 4. -17 17
- 5. -20 20
- 6. 6 6
- 7. -10 10
- 8. 13 13
- 9. 11 11
- 10. -7 7