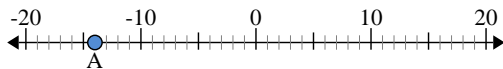




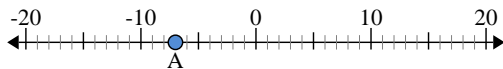
Use the numberlines to find the absolute value.

1) a. What is the value of 'A'?



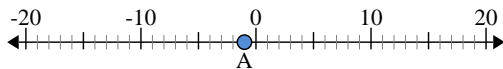
b. How far is 'A' from 0 (absolute value)?

2) a. What is the value of 'A'?



b. How far is 'A' from 0 (absolute value)?

3) a. What is the value of 'A'?



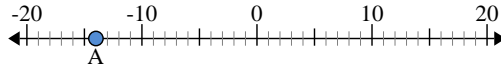
Answers

1. _____
2. _____
3. _____
4. _____
5. _____
6. _____
7. _____
8. _____
9. _____
10. _____



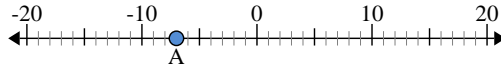
Use the numberlines to find the absolute value.

1) a. What is the value of 'A'?



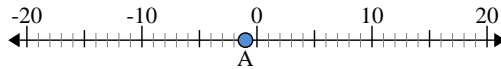
b. How far is 'A' from 0 (absolute value)?

2) a. What is the value of 'A'?



b. How far is 'A' from 0 (absolute value)?

3) a. What is the value of 'A'?



Answers

- 1. -14 14
- 2. -7 7
- 3. -1 1
- 4. 10 10
- 5. 20 20
- 6. 5 5
- 7. -17 17
- 8. -6 6
- 9. 12 12
- 10. -2 2