



Use the numberlines to show each expression and solve.

Ex) Start at -8 and add 18



Ex.  $-8 + 18 = 10$

1) Start at -6 and add 3



1. \_\_\_\_\_

2) Start at -4 and add -6



2. \_\_\_\_\_

3) Start at -1 and add -8



3. \_\_\_\_\_

4) Start at -4 and add -3



4. \_\_\_\_\_

5) Start at 0 and add -10



5. \_\_\_\_\_

6) Start at -7 and add 12



6. \_\_\_\_\_

7) Start at 2 and add -10



7. \_\_\_\_\_

8) Start at -6 and add -2



8. \_\_\_\_\_

9) Start at 1 and add -10



9. \_\_\_\_\_

10) Start at 3 and add -10



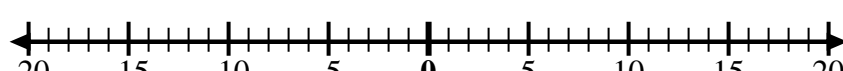
10. \_\_\_\_\_

11) Start at -4 and add -2



11. \_\_\_\_\_

12) Start at -10 and add 6



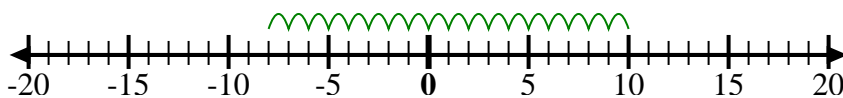
12. \_\_\_\_\_

Answers



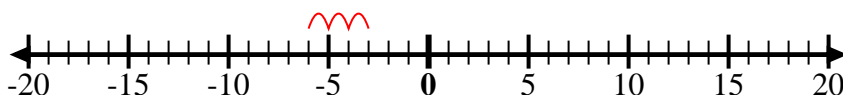
Use the numberlines to show each expression and solve.

Ex) Start at -8 and add 18



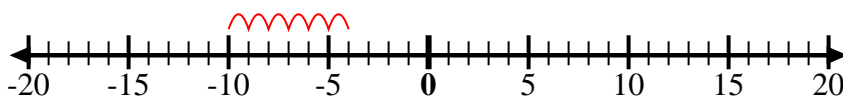
Ex.  $-8 + 18 = 10$

1) Start at -6 and add 3



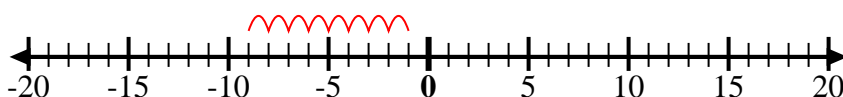
1.  $-6 + 3 = -3$

2) Start at -4 and add -6



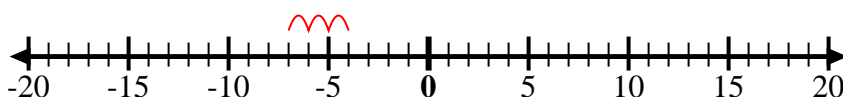
2.  $-4 + -6 = -10$

3) Start at -1 and add -8



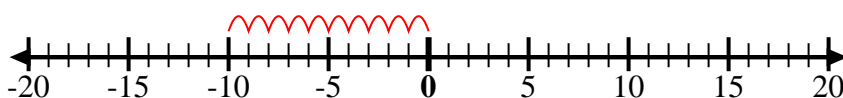
3.  $-1 + -8 = -9$

4) Start at -4 and add -3



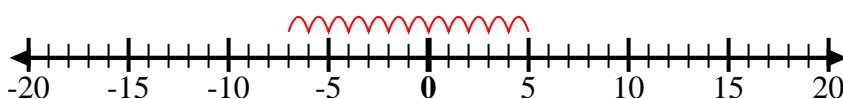
4.  $-4 + -3 = -7$

5) Start at 0 and add -10



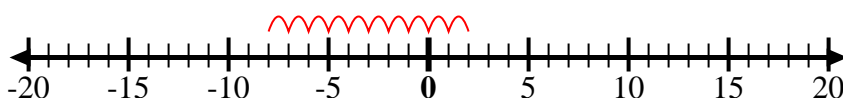
5.  $0 + -10 = -10$

6) Start at -7 and add 12



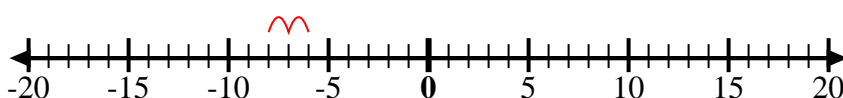
6.  $-7 + 12 = 5$

7) Start at 2 and add -10



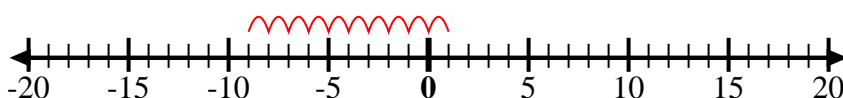
7.  $2 + -10 = -8$

8) Start at -6 and add -2



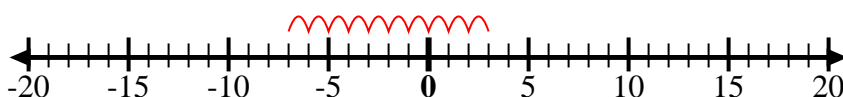
8.  $-6 + -2 = -8$

9) Start at 1 and add -10



9.  $1 + -10 = -9$

10) Start at 3 and add -10



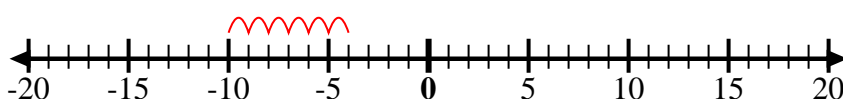
10.  $3 + -10 = -7$

11) Start at -4 and add -2



11.  $-4 + -2 = -6$

12) Start at -10 and add 6



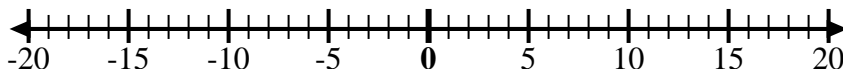
12.  $-10 + 6 = -4$

Answers



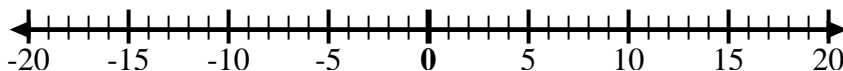
Use the numberlines to show each expression and solve.

Ex) Start at 4 and add -8



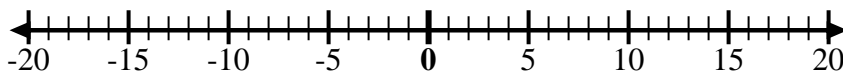
Ex.  $4 + -8 = -4$

1) Start at -9 and add 5



1. \_\_\_\_\_

2) Start at -6 and add -4



2. \_\_\_\_\_

3) Start at -5 and add 4



3. \_\_\_\_\_

4) Start at -7 and add -2



4. \_\_\_\_\_

5) Start at 9 and add -12



5. \_\_\_\_\_

6) Start at 7 and add -3



6. \_\_\_\_\_

7) Start at 1 and add -11



7. \_\_\_\_\_

8) Start at -2 and add -3



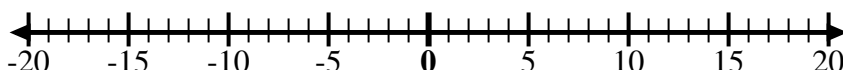
8. \_\_\_\_\_

9) Start at -3 and add -3



9. \_\_\_\_\_

10) Start at -5 and add 2



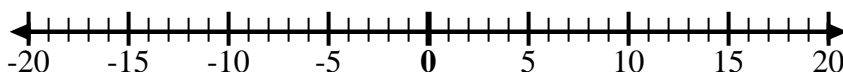
10. \_\_\_\_\_

11) Start at -10 and add 6



11. \_\_\_\_\_

12) Start at -4 and add 8



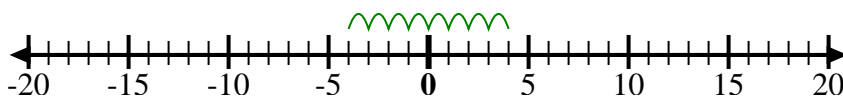
12. \_\_\_\_\_

Answers



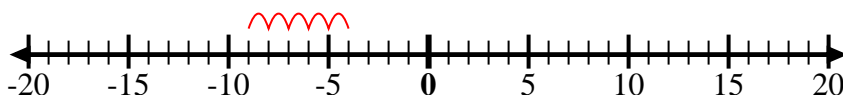
Use the numberlines to show each expression and solve.

Ex) Start at 4 and add -8



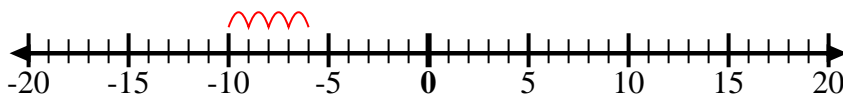
Ex.  $4 + -8 = -4$

1) Start at -9 and add 5



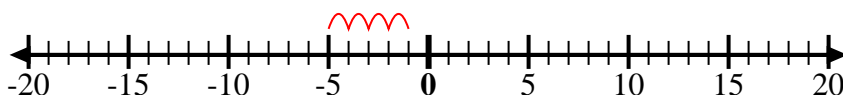
1.  $-9 + 5 = -4$

2) Start at -6 and add -4



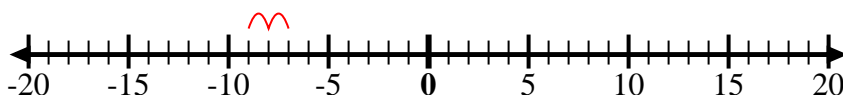
2.  $-6 + -4 = -10$

3) Start at -5 and add 4



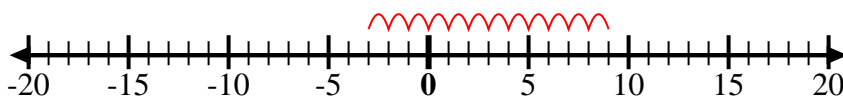
3.  $-5 + 4 = -1$

4) Start at -7 and add -2



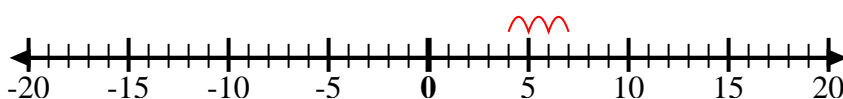
4.  $-7 + -2 = -9$

5) Start at 9 and add -12



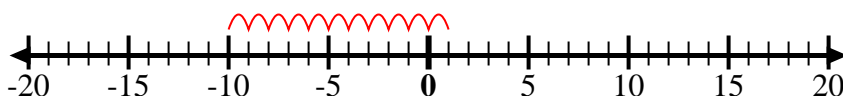
5.  $9 + -12 = -3$

6) Start at 7 and add -3



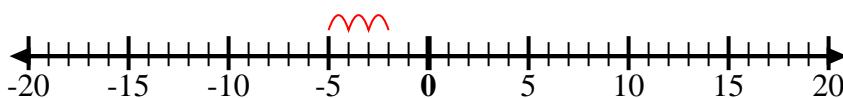
6.  $7 + -3 = 4$

7) Start at 1 and add -11



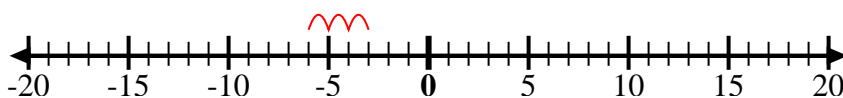
7.  $1 + -11 = -10$

8) Start at -2 and add -3



8.  $-2 + -3 = -5$

9) Start at -3 and add -3



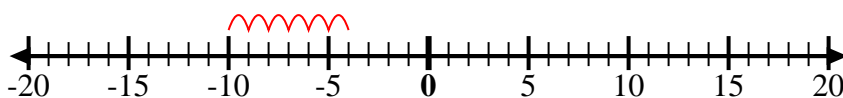
9.  $-3 + -3 = -6$

10) Start at -5 and add 2



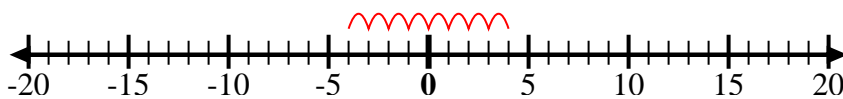
10.  $-5 + 2 = -3$

11) Start at -10 and add 6



11.  $-10 + 6 = -4$

12) Start at -4 and add 8



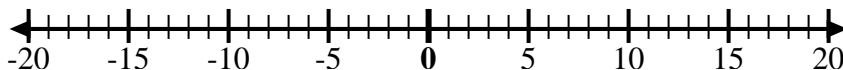
12.  $-4 + 8 = 4$

Answers



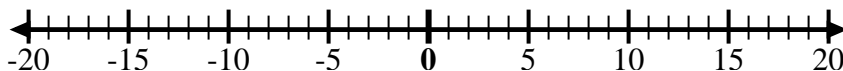
Use the numberlines to show each expression and solve.

Ex) Start at -4 and add 8



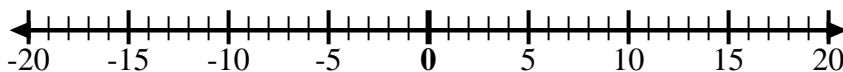
Ex.  $-4 + 8 = 4$

1) Start at -3 and add 10



1. \_\_\_\_\_

2) Start at 2 and add -12



2. \_\_\_\_\_

3) Start at -5 and add 3



3. \_\_\_\_\_

4) Start at -7 and add 5



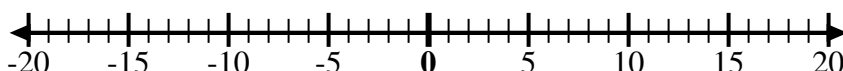
4. \_\_\_\_\_

5) Start at -3 and add -3



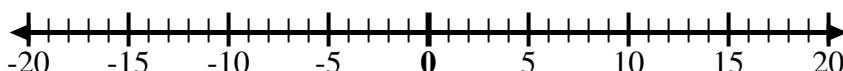
5. \_\_\_\_\_

6) Start at -1 and add -9



6. \_\_\_\_\_

7) Start at 1 and add -10



7. \_\_\_\_\_

8) Start at -6 and add -2



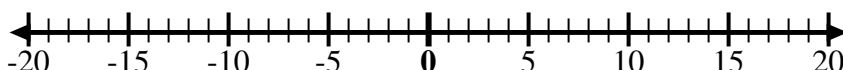
8. \_\_\_\_\_

9) Start at -8 and add 10



9. \_\_\_\_\_

10) Start at 0 and add -10



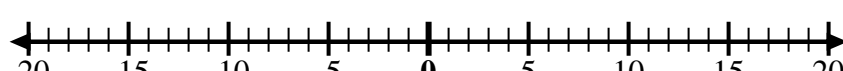
10. \_\_\_\_\_

11) Start at -8 and add -2



11. \_\_\_\_\_

12) Start at 5 and add -13



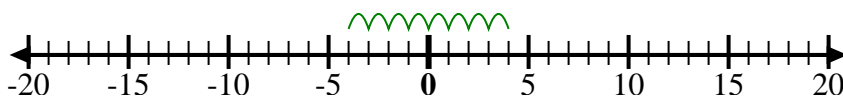
12. \_\_\_\_\_

Answers



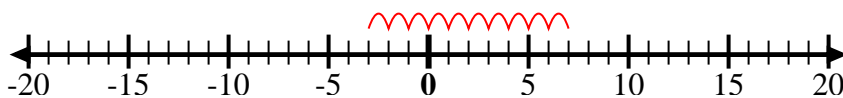
Use the numberlines to show each expression and solve.

Ex) Start at -4 and add 8



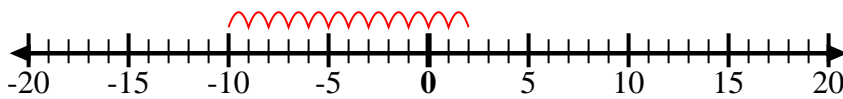
Ex.  $-4 + 8 = 4$

1) Start at -3 and add 10



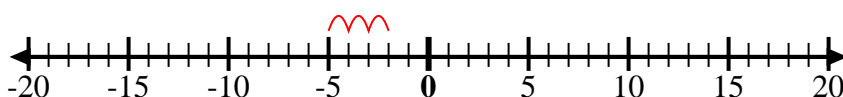
1.  $-3 + 10 = 7$

2) Start at 2 and add -12



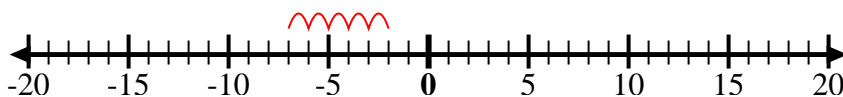
2.  $2 + -12 = -10$

3) Start at -5 and add 3



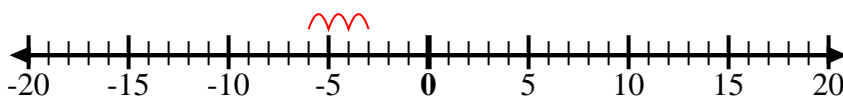
3.  $-5 + 3 = -2$

4) Start at -7 and add 5



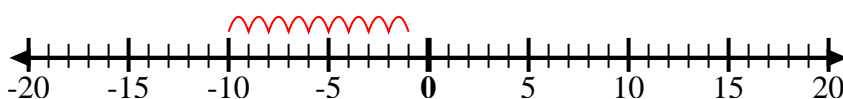
4.  $-7 + 5 = -2$

5) Start at -3 and add -3



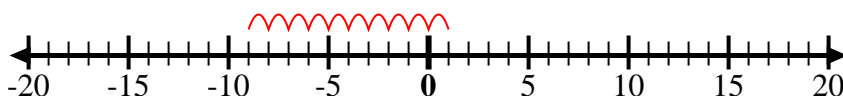
5.  $-3 + -3 = -6$

6) Start at -1 and add -9



6.  $-1 + -9 = -10$

7) Start at 1 and add -10



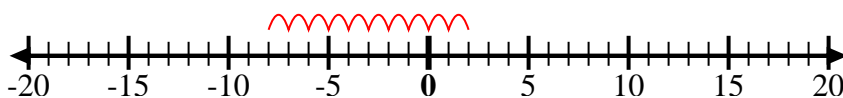
7.  $1 + -10 = -9$

8) Start at -6 and add -2



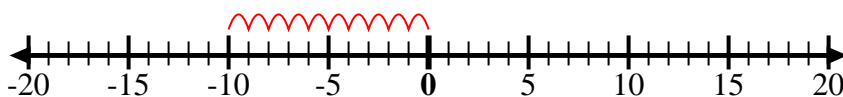
8.  $-6 + -2 = -8$

9) Start at -8 and add 10



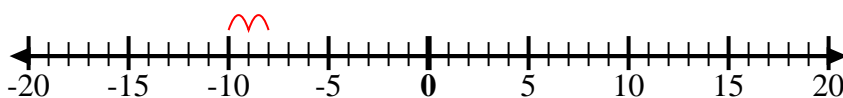
9.  $-8 + 10 = 2$

10) Start at 0 and add -10



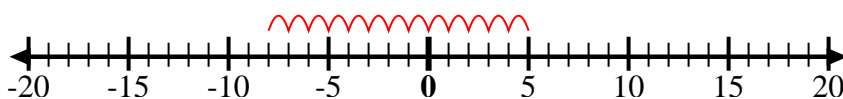
10.  $0 + -10 = -10$

11) Start at -8 and add -2



11.  $-8 + -2 = -10$

12) Start at 5 and add -13



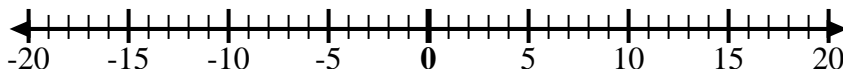
12.  $5 + -13 = -8$

Answers



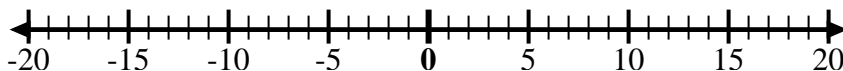
Use the numberlines to show each expression and solve.

Ex) Start at -2 and add -8



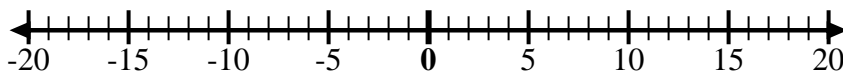
Ex.  $-2 + -8 = -10$

1) Start at 8 and add -18



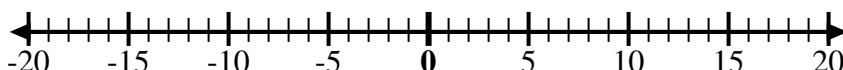
1. \_\_\_\_\_

2) Start at 4 and add -11



2. \_\_\_\_\_

3) Start at -5 and add -5



3. \_\_\_\_\_

4) Start at -8 and add 5



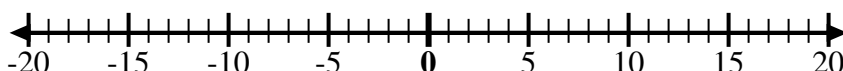
4. \_\_\_\_\_

5) Start at -6 and add 3



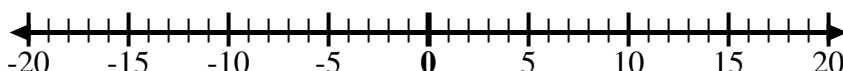
5. \_\_\_\_\_

6) Start at -1 and add -7



6. \_\_\_\_\_

7) Start at -2 and add -6



7. \_\_\_\_\_

8) Start at -3 and add 12



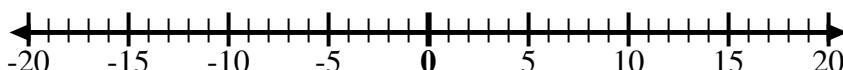
8. \_\_\_\_\_

9) Start at -1 and add 11



9. \_\_\_\_\_

10) Start at 2 and add -9



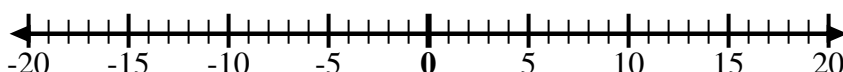
10. \_\_\_\_\_

11) Start at -3 and add 13



11. \_\_\_\_\_

12) Start at 10 and add -12



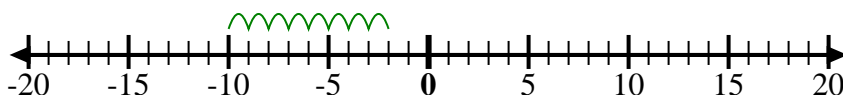
12. \_\_\_\_\_

Answers



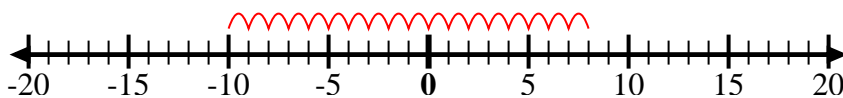
Use the numberlines to show each expression and solve.

Ex) Start at -2 and add -8



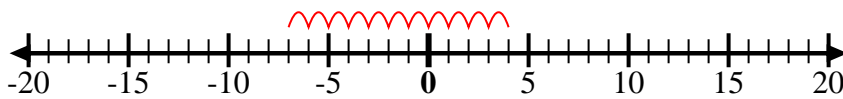
Ex.  $-2 + -8 = -10$

1) Start at 8 and add -18



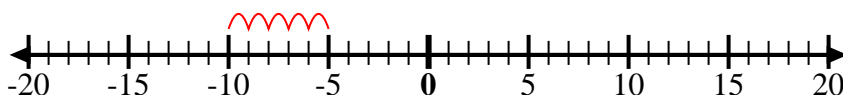
1.  $8 + -18 = -10$

2) Start at 4 and add -11



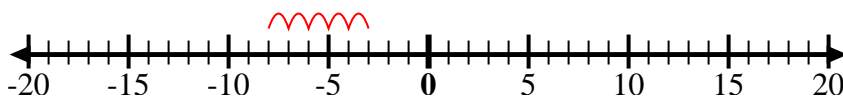
2.  $4 + -11 = -7$

3) Start at -5 and add -5



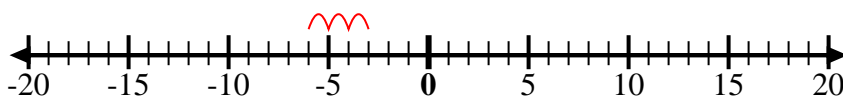
3.  $-5 + -5 = -10$

4) Start at -8 and add 5



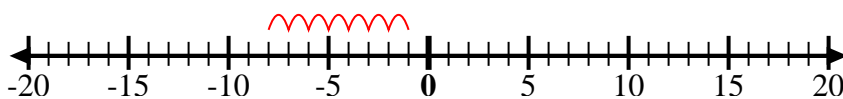
4.  $-8 + 5 = -3$

5) Start at -6 and add 3



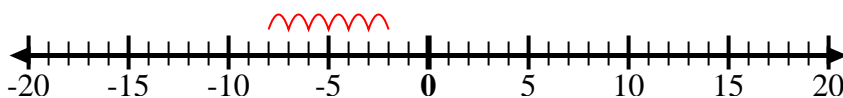
5.  $-6 + 3 = -3$

6) Start at -1 and add -7



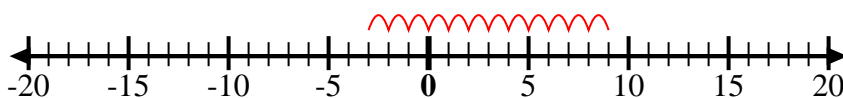
6.  $-1 + -7 = -8$

7) Start at -2 and add -6



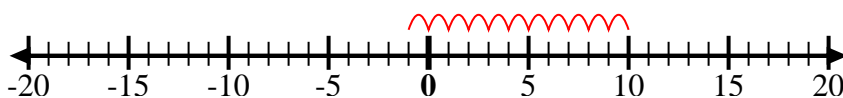
7.  $-2 + -6 = -8$

8) Start at -3 and add 12



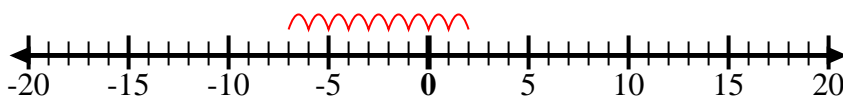
8.  $-3 + 12 = 9$

9) Start at -1 and add 11



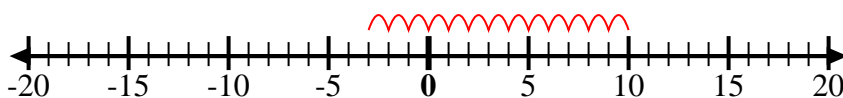
9.  $-1 + 11 = 10$

10) Start at 2 and add -9



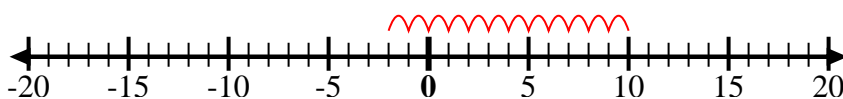
10.  $2 + -9 = -7$

11) Start at -3 and add 13



11.  $-3 + 13 = 10$

12) Start at 10 and add -12



12.  $10 + -12 = -2$

Answers





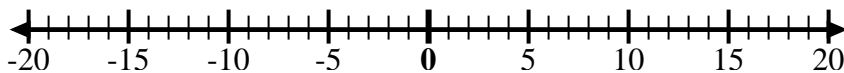
Use the numberlines to show each expression and solve.

Ex) Start at 0 and add -2



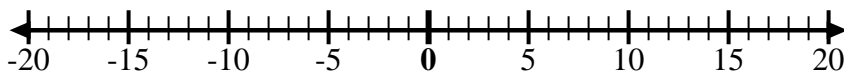
Ex.  $0 + -2 = -2$

1) Start at 0 and add -5



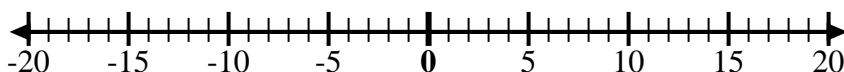
1. \_\_\_\_\_

2) Start at 0 and add 7



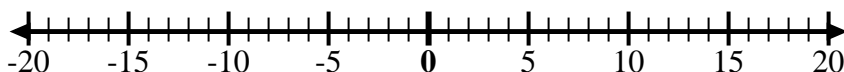
2. \_\_\_\_\_

3) Start at -6 and add 12



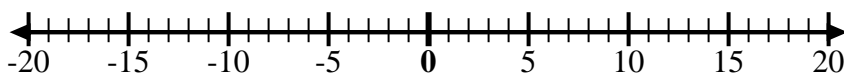
3. \_\_\_\_\_

4) Start at -2 and add -2



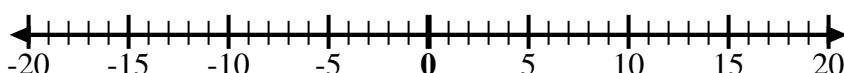
4. \_\_\_\_\_

5) Start at 2 and add -8



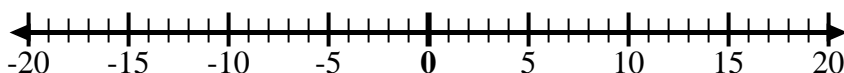
5. \_\_\_\_\_

6) Start at 3 and add -11



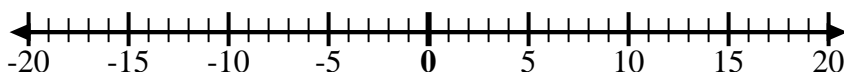
6. \_\_\_\_\_

7) Start at -7 and add 16



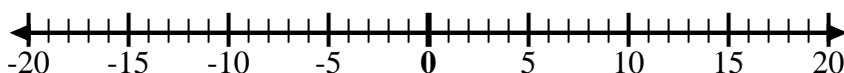
7. \_\_\_\_\_

8) Start at -9 and add 7



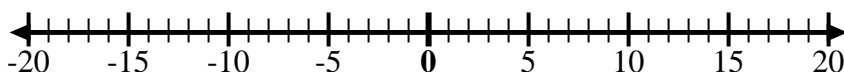
8. \_\_\_\_\_

9) Start at -8 and add 3



9. \_\_\_\_\_

10) Start at 5 and add -15



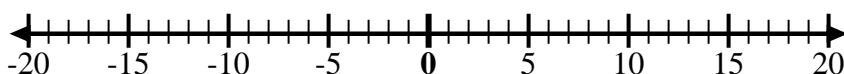
10. \_\_\_\_\_

11) Start at -8 and add 4



11. \_\_\_\_\_

12) Start at 5 and add -6



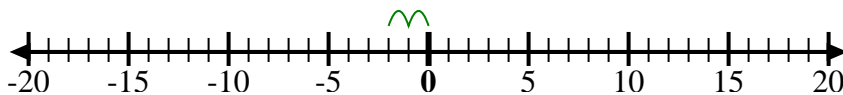
12. \_\_\_\_\_

**Answers**



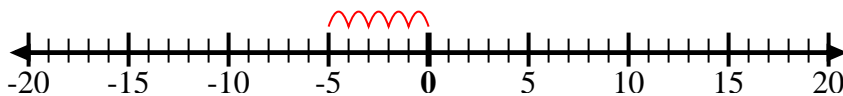
Use the numberlines to show each expression and solve.

Ex) Start at 0 and add -2



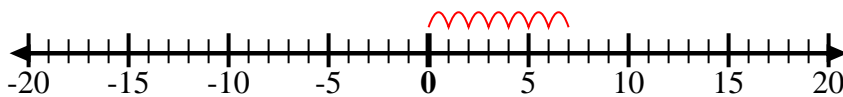
Ex.  $0 + -2 = -2$

1) Start at 0 and add -5



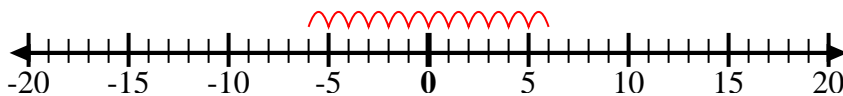
1.  $0 + -5 = -5$

2) Start at 0 and add 7



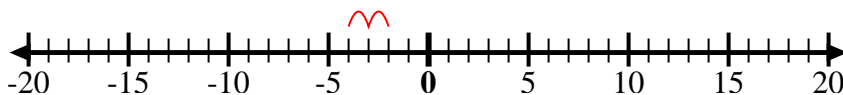
2.  $0 + 7 = 7$

3) Start at -6 and add 12



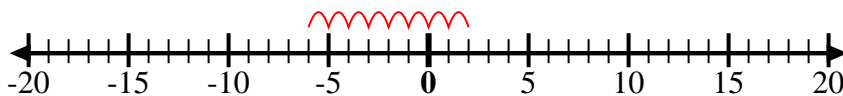
3.  $-6 + 12 = 6$

4) Start at -2 and add -2



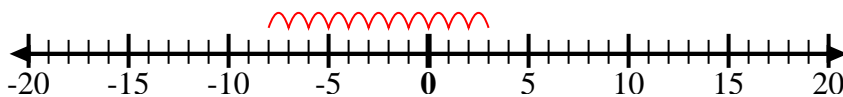
4.  $-2 + -2 = -4$

5) Start at 2 and add -8



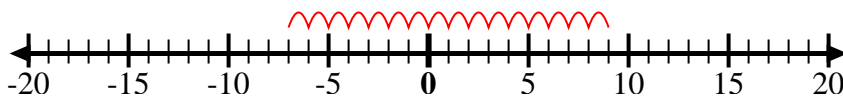
5.  $2 + -8 = -6$

6) Start at 3 and add -11



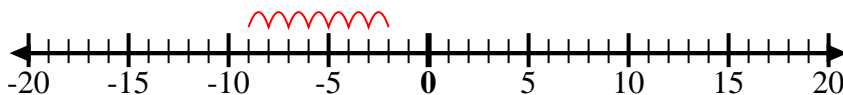
6.  $3 + -11 = -8$

7) Start at -7 and add 16



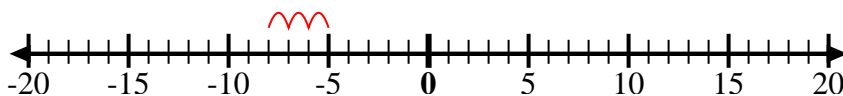
7.  $-7 + 16 = 9$

8) Start at -9 and add 7



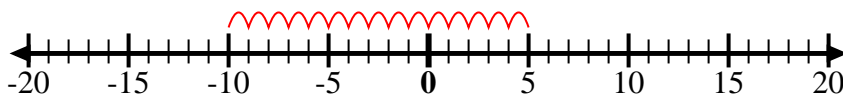
8.  $-9 + 7 = -2$

9) Start at -8 and add 3



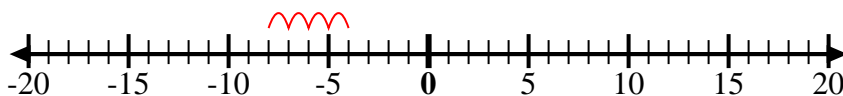
9.  $-8 + 3 = -5$

10) Start at 5 and add -15



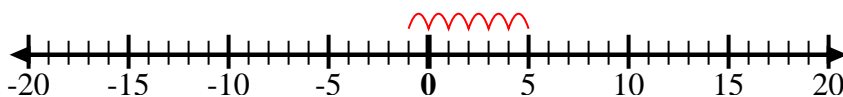
10.  $5 + -15 = -10$

11) Start at -8 and add 4



11.  $-8 + 4 = -4$

12) Start at 5 and add -6



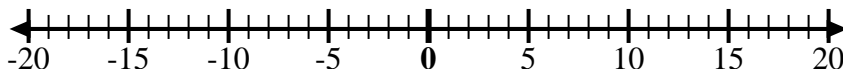
12.  $5 + -6 = -1$

Answers



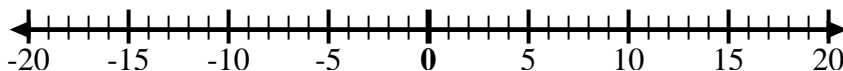
Use the numberlines to show each expression and solve.

Ex) Start at -6 and add 15



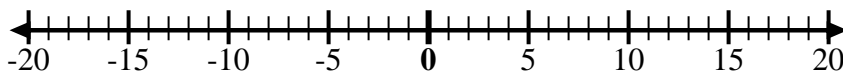
Ex.  $-6 + 15 = 9$

1) Start at -3 and add -3



1. \_\_\_\_\_

2) Start at 10 and add 0



2. \_\_\_\_\_

3) Start at -1 and add 10



3. \_\_\_\_\_

4) Start at 2 and add -11



4. \_\_\_\_\_

5) Start at 3 and add -12



5. \_\_\_\_\_

6) Start at -8 and add 7



6. \_\_\_\_\_

7) Start at 0 and add -5



7. \_\_\_\_\_

8) Start at -6 and add -2



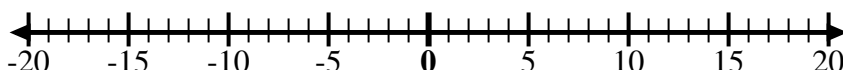
8. \_\_\_\_\_

9) Start at 9 and add -15



9. \_\_\_\_\_

10) Start at 4 and add -9



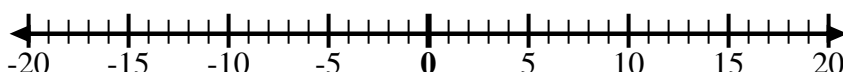
10. \_\_\_\_\_

11) Start at 1 and add -10



11. \_\_\_\_\_

12) Start at -5 and add -3



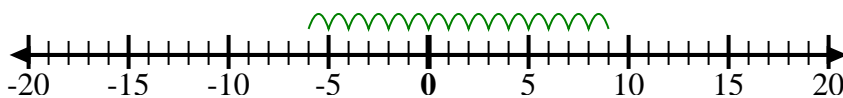
12. \_\_\_\_\_

Answers



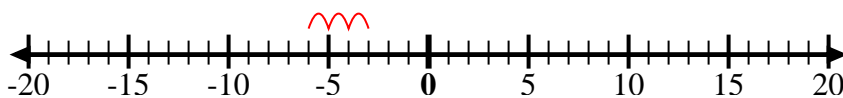
Use the numberlines to show each expression and solve.

Ex) Start at -6 and add 15



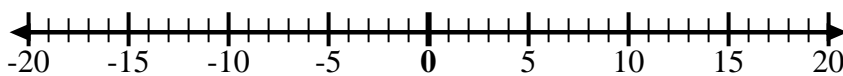
Ex.  $-6 + 15 = 9$

1) Start at -3 and add -3



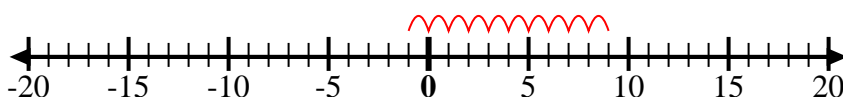
1.  $-3 + -3 = -6$

2) Start at 10 and add 0



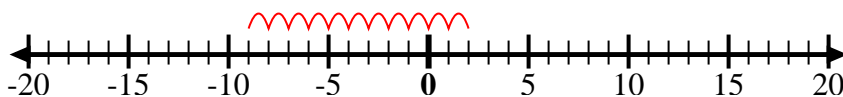
2.  $10 + 0 = 10$

3) Start at -1 and add 10



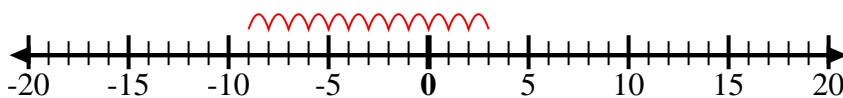
3.  $-1 + 10 = 9$

4) Start at 2 and add -11



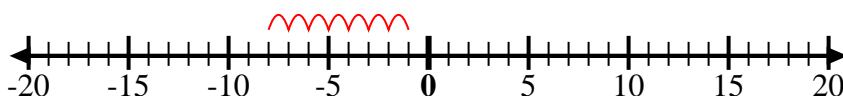
4.  $2 + -11 = -9$

5) Start at 3 and add -12



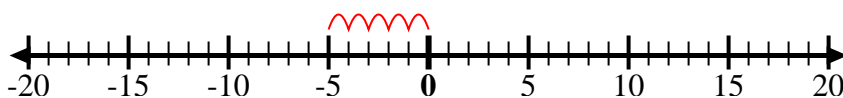
5.  $3 + -12 = -9$

6) Start at -8 and add 7



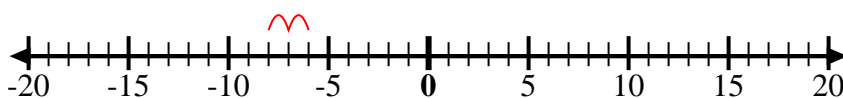
6.  $-8 + 7 = -1$

7) Start at 0 and add -5



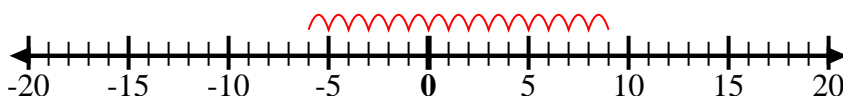
7.  $0 + -5 = -5$

8) Start at -6 and add -2



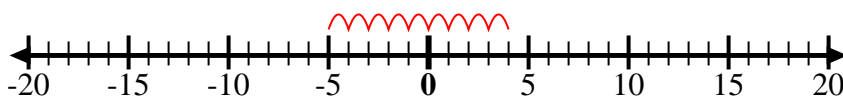
8.  $-6 + -2 = -8$

9) Start at 9 and add -15



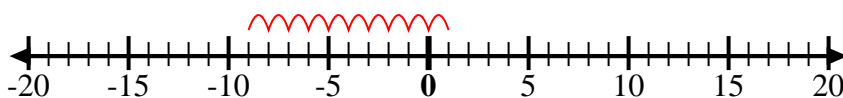
9.  $9 + -15 = -6$

10) Start at 4 and add -9



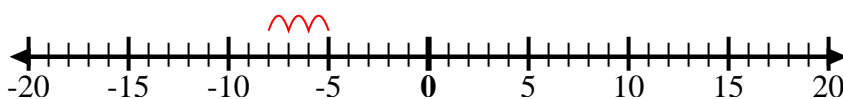
10.  $4 + -9 = -5$

11) Start at 1 and add -10



11.  $1 + -10 = -9$

12) Start at -5 and add -3



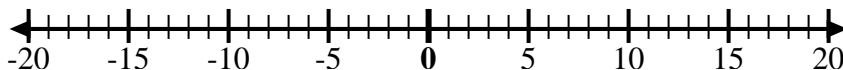
12.  $-5 + -3 = -8$

Answers



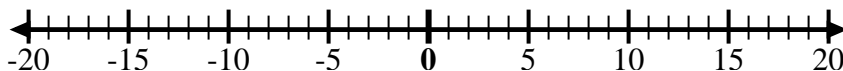
Use the numberlines to show each expression and solve.

Ex) Start at 9 and add -4



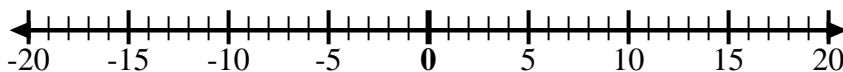
Ex.  $9 + -4 = 5$

1) Start at 5 and add -11



1. \_\_\_\_\_

2) Start at 2 and add -8



2. \_\_\_\_\_

3) Start at -5 and add -4



3. \_\_\_\_\_

4) Start at 0 and add 8



4. \_\_\_\_\_

5) Start at 5 and add -8



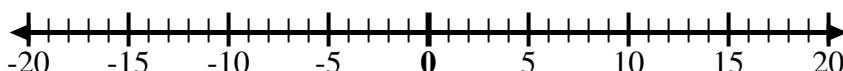
5. \_\_\_\_\_

6) Start at -7 and add 15



6. \_\_\_\_\_

7) Start at -9 and add 8



7. \_\_\_\_\_

8) Start at -2 and add -6



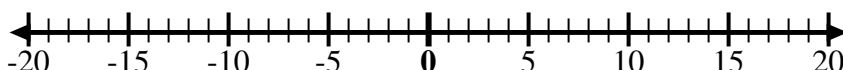
8. \_\_\_\_\_

9) Start at -5 and add 5



9. \_\_\_\_\_

10) Start at -1 and add -8



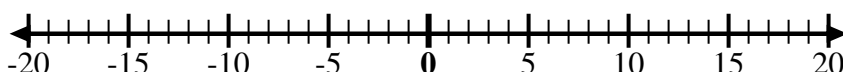
10. \_\_\_\_\_

11) Start at -1 and add 7



11. \_\_\_\_\_

12) Start at -10 and add 14



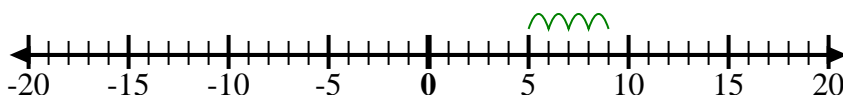
12. \_\_\_\_\_

Answers



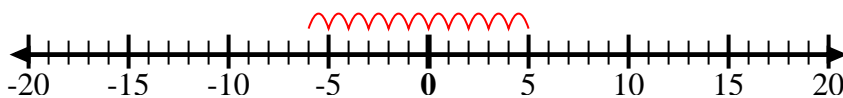
Use the numberlines to show each expression and solve.

Ex) Start at 9 and add -4



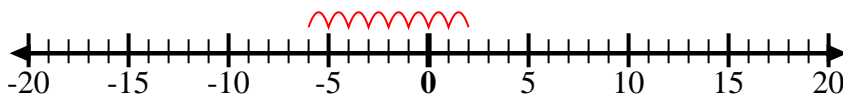
Ex.  $9 + -4 = 5$

1) Start at 5 and add -11



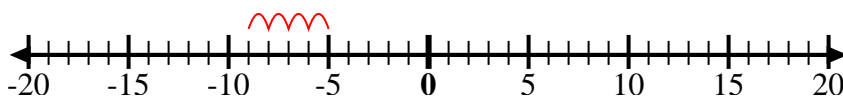
1.  $5 + -11 = -6$

2) Start at 2 and add -8



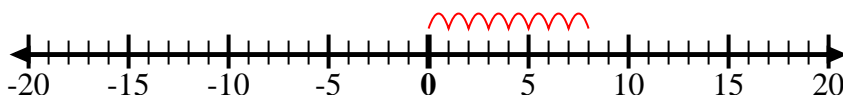
2.  $2 + -8 = -6$

3) Start at -5 and add -4



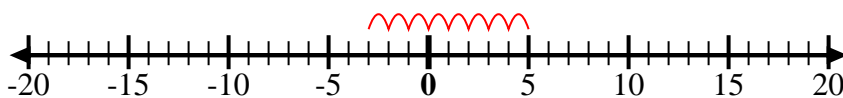
3.  $-5 + -4 = -9$

4) Start at 0 and add 8



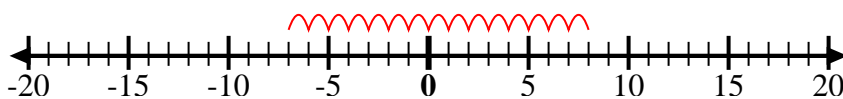
4.  $0 + 8 = 8$

5) Start at 5 and add -8



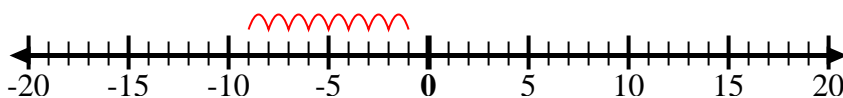
5.  $5 + -8 = -3$

6) Start at -7 and add 15



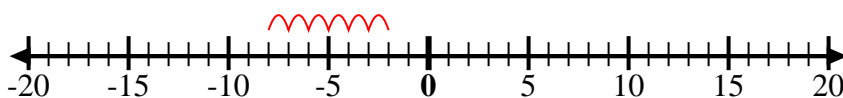
6.  $-7 + 15 = 8$

7) Start at -9 and add 8



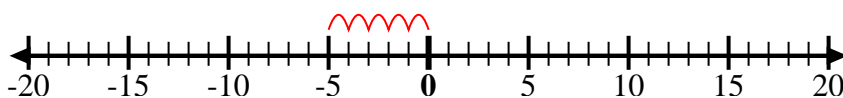
7.  $-9 + 8 = -1$

8) Start at -2 and add -6



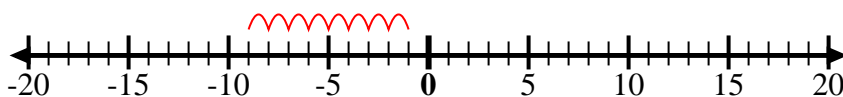
8.  $-2 + -6 = -8$

9) Start at -5 and add 5



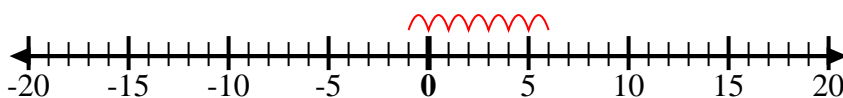
9.  $-5 + 5 = 0$

10) Start at -1 and add -8



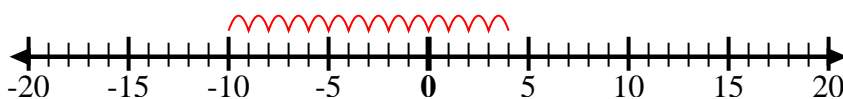
10.  $-1 + -8 = -9$

11) Start at -1 and add 7



11.  $-1 + 7 = 6$

12) Start at -10 and add 14



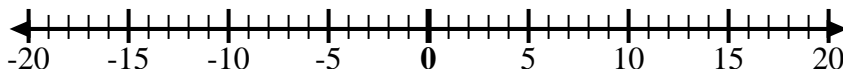
12.  $-10 + 14 = 4$

**Answers**



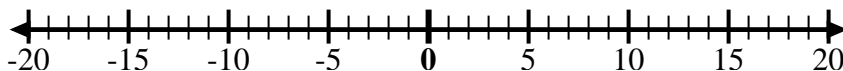
Use the numberlines to show each expression and solve.

Ex) Start at 7 and add -12



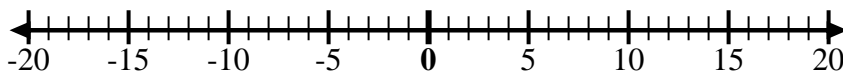
Ex.  $7 + -12 = -5$

1) Start at -2 and add 5



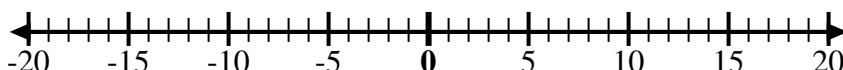
1. \_\_\_\_\_

2) Start at 8 and add -13



2. \_\_\_\_\_

3) Start at -7 and add -2



3. \_\_\_\_\_

4) Start at -4 and add -3



4. \_\_\_\_\_

5) Start at -3 and add -2



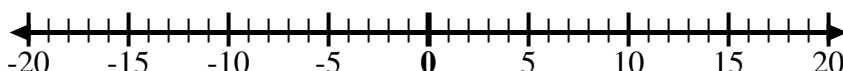
5. \_\_\_\_\_

6) Start at -7 and add 5



6. \_\_\_\_\_

7) Start at -6 and add -2



7. \_\_\_\_\_

8) Start at 1 and add -11



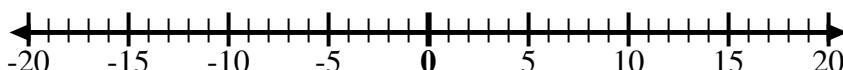
8. \_\_\_\_\_

9) Start at -7 and add 8



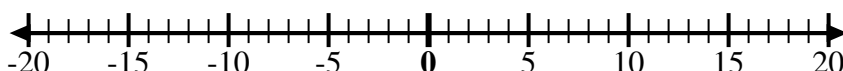
9. \_\_\_\_\_

10) Start at 1 and add -9



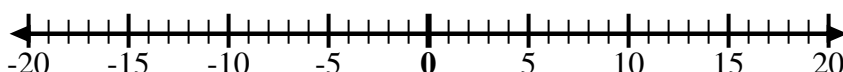
10. \_\_\_\_\_

11) Start at -3 and add -3



11. \_\_\_\_\_

12) Start at 2 and add -11



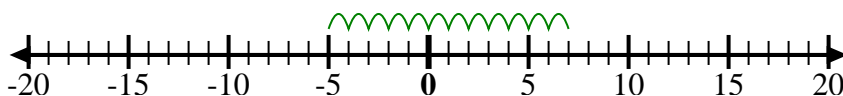
12. \_\_\_\_\_

Answers



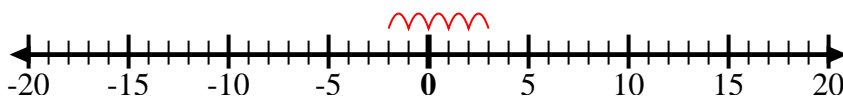
Use the numberlines to show each expression and solve.

Ex) Start at 7 and add -12



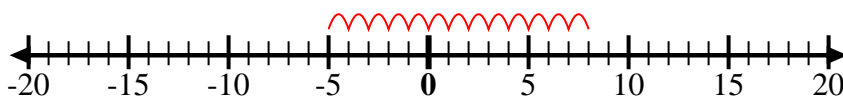
Ex.  $7 + -12 = -5$

1) Start at -2 and add 5



1.  $-2 + 5 = 3$

2) Start at 8 and add -13



2.  $8 + -13 = -5$

3) Start at -7 and add -2



3.  $-7 + -2 = -9$

4) Start at -4 and add -3



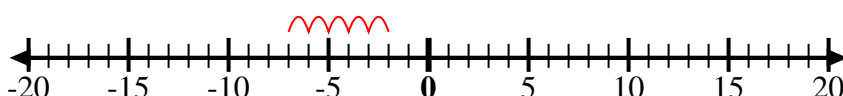
4.  $-4 + -3 = -7$

5) Start at -3 and add -2



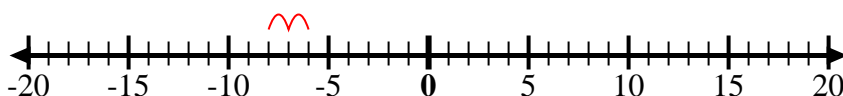
5.  $-3 + -2 = -5$

6) Start at -7 and add 5



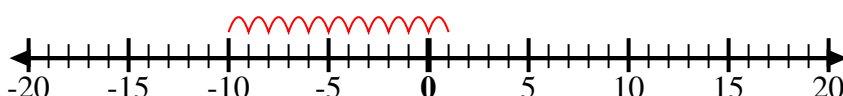
6.  $-7 + 5 = -2$

7) Start at -6 and add -2



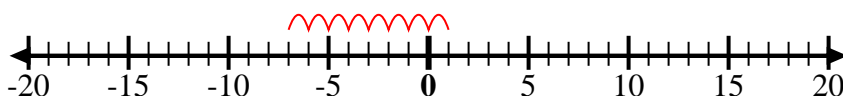
7.  $-6 + -2 = -8$

8) Start at 1 and add -11



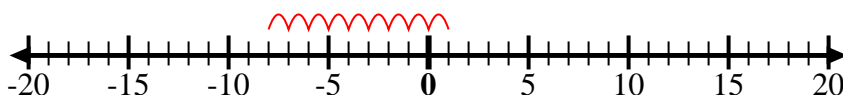
8.  $1 + -11 = -10$

9) Start at -7 and add 8



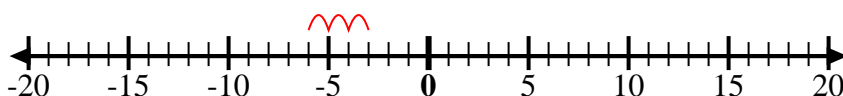
9.  $-7 + 8 = 1$

10) Start at 1 and add -9



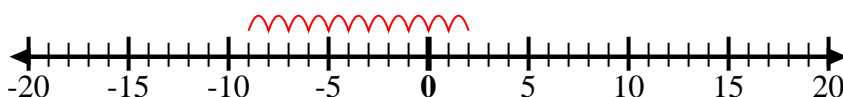
10.  $1 + -9 = -8$

11) Start at -3 and add -3



11.  $-3 + -3 = -6$

12) Start at 2 and add -11



12.  $2 + -11 = -9$

Answers





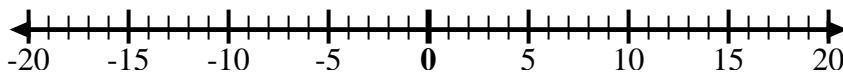
Use the numberlines to show each expression and solve.

Ex) Start at -9 and add 5



Ex.  $-9 + 5 = -4$

1) Start at -10 and add 14



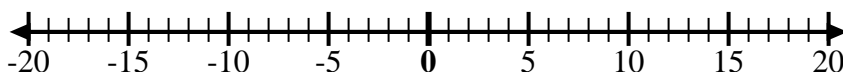
1. \_\_\_\_\_

2) Start at 3 and add -10



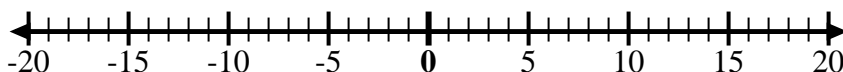
2. \_\_\_\_\_

3) Start at 7 and add -6



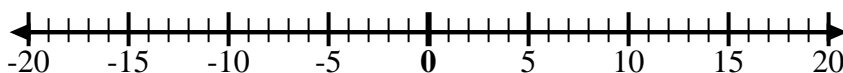
3. \_\_\_\_\_

4) Start at -8 and add -2



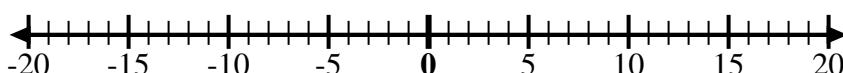
4. \_\_\_\_\_

5) Start at 5 and add -9



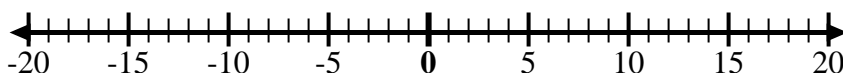
5. \_\_\_\_\_

6) Start at -5 and add 4



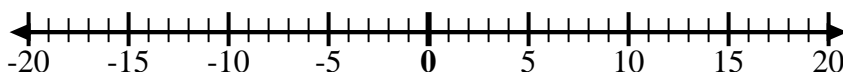
6. \_\_\_\_\_

7) Start at -6 and add 9



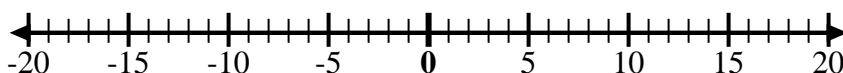
7. \_\_\_\_\_

8) Start at -4 and add 14



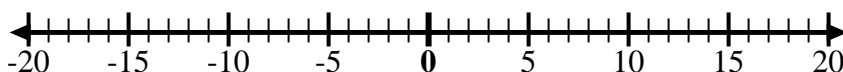
8. \_\_\_\_\_

9) Start at -4 and add -3



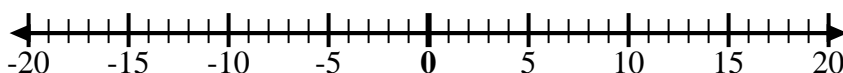
9. \_\_\_\_\_

10) Start at -7 and add -2



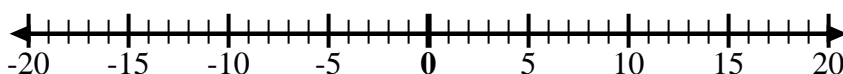
10. \_\_\_\_\_

11) Start at 0 and add -7



11. \_\_\_\_\_

12) Start at -2 and add -2



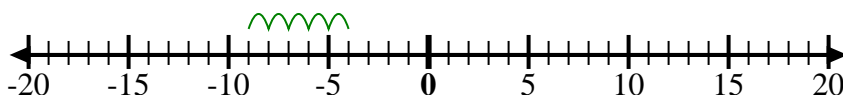
12. \_\_\_\_\_

Answers



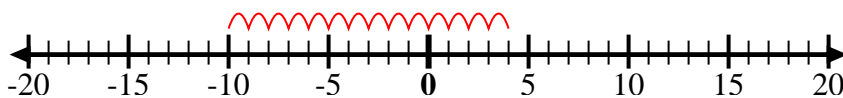
Use the numberlines to show each expression and solve.

Ex) Start at -9 and add 5



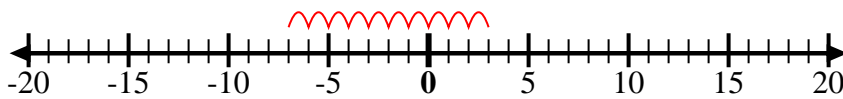
Ex.  $-9 + 5 = -4$

1) Start at -10 and add 14



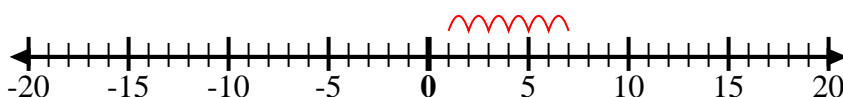
1.  $-10 + 14 = 4$

2) Start at 3 and add -10



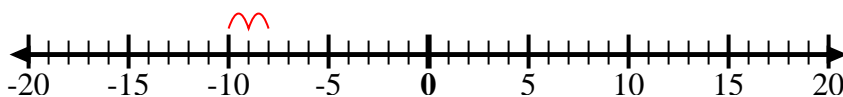
2.  $3 + -10 = -7$

3) Start at 7 and add -6



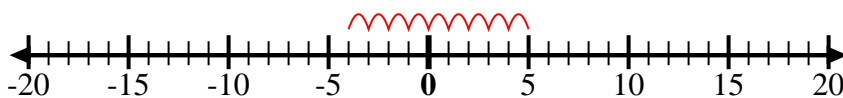
3.  $7 + -6 = 1$

4) Start at -8 and add -2



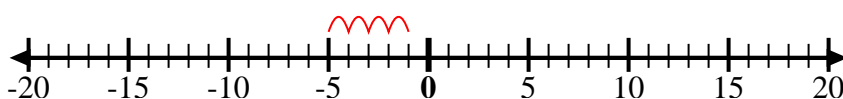
4.  $-8 + -2 = -10$

5) Start at 5 and add -9



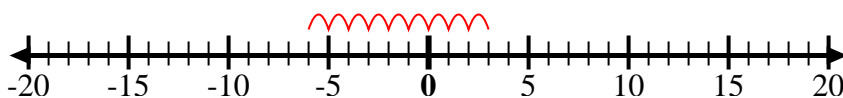
5.  $5 + -9 = -4$

6) Start at -5 and add 4



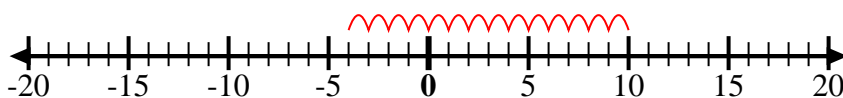
6.  $-5 + 4 = -1$

7) Start at -6 and add 9



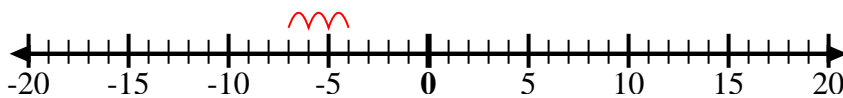
7.  $-6 + 9 = 3$

8) Start at -4 and add 14



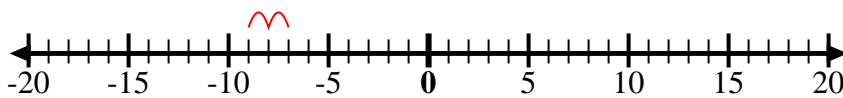
8.  $-4 + 14 = 10$

9) Start at -4 and add -3



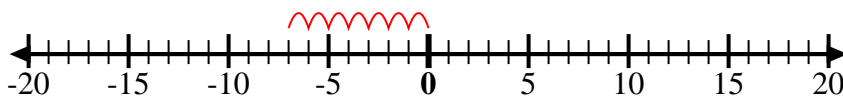
9.  $-4 + -3 = -7$

10) Start at -7 and add -2



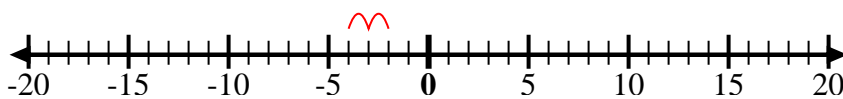
10.  $-7 + -2 = -9$

11) Start at 0 and add -7



11.  $0 + -7 = -7$

12) Start at -2 and add -2



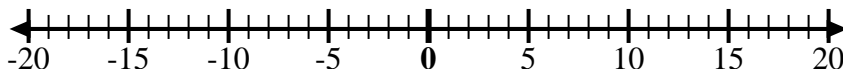
12.  $-2 + -2 = -4$

Answers



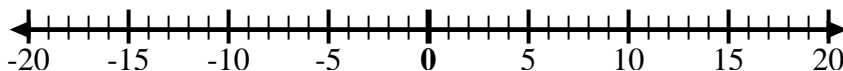
Use the numberlines to show each expression and solve.

Ex) Start at -4 and add -6



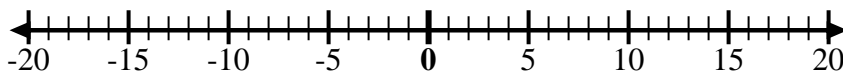
Ex.  $-4 + -6 = -10$

1) Start at 7 and add -7



1. \_\_\_\_\_

2) Start at -4 and add 9



2. \_\_\_\_\_

3) Start at 4 and add -14



3. \_\_\_\_\_

4) Start at -2 and add -7



4. \_\_\_\_\_

5) Start at -3 and add 7



5. \_\_\_\_\_

6) Start at 1 and add -11



6. \_\_\_\_\_

7) Start at -6 and add -3



7. \_\_\_\_\_

8) Start at 10 and add -1



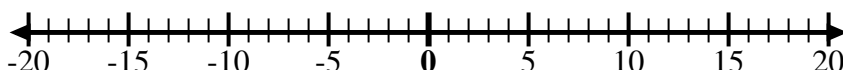
8. \_\_\_\_\_

9) Start at 0 and add -5



9. \_\_\_\_\_

10) Start at 0 and add -10



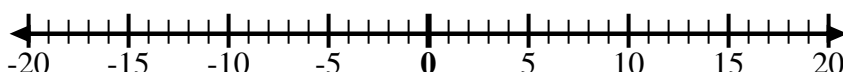
10. \_\_\_\_\_

11) Start at 6 and add -11



11. \_\_\_\_\_

12) Start at -5 and add 10



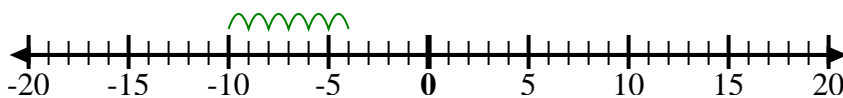
12. \_\_\_\_\_

Answers



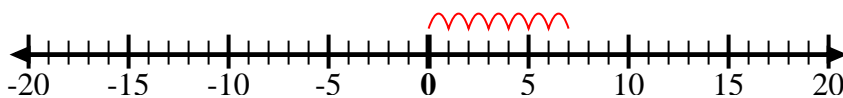
Use the numberlines to show each expression and solve.

Ex) Start at -4 and add -6



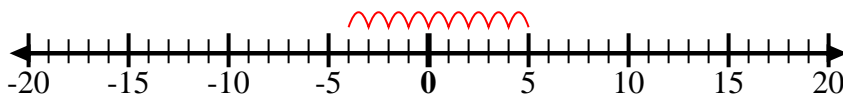
Ex.  $-4 + -6 = -10$

1) Start at 7 and add -7



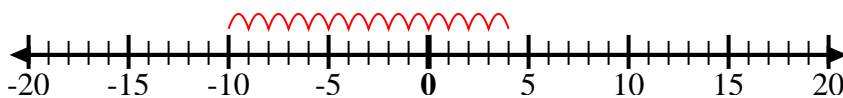
1.  $7 + -7 = 0$

2) Start at -4 and add 9



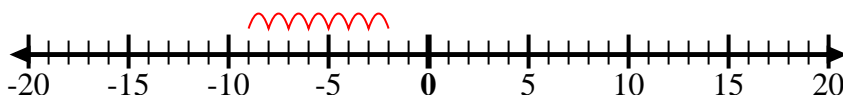
2.  $-4 + 9 = 5$

3) Start at 4 and add -14



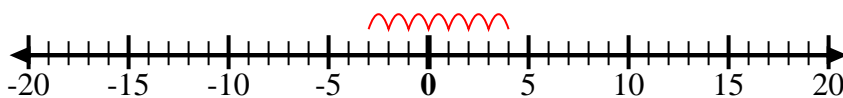
3.  $4 + -14 = -10$

4) Start at -2 and add -7



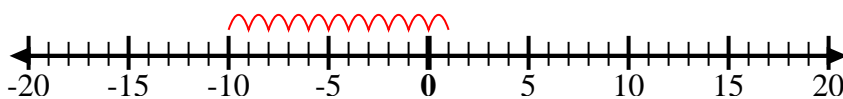
4.  $-2 + -7 = -9$

5) Start at -3 and add 7



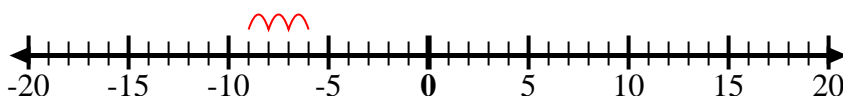
5.  $-3 + 7 = 4$

6) Start at 1 and add -11



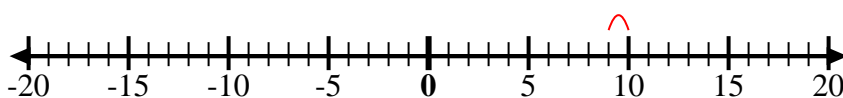
6.  $1 + -11 = -10$

7) Start at -6 and add -3



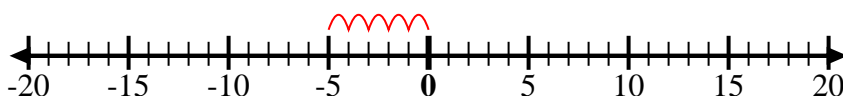
7.  $-6 + -3 = -9$

8) Start at 10 and add -1



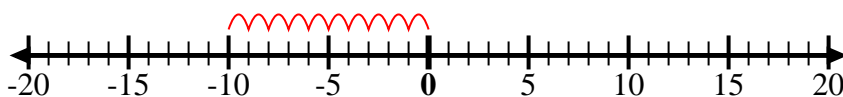
8.  $10 + -1 = 9$

9) Start at 0 and add -5



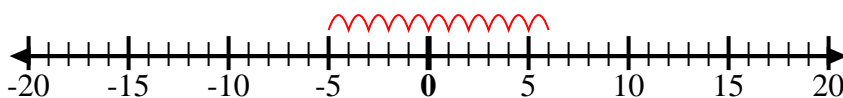
9.  $0 + -5 = -5$

10) Start at 0 and add -10



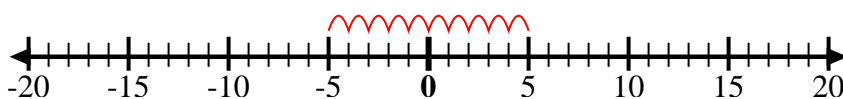
10.  $0 + -10 = -10$

11) Start at 6 and add -11



11.  $6 + -11 = -5$

12) Start at -5 and add 10



12.  $-5 + 10 = 5$

Answers