



Solve each problem.


Answers

1) Which letter best shows -120?



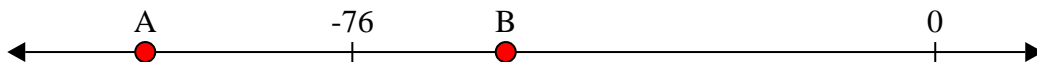
1. _____

2) Which letter best shows -111?



2. _____

3) Which letter best shows -103?




3. _____

4) Which letter best shows -19?




4. _____

5) Which letter best shows -11?



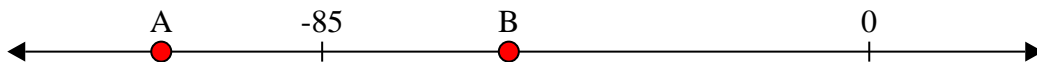
5. _____

6) Which letter best shows -28?




6. _____

7) Which letter best shows -110?




7. _____

8) Which letter best shows -120?




8. _____

9) Which letter best shows -104?



9. _____

10) Which letter best shows -20?

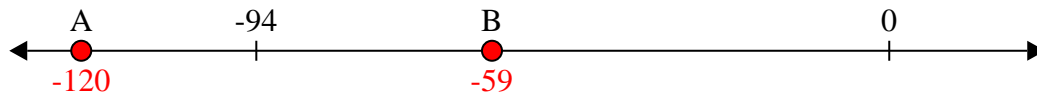


10. _____

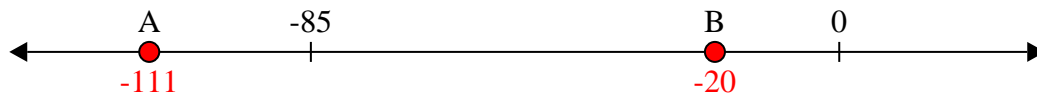


Solve each problem.

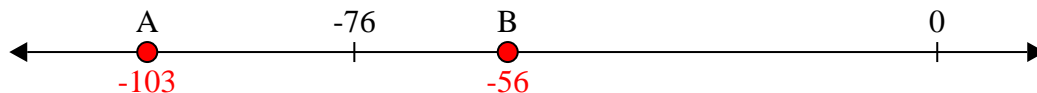
1) Which letter best shows -120?



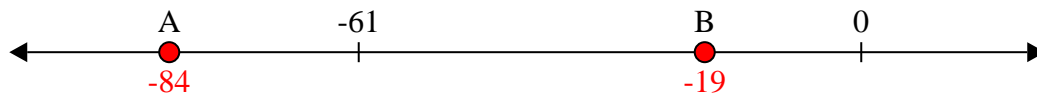
2) Which letter best shows -111?




3) Which letter best shows -103?




4) Which letter best shows -19?



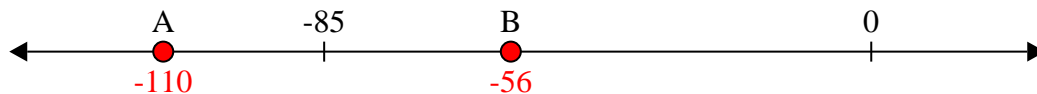
5) Which letter best shows -11?




6) Which letter best shows -28?




7) Which letter best shows -110?



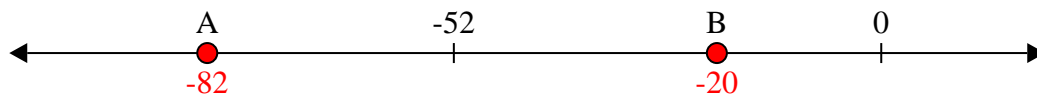
8) Which letter best shows -120?



9) Which letter best shows -104?



10) Which letter best shows -20?



Answers

1. **A**

2. **A**

3. **A**

4. **B**

5. **B**

6. **B**

7. **A**

8. **A**

9. **A**

10. **B**