




Solve each problem.


**Answers**

1) Which letter best shows -98?




1. \_\_\_\_\_

2) Which letter best shows -39?




2. \_\_\_\_\_

3) Which letter best shows -20?



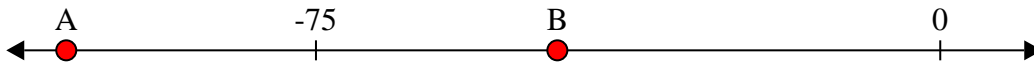
3. \_\_\_\_\_

4) Which letter best shows -11?



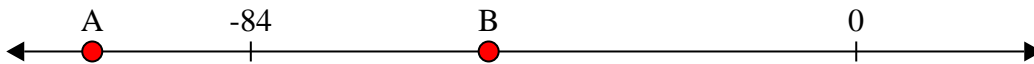
4. \_\_\_\_\_

5) Which letter best shows -105?




5. \_\_\_\_\_

6) Which letter best shows -106?




6. \_\_\_\_\_

7) Which letter best shows -12?




7. \_\_\_\_\_

8) Which letter best shows -111?




8. \_\_\_\_\_

9) Which letter best shows -12?



9. \_\_\_\_\_

10) Which letter best shows -28?




10. \_\_\_\_\_

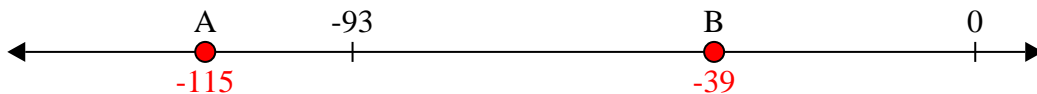


Solve each problem.

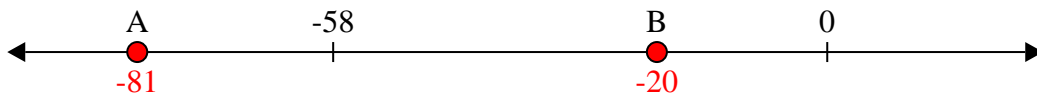
1) Which letter best shows -98?




2) Which letter best shows -39?



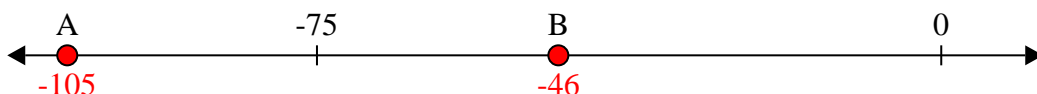
3) Which letter best shows -20?



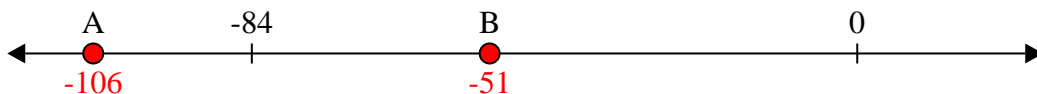
4) Which letter best shows -11?




5) Which letter best shows -105?




6) Which letter best shows -106?




7) Which letter best shows -12?




8) Which letter best shows -111?



9) Which letter best shows -12?



10) Which letter best shows -28?



**Answers**

1. **A**

2. **B**

3. **B**

4. **B**

5. **A**

6. **A**

7. **B**

8. **A**

9. **B**

10. **B**