




Solve each problem.


**Answers**

1) Which letter best shows -27?




1. \_\_\_\_\_

2) Which letter best shows -16?




2. \_\_\_\_\_

3) Which letter best shows -18?



3. \_\_\_\_\_

4) Which letter best shows -15?




4. \_\_\_\_\_

5) Which letter best shows -91?




5. \_\_\_\_\_

6) Which letter best shows -75?




6. \_\_\_\_\_

7) Which letter best shows -81?



7. \_\_\_\_\_

8) Which letter best shows -10?




8. \_\_\_\_\_

9) Which letter best shows -59?



9. \_\_\_\_\_

10) Which letter best shows -87?




10. \_\_\_\_\_

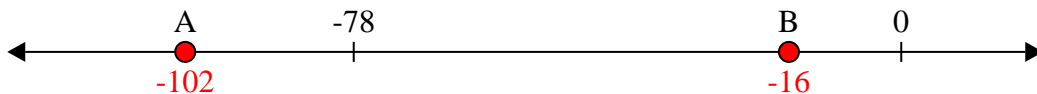


Solve each problem.

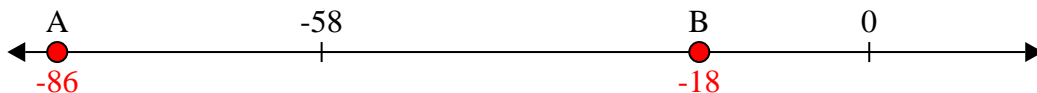
1) Which letter best shows -27?



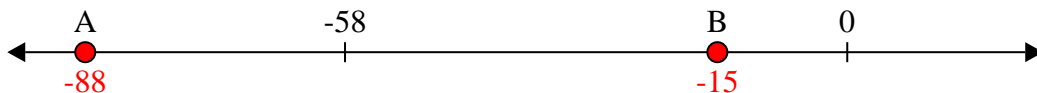
2) Which letter best shows -16?




3) Which letter best shows -18?



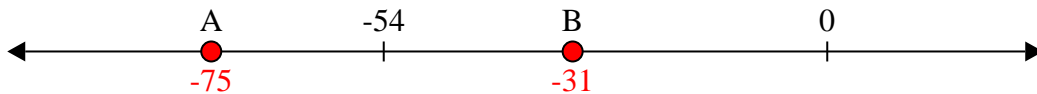
4) Which letter best shows -15?




5) Which letter best shows -91?




6) Which letter best shows -75?



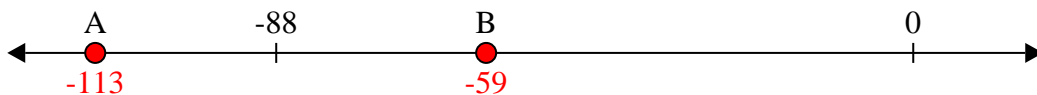
7) Which letter best shows -81?



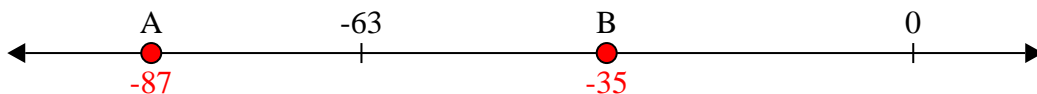
8) Which letter best shows -10?



9) Which letter best shows -59?



10) Which letter best shows -87?



**Answers**

1. **B**

2. **B**

3. **B**

4. **B**

5. **A**

6. **A**

7. **A**

8. **B**

9. **B**

10. **A**