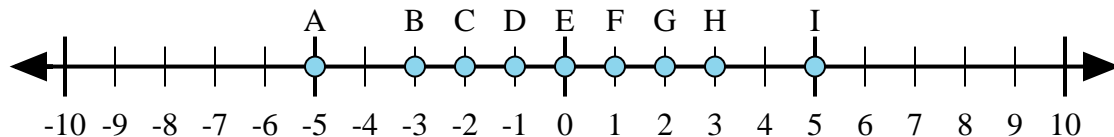




Determine which letter in the numberline best represents the answer to each problem.

Answers



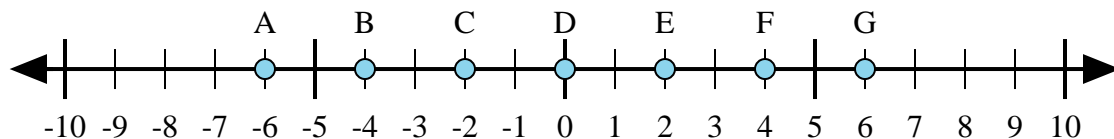
1)  $2 + 3 =$

2)  $2 + (-3) =$

3)  $3 + (-2) =$

4)  $(-2) + 3 =$

5)  $(-3) + 2 =$



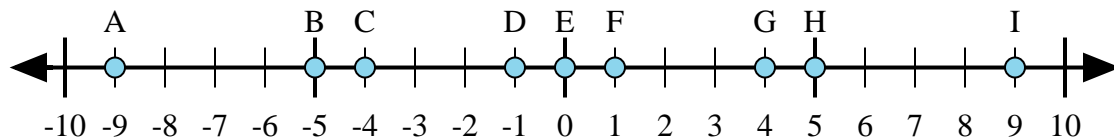
6)  $4 + (-2) =$

7)  $2 + 4 =$

8)  $(-2) + 4 =$

9)  $(-4) + 2 =$

10)  $(-2) + (-4) =$



11)  $5 + (-4) =$

12)  $4 + (-5) =$

13)  $4 + 5 =$

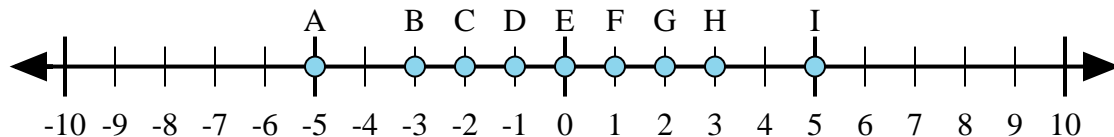
14)  $(-5) + 4 =$

15)  $(-4) + 5 =$

1. \_\_\_\_\_
2. \_\_\_\_\_
3. \_\_\_\_\_
4. \_\_\_\_\_
5. \_\_\_\_\_
6. \_\_\_\_\_
7. \_\_\_\_\_
8. \_\_\_\_\_
9. \_\_\_\_\_
10. \_\_\_\_\_
11. \_\_\_\_\_
12. \_\_\_\_\_
13. \_\_\_\_\_
14. \_\_\_\_\_
15. \_\_\_\_\_



Determine which letter in the numberline best represents the answer to each problem.



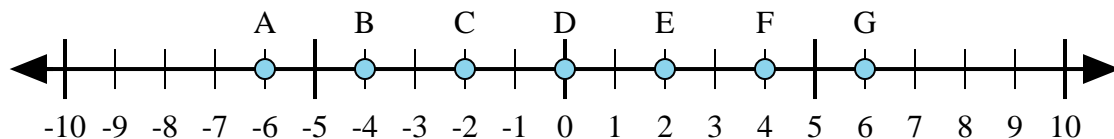
1)  $2 + 3 =$

2)  $2 + (-3) =$

3)  $3 + (-2) =$

4)  $(-2) + 3 =$

5)  $(-3) + 2 =$



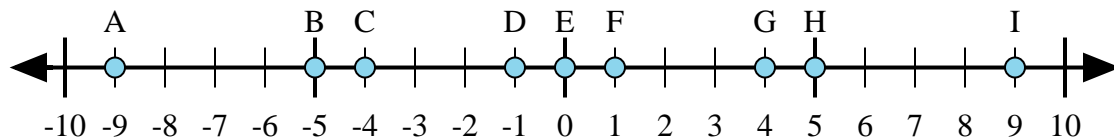
6)  $4 + (-2) =$

7)  $2 + 4 =$

8)  $(-2) + 4 =$

9)  $(-4) + 2 =$

10)  $(-2) + (-4) =$



11)  $5 + (-4) =$

12)  $4 + (-5) =$

13)  $4 + 5 =$

14)  $(-5) + 4 =$

15)  $(-4) + 5 =$

Answers1. I2. D3. F4. F5. D6. E7. G8. E9. C10. A11. F12. D13. I14. D15. F