



Express each set as a multiplication problem.

Answers

Ex)

Ex. $7 \times 9 = 63$

1)

1. _____

2. _____

2)

3. _____

4. _____

3)

5. _____

6. _____

4)

7. _____

8. _____

5)


6)

7)

8)

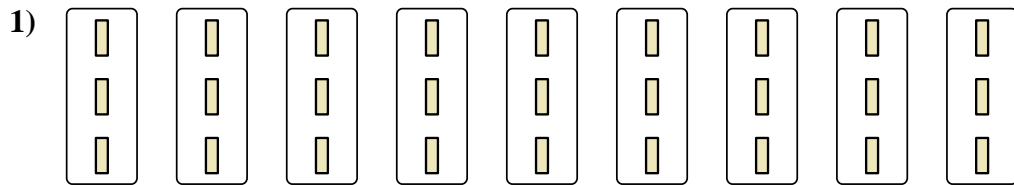


Express each set as a multiplication problem.




Answers

Ex. 7×9=63




1. 9×3=27

2. 6×2=12



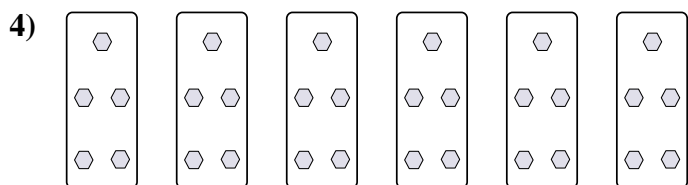
3. 9×4=36

4. 6×5=30




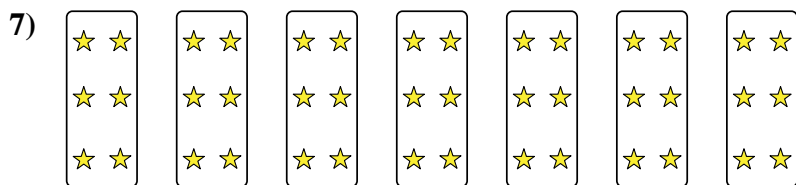
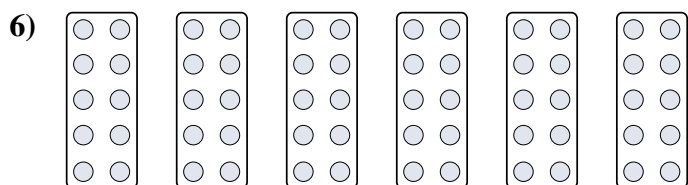
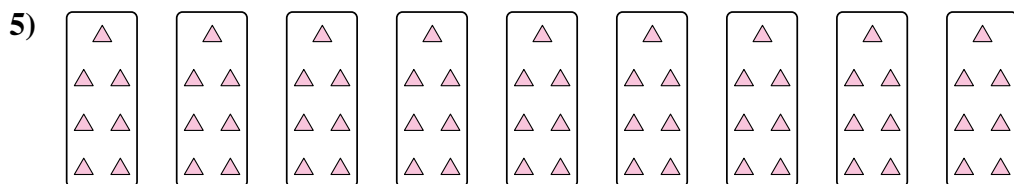
5. 9×7=63

6. 6×10=60




7. 7×6=42

8. 4×10=40



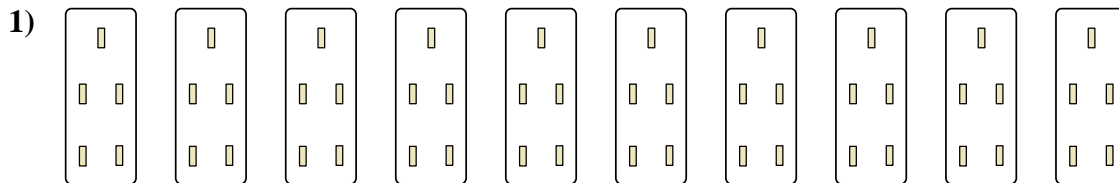


Express each set as a multiplication problem.



Answers

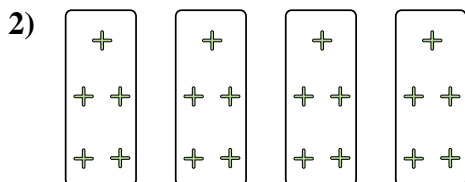
Ex. $5 \times 8 = 40$



1. _____

2. _____


3. _____



4. _____

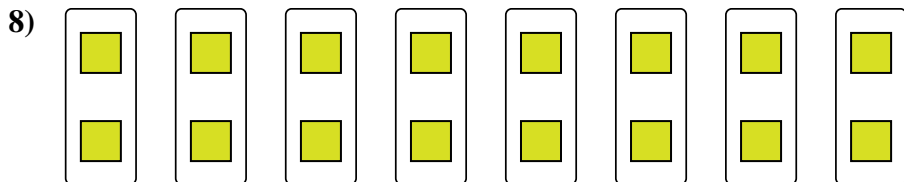
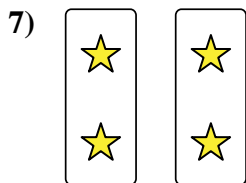
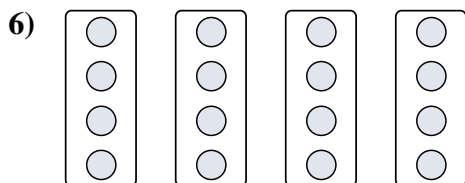
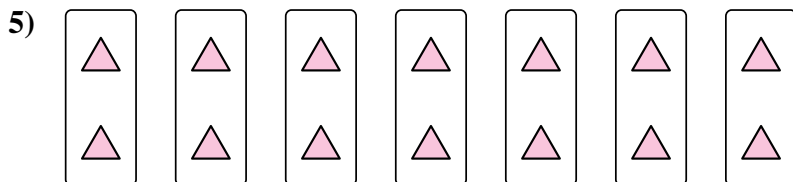
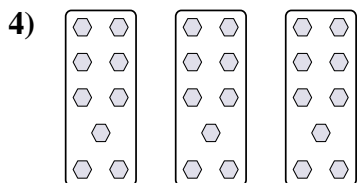
5. _____

6. _____




7. _____

8. _____



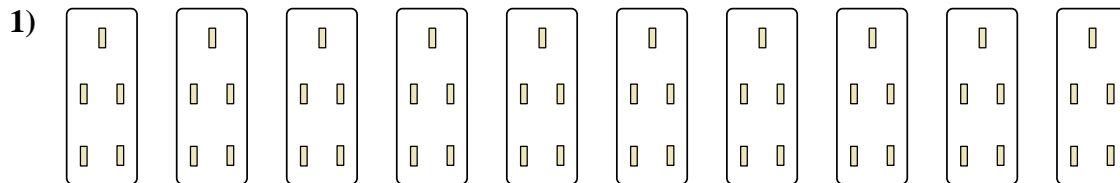


Express each set as a multiplication problem.

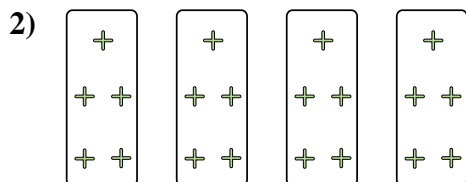


Answers

Ex. $5 \times 8 = 40$




1. $10 \times 5 = 50$



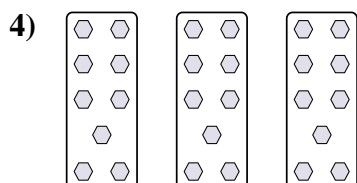
2. $4 \times 5 = 20$

3. $2 \times 8 = 16$



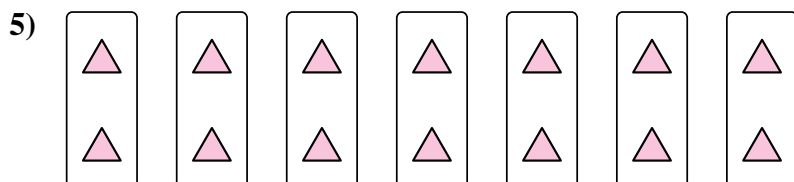
4. $3 \times 9 = 27$

5. $7 \times 2 = 14$

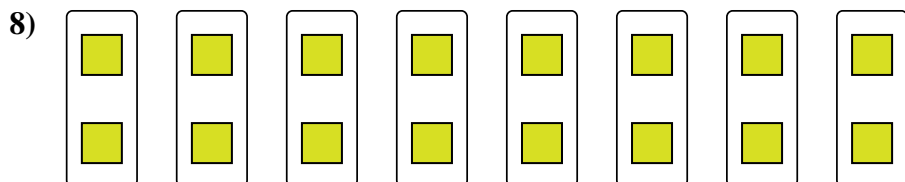
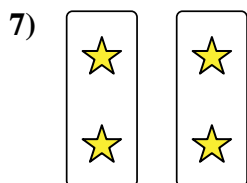
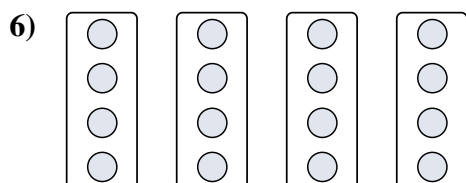


6. $4 \times 4 = 16$

7. $2 \times 2 = 4$



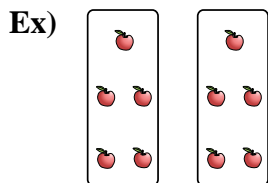
8. $8 \times 2 = 16$



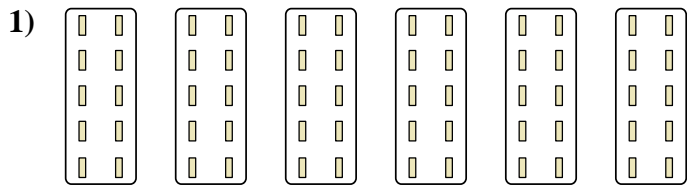


Express each set as a multiplication problem.

Answers



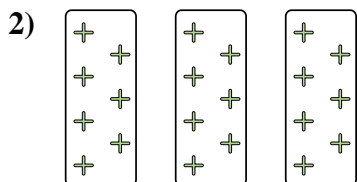
Ex. **2x5=10**



1. _____


2. _____

3. _____



4. _____



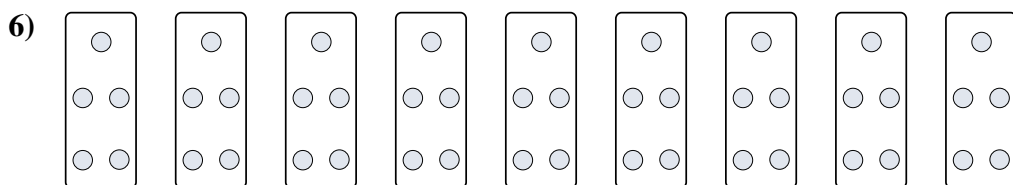
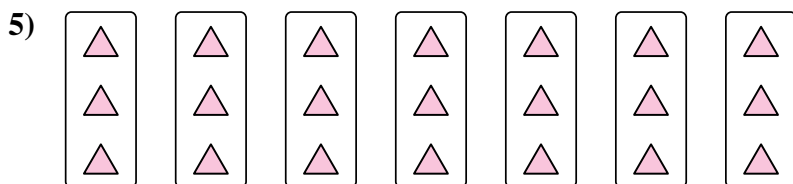
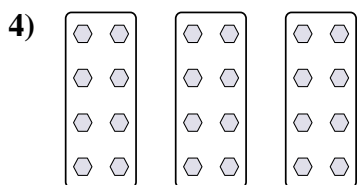
5. _____



6. _____

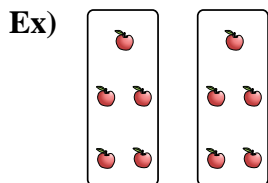
7. _____

8. _____

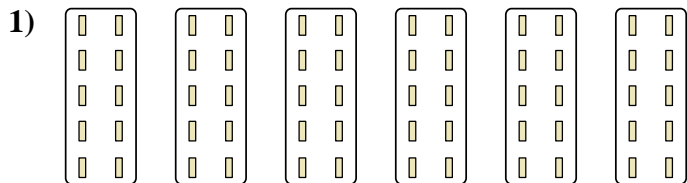




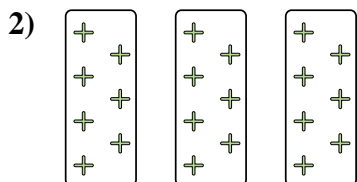
Express each set as a multiplication problem.



Ex. $2 \times 5 = 10$




1. $6 \times 10 = 60$



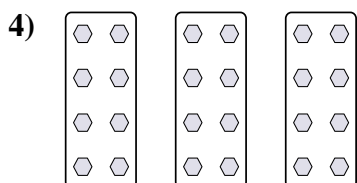
2. $3 \times 7 = 21$

3. $10 \times 3 = 30$



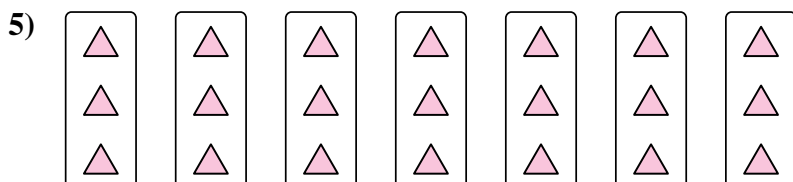
4. $3 \times 8 = 24$

5. $7 \times 3 = 21$


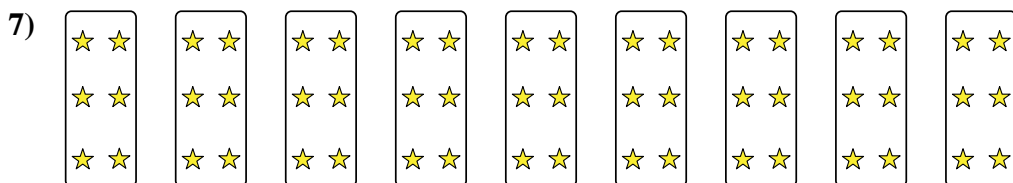
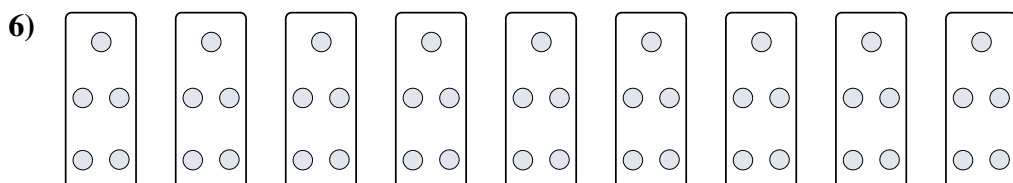


6. $9 \times 5 = 45$

7. $9 \times 6 = 54$



8. $4 \times 10 = 40$





Express each set as a multiplication problem.

Answers

Ex)

Ex. $8 \times 5 = 40$

1)

1. _____

2. _____

2)

3. _____

4. _____

5. _____

3)

6. _____

7. _____

8. _____

4)

5)


6)

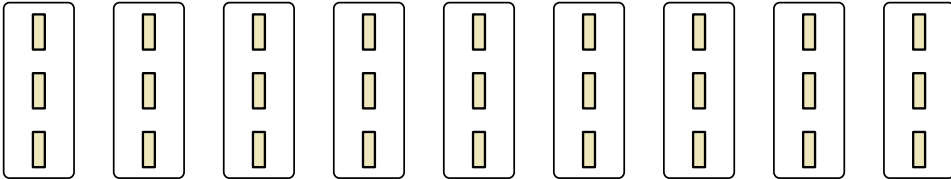
7)

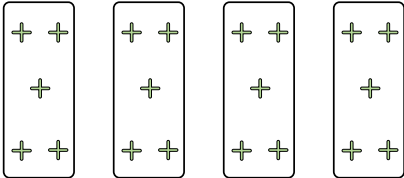
8)




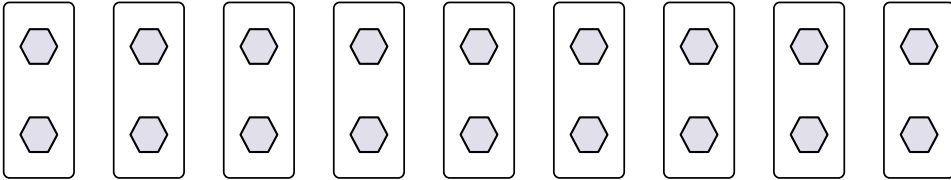
Express each set as a multiplication problem.

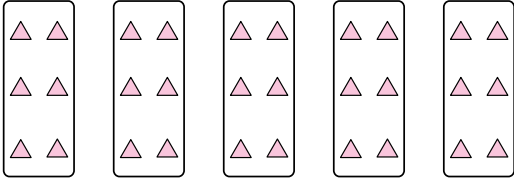
Ex) 

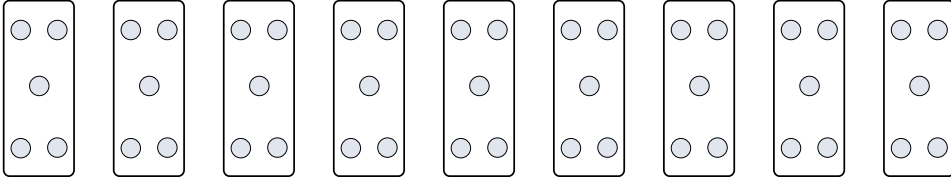
1) 


2) 


3) 

4) 

5) 

6) 

7) 

8) 

Answers

Ex. $8 \times 5 = 40$

1. $9 \times 3 = 27$

2. $4 \times 5 = 20$

3. $5 \times 8 = 40$

4. $10 \times 2 = 20$

5. $5 \times 6 = 30$


6. $9 \times 5 = 45$

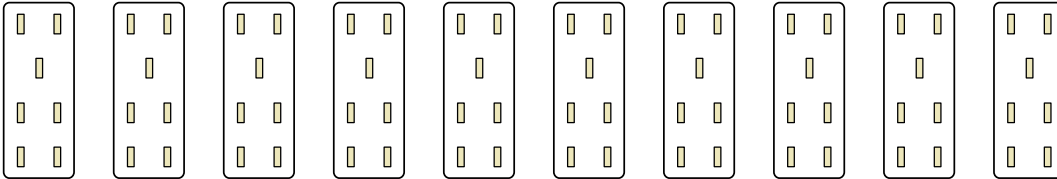
7. $8 \times 2 = 16$

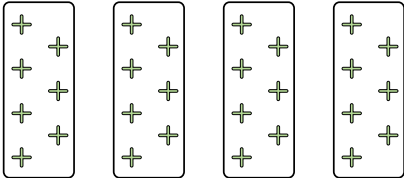
8. $7 \times 8 = 56$




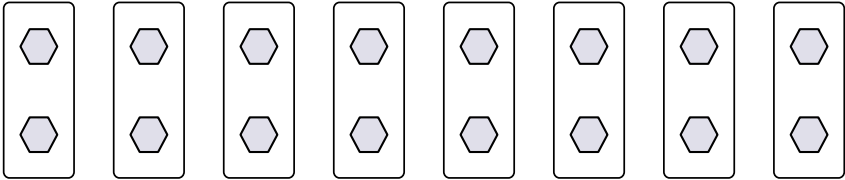
Express each set as a multiplication problem.

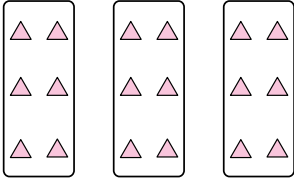
Ex) 

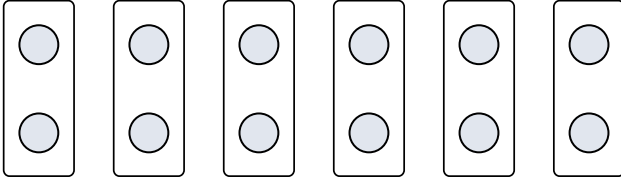
1) 

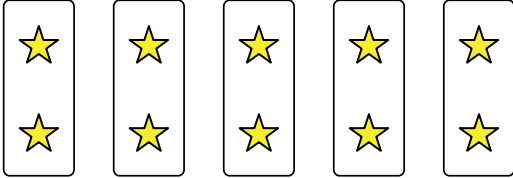
2) 


3) 

4) 

5) 

6) 

7) 

8) 

Answers

Ex. 10×10=100

1. _____

2. _____

3. _____

4. _____

5. _____

6. _____

7. _____

8. _____



Express each set as a multiplication problem.

Ex)

1)

2)

3)

4)

5)

6)

7)

8)

Answers

- Ex. $10 \times 10 = 100$
1. $10 \times 7 = 70$
2. $4 \times 7 = 28$
3. $10 \times 6 = 60$
4. $8 \times 2 = 16$
5. $3 \times 6 = 18$
6. $6 \times 2 = 12$
7. $5 \times 2 = 10$
8. $5 \times 7 = 35$



Express each set as a multiplication problem.

Answers

Ex)

Ex. $9 \times 6 = 54$

1)

1. _____

2. _____

2)

3. _____

4. _____

3)

5. _____

6. _____

7. _____

8. _____

4)

5)


6)

7)

8)

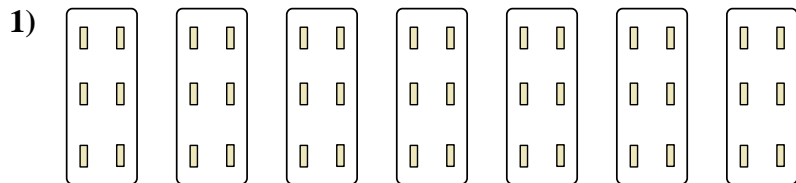


Express each set as a multiplication problem.



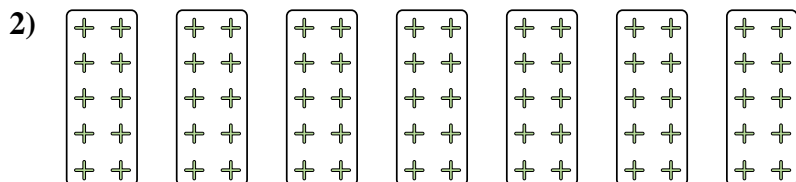
Answers

Ex. 9×6=54




1. 7×6=42

2. 7×10=70



3. 8×2=16

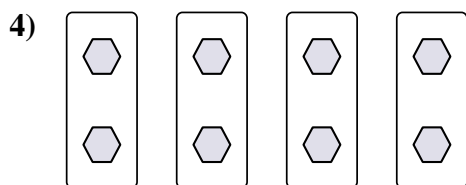
4. 4×2=8





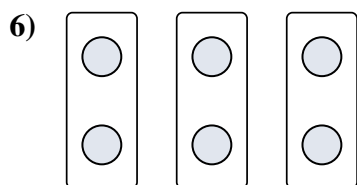
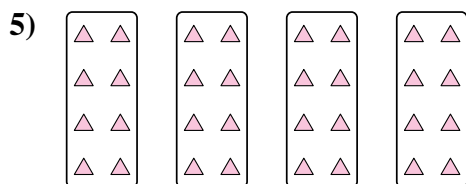
5. 4×8=32

6. 3×2=6

7. 10×7=70



8. 4×10=40





Express each set as a multiplication problem.

Answers

Ex)

Ex. $7 \times 7 = 49$

1)

1. _____
2. _____

2)

3. _____
4. _____

3)

5. _____
6. _____

4)

7. _____
8. _____

5)

6)

7)

8)



Express each set as a multiplication problem.

Ex)

Answers

Ex. 7×7=49

1)

1. 8×6=48

2. 6×8=48

2)

3. 5×2=10

4. 10×8=80

3)

5. 8×2=16

6. 9×10=90

4)

7. 3×8=24

8. 8×9=72

5)

6)

7)

8)



Express each set as a multiplication problem.

Answers

Ex)

Ex. $6 \times 7 = 42$

1)

1. _____
2. _____

2)

3. _____
4. _____

3)

5. _____
6. _____

4)

7. _____
8. _____

5)

6)

7)

8)



Express each set as a multiplication problem.

Ex)

Answers

Ex. 6×7=42

1)

1. 7×10=70

2. 3×4=12

2)

3. 3×7=21

4. 5×4=20

3)

5. 7×4=28

6. 4×9=36

4)

7. 4×10=40

8. 2×8=16

5)

6)

7)

8)



Express each set as a multiplication problem.

Answers

Ex)

Ex. $9 \times 5 = 45$

1)

1. _____

2. _____

2)

3. _____

4. _____

3)

5. _____

6. _____

4)

7. _____

8. _____

5)

6)

7)

8)



Express each set as a multiplication problem.

Ex)

Answers

Ex. 9×5=45

1)

1. 8×2=16

2. 6×9=54

2)

3. 3×7=21

4. 2×9=18

3)

5. 3×4=12

6. 8×10=80

4)

7. 10×9=90

8. 2×10=20

5)


6)

7)

8)

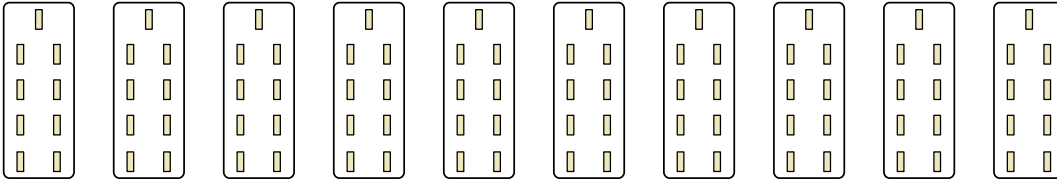


Express each set as a multiplication problem.

Ex) 

Answers

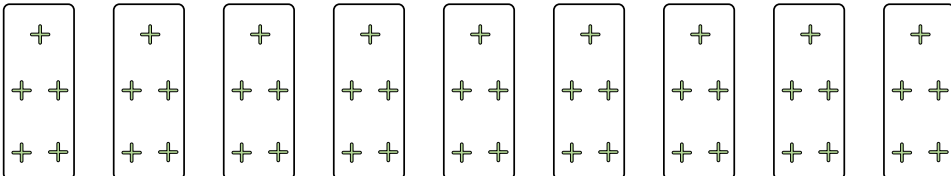
Ex. $6 \times 3 = 18$

1) 

1. _____

2. _____


3. _____

2) 

4. _____

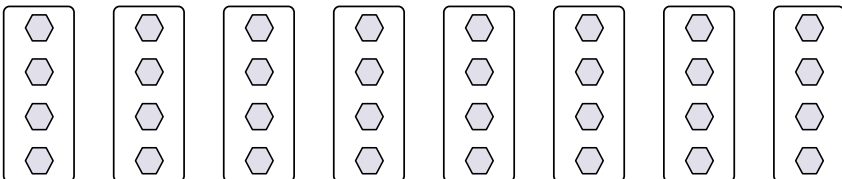
5. _____

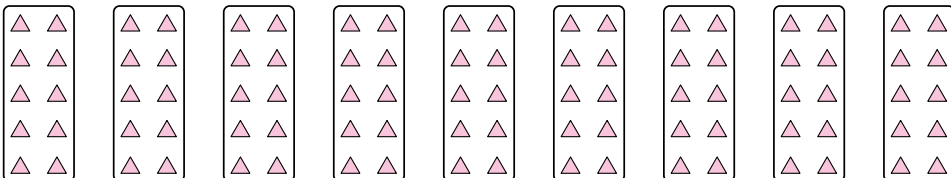
6. _____

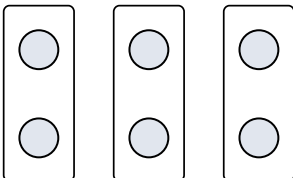
3) 


7. _____

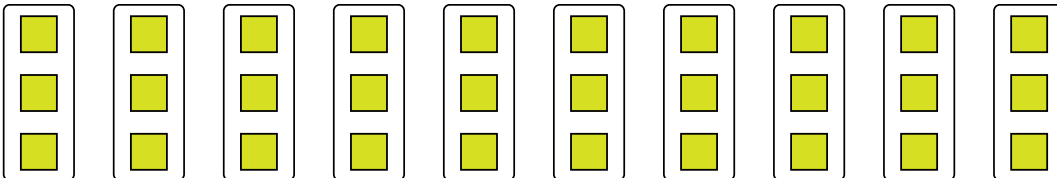
8. _____

4) 

5) 

6) 

7) 

8) 



Express each set as a multiplication problem.

Ex)

Ex. $6 \times 3 = 18$

1)

1. $10 \times 9 = 90$

2. $9 \times 5 = 45$

2)

3. $5 \times 2 = 10$

4. $8 \times 4 = 32$

3)

5. $9 \times 10 = 90$

6. $3 \times 2 = 6$

4)

7. $4 \times 9 = 36$

8. $10 \times 3 = 30$

5)

6)

7)

8)

Answers