



Express each set as a multiplication problem.

Answers

Ex)

Ex. $6 \times 7 = 42$

1)

1. _____
2. _____

2)

3. _____
4. _____

3)

5. _____
6. _____

4)

7. _____
8. _____

5)


6)

7)

8)

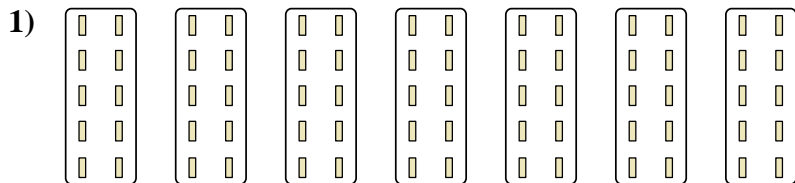


Express each set as a multiplication problem.



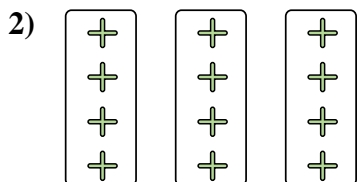
Answers

Ex. 6×7=42




1. 7×10=70

2. 3×4=12



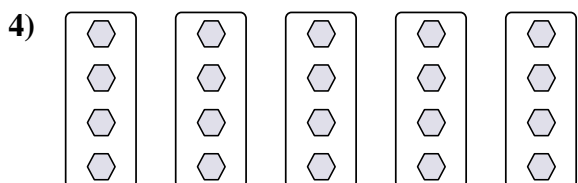
3. 3×7=21

4. 5×4=20



5. 7×4=28

6. 4×9=36



7. 4×10=40

8. 2×8=16

