


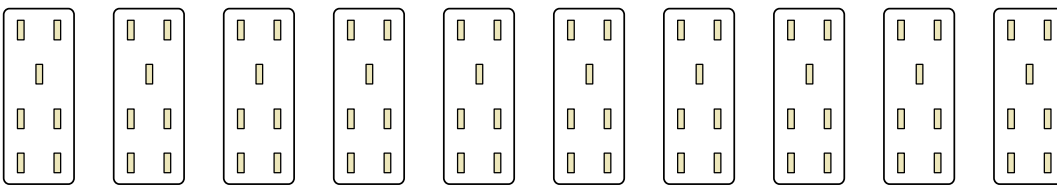


Express each set as a multiplication problem.

Answers

Ex) 

Ex. $10 \times 10 = 100$

1) 

1. _____


2. _____

3. _____

2) 

4. _____

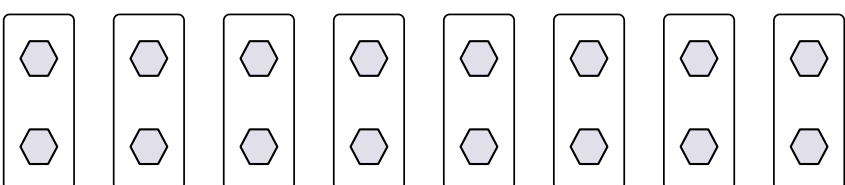
5. _____

3) 

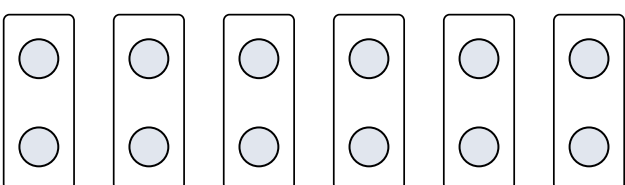
6. _____


7. _____

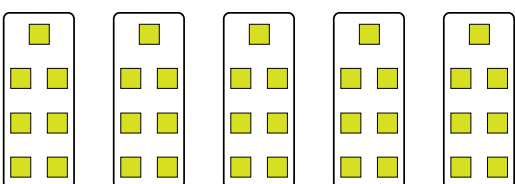
8. _____

4) 

5) 

6) 

7) 

8) 



Express each set as a multiplication problem.

Ex)

1)

2)

3)

4)

5)

6)

7)

8)

Answers

- Ex. $10 \times 10 = 100$
1. $10 \times 7 = 70$
2. $4 \times 7 = 28$
3. $10 \times 6 = 60$
4. $8 \times 2 = 16$
5. $3 \times 6 = 18$
6. $6 \times 2 = 12$
7. $5 \times 2 = 10$
8. $5 \times 7 = 35$