



Express each set as a multiplication problem.

Ex)

**Answers**

Ex.  $5 \times 8 = 40$

1)

1. \_\_\_\_\_

2. \_\_\_\_\_

3. \_\_\_\_\_

2)

4. \_\_\_\_\_

5. \_\_\_\_\_

6. \_\_\_\_\_

3)

7. \_\_\_\_\_

8. \_\_\_\_\_

4)

5)


6)

7)

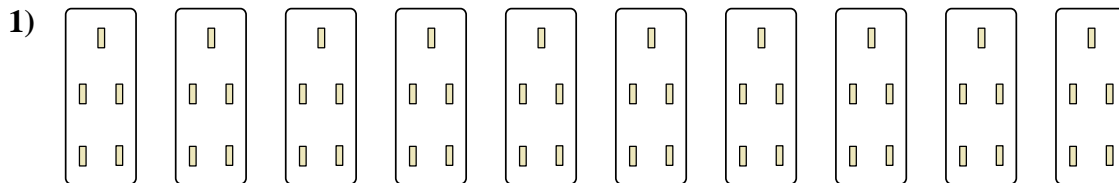
8)



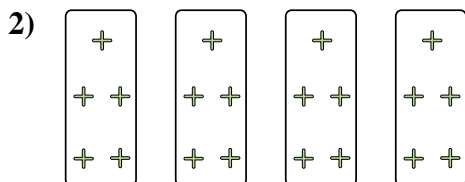
Express each set as a multiplication problem.



Ex.  $5 \times 8 = 40$




1.  $10 \times 5 = 50$



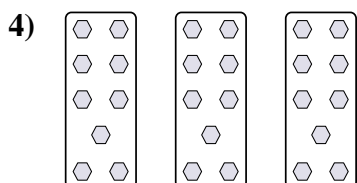
2.  $4 \times 5 = 20$

3.  $2 \times 8 = 16$



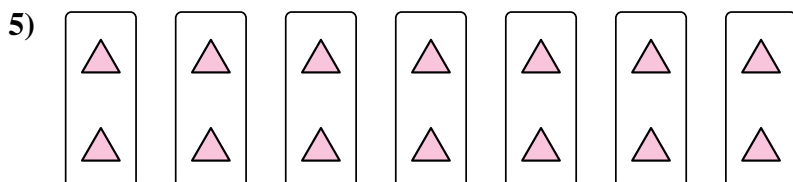
4.  $3 \times 9 = 27$

5.  $7 \times 2 = 14$

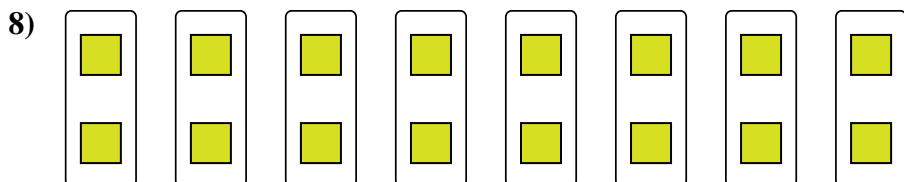
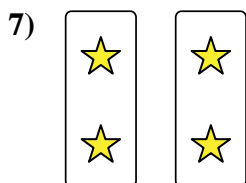
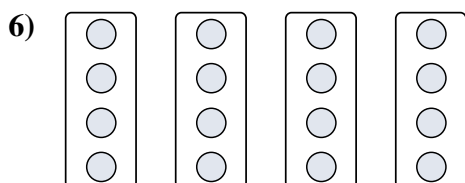


6.  $4 \times 4 = 16$

7.  $2 \times 2 = 4$



8.  $8 \times 2 = 16$



Answers