



Partition the shape as described and then count to find the number of boxes.

Answers

Rows go left to right.

Columns go up and down.

This has 4 rows and 5 columns.
There are 20 boxes total.



1. _____
2. _____
3. _____
4. _____
5. _____
6. _____
7. _____
8. _____
9. _____

1) 4 rows
2 columns



2) 2 rows
2 columns



3) 5 rows
3 columns



4) 5 rows
4 columns



5) 3 rows
2 columns



6) 4 rows
3 columns



7) 5 rows
2 columns



8) 4 rows
4 columns



9) 3 rows
3 columns





Partition the shape as described and then count to find the number of boxes.

Rows go left to right.

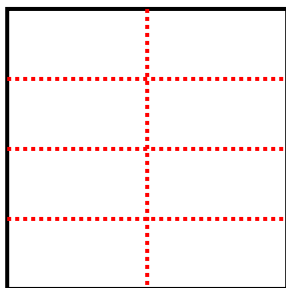
Columns go up and down.

This has 4 rows and 5 columns.
There are 20 boxes total.

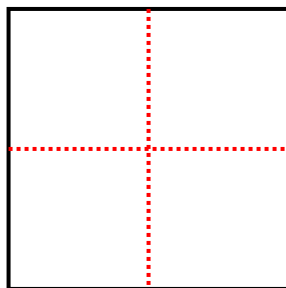


Answers

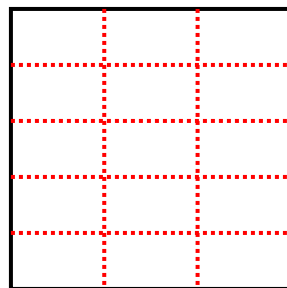
1) 4 rows
2 columns



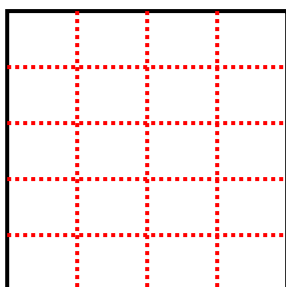
2) 2 rows
2 columns



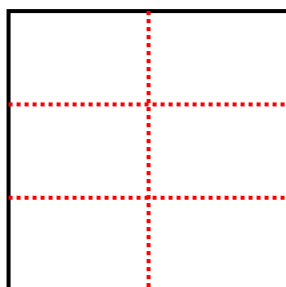
3) 5 rows
3 columns



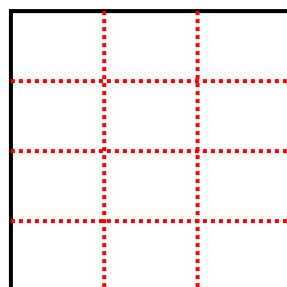
4) 5 rows
4 columns



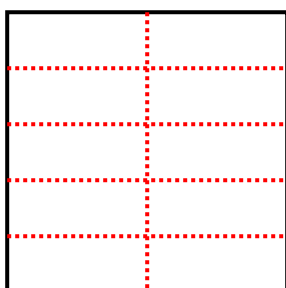
5) 3 rows
2 columns




6) 4 rows
3 columns



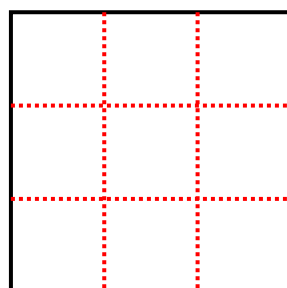
7) 5 rows
2 columns



8) 4 rows
4 columns



9) 3 rows
3 columns



- 1. 8
- 2. 4
- 3. 15
- 4. 20
- 5. 6
- 6. 12
- 7. 10
- 8. 16
- 9. 9