

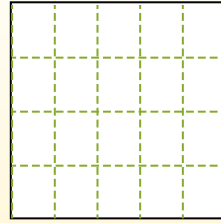
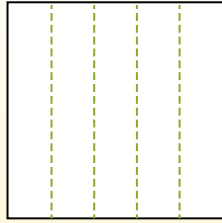
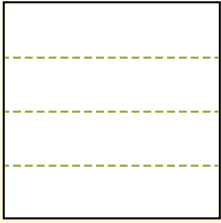


Partition the shape as described and then count to find the number of boxes.


Rows go left to right.

Columns go up and down.


This has 4 rows and 5 columns.
There are 20 boxes total.




1) 3 rows
3 columns




2) 2 rows
3 columns




3) 4 rows
2 columns




4) 4 rows
4 columns




5) 2 rows
5 columns




6) 2 rows
4 columns




7) 4 rows
3 columns



8) 5 rows
4 columns



9) 5 rows
3 columns



Answers

- 1. _____
- 2. _____
- 3. _____
- 4. _____
- 5. _____
- 6. _____
- 7. _____
- 8. _____
- 9. _____

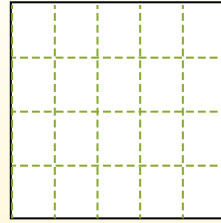
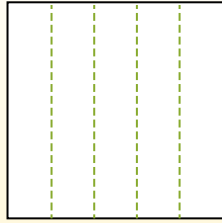
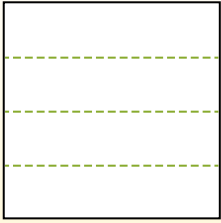


Partition the shape as described and then count to find the number of boxes.

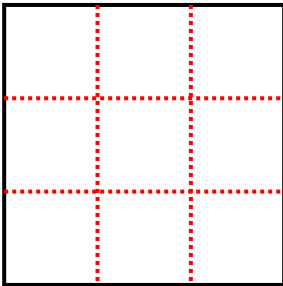
Rows go left to right.

Columns go up and down.

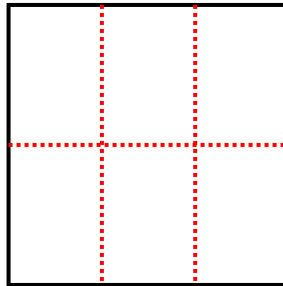
This has 4 rows and 5 columns.
There are 20 boxes total.



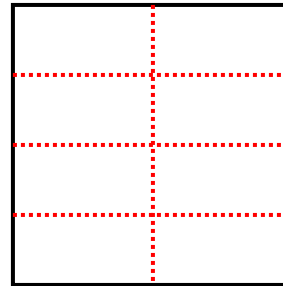
1) 3 rows
3 columns




2) 2 rows
3 columns



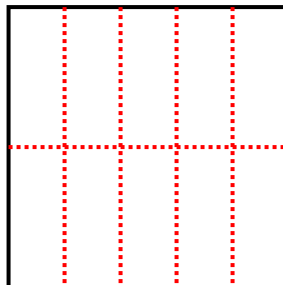
3) 4 rows
2 columns



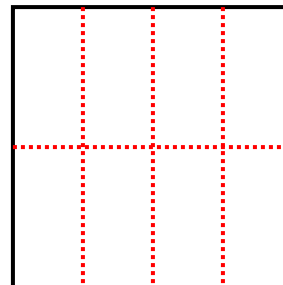
4) 4 rows
4 columns



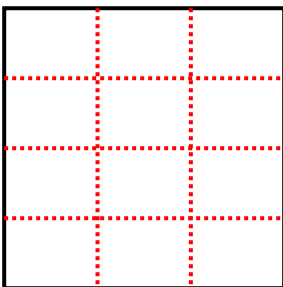
5) 2 rows
5 columns



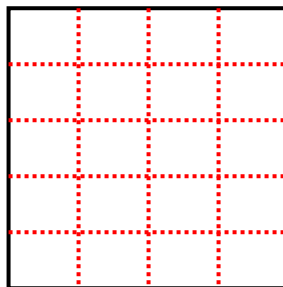
6) 2 rows
4 columns



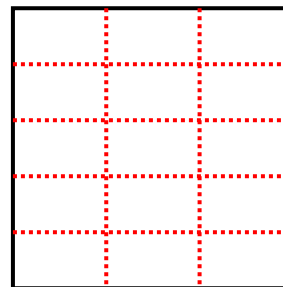
7) 4 rows
3 columns



8) 5 rows
4 columns



9) 5 rows
3 columns



Answers

1. 9

2. 6

3. 8

4. 16

5. 10

6. 8

7. 12

8. 20

9. 15