



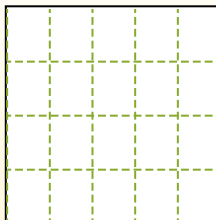
Partition the shape as described and then count to find the number of boxes.

**Answers**

Rows go left to right.

Columns go up and down.

This has 4 rows and 5 columns.  
There are 20 boxes total.



1. \_\_\_\_\_
2. \_\_\_\_\_
3. \_\_\_\_\_
4. \_\_\_\_\_
5. \_\_\_\_\_
6. \_\_\_\_\_
7. \_\_\_\_\_
8. \_\_\_\_\_
9. \_\_\_\_\_


1) 3 rows  
5 columns



2) 3 rows  
3 columns



3) 2 rows  
5 columns




4) 3 rows  
2 columns



5) 4 rows  
3 columns



6) 4 rows  
4 columns




7) 4 rows  
2 columns



8) 3 rows  
4 columns



9) 5 rows  
5 columns



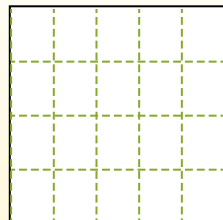


Partition the shape as described and then count to find the number of boxes.

Rows go left to right.

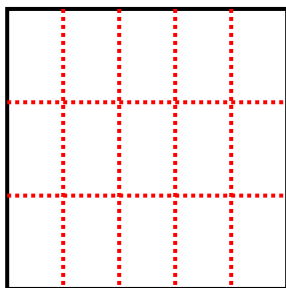
Columns go up and down.

This has 4 rows and 5 columns.  
There are 20 boxes total.

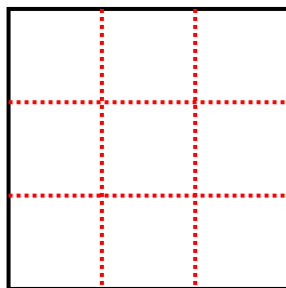


Answers

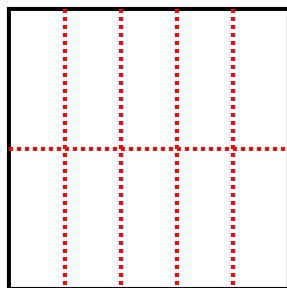
1) 3 rows  
5 columns



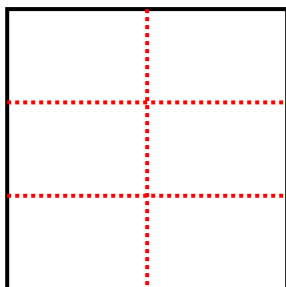
2) 3 rows  
3 columns



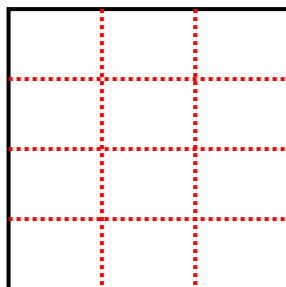
3) 2 rows  
5 columns




4) 3 rows  
2 columns



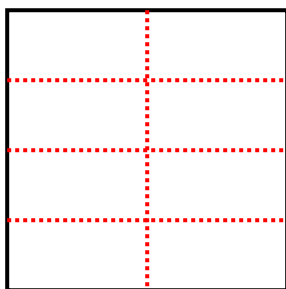
5) 4 rows  
3 columns



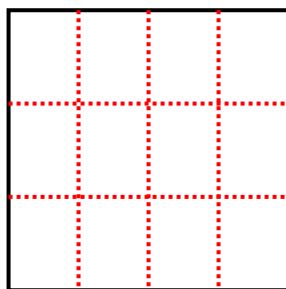
6) 4 rows  
4 columns



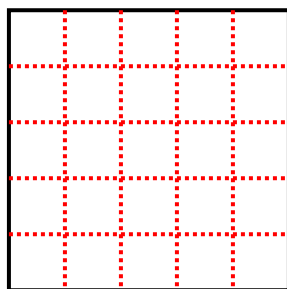
7) 4 rows  
2 columns



8) 3 rows  
4 columns



9) 5 rows  
5 columns



- 1. 15
- 2. 9
- 3. 10
- 4. 6
- 5. 12
- 6. 16
- 7. 8
- 8. 12
- 9. 25