




Use the array provided to solve each problem.


1) $30 \times 37 =$




2) $20 \times 31 =$




3) $20 \times 28 =$




4) $20 \times 26 =$



5) $24 \times 20 =$



6) $25 \times 20 =$



Answers

1. _____

2. _____

3. _____

4. _____

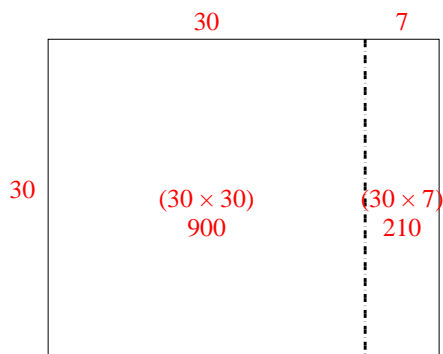
5. _____

6. _____

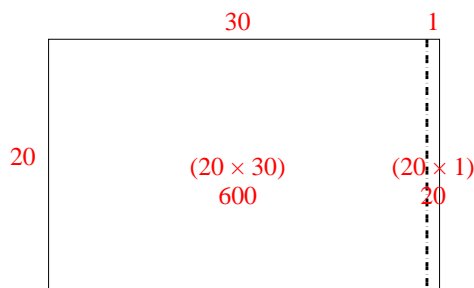


Use the array provided to solve each problem.

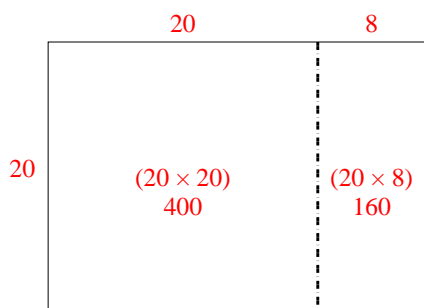
1) $30 \times 37 =$



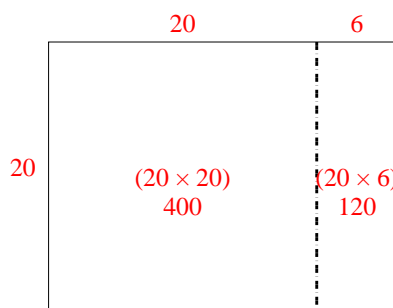
2) $20 \times 31 =$



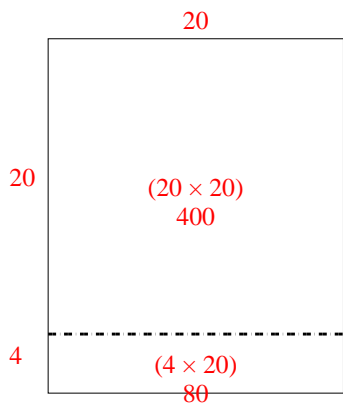
3) $20 \times 28 =$



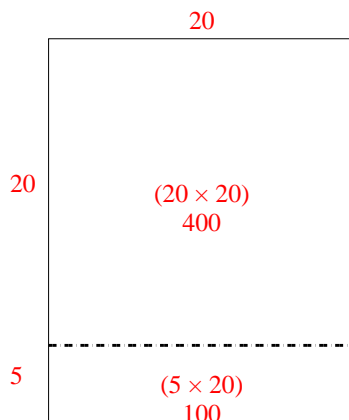
4) $20 \times 26 =$



5) $24 \times 20 =$



6) $25 \times 20 =$



Answers

1. 1,110

2. 620

3. 560

4. 520

5. 480

6. 500