





Use the array provided to solve each problem.

Answers

1)  $43 \times 30 =$



2)  $32 \times 30 =$



1. \_\_\_\_\_

2. \_\_\_\_\_


3. \_\_\_\_\_

4. \_\_\_\_\_


5. \_\_\_\_\_

6. \_\_\_\_\_


3)  $20 \times 23 =$




4)  $25 \times 20 =$



5)  $20 \times 24 =$



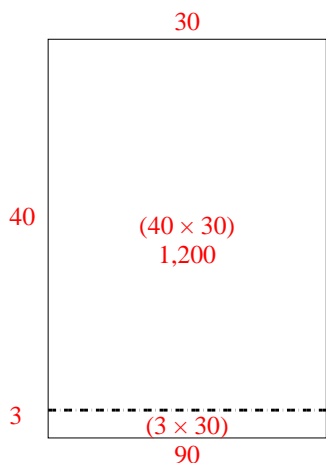
6)  $22 \times 20 =$



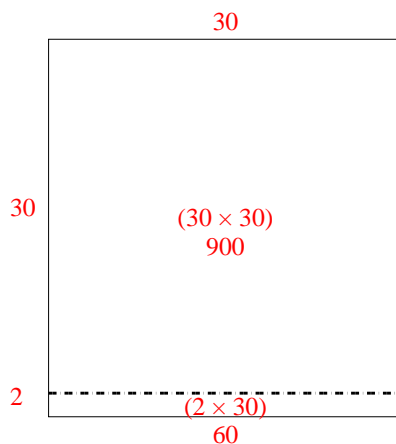


Use the array provided to solve each problem.

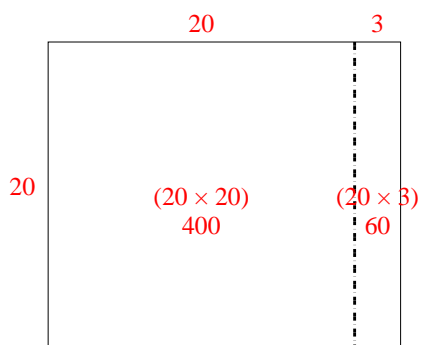
1)  $43 \times 30 =$



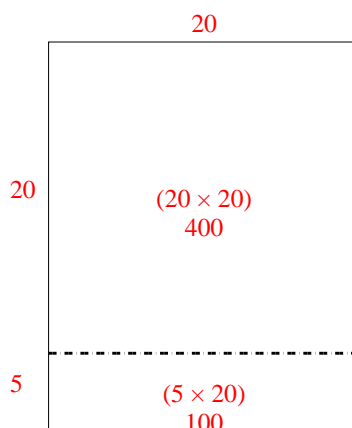
2)  $32 \times 30 =$



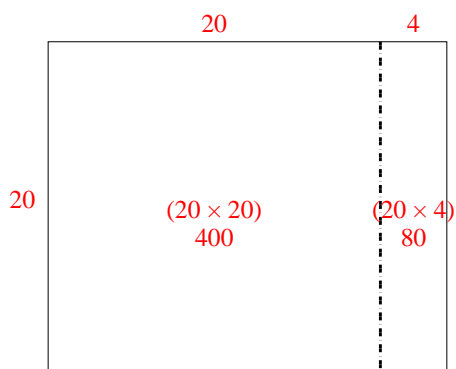
3)  $20 \times 23 =$



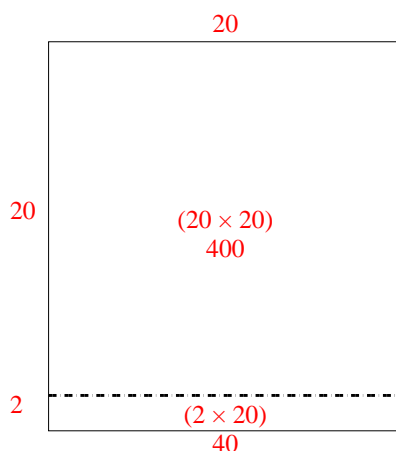
4)  $25 \times 20 =$



5)  $20 \times 24 =$



6)  $22 \times 20 =$



Answers

1. **1,290**

2. **960**

3. **460**

4. **500**

5. **480**

6. **440**