





Use the array provided to solve each problem.


1) $35 \times 17 =$




2) $39 \times 16 =$




3) $38 \times 47 =$



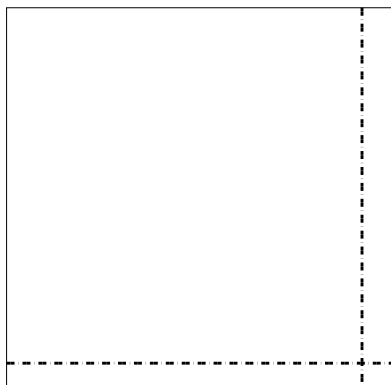
4) $35 \times 26 =$



5) $37 \times 32 =$



6) $32 \times 33 =$



Answers

1. _____

2. _____

3. _____

4. _____

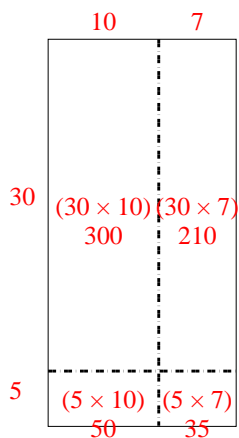
5. _____

6. _____

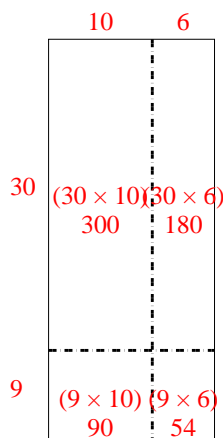


Use the array provided to solve each problem.

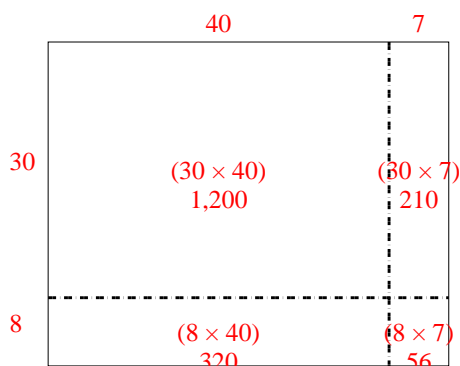
1) $35 \times 17 =$



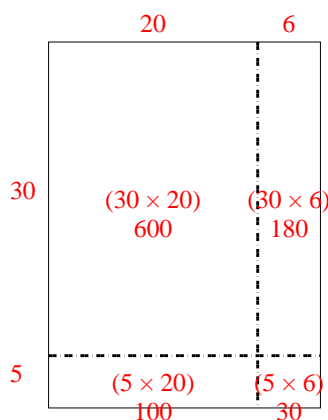
2) $39 \times 16 =$



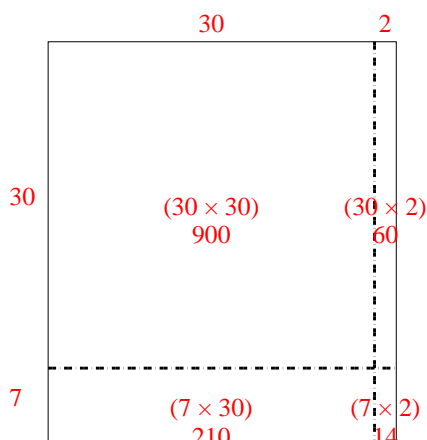
3) $38 \times 47 =$



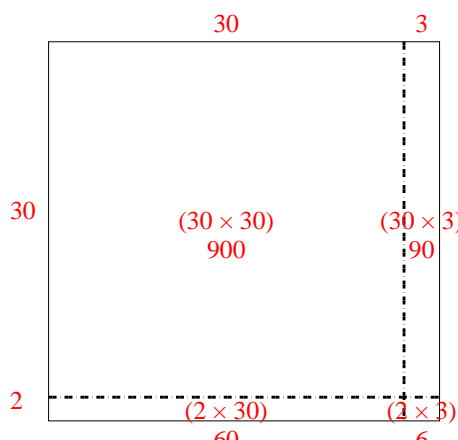
4) $35 \times 26 =$



5) $37 \times 32 =$



6) $32 \times 33 =$



Answers

1. **595**

2. **624**

3. **1,786**

4. **910**

5. **1,184**

6. **1,056**