





Use the array provided to solve each problem.


1) $36 \times 55 =$




2) $42 \times 26 =$




3) $37 \times 48 =$




4) $44 \times 59 =$



5) $46 \times 39 =$



6) $47 \times 59 =$



Answers

1. _____

2. _____

3. _____

4. _____

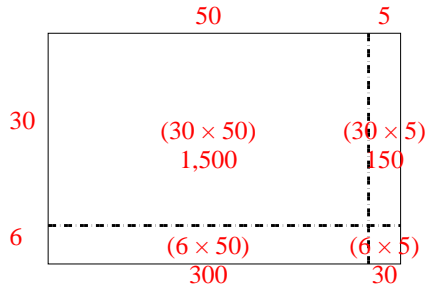
5. _____

6. _____

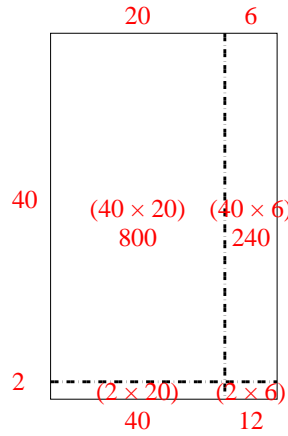


Use the array provided to solve each problem.

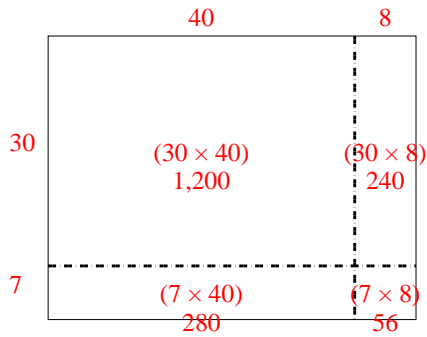
1) $36 \times 55 =$



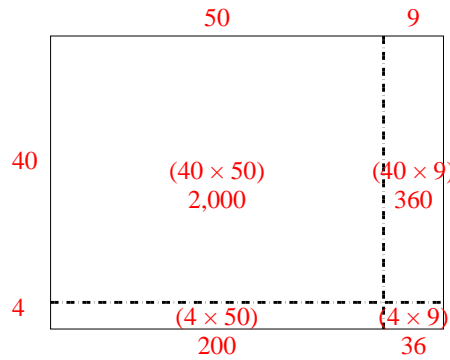
2) $42 \times 26 =$



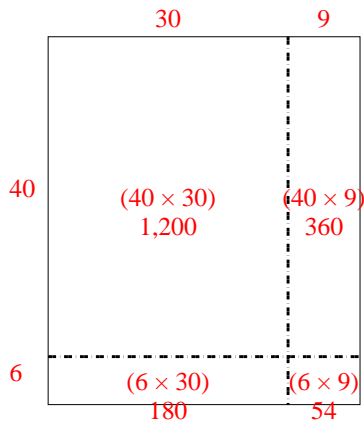
3) $37 \times 48 =$



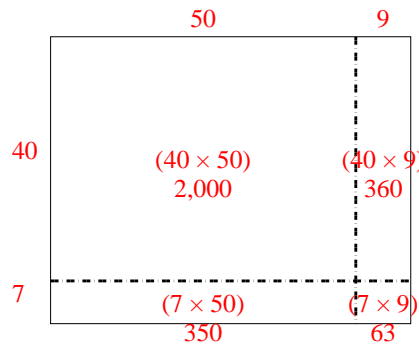
4) $44 \times 59 =$



5) $46 \times 39 =$



6) $47 \times 59 =$



Answers

1. 1,980

2. 1,092

3. 1,776

4. 2,596

5. 1,794

6. 2,773