





Use the array provided to solve each problem.

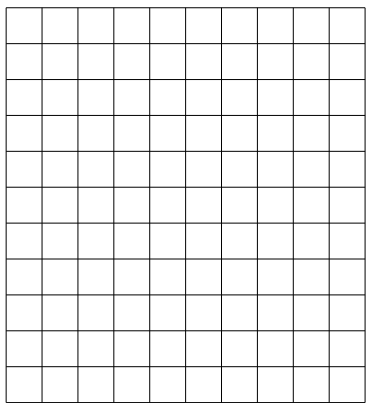
1)  $14 \times 10 =$




2)  $15 \times 10 =$




3)  $11 \times 10 =$




4)  $13 \times 10 =$



5)  $10 \times 15 =$



6)  $12 \times 10 =$



Answers

1. \_\_\_\_\_

2. \_\_\_\_\_

3. \_\_\_\_\_

4. \_\_\_\_\_

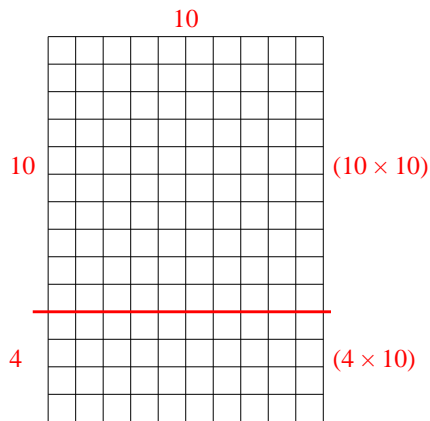
5. \_\_\_\_\_

6. \_\_\_\_\_

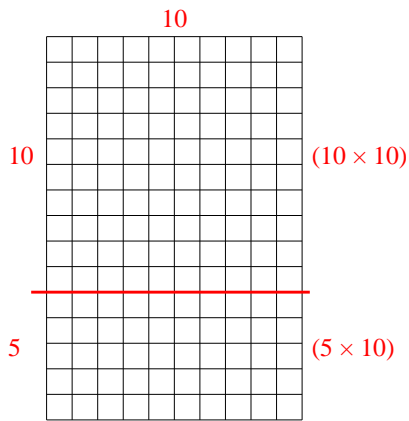


Use the array provided to solve each problem.

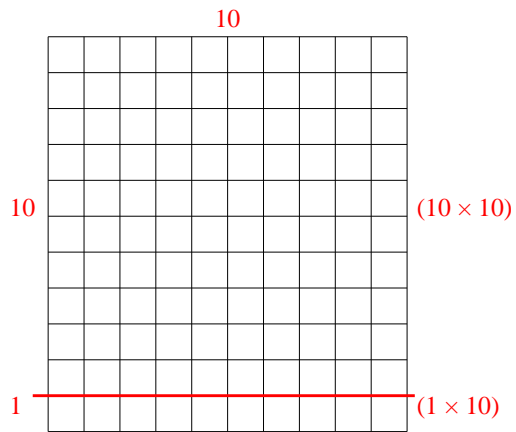
1)  $14 \times 10 =$



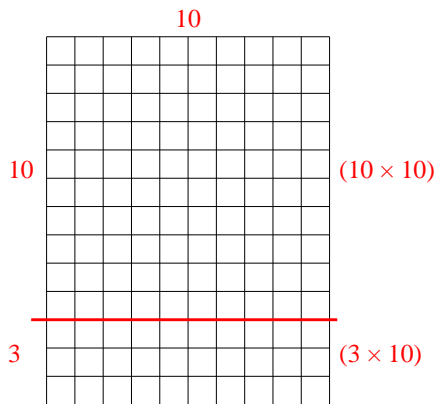
2)  $15 \times 10 =$



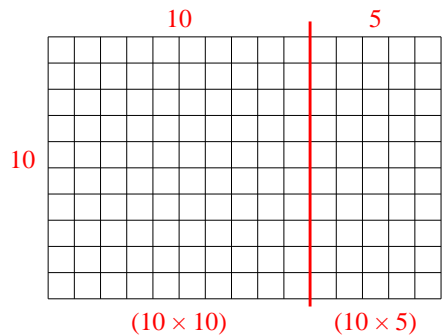
3)  $11 \times 10 =$



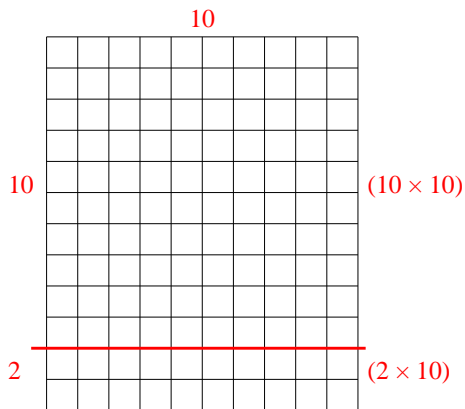
4)  $13 \times 10 =$



5)  $10 \times 15 =$



6)  $12 \times 10 =$



Answers

1. 140

2. 150

3. 110

4. 130

5. 150

6. 120