




Use the array provided to solve each problem.


1)  $10 \times 13 =$




2)  $18 \times 10 =$




3)  $14 \times 10 =$




4)  $16 \times 10 =$



5)  $10 \times 15 =$



6)  $10 \times 14 =$



Answers

1. \_\_\_\_\_

2. \_\_\_\_\_

3. \_\_\_\_\_

4. \_\_\_\_\_

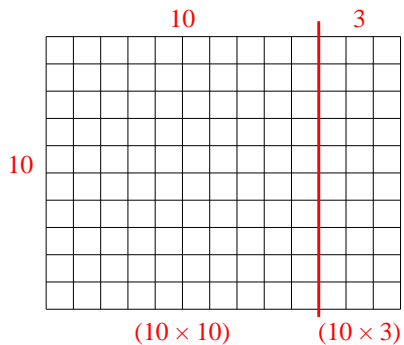
5. \_\_\_\_\_

6. \_\_\_\_\_



Use the array provided to solve each problem.

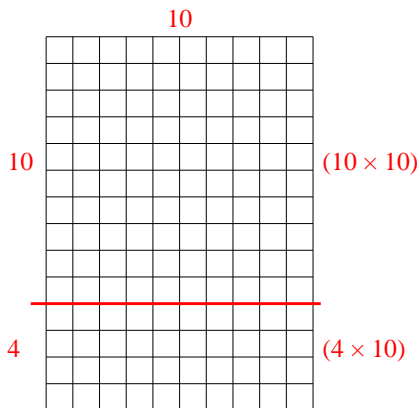
1)  $10 \times 13 =$



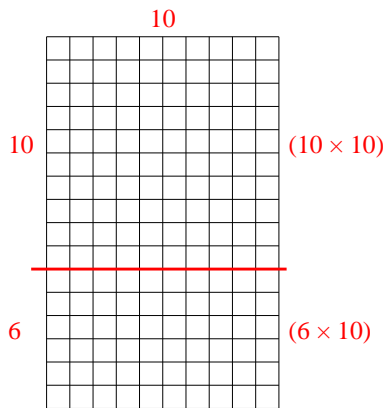
2)  $18 \times 10 =$



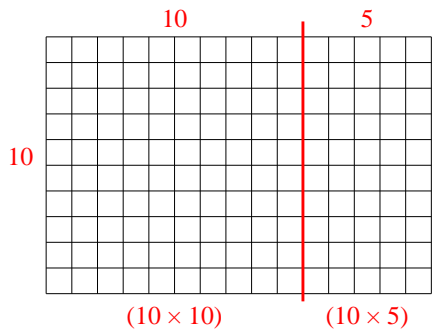
3)  $14 \times 10 =$



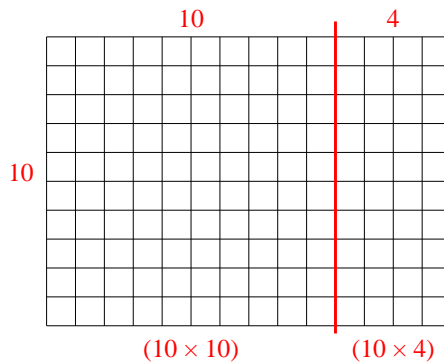
4)  $16 \times 10 =$



5)  $10 \times 15 =$



6)  $10 \times 14 =$



Answers

1. **130**

2. **180**

3. **140**

4. **160**

5. **150**

6. **140**