



Use lattice multiplication to solve each problem.

1)  $828 \times 35 =$



2)  $953 \times 85 =$



3)  $706 \times 55 =$



4)  $862 \times 57 =$



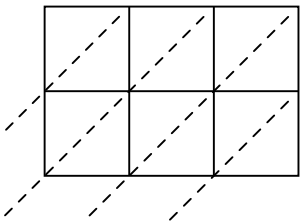
5)  $350 \times 99 =$



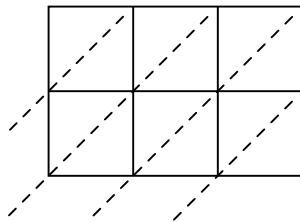
6)  $488 \times 19 =$



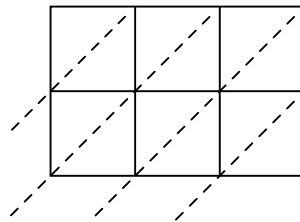
7)  $543 \times 53 =$



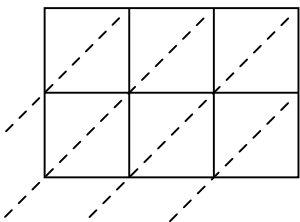
8)  $387 \times 83 =$



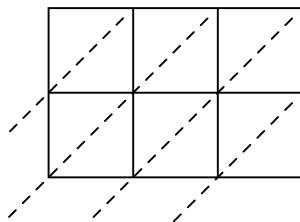
9)  $702 \times 60 =$



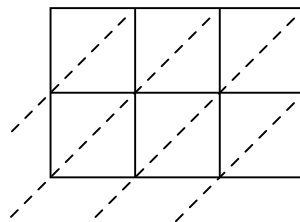
10)  $244 \times 16 =$



11)  $848 \times 21 =$



12)  $673 \times 70 =$



**Answers**

1. \_\_\_\_\_

2. \_\_\_\_\_

3. \_\_\_\_\_

4. \_\_\_\_\_

5. \_\_\_\_\_

6. \_\_\_\_\_

7. \_\_\_\_\_

8. \_\_\_\_\_

9. \_\_\_\_\_

10. \_\_\_\_\_

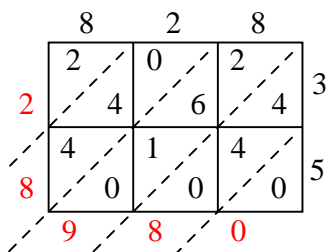
11. \_\_\_\_\_

12. \_\_\_\_\_

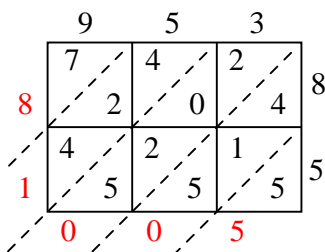


Use lattice multiplication to solve each problem.

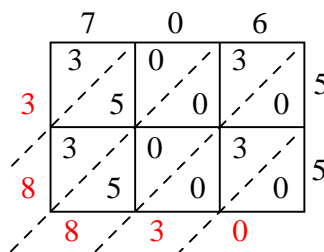
1)  $828 \times 35 =$



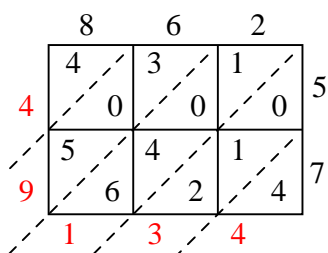
2)  $953 \times 85 =$



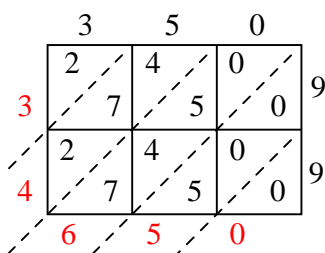
3)  $706 \times 55 =$



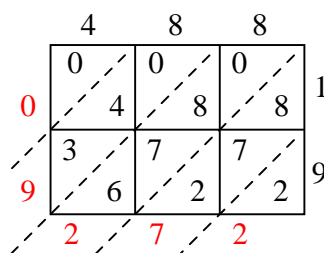
4)  $862 \times 57 =$



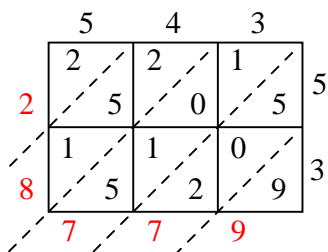
5)  $350 \times 99 =$



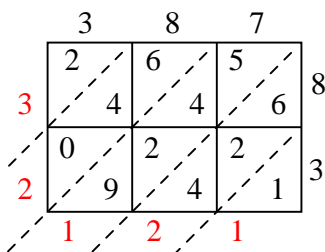
6)  $488 \times 19 =$



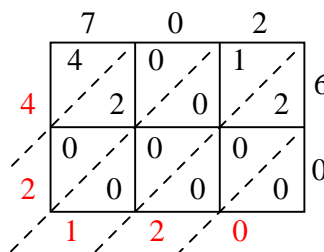
7)  $543 \times 53 =$



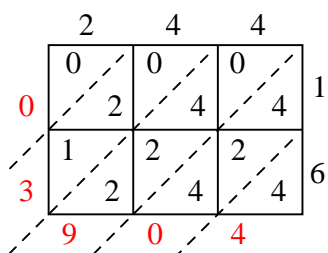
8)  $387 \times 83 =$



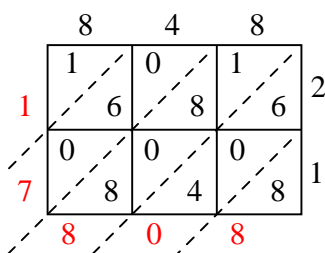
9)  $702 \times 60 =$



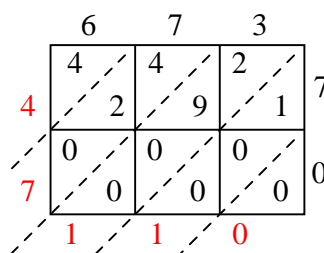
10)  $244 \times 16 =$



11)  $848 \times 21 =$



12)  $673 \times 70 =$



Answers

1. **28,980**

2. **81,005**

3. **38,830**

4. **49,134**

5. **34,650**

6. **9,272**

7. **28,779**

8. **32,121**

9. **42,120**

10. **3,904**

11. **17,808**

12. **47,110**